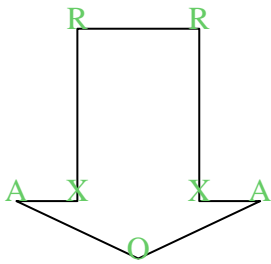





Cuenta el número de ángulos Agudos, Obtusos, Rectos y Reflejos dentro de cada figura.

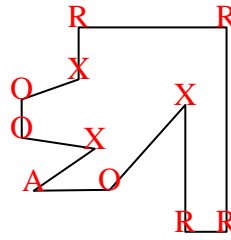
Ej)



1)



2)



Respuestas

A O R X

Ej. 2 1 2 2

1. 0 0 4 0

2. 1 3 4 3

3. 1 1 3 1

4. 2 4 1 2

5. 0 2 3 0

6. 4 1 0 3

7. 2 2 0 0

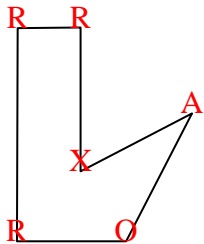
8. 3 0 0 0

9. 0 0 8 4

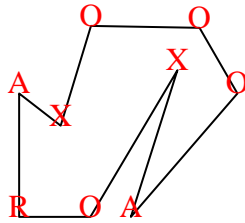
10. 2 2 0 1

11. 1 2 1 0

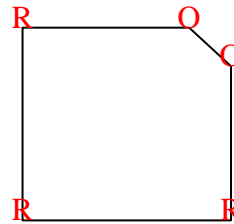
3)



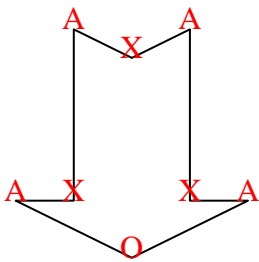
4)



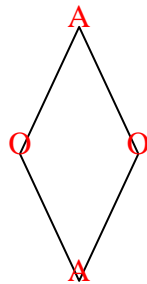
5)



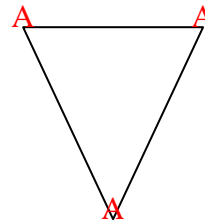
6)



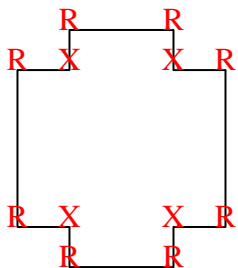
7)



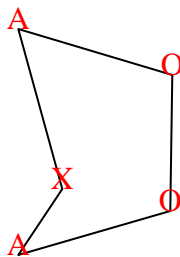
8)



9)



10)



11)

