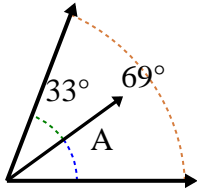




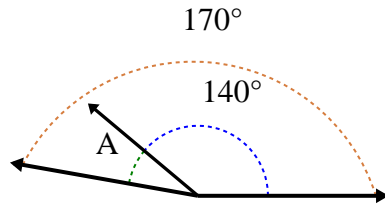
Determina el valor de 'A'.

Respuestas

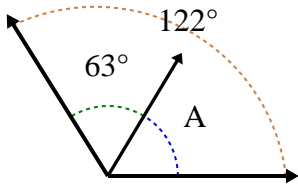
1)



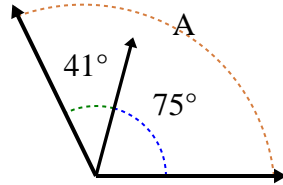
2)



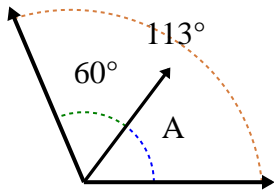
3)



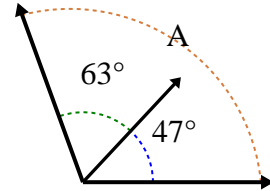
4)



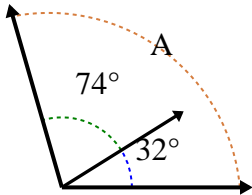
5)



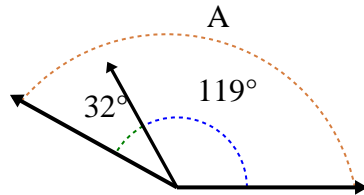
6)



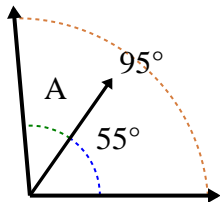
7)



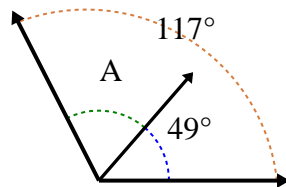
8)



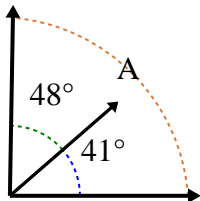
9)



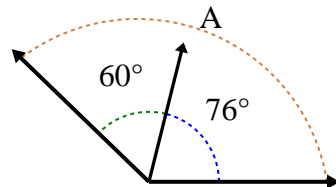
10)



11)



12)

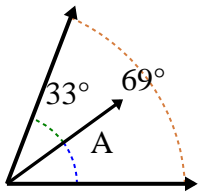


- 1. _____
- 2. _____
- 3. _____
- 4. _____
- 5. _____
- 6. _____
- 7. _____
- 8. _____
- 9. _____
- 10. _____
- 11. _____
- 12. _____

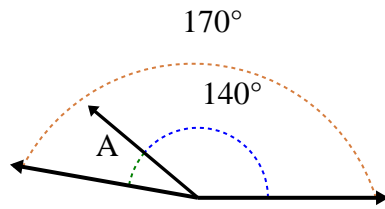


Determina el valor de 'A'.

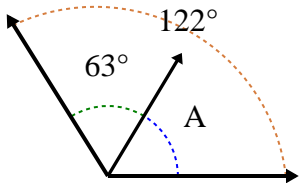
1)



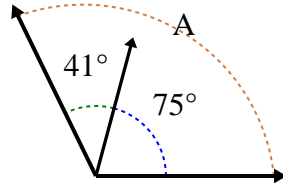
2)



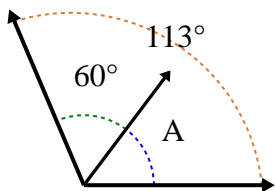
3)



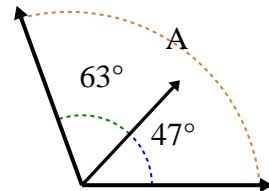
4)



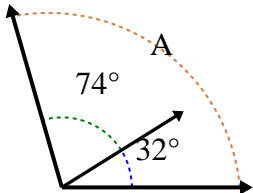
5)



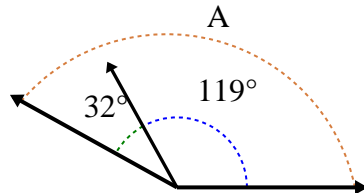
6)



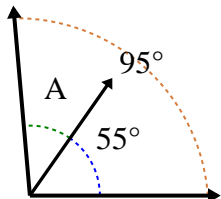
7)



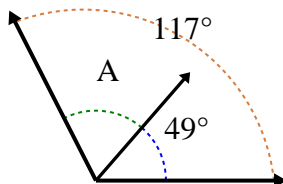
8)



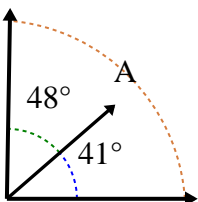
9)



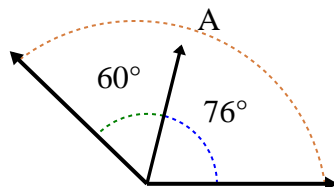
10)



11)



12)



Respuestas

1. **36°**

2. **30°**

3. **59°**

4. **116°**

5. **53°**

6. **110°**

7. **106°**

8. **151°**

9. **40°**

10. **68°**

11. **89°**

12. **136°**