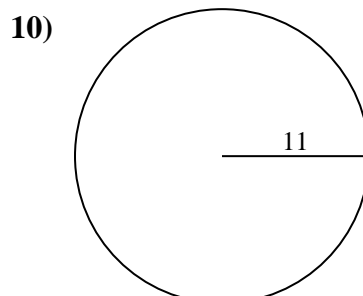
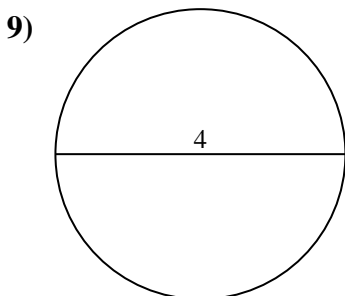
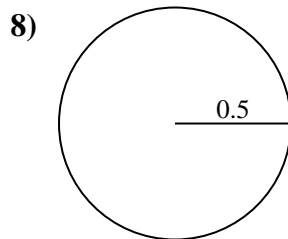
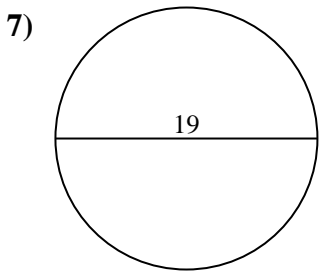
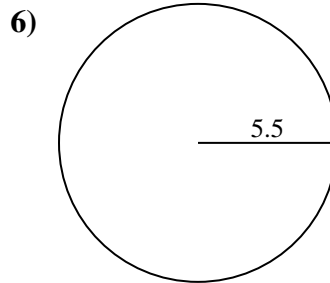
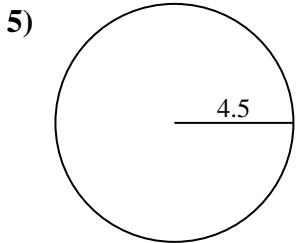
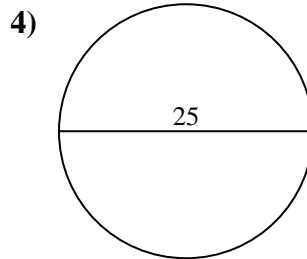
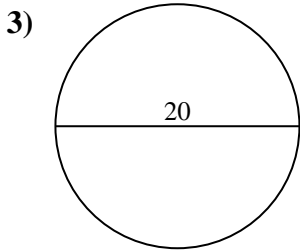
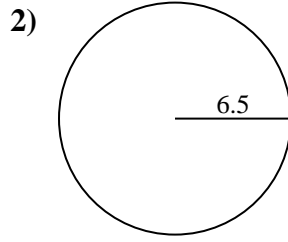
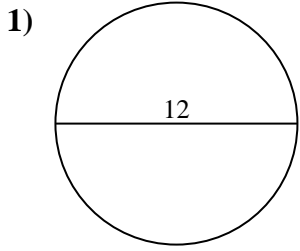




Encuentra el área y circunferencia de cada círculo. Los círculos no están a escala.



**Respuestas**

1a. \_\_\_\_\_

1c. \_\_\_\_\_

2a. \_\_\_\_\_

2c. \_\_\_\_\_

3a. \_\_\_\_\_

3c. \_\_\_\_\_

4a. \_\_\_\_\_

4c. \_\_\_\_\_

5a. \_\_\_\_\_

5c. \_\_\_\_\_

6a. \_\_\_\_\_

6c. \_\_\_\_\_

7a. \_\_\_\_\_

7c. \_\_\_\_\_

8a. \_\_\_\_\_

8c. \_\_\_\_\_

9a. \_\_\_\_\_

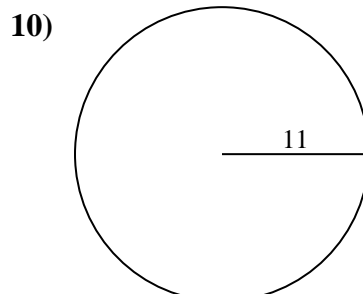
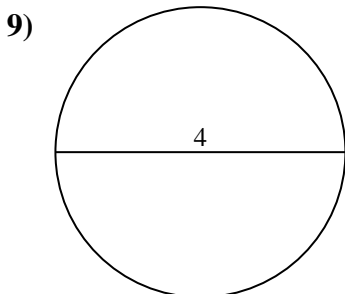
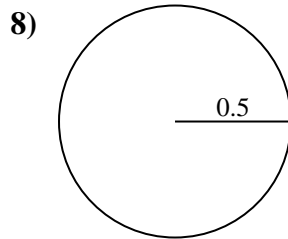
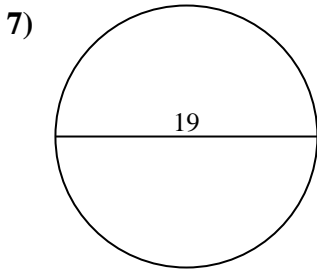
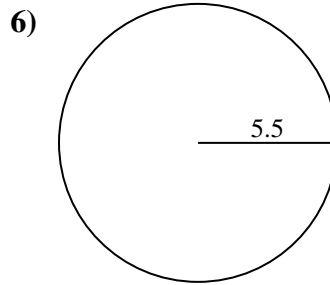
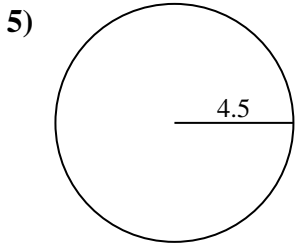
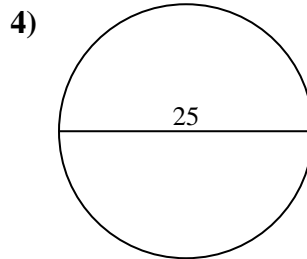
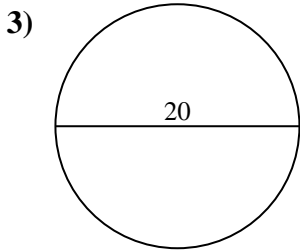
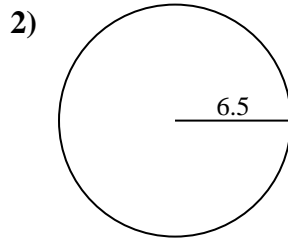
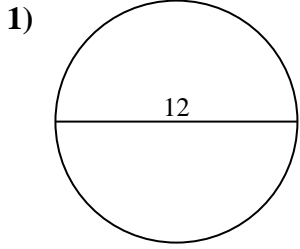
9c. \_\_\_\_\_

10a. \_\_\_\_\_

10c. \_\_\_\_\_



Encuentra el área y circunferencia de cada círculo. Los círculos no están a escala.



**Respuestas**

1a. 113.1 cm<sup>2</sup>

1c. 37.7 cm

2a. 132.73 cm<sup>2</sup>

2c. 40.84 cm

3a. 314.16 cm<sup>2</sup>

3c. 62.83 cm

4a. 490.87 cm<sup>2</sup>

4c. 78.54 cm

5a. 63.62 cm<sup>2</sup>

5c. 28.27 cm

6a. 95.03 cm<sup>2</sup>

6c. 34.56 cm

7a. 283.53 cm<sup>2</sup>

7c. 59.69 cm

8a. 0.79 cm<sup>2</sup>

8c. 3.14 cm

9a. 12.57 cm<sup>2</sup>

9c. 12.57 cm

10a. 380.13 cm<sup>2</sup>

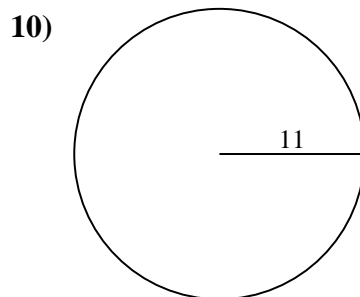
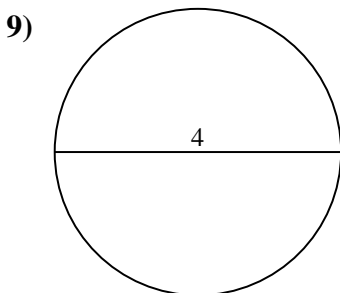
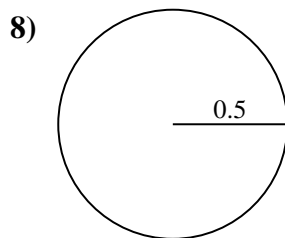
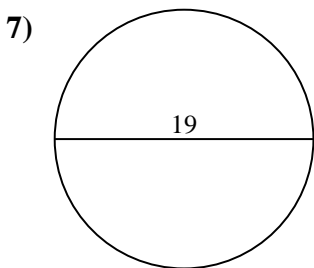
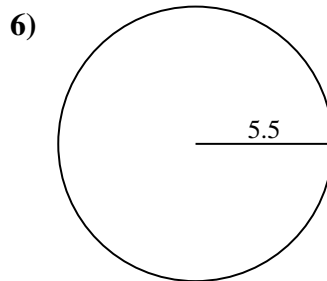
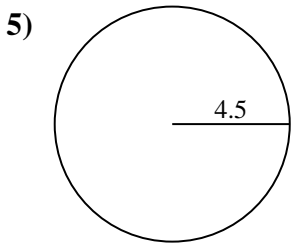
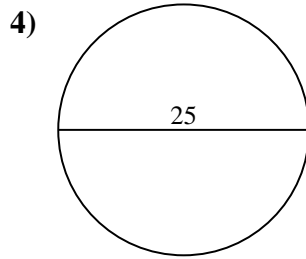
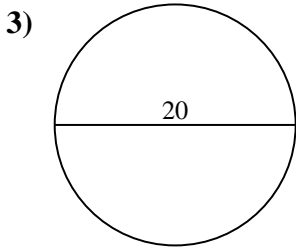
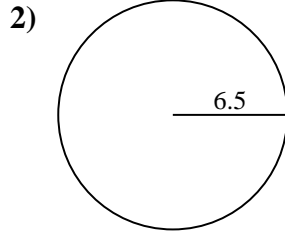
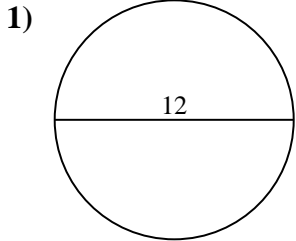
10c. 69.12 cm



Encuentra el área y circunferencia de cada círculo. Los círculos no están a escala.

|                       |                        |                      |                        |                        |
|-----------------------|------------------------|----------------------|------------------------|------------------------|
| 113.1 cm <sup>2</sup> | 283.53 cm <sup>2</sup> | 62.83 cm             | 132.73 cm <sup>2</sup> | 380.13 cm <sup>2</sup> |
| 34.56 cm              | 314.16 cm <sup>2</sup> | 0.79 cm <sup>2</sup> | 12.57 cm               | 78.54 cm               |
| 40.84 cm              | 3.14 cm                | 69.12 cm             | 490.87 cm <sup>2</sup> | 95.03 cm <sup>2</sup>  |
| 37.7 cm               | 63.62 cm <sup>2</sup>  | 59.69 cm             | 28.27 cm               | 12.57 cm <sup>2</sup>  |

**Respuestas**



1a. \_\_\_\_\_

1c. \_\_\_\_\_

2a. \_\_\_\_\_

2c. \_\_\_\_\_

3a. \_\_\_\_\_

3c. \_\_\_\_\_

4a. \_\_\_\_\_

4c. \_\_\_\_\_

5a. \_\_\_\_\_

5c. \_\_\_\_\_

6a. \_\_\_\_\_

6c. \_\_\_\_\_

7a. \_\_\_\_\_

7c. \_\_\_\_\_

8a. \_\_\_\_\_

8c. \_\_\_\_\_

9a. \_\_\_\_\_

9c. \_\_\_\_\_

10a. \_\_\_\_\_

10c. \_\_\_\_\_