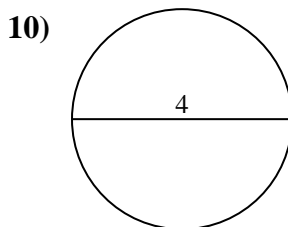
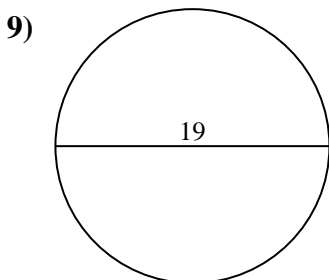
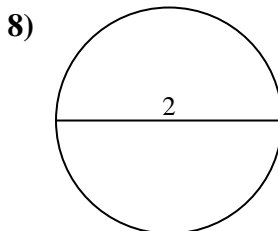
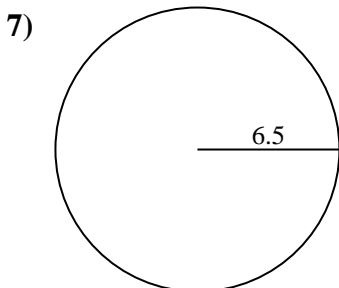
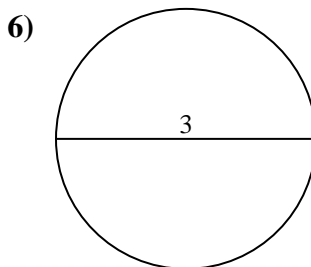
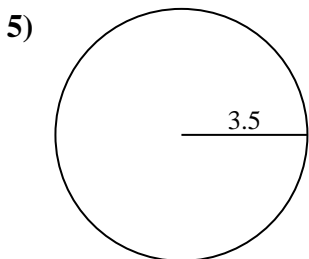
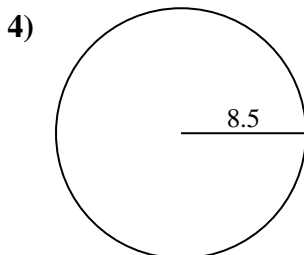
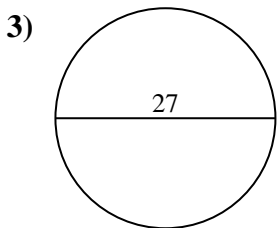
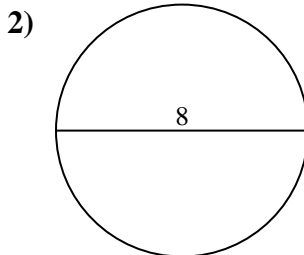
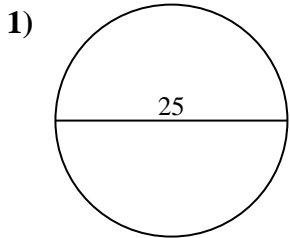




Encuentra el área y circunferencia de cada círculo. Los círculos no están a escala.



Respuestas

1a. _____

1c. _____

2a. _____

2c. _____

3a. _____

3c. _____

4a. _____

4c. _____

5a. _____

5c. _____

6a. _____

6c. _____

7a. _____

7c. _____

8a. _____

8c. _____

9a. _____

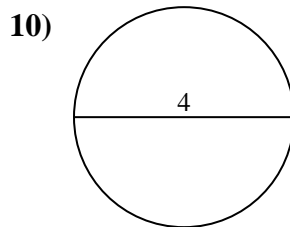
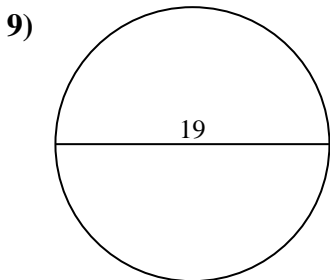
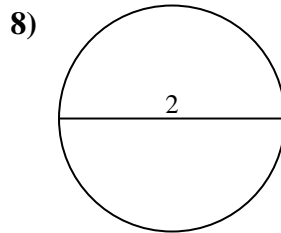
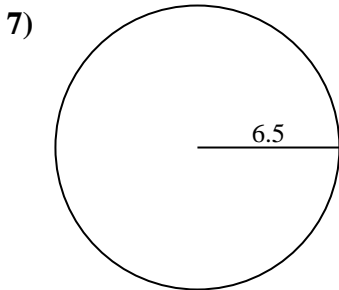
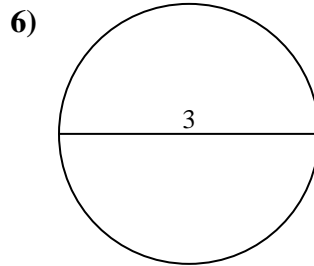
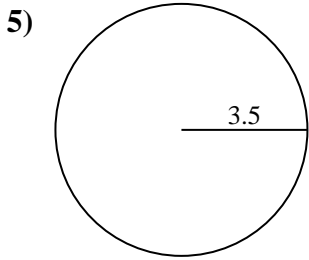
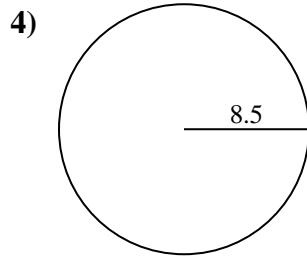
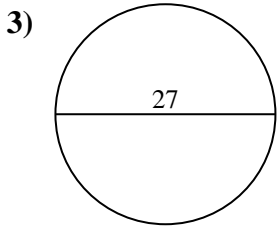
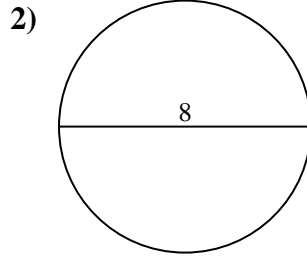
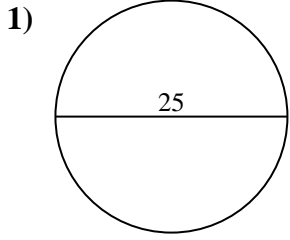
9c. _____

10a. _____

10c. _____



Encuentra el área y circunferencia de cada círculo. Los círculos no están a escala.



Respuestas

1a. 490.87 cm²

1c. 78.54 cm

2a. 50.27 cm²

2c. 25.13 cm

3a. 572.56 cm²

3c. 84.82 cm

4a. 226.98 cm²

4c. 53.41 cm

5a. 38.48 cm²

5c. 21.99 cm

6a. 7.07 cm²

6c. 9.42 cm

7a. 132.73 cm²

7c. 40.84 cm

8a. 3.14 cm²

8c. 6.28 cm

9a. 283.53 cm²

9c. 59.69 cm

10a. 12.57 cm²

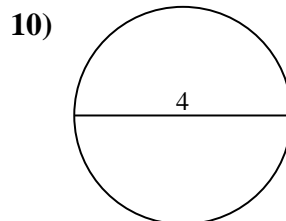
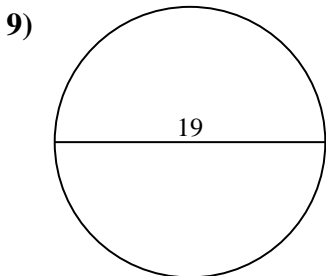
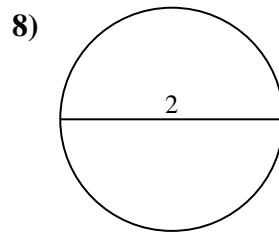
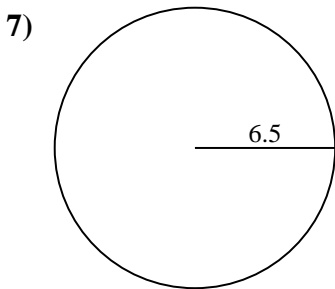
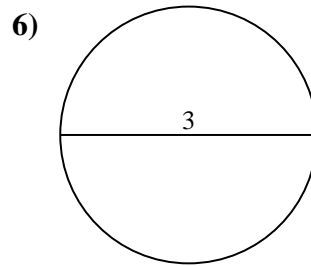
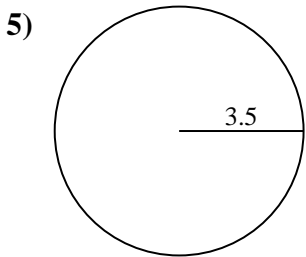
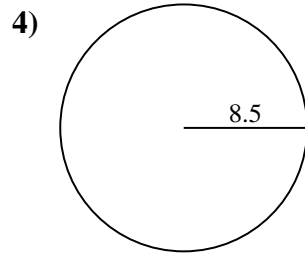
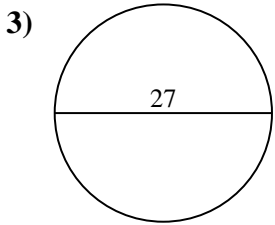
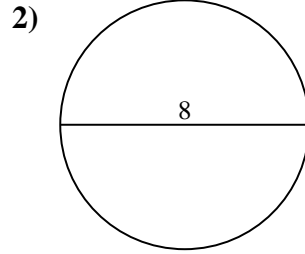
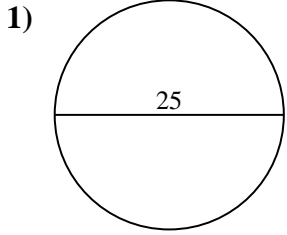
10c. 12.57 cm



Encuentra el área y circunferencia de cada círculo. Los círculos no están a escala.

78.54 cm	132.73 cm ²	59.69 cm	6.28 cm	50.27 cm ²
53.41 cm	9.42 cm	12.57 cm	25.13 cm	84.82 cm
21.99 cm	3.14 cm ²	572.56 cm ²	12.57 cm ²	490.87 cm ²
38.48 cm ²	40.84 cm	283.53 cm ²	7.07 cm ²	226.98 cm ²

Respuestas



1a. _____

1c. _____

2a. _____

2c. _____

3a. _____

3c. _____

4a. _____

4c. _____

5a. _____

5c. _____

6a. _____

6c. _____

7a. _____

7c. _____

8a. _____

8c. _____

9a. _____

9c. _____

10a. _____

10c. _____