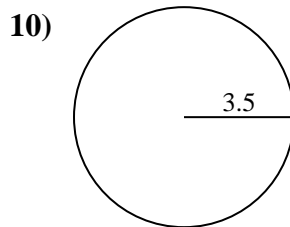
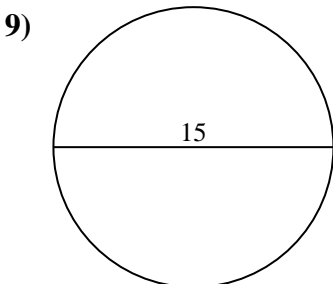
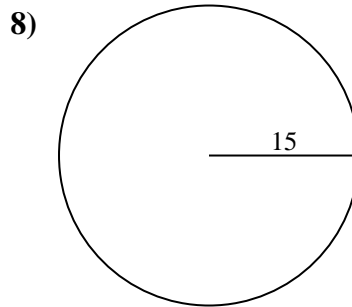
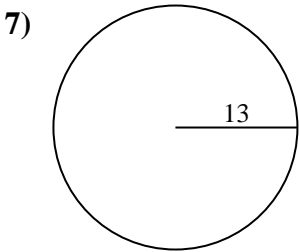
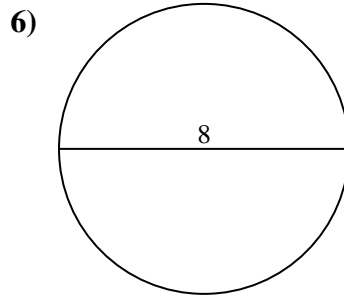
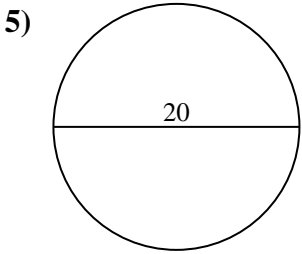
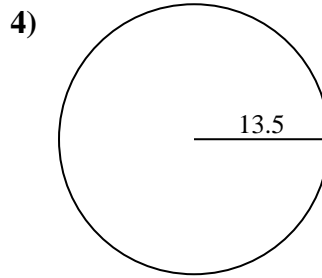
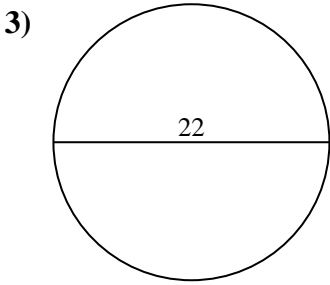
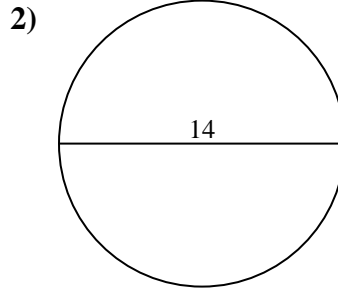
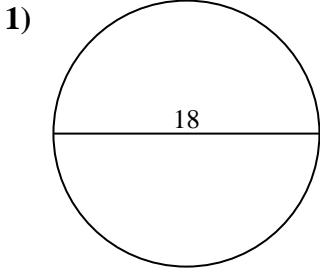




Encuentra el área y circunferencia de cada círculo. Los círculos no están a escala.



Respuestas

1a. _____

1c. _____

2a. _____

2c. _____

3a. _____

3c. _____

4a. _____

4c. _____

5a. _____

5c. _____

6a. _____

6c. _____

7a. _____

7c. _____

8a. _____

8c. _____

9a. _____

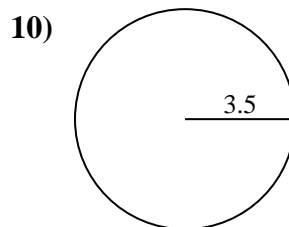
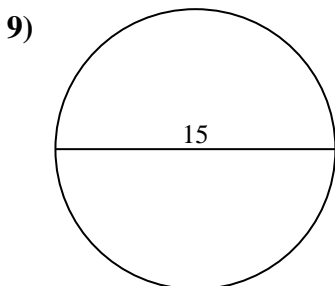
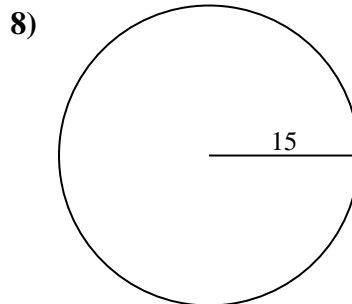
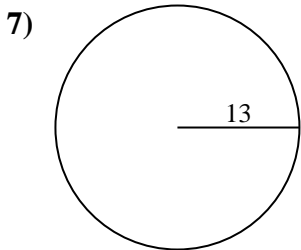
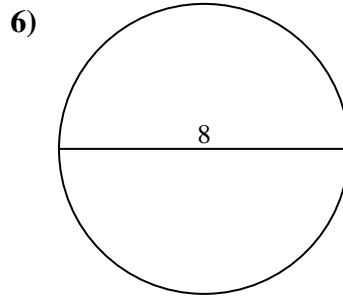
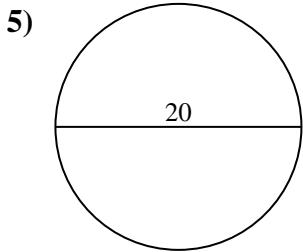
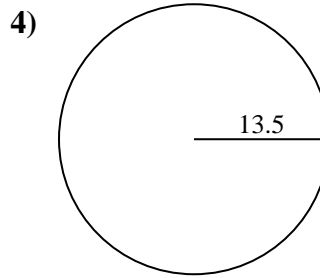
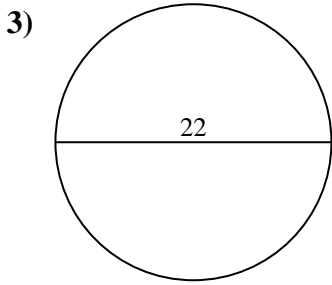
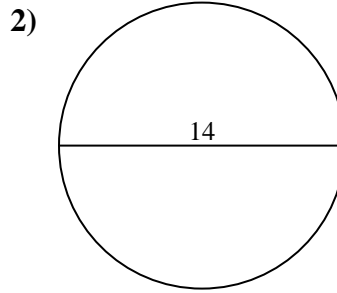
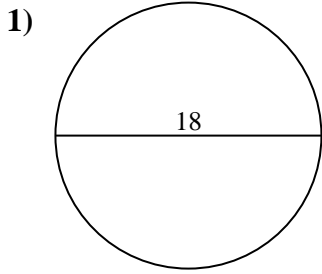
9c. _____

10a. _____

10c. _____



Encuentra el área y circunferencia de cada círculo. Los círculos no están a escala.



Respuestas

1a. 254.47 cm²

1c. 56.55 cm

2a. 153.94 cm²

2c. 43.98 cm

3a. 380.13 cm²

3c. 69.12 cm

4a. 572.56 cm²

4c. 84.82 cm

5a. 314.16 cm²

5c. 62.83 cm

6a. 50.27 cm²

6c. 25.13 cm

7a. 530.93 cm²

7c. 81.68 cm

8a. 706.86 cm²

8c. 94.25 cm

9a. 176.71 cm²

9c. 47.12 cm

10a. 38.48 cm²

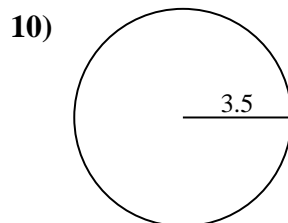
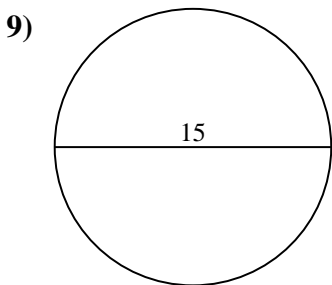
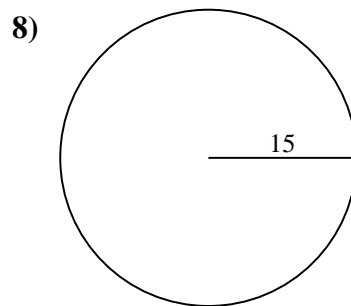
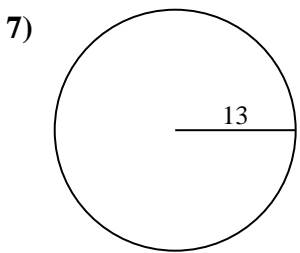
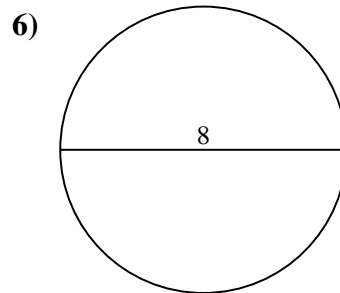
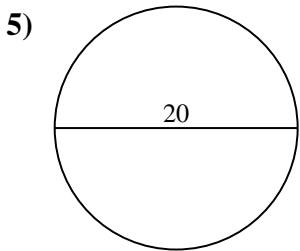
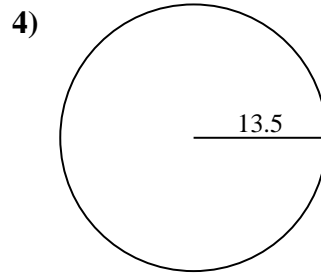
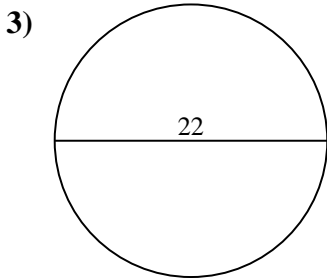
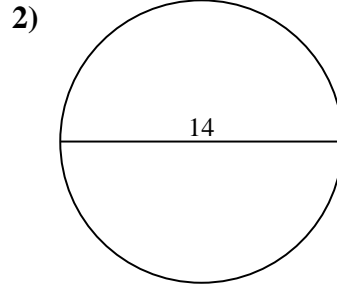
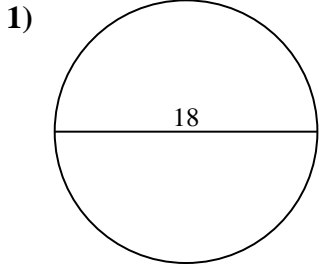
10c. 21.99 cm



Encuentra el área y circunferencia de cada círculo. Los círculos no están a escala.

| | | | | |
|------------------------|------------------------|------------------------|------------------------|------------------------|
| 380.13 cm ² | 62.83 cm | 69.12 cm | 94.25 cm | 38.48 cm ² |
| 56.55 cm | 530.93 cm ² | 314.16 cm ² | 572.56 cm ² | 84.82 cm |
| 21.99 cm | 43.98 cm | 176.71 cm ² | 50.27 cm ² | 706.86 cm ² |
| 254.47 cm ² | 81.68 cm | 25.13 cm | 47.12 cm | 153.94 cm ² |

Respuestas



1a. _____

1c. _____

2a. _____

2c. _____

3a. _____

3c. _____

4a. _____

4c. _____

5a. _____

5c. _____

6a. _____

6c. _____

7a. _____

7c. _____

8a. _____

8c. _____

9a. _____

9c. _____

10a. _____

10c. _____