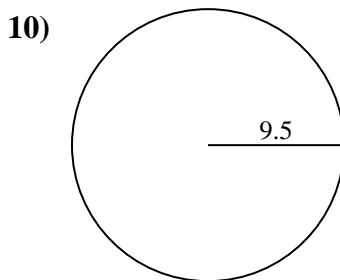
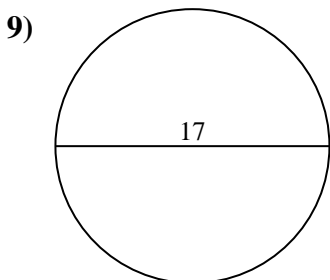
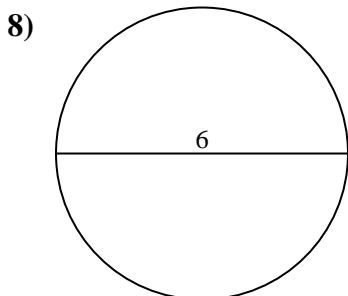
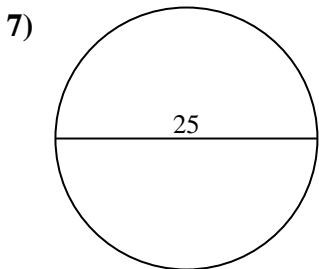
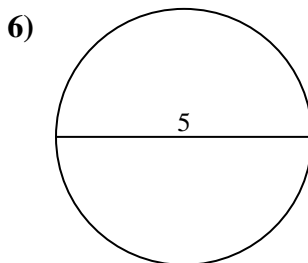
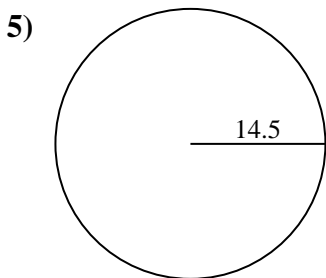
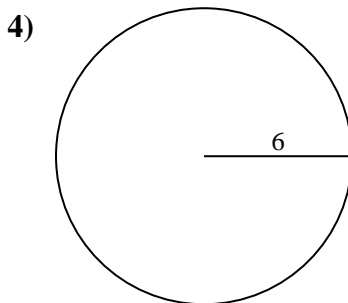
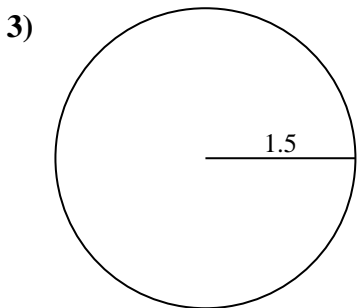
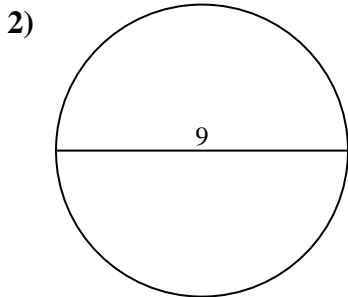
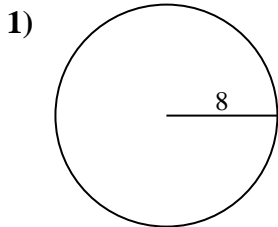




Encuentra el área y circunferencia de cada círculo. Los círculos no están a escala.



Respuestas

1a. _____

1c. _____

2a. _____

2c. _____

3a. _____

3c. _____

4a. _____

4c. _____

5a. _____

5c. _____

6a. _____

6c. _____

7a. _____

7c. _____

8a. _____

8c. _____

9a. _____

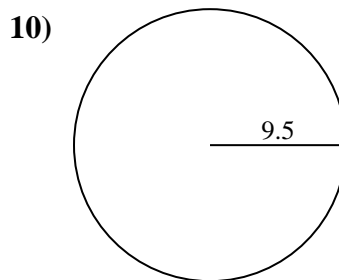
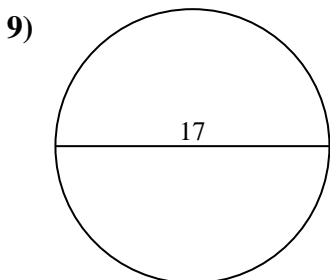
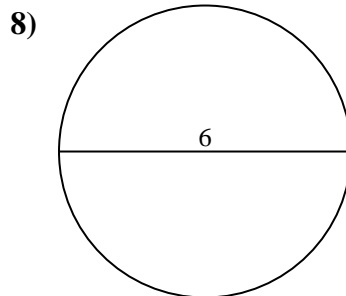
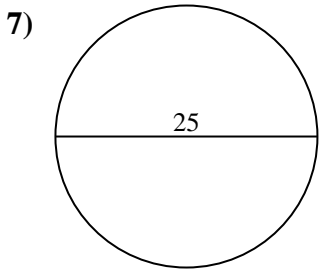
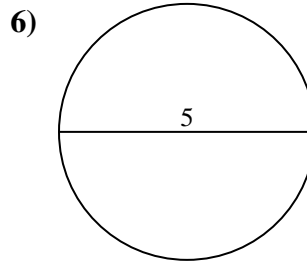
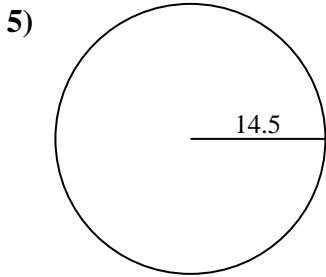
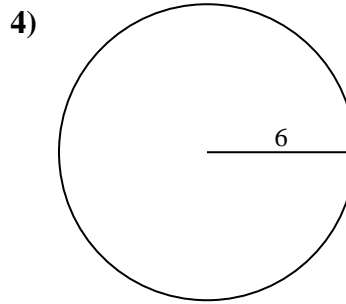
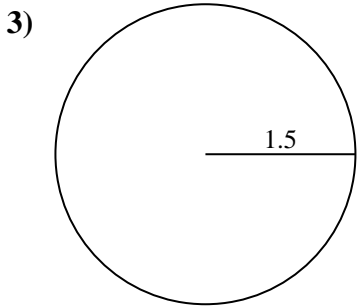
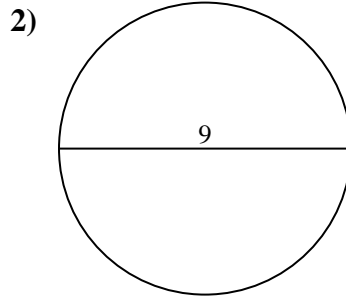
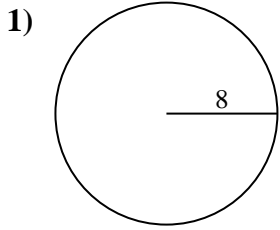
9c. _____

10a. _____

10c. _____



Encuentra el área y circunferencia de cada círculo. Los círculos no están a escala.



Respuestas

1a. 201.06 cm²

1c. 50.27 cm

2a. 63.62 cm²

2c. 28.27 cm

3a. 7.07 cm²

3c. 9.42 cm

4a. 113.1 cm²

4c. 37.7 cm

5a. 660.52 cm²

5c. 91.11 cm

6a. 19.63 cm²

6c. 15.71 cm

7a. 490.87 cm²

7c. 78.54 cm

8a. 28.27 cm²

8c. 18.85 cm

9a. 226.98 cm²

9c. 53.41 cm

10a. 283.53 cm²

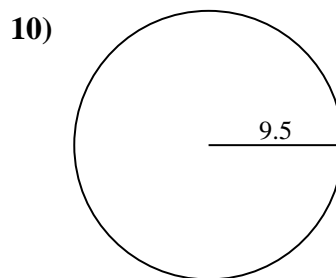
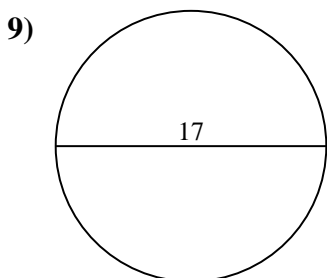
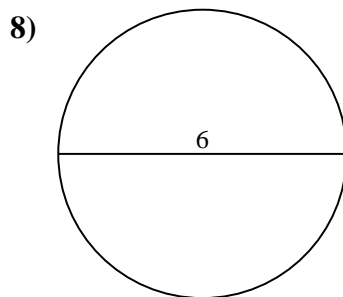
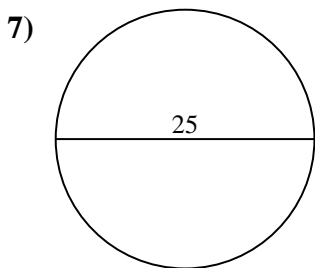
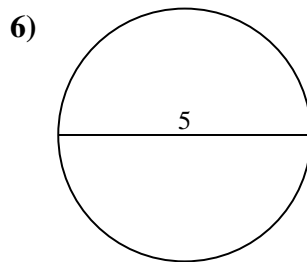
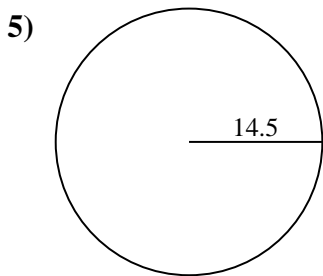
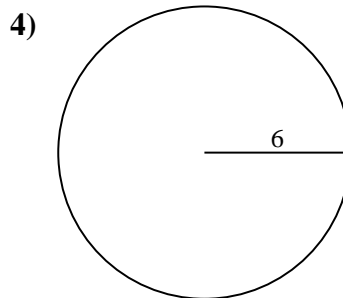
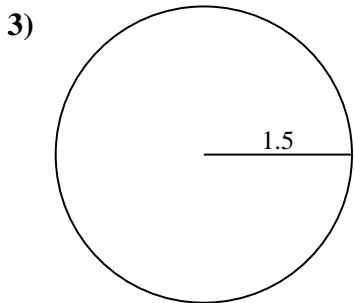
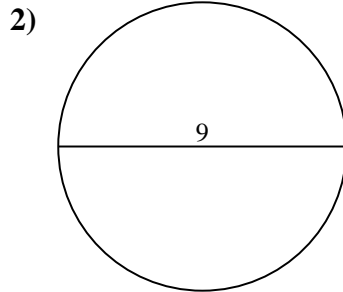
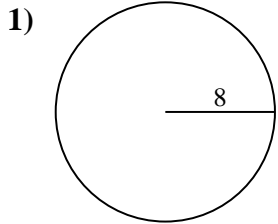
10c. 59.69 cm



Encuentra el área y circunferencia de cada círculo. Los círculos no están a escala.

19.63 cm ²	91.11 cm	15.71 cm	78.54 cm	201.06 cm ²
63.62 cm ²	18.85 cm	59.69 cm	283.53 cm ²	37.7 cm
9.42 cm	53.41 cm	660.52 cm ²	226.98 cm ²	490.87 cm ²
50.27 cm	28.27 cm ²	28.27 cm	7.07 cm ²	113.1 cm ²

Respuestas



1a. _____

1c. _____

2a. _____

2c. _____

3a. _____

3c. _____

4a. _____

4c. _____

5a. _____

5c. _____

6a. _____

6c. _____

7a. _____

7c. _____

8a. _____

8c. _____

9a. _____

9c. _____

10a. _____

10c. _____