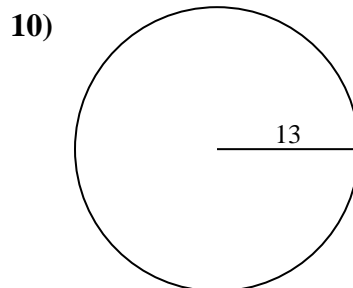
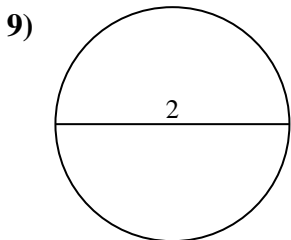
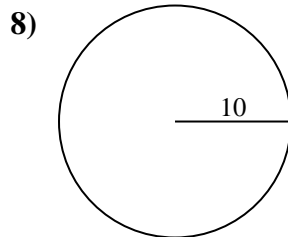
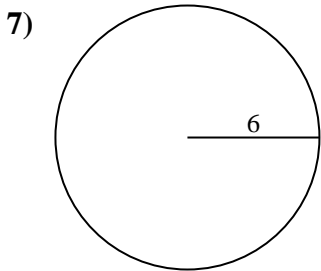
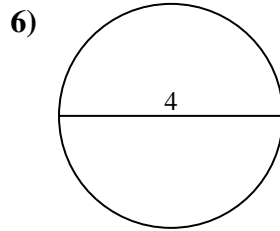
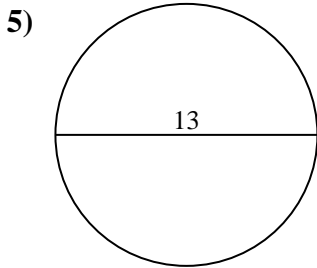
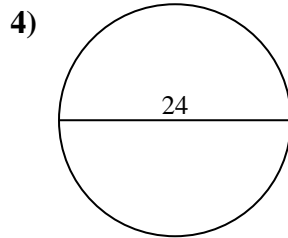
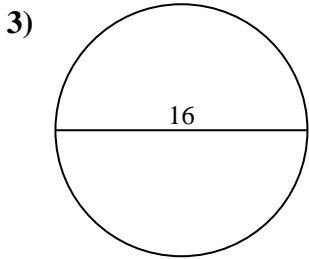
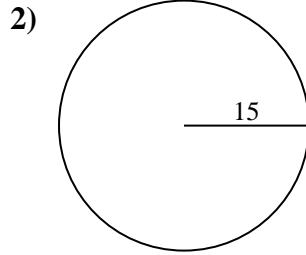
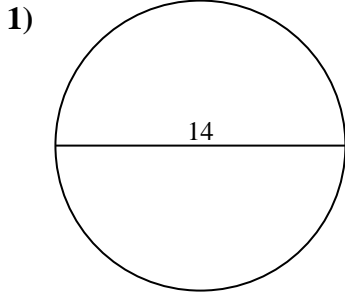




Encuentra el área y circunferencia de cada círculo. Los círculos no están a escala.



Respuestas

1a. _____

1c. _____

2a. _____

2c. _____

3a. _____

3c. _____

4a. _____

4c. _____

5a. _____

5c. _____

6a. _____

6c. _____

7a. _____

7c. _____

8a. _____

8c. _____

9a. _____

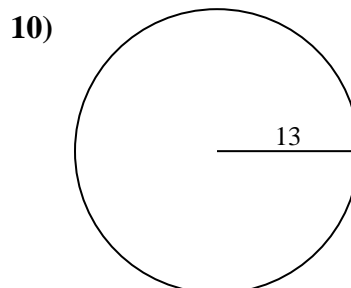
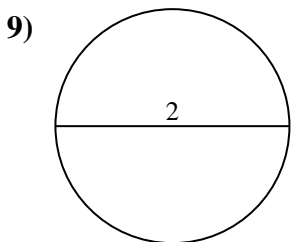
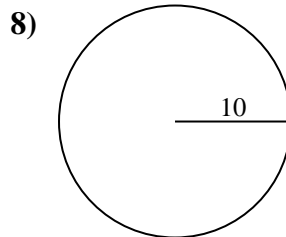
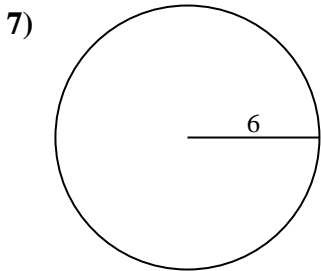
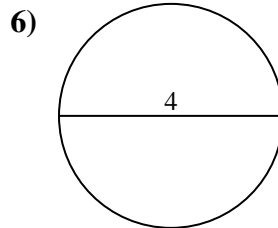
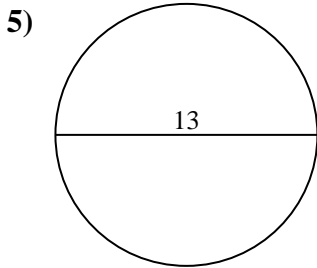
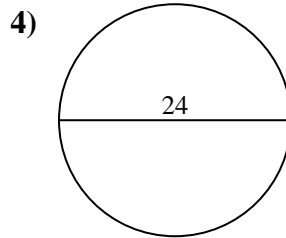
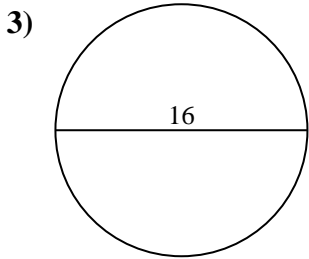
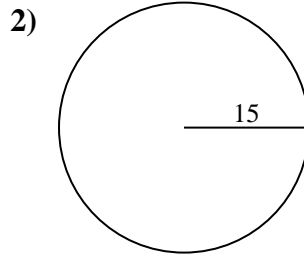
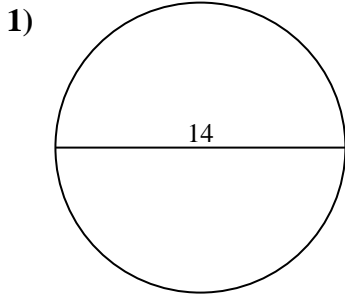
9c. _____

10a. _____

10c. _____



Encuentra el área y circunferencia de cada círculo. Los círculos no están a escala.



Respuestas

1a. 153.94 cm²

1c. 43.98 cm

2a. 706.86 cm²

2c. 94.25 cm

3a. 201.06 cm²

3c. 50.27 cm

4a. 452.39 cm²

4c. 75.4 cm

5a. 132.73 cm²

5c. 40.84 cm

6a. 12.57 cm²

6c. 12.57 cm

7a. 113.1 cm²

7c. 37.7 cm

8a. 314.16 cm²

8c. 62.83 cm

9a. 3.14 cm²

9c. 6.28 cm

10a. 530.93 cm²

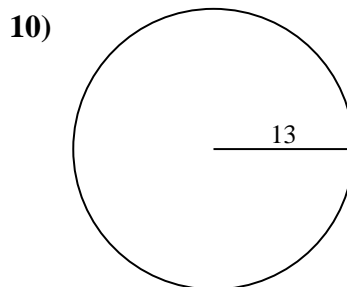
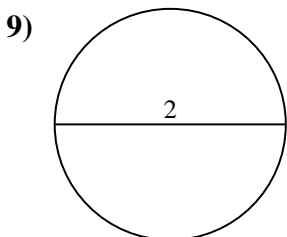
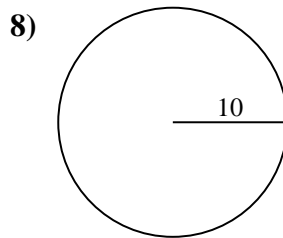
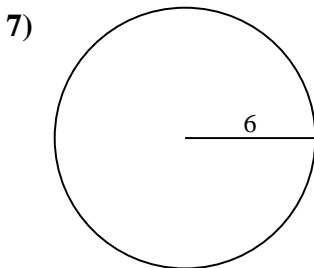
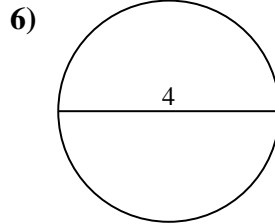
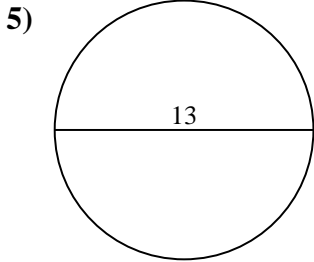
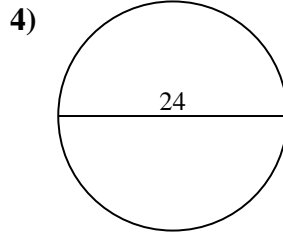
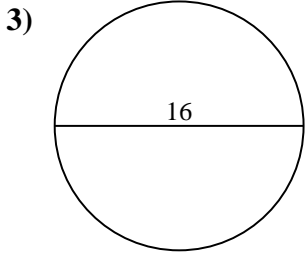
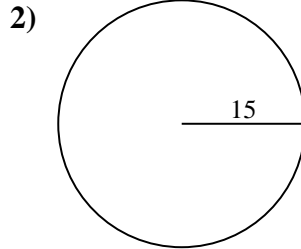
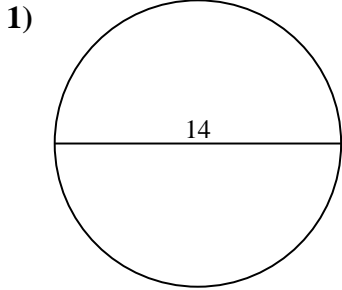
10c. 81.68 cm



Encuentra el área y circunferencia de cada círculo. Los círculos no están a escala.

12.57 cm ²	75.4 cm	530.93 cm ²	81.68 cm	706.86 cm ²
6.28 cm	153.94 cm ²	452.39 cm ²	132.73 cm ²	40.84 cm
50.27 cm	12.57 cm	3.14 cm ²	314.16 cm ²	43.98 cm
201.06 cm ²	113.1 cm ²	94.25 cm	62.83 cm	37.7 cm

Respuestas



1a. _____

1c. _____

2a. _____

2c. _____

3a. _____

3c. _____

4a. _____

4c. _____

5a. _____

5c. _____

6a. _____

6c. _____

7a. _____

7c. _____

8a. _____

8c. _____

9a. _____

9c. _____

10a. _____

10c. _____