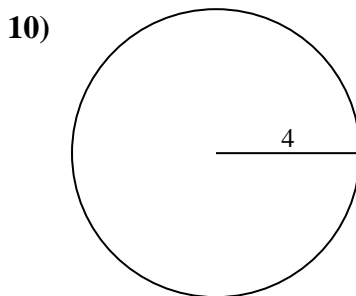
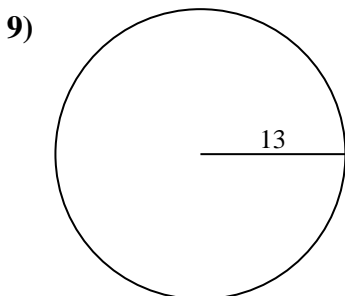
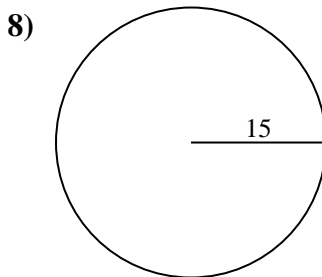
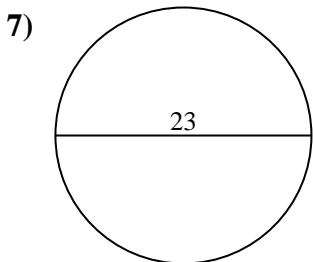
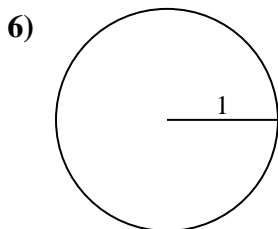
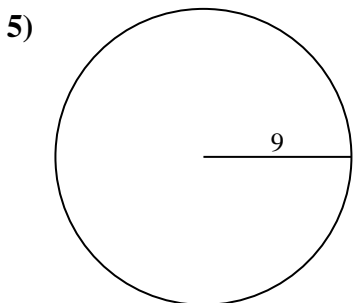
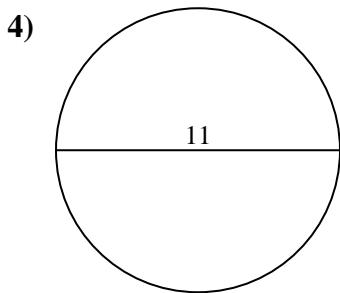
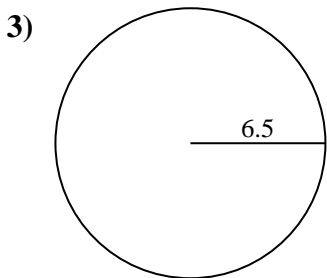
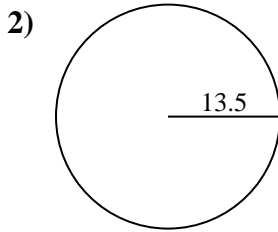
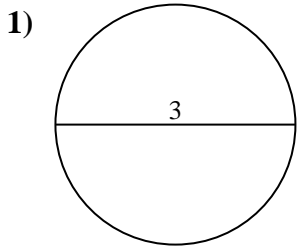




Encuentra el área y circunferencia de cada círculo. Los círculos no están a escala.



**Respuestas**

1a. \_\_\_\_\_

1c. \_\_\_\_\_

2a. \_\_\_\_\_

2c. \_\_\_\_\_

3a. \_\_\_\_\_

3c. \_\_\_\_\_

4a. \_\_\_\_\_

4c. \_\_\_\_\_

5a. \_\_\_\_\_

5c. \_\_\_\_\_

6a. \_\_\_\_\_

6c. \_\_\_\_\_

7a. \_\_\_\_\_

7c. \_\_\_\_\_

8a. \_\_\_\_\_

8c. \_\_\_\_\_

9a. \_\_\_\_\_

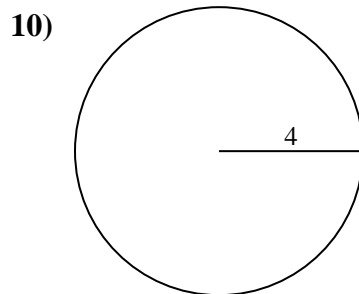
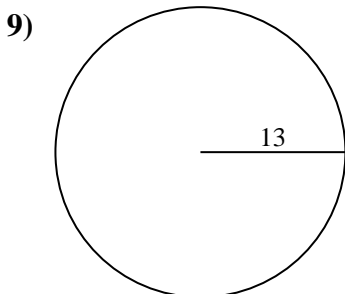
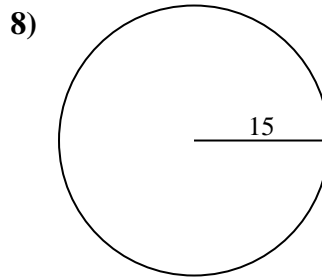
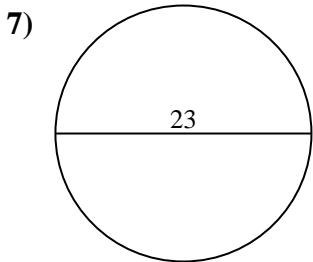
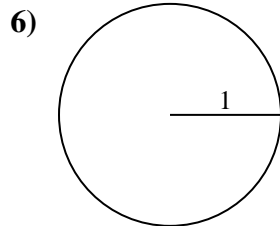
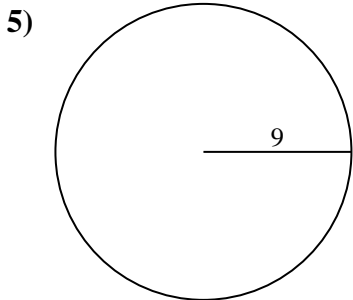
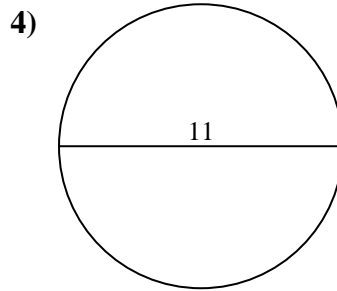
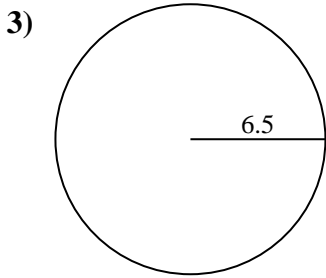
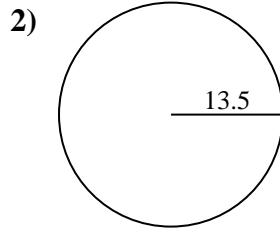
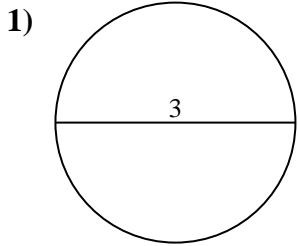
9c. \_\_\_\_\_

10a. \_\_\_\_\_

10c. \_\_\_\_\_



Encuentra el área y circunferencia de cada círculo. Los círculos no están a escala.



**Respuestas**

1a. 7.07 cm<sup>2</sup>

1c. 9.42 cm

2a. 572.56 cm<sup>2</sup>

2c. 84.82 cm

3a. 132.73 cm<sup>2</sup>

3c. 40.84 cm

4a. 95.03 cm<sup>2</sup>

4c. 34.56 cm

5a. 254.47 cm<sup>2</sup>

5c. 56.55 cm

6a. 3.14 cm<sup>2</sup>

6c. 6.28 cm

7a. 415.48 cm<sup>2</sup>

7c. 72.26 cm

8a. 706.86 cm<sup>2</sup>

8c. 94.25 cm

9a. 530.93 cm<sup>2</sup>

9c. 81.68 cm

10a. 50.27 cm<sup>2</sup>

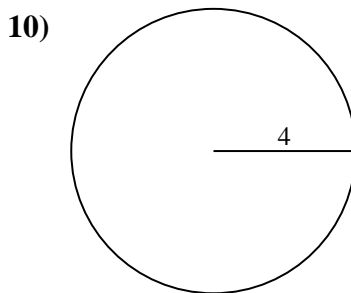
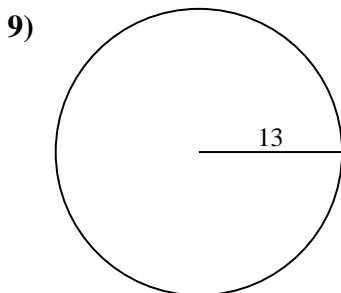
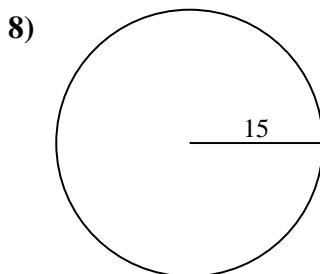
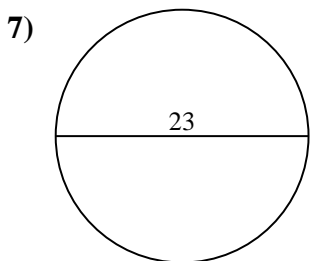
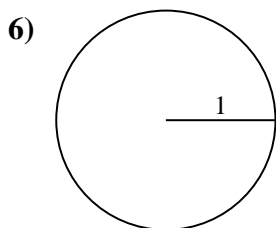
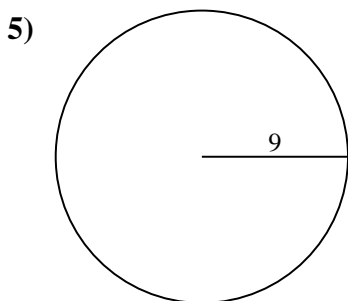
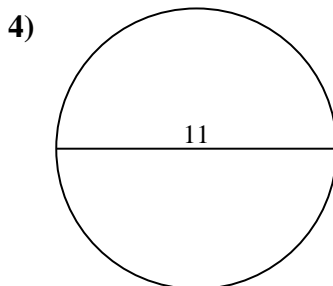
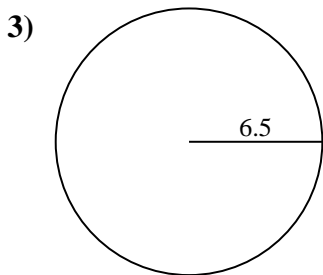
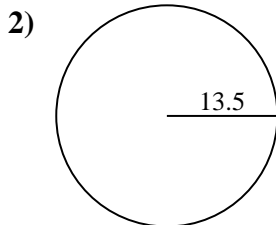
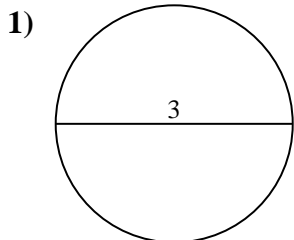
10c. 25.13 cm



Encuentra el área y circunferencia de cada círculo. Los círculos no están a escala.

40.84 cm	50.27 cm <sup>2</sup>	572.56 cm <sup>2</sup>	34.56 cm	706.86 cm <sup>2</sup>
56.55 cm	25.13 cm	94.25 cm	3.14 cm <sup>2</sup>	72.26 cm
9.42 cm	254.47 cm <sup>2</sup>	84.82 cm	7.07 cm <sup>2</sup>	95.03 cm <sup>2</sup>
132.73 cm <sup>2</sup>	6.28 cm	81.68 cm	415.48 cm <sup>2</sup>	530.93 cm <sup>2</sup>

**Respuestas**



1a. \_\_\_\_\_

1c. \_\_\_\_\_

2a. \_\_\_\_\_

2c. \_\_\_\_\_

3a. \_\_\_\_\_

3c. \_\_\_\_\_

4a. \_\_\_\_\_

4c. \_\_\_\_\_

5a. \_\_\_\_\_

5c. \_\_\_\_\_

6a. \_\_\_\_\_

6c. \_\_\_\_\_

7a. \_\_\_\_\_

7c. \_\_\_\_\_

8a. \_\_\_\_\_

8c. \_\_\_\_\_

9a. \_\_\_\_\_

9c. \_\_\_\_\_

10a. \_\_\_\_\_

10c. \_\_\_\_\_