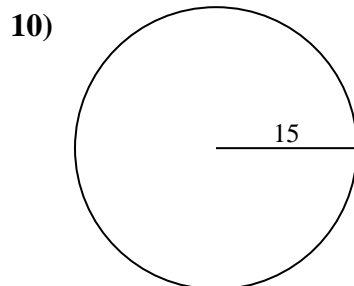
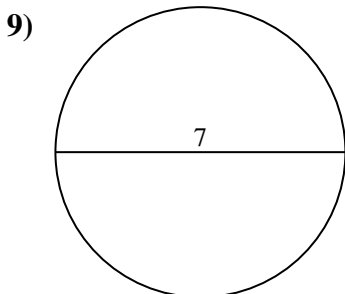
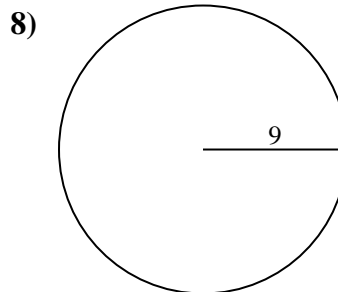
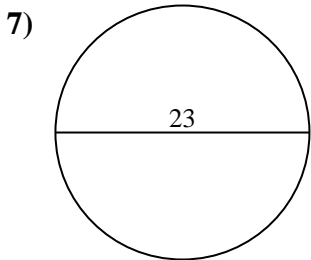
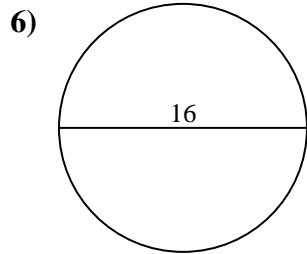
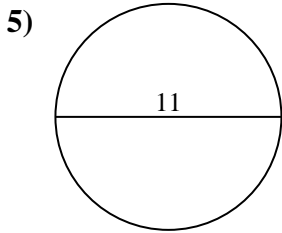
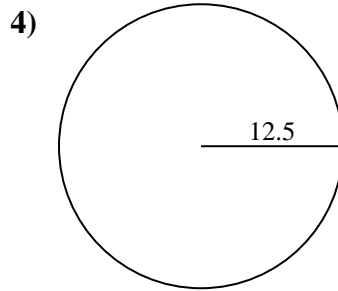
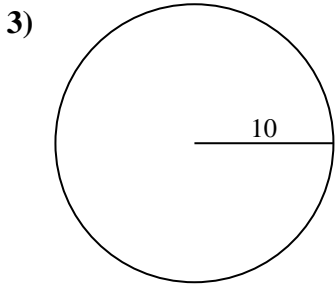
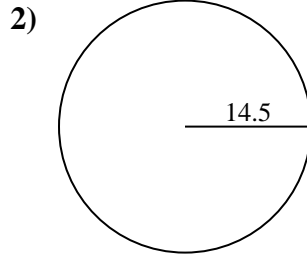
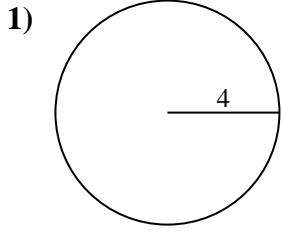




Encuentra el área y circunferencia de cada círculo. Los círculos no están a escala.



Respuestas

1a. _____

1c. _____

2a. _____

2c. _____

3a. _____

3c. _____

4a. _____

4c. _____

5a. _____

5c. _____

6a. _____

6c. _____

7a. _____

7c. _____

8a. _____

8c. _____

9a. _____

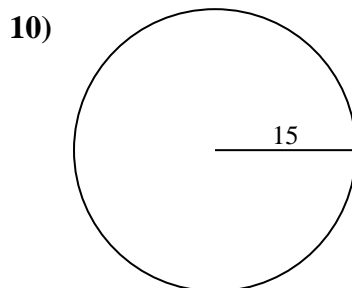
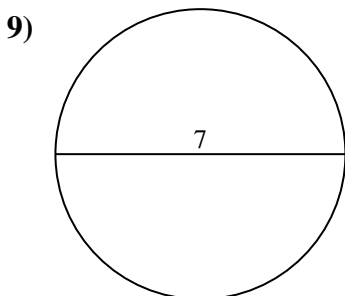
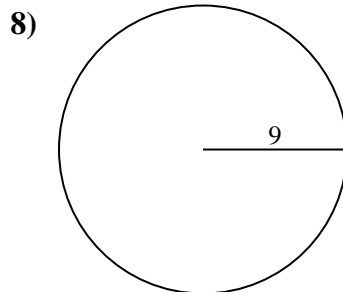
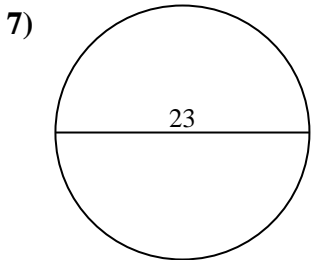
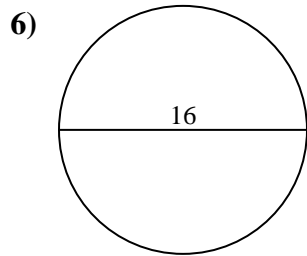
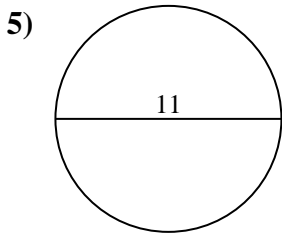
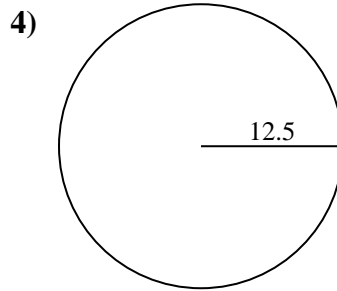
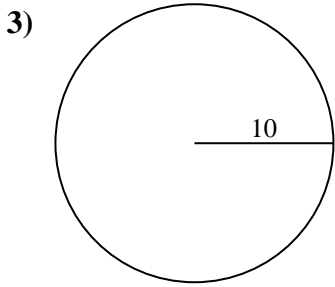
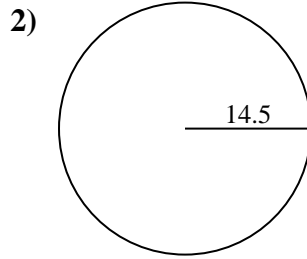
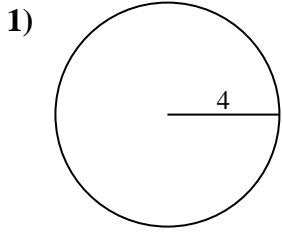
9c. _____

10a. _____

10c. _____



Encuentra el área y circunferencia de cada círculo. Los círculos no están a escala.



Respuestas

1a. 50.27 cm²

1c. 25.13 cm

2a. 660.52 cm²

2c. 91.11 cm

3a. 314.16 cm²

3c. 62.83 cm

4a. 490.87 cm²

4c. 78.54 cm

5a. 95.03 cm²

5c. 34.56 cm

6a. 201.06 cm²

6c. 50.27 cm

7a. 415.48 cm²

7c. 72.26 cm

8a. 254.47 cm²

8c. 56.55 cm

9a. 38.48 cm²

9c. 21.99 cm

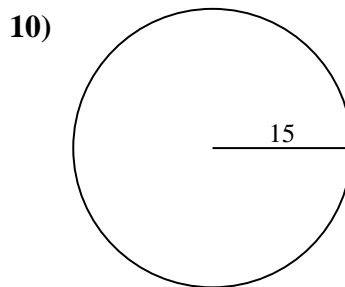
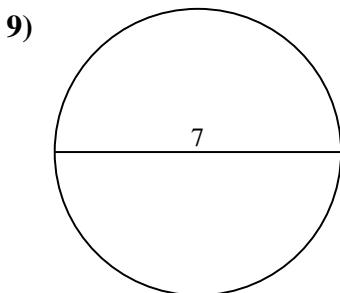
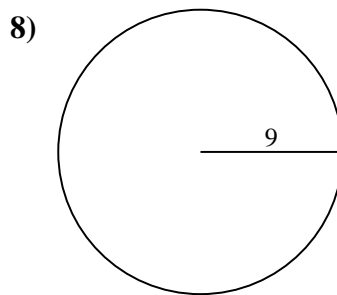
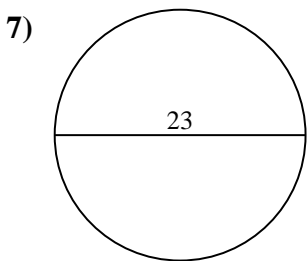
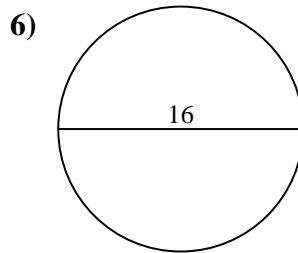
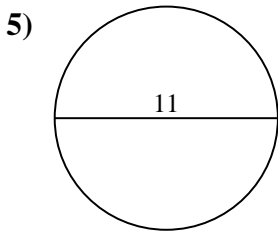
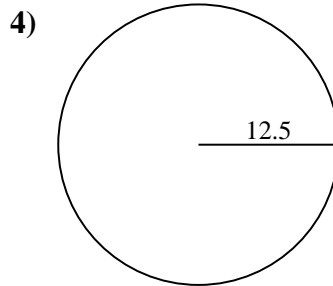
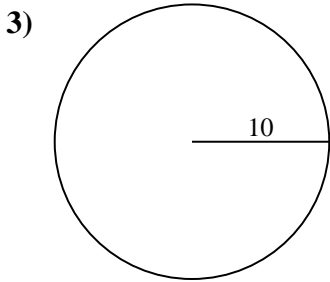
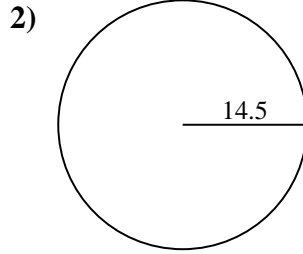
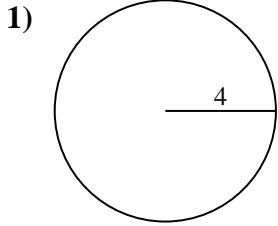
10a. 706.86 cm²

10c. 94.25 cm



Encuentra el área y circunferencia de cada círculo. Los círculos no están a escala.

34.56 cm	72.26 cm	38.48 cm ²	56.55 cm	78.54 cm
314.16 cm ²	95.03 cm ²	706.86 cm ²	25.13 cm	254.47 cm ²
50.27 cm	94.25 cm	50.27 cm ²	91.11 cm	21.99 cm
660.52 cm ²	201.06 cm ²	62.83 cm	490.87 cm ²	415.48 cm ²



Respuestas

1a. _____

1c. _____

2a. _____

2c. _____

3a. _____

3c. _____

4a. _____

4c. _____

5a. _____

5c. _____

6a. _____

6c. _____

7a. _____

7c. _____

8a. _____

8c. _____

9a. _____

9c. _____

10a. _____

10c. _____