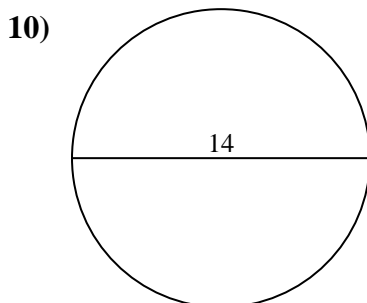
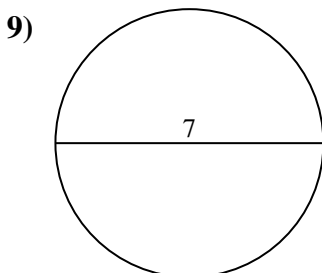
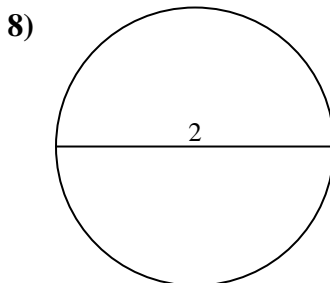
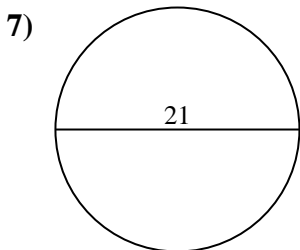
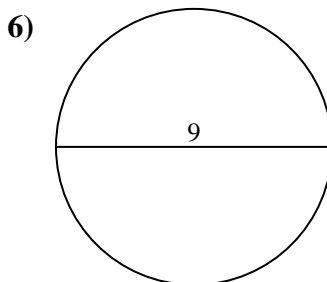
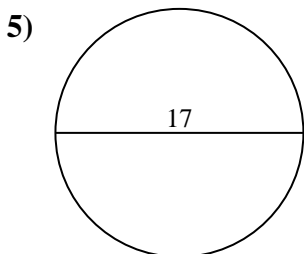
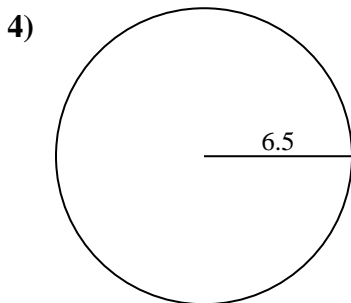
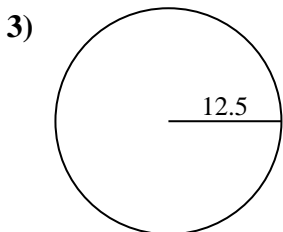
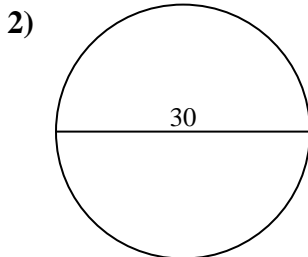
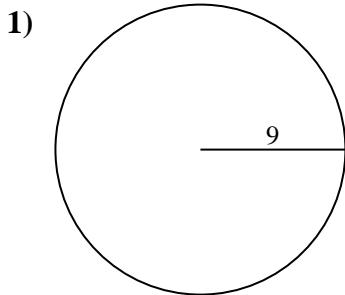




Encuentra el área y circunferencia de cada círculo. Los círculos no están a escala.



Respuestas

1a. _____

1c. _____

2a. _____

2c. _____

3a. _____

3c. _____

4a. _____

4c. _____

5a. _____

5c. _____

6a. _____

6c. _____

7a. _____

7c. _____

8a. _____

8c. _____

9a. _____

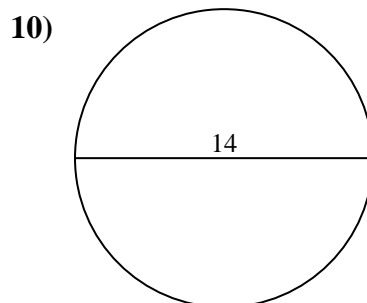
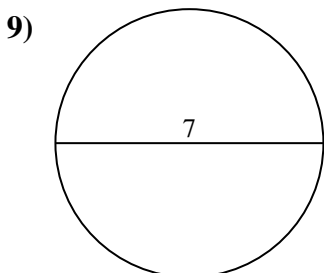
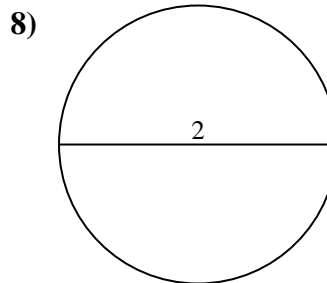
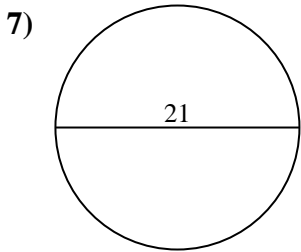
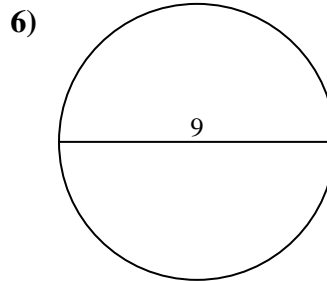
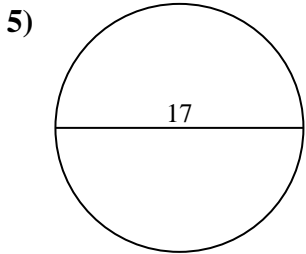
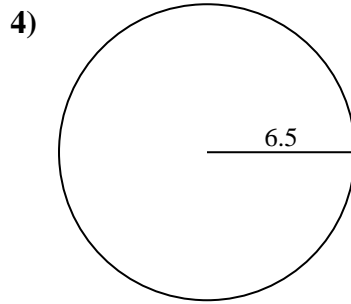
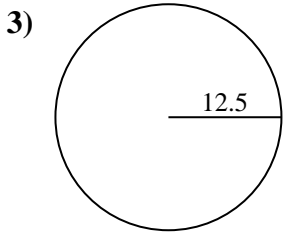
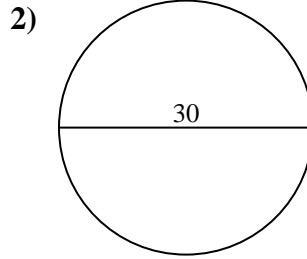
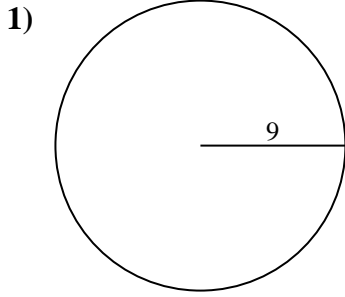
9c. _____

10a. _____

10c. _____



Encuentra el área y circunferencia de cada círculo. Los círculos no están a escala.



Respuestas

1a. 254.47 cm²

1c. 56.55 cm

2a. 706.86 cm²

2c. 94.25 cm

3a. 490.87 cm²

3c. 78.54 cm

4a. 132.73 cm²

4c. 40.84 cm

5a. 226.98 cm²

5c. 53.41 cm

6a. 63.62 cm²

6c. 28.27 cm

7a. 346.36 cm²

7c. 65.97 cm

8a. 3.14 cm²

8c. 6.28 cm

9a. 38.48 cm²

9c. 21.99 cm

10a. 153.94 cm²

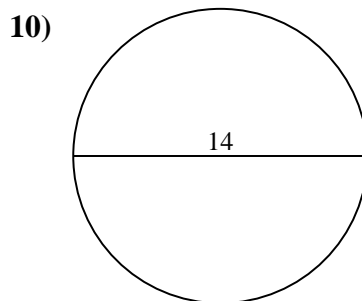
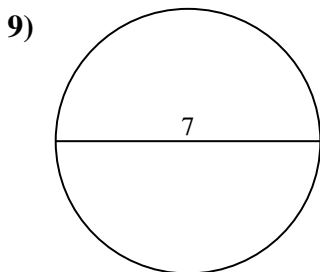
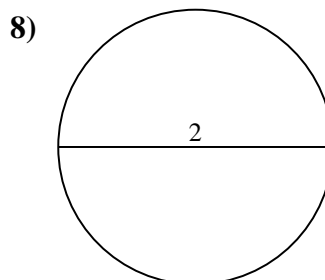
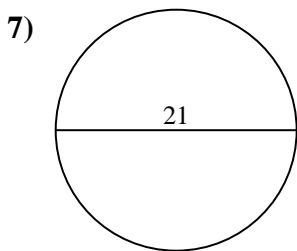
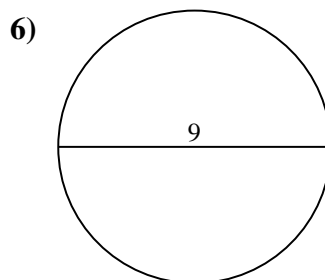
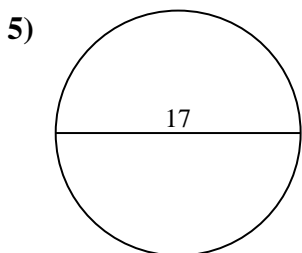
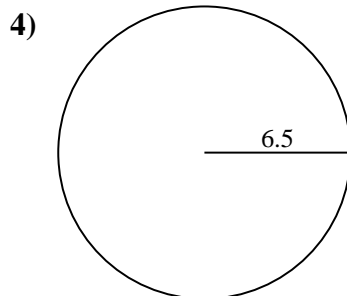
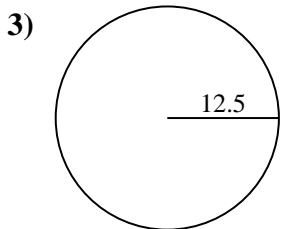
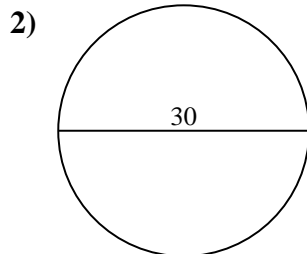
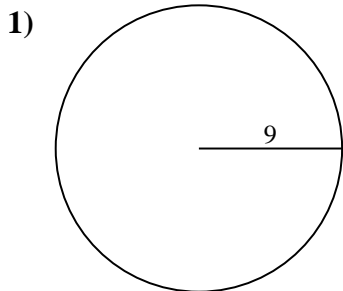
10c. 43.98 cm



Encuentra el área y circunferencia de cada círculo. Los círculos no están a escala.

65.97 cm	226.98 cm ²	40.84 cm	53.41 cm	43.98 cm
94.25 cm	254.47 cm ²	78.54 cm	21.99 cm	346.36 cm ²
706.86 cm ²	490.87 cm ²	63.62 cm ²	6.28 cm	38.48 cm ²
153.94 cm ²	56.55 cm	28.27 cm	132.73 cm ²	3.14 cm ²

Respuestas



1a. _____

1c. _____

2a. _____

2c. _____

3a. _____

3c. _____

4a. _____

4c. _____

5a. _____

5c. _____

6a. _____

6c. _____

7a. _____

7c. _____

8a. _____

8c. _____

9a. _____

9c. _____

10a. _____

10c. _____