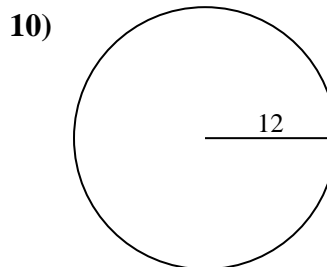
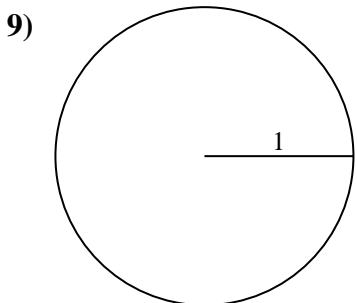
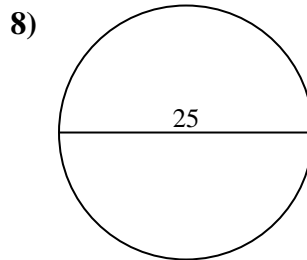
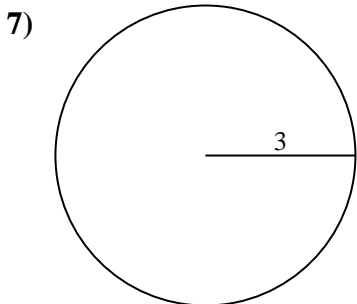
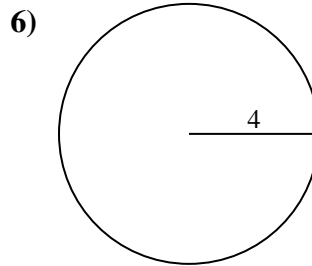
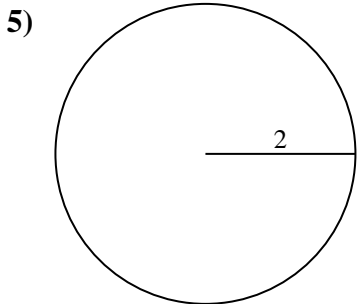
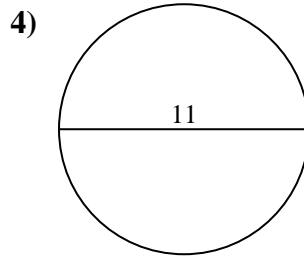
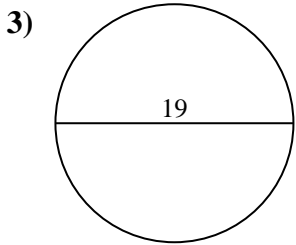
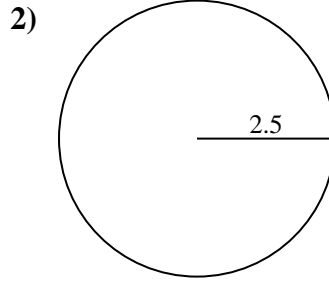
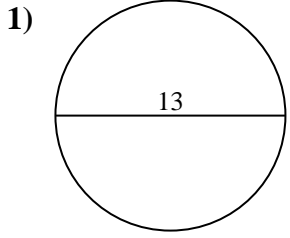




Encuentra el área y circunferencia de cada círculo. Los círculos no están a escala.



Respuestas

1a. _____

1c. _____

2a. _____

2c. _____

3a. _____

3c. _____

4a. _____

4c. _____

5a. _____

5c. _____

6a. _____

6c. _____

7a. _____

7c. _____

8a. _____

8c. _____

9a. _____

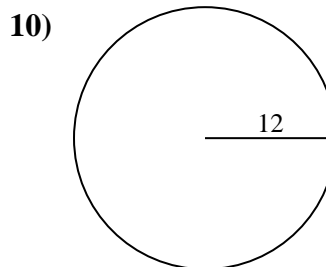
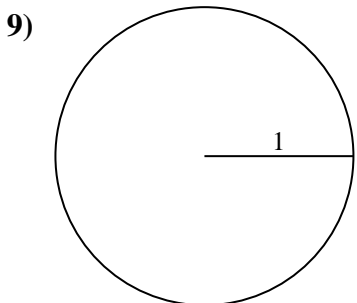
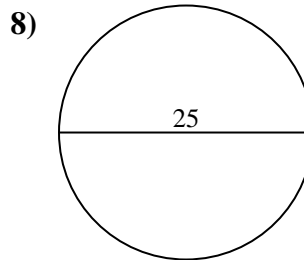
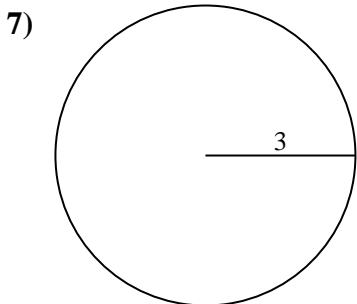
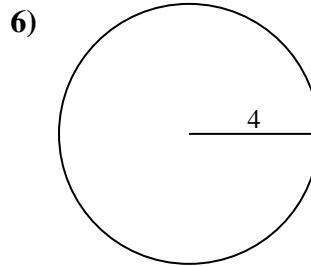
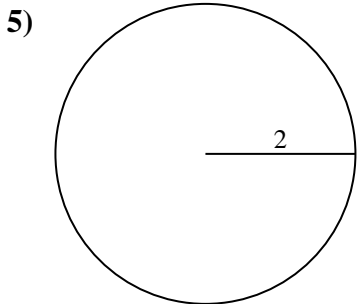
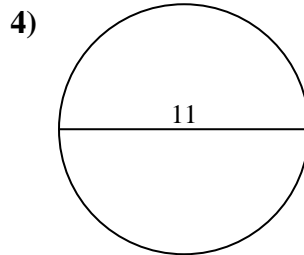
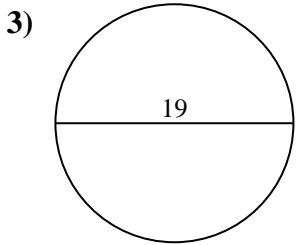
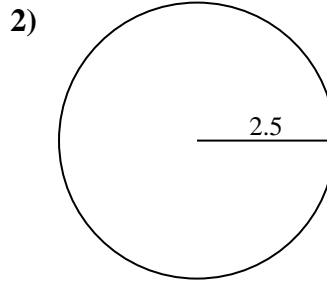
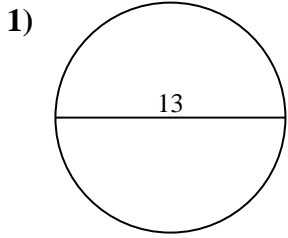
9c. _____

10a. _____

10c. _____



Encuentra el área y circunferencia de cada círculo. Los círculos no están a escala.



Respuestas

1a. 132.73 cm²

1c. 40.84 cm

2a. 19.63 cm²

2c. 15.71 cm

3a. 283.53 cm²

3c. 59.69 cm

4a. 95.03 cm²

4c. 34.56 cm

5a. 12.57 cm²

5c. 12.57 cm

6a. 50.27 cm²

6c. 25.13 cm

7a. 28.27 cm²

7c. 18.85 cm

8a. 490.87 cm²

8c. 78.54 cm

9a. 3.14 cm²

9c. 6.28 cm

10a. 452.39 cm²

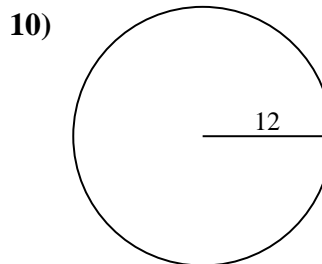
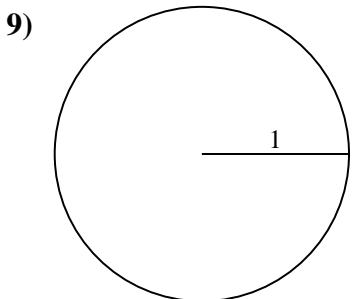
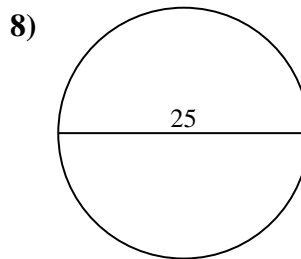
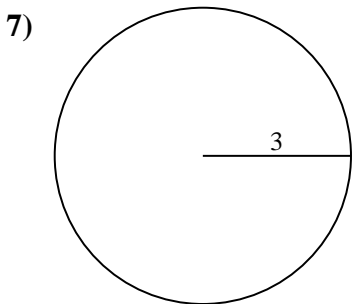
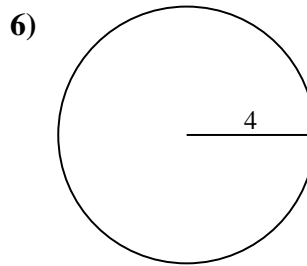
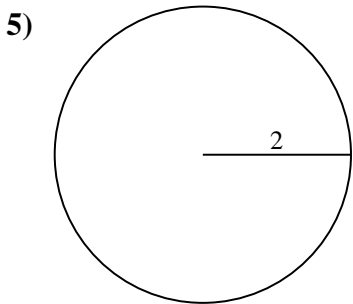
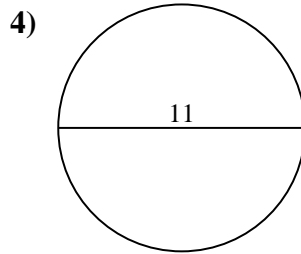
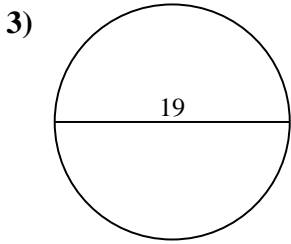
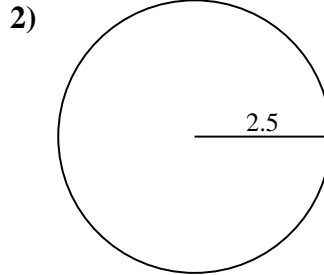
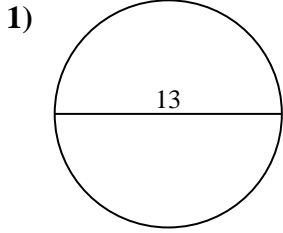
10c. 75.4 cm



Encuentra el área y circunferencia de cada círculo. Los círculos no están a escala.

3.14 cm ²	19.63 cm ²	78.54 cm	132.73 cm ²	12.57 cm ²
452.39 cm ²	15.71 cm	12.57 cm	283.53 cm ²	28.27 cm ²
6.28 cm	490.87 cm ²	25.13 cm	34.56 cm	50.27 cm ²
18.85 cm	59.69 cm	40.84 cm	75.4 cm	95.03 cm ²

Respuestas



1a. _____

1c. _____

2a. _____

2c. _____

3a. _____

3c. _____

4a. _____

4c. _____

5a. _____

5c. _____

6a. _____

6c. _____

7a. _____

7c. _____

8a. _____

8c. _____

9a. _____

9c. _____

10a. _____

10c. _____