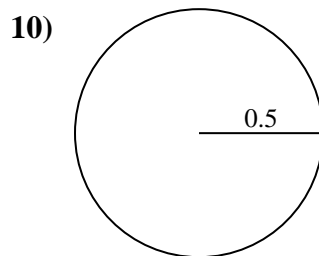
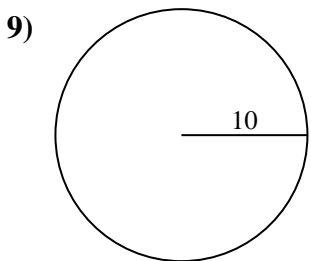
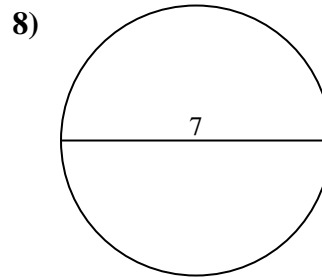
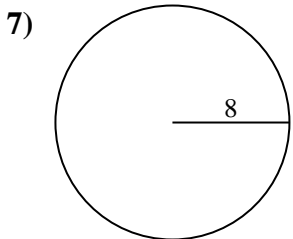
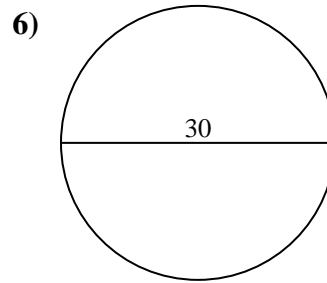
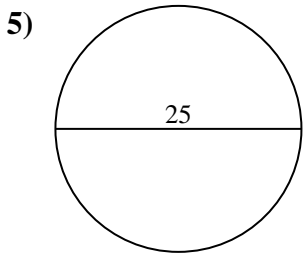
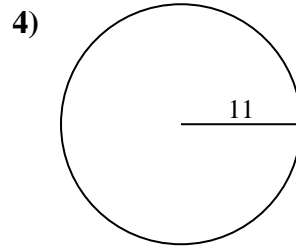
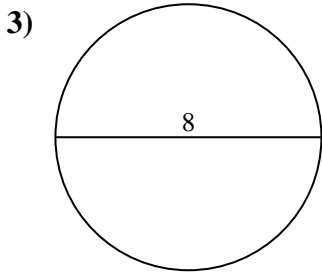
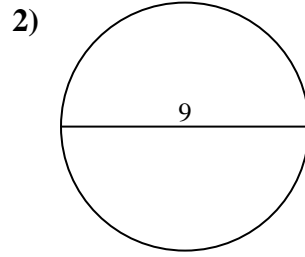
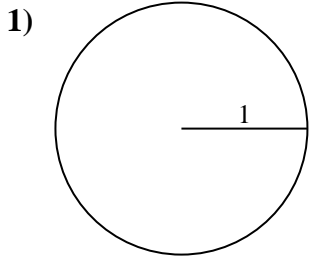




Encuentra el área y circunferencia de cada círculo. Los círculos no están a escala.



**Respuestas**

1a. \_\_\_\_\_

1c. \_\_\_\_\_

2a. \_\_\_\_\_

2c. \_\_\_\_\_

3a. \_\_\_\_\_

3c. \_\_\_\_\_

4a. \_\_\_\_\_

4c. \_\_\_\_\_

5a. \_\_\_\_\_

5c. \_\_\_\_\_

6a. \_\_\_\_\_

6c. \_\_\_\_\_

7a. \_\_\_\_\_

7c. \_\_\_\_\_

8a. \_\_\_\_\_

8c. \_\_\_\_\_

9a. \_\_\_\_\_

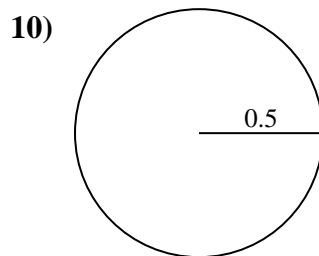
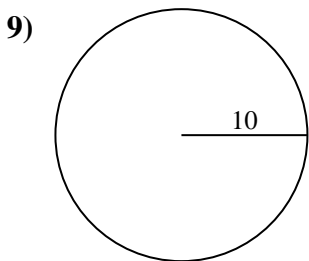
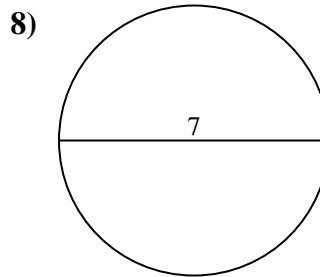
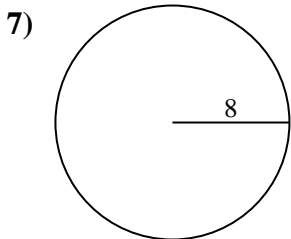
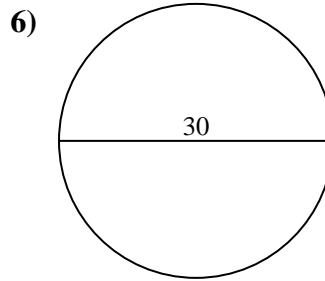
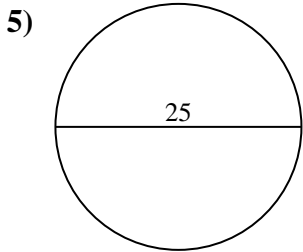
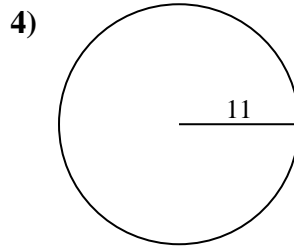
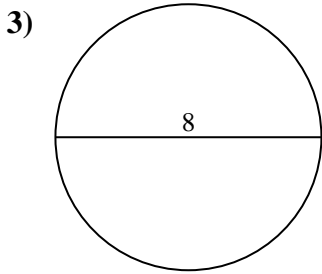
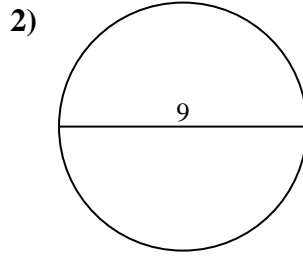
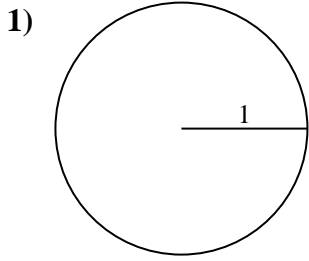
9c. \_\_\_\_\_

10a. \_\_\_\_\_

10c. \_\_\_\_\_



Encuentra el área y circunferencia de cada círculo. Los círculos no están a escala.



**Respuestas**

1a. 3.14 cm<sup>2</sup>

1c. 6.28 cm

2a. 63.62 cm<sup>2</sup>

2c. 28.27 cm

3a. 50.27 cm<sup>2</sup>

3c. 25.13 cm

4a. 380.13 cm<sup>2</sup>

4c. 69.12 cm

5a. 490.87 cm<sup>2</sup>

5c. 78.54 cm

6a. 706.86 cm<sup>2</sup>

6c. 94.25 cm

7a. 201.06 cm<sup>2</sup>

7c. 50.27 cm

8a. 38.48 cm<sup>2</sup>

8c. 21.99 cm

9a. 314.16 cm<sup>2</sup>

9c. 62.83 cm

10a. 0.79 cm<sup>2</sup>

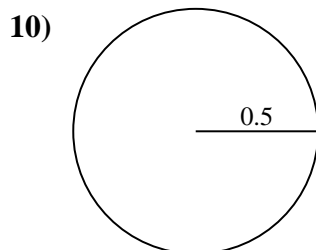
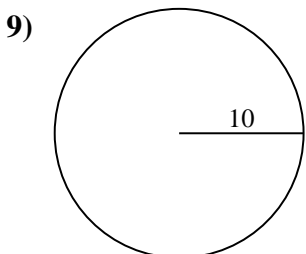
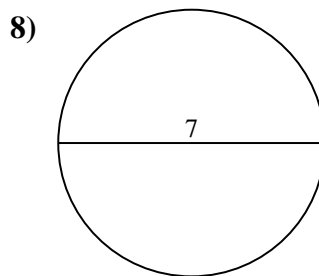
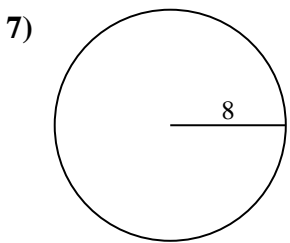
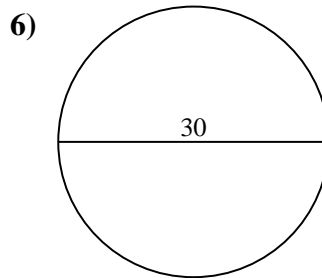
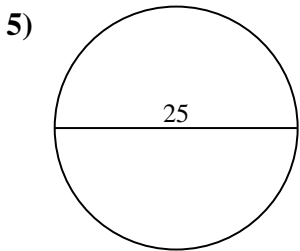
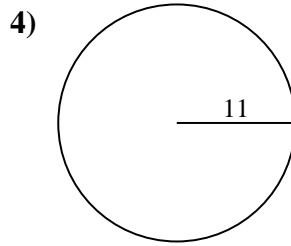
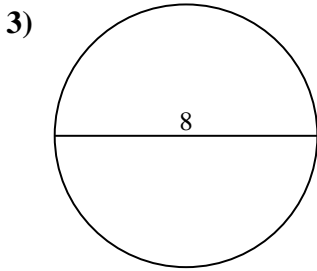
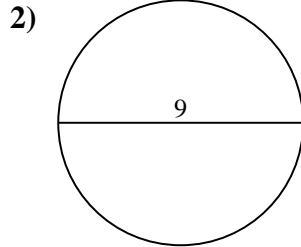
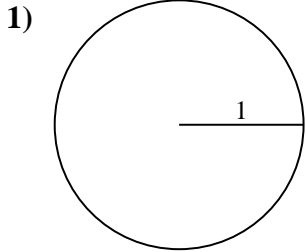
10c. 3.14 cm



Encuentra el área y circunferencia de cada círculo. Los círculos no están a escala.

490.87 cm <sup>2</sup>	62.83 cm	94.25 cm	50.27 cm <sup>2</sup>	706.86 cm <sup>2</sup>
21.99 cm	78.54 cm	0.79 cm <sup>2</sup>	38.48 cm <sup>2</sup>	3.14 cm
314.16 cm <sup>2</sup>	3.14 cm <sup>2</sup>	201.06 cm <sup>2</sup>	28.27 cm	63.62 cm <sup>2</sup>
25.13 cm	69.12 cm	6.28 cm	50.27 cm	380.13 cm <sup>2</sup>

**Respuestas**



1a. \_\_\_\_\_

1c. \_\_\_\_\_

2a. \_\_\_\_\_

2c. \_\_\_\_\_

3a. \_\_\_\_\_

3c. \_\_\_\_\_

4a. \_\_\_\_\_

4c. \_\_\_\_\_

5a. \_\_\_\_\_

5c. \_\_\_\_\_

6a. \_\_\_\_\_

6c. \_\_\_\_\_

7a. \_\_\_\_\_

7c. \_\_\_\_\_

8a. \_\_\_\_\_

8c. \_\_\_\_\_

9a. \_\_\_\_\_

9c. \_\_\_\_\_

10a. \_\_\_\_\_

10c. \_\_\_\_\_