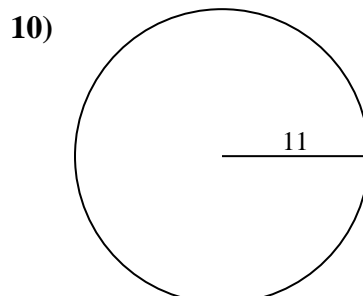
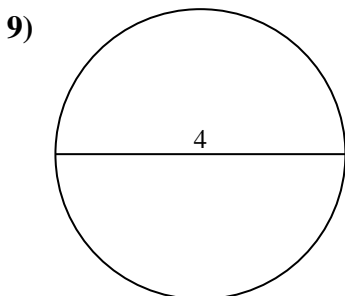
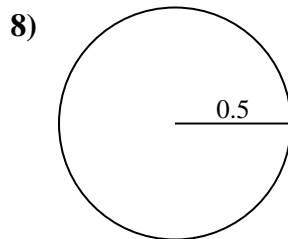
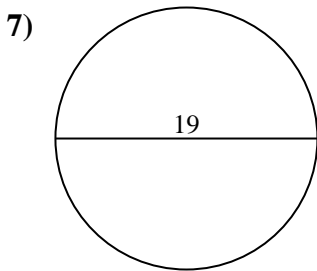
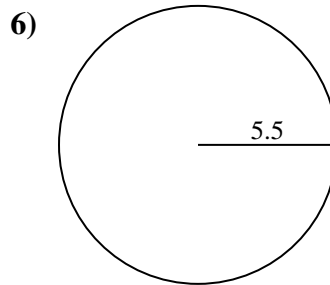
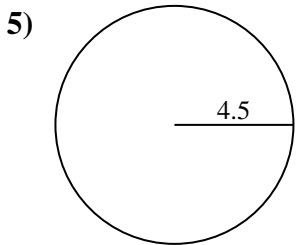
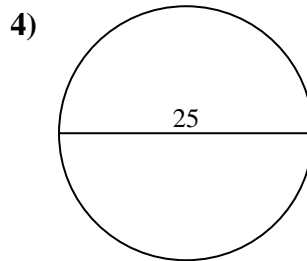
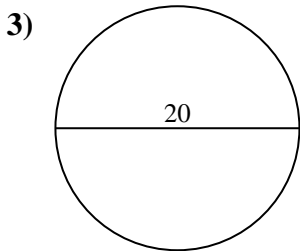
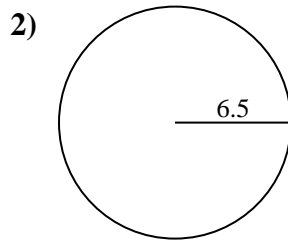
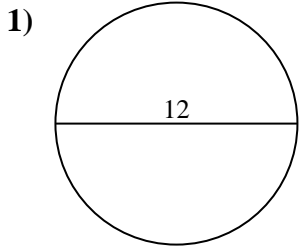




Encuentra el área y circunferencia de cada círculo. Los círculos no están a escala.



Respuestas

1a. _____

1c. _____

2a. _____

2c. _____

3a. _____

3c. _____

4a. _____

4c. _____

5a. _____

5c. _____

6a. _____

6c. _____

7a. _____

7c. _____

8a. _____

8c. _____

9a. _____

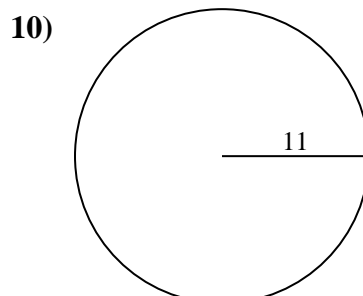
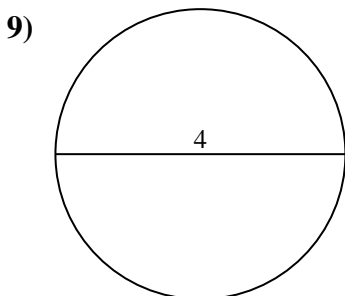
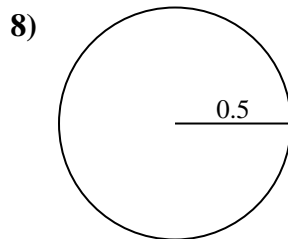
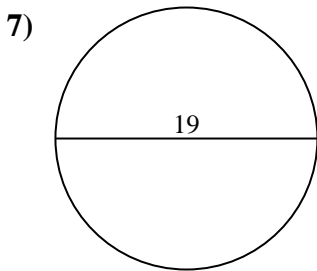
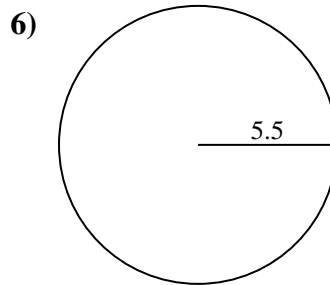
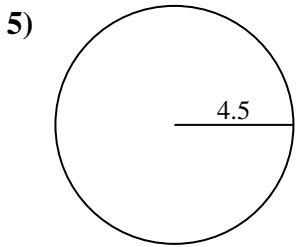
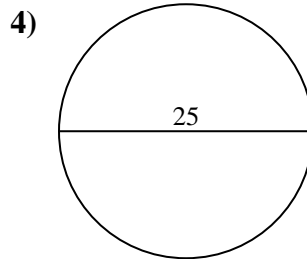
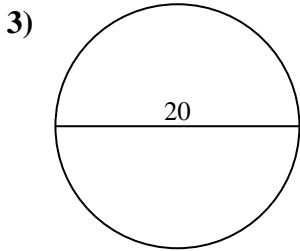
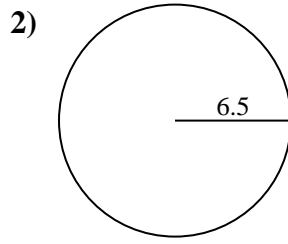
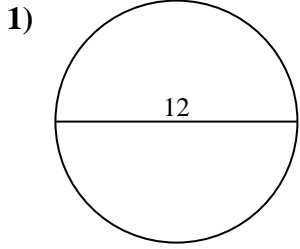
9c. _____

10a. _____

10c. _____



Encuentra el área y circunferencia de cada círculo. Los círculos no están a escala.



Respuestas

1a. 113.1 cm²

1c. 37.7 cm

2a. 132.73 cm²

2c. 40.84 cm

3a. 314.16 cm²

3c. 62.83 cm

4a. 490.87 cm²

4c. 78.54 cm

5a. 63.62 cm²

5c. 28.27 cm

6a. 95.03 cm²

6c. 34.56 cm

7a. 283.53 cm²

7c. 59.69 cm

8a. 0.79 cm²

8c. 3.14 cm

9a. 12.57 cm²

9c. 12.57 cm

10a. 380.13 cm²

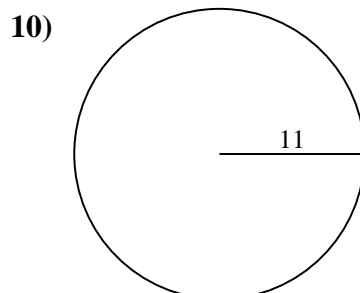
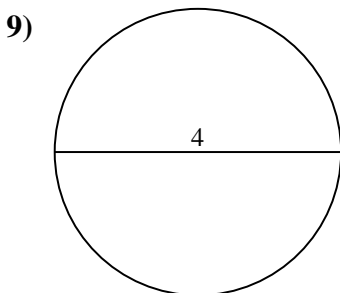
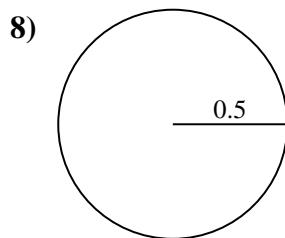
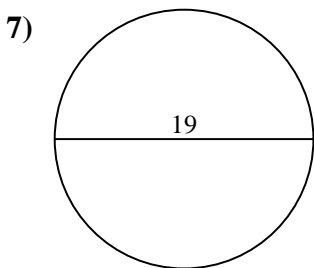
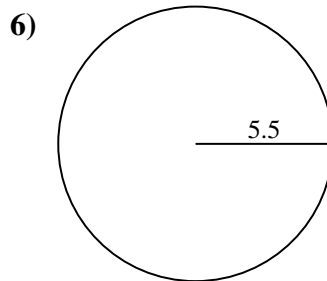
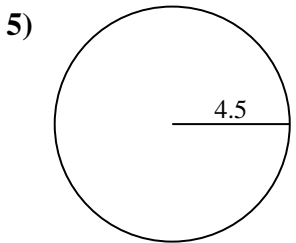
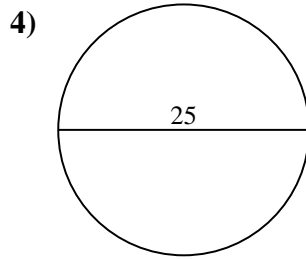
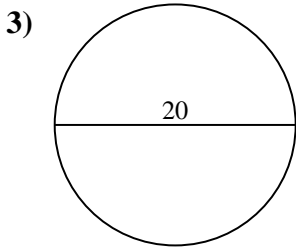
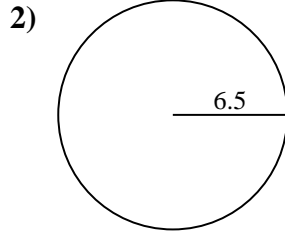
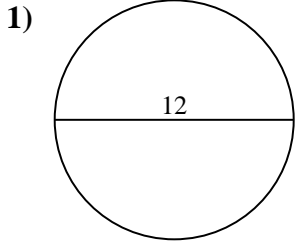
10c. 69.12 cm



Encuentra el área y circunferencia de cada círculo. Los círculos no están a escala.

113.1 cm ²	283.53 cm ²	62.83 cm	132.73 cm ²	380.13 cm ²
34.56 cm	314.16 cm ²	0.79 cm ²	12.57 cm	78.54 cm
40.84 cm	3.14 cm	69.12 cm	490.87 cm ²	95.03 cm ²
37.7 cm	63.62 cm ²	59.69 cm	28.27 cm	12.57 cm ²

Respuestas



1a. _____

1c. _____

2a. _____

2c. _____

3a. _____

3c. _____

4a. _____

4c. _____

5a. _____

5c. _____

6a. _____

6c. _____

7a. _____

7c. _____

8a. _____

8c. _____

9a. _____

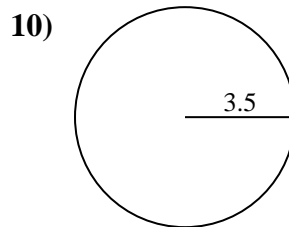
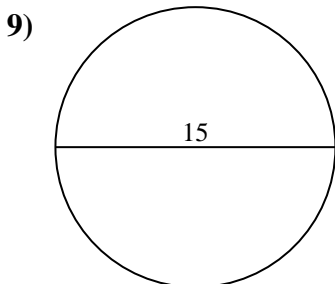
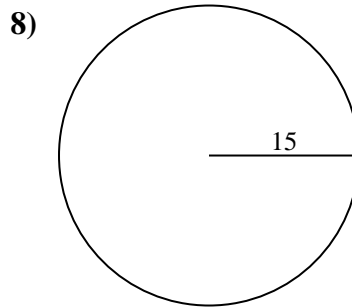
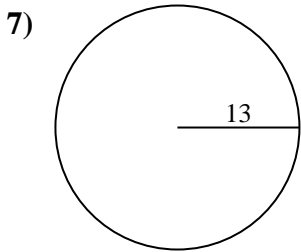
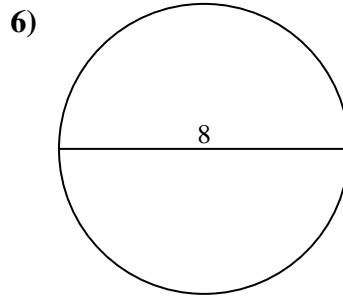
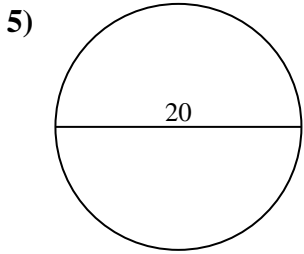
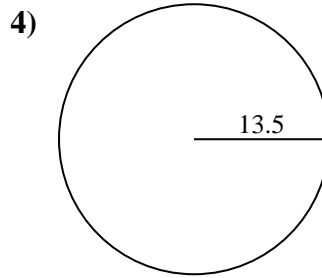
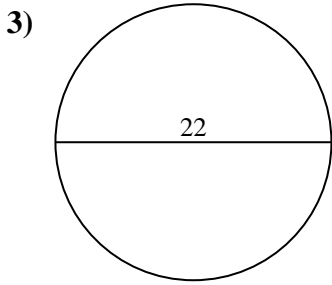
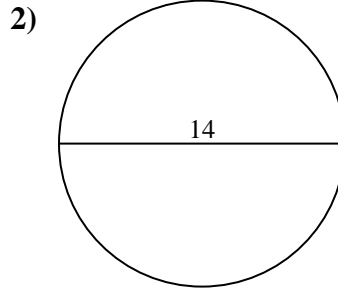
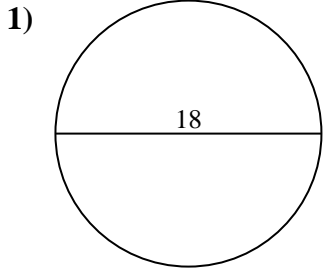
9c. _____

10a. _____

10c. _____



Encuentra el área y circunferencia de cada círculo. Los círculos no están a escala.



Respuestas

1a. _____

1c. _____

2a. _____

2c. _____

3a. _____

3c. _____

4a. _____

4c. _____

5a. _____

5c. _____

6a. _____

6c. _____

7a. _____

7c. _____

8a. _____

8c. _____

9a. _____

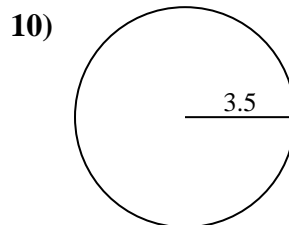
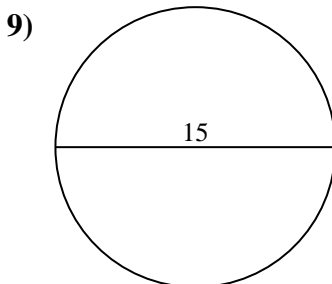
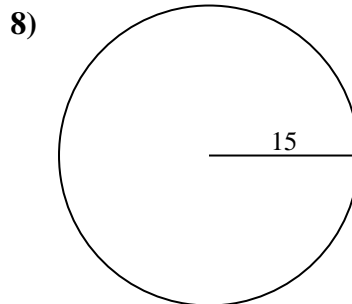
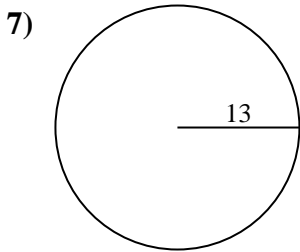
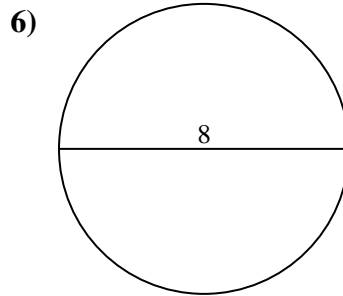
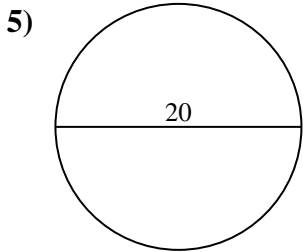
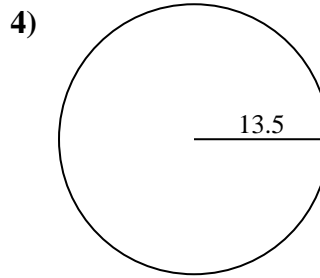
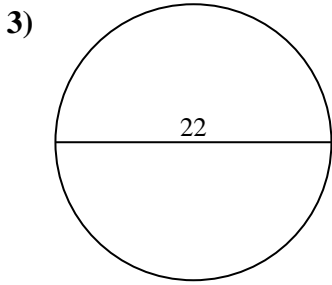
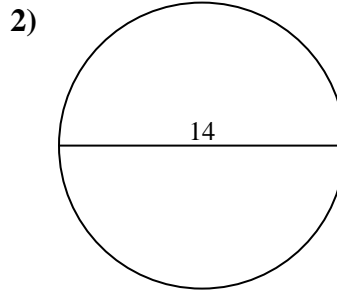
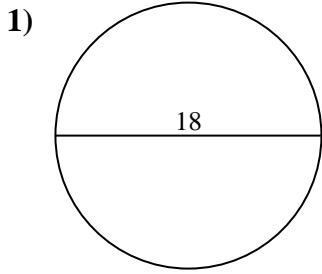
9c. _____

10a. _____

10c. _____



Encuentra el área y circunferencia de cada círculo. Los círculos no están a escala.



Respuestas

1a. 254.47 cm²

1c. 56.55 cm

2a. 153.94 cm²

2c. 43.98 cm

3a. 380.13 cm²

3c. 69.12 cm

4a. 572.56 cm²

4c. 84.82 cm

5a. 314.16 cm²

5c. 62.83 cm

6a. 50.27 cm²

6c. 25.13 cm

7a. 530.93 cm²

7c. 81.68 cm

8a. 706.86 cm²

8c. 94.25 cm

9a. 176.71 cm²

9c. 47.12 cm

10a. 38.48 cm²

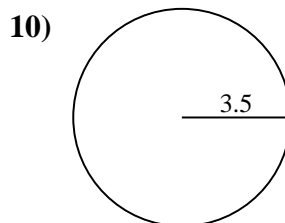
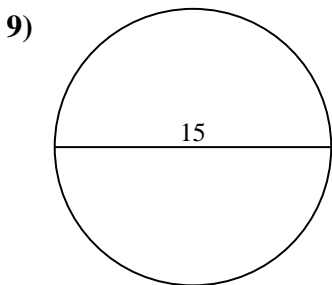
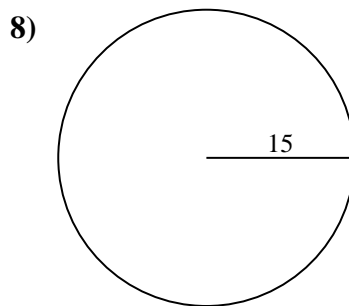
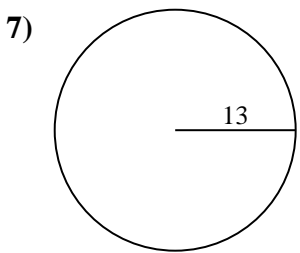
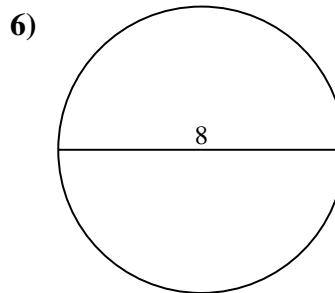
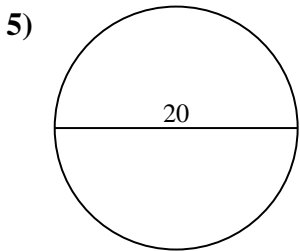
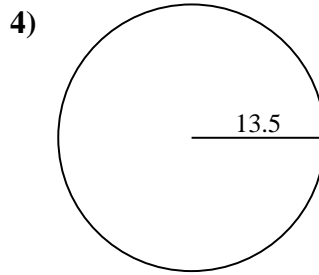
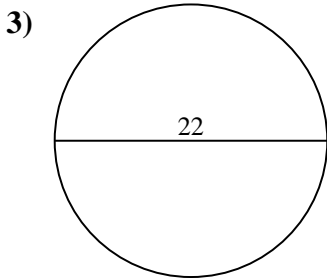
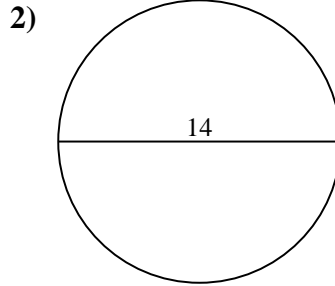
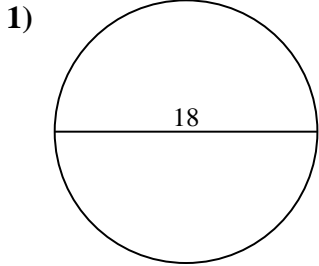
10c. 21.99 cm



Encuentra el área y circunferencia de cada círculo. Los círculos no están a escala.

380.13 cm ²	62.83 cm	69.12 cm	94.25 cm	38.48 cm ²
56.55 cm	530.93 cm ²	314.16 cm ²	572.56 cm ²	84.82 cm
21.99 cm	43.98 cm	176.71 cm ²	50.27 cm ²	706.86 cm ²
254.47 cm ²	81.68 cm	25.13 cm	47.12 cm	153.94 cm ²

Respuestas



1a. _____

1c. _____

2a. _____

2c. _____

3a. _____

3c. _____

4a. _____

4c. _____

5a. _____

5c. _____

6a. _____

6c. _____

7a. _____

7c. _____

8a. _____

8c. _____

9a. _____

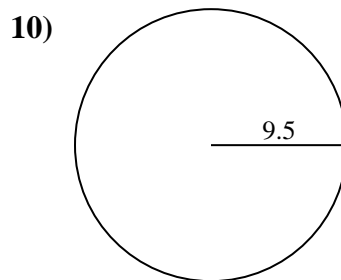
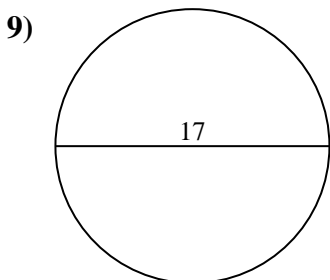
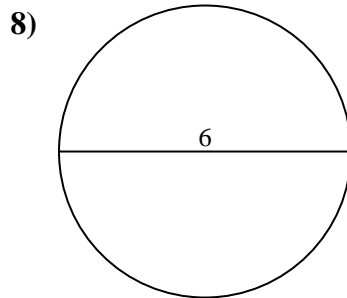
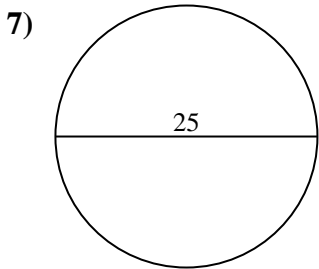
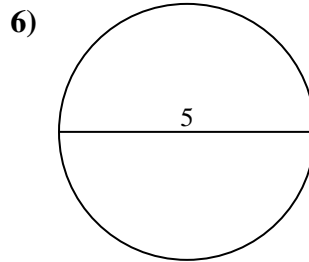
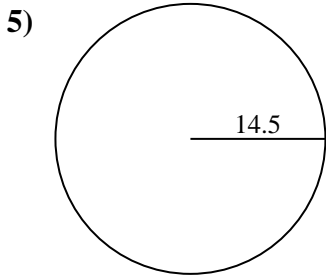
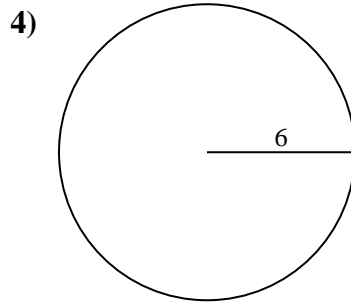
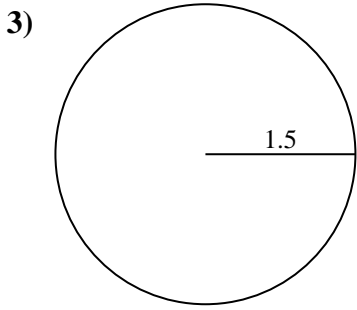
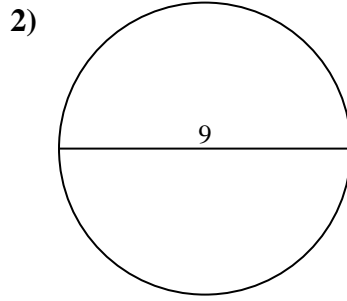
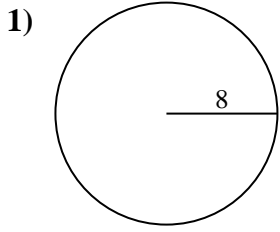
9c. _____

10a. _____

10c. _____



Encuentra el área y circunferencia de cada círculo. Los círculos no están a escala.



Respuestas

1a. _____

1c. _____

2a. _____

2c. _____

3a. _____

3c. _____

4a. _____

4c. _____

5a. _____

5c. _____

6a. _____

6c. _____

7a. _____

7c. _____

8a. _____

8c. _____

9a. _____

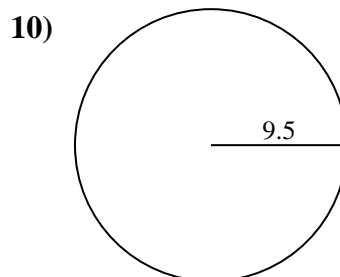
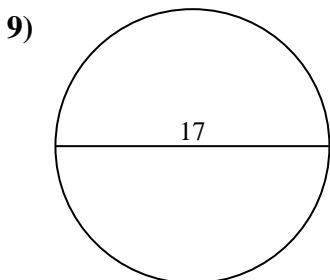
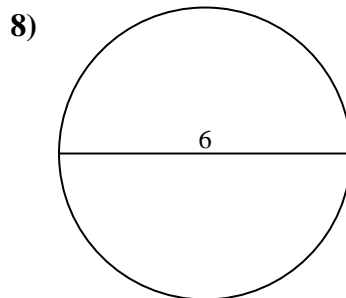
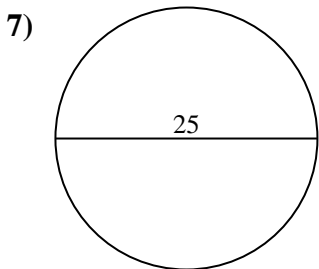
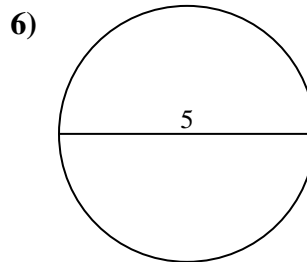
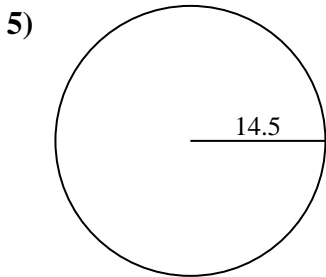
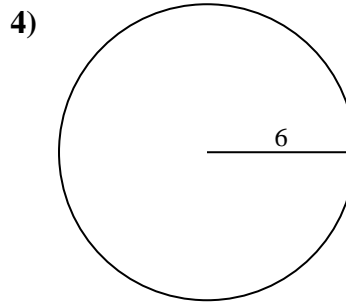
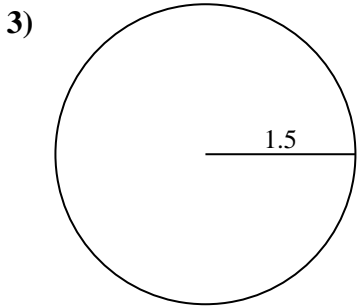
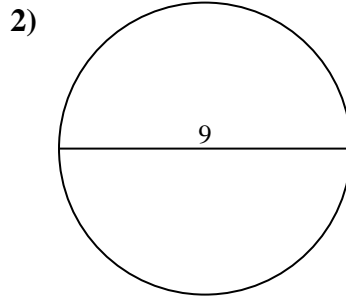
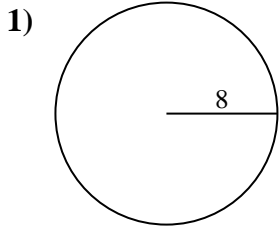
9c. _____

10a. _____

10c. _____



Encuentra el área y circunferencia de cada círculo. Los círculos no están a escala.



Respuestas

1a. 201.06 cm²

1c. 50.27 cm

2a. 63.62 cm²

2c. 28.27 cm

3a. 7.07 cm²

3c. 9.42 cm

4a. 113.1 cm²

4c. 37.7 cm

5a. 660.52 cm²

5c. 91.11 cm

6a. 19.63 cm²

6c. 15.71 cm

7a. 490.87 cm²

7c. 78.54 cm

8a. 28.27 cm²

8c. 18.85 cm

9a. 226.98 cm²

9c. 53.41 cm

10a. 283.53 cm²

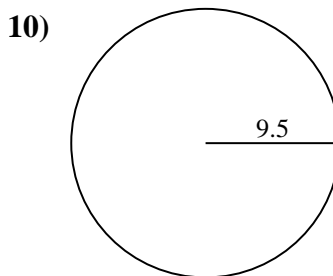
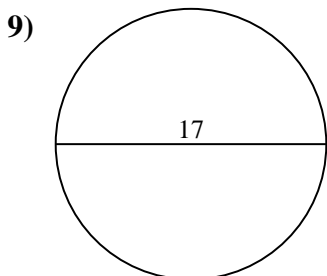
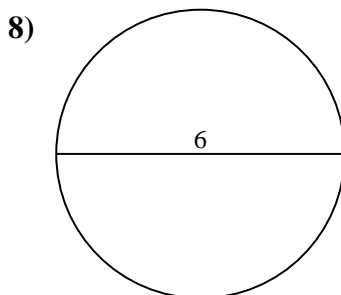
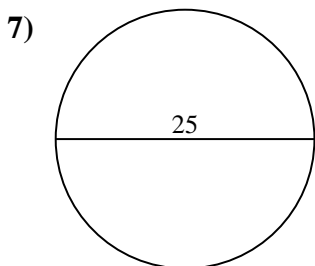
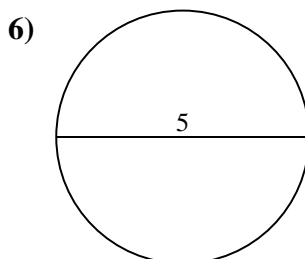
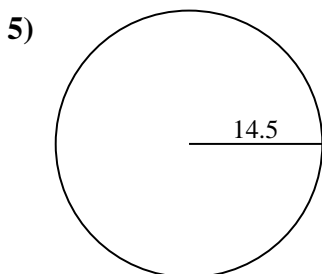
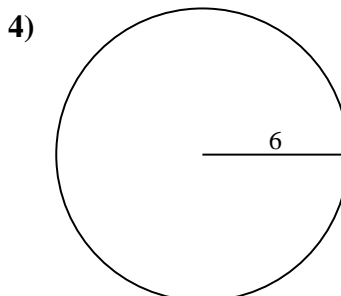
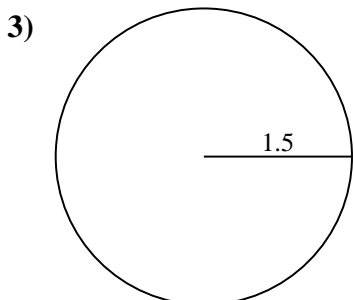
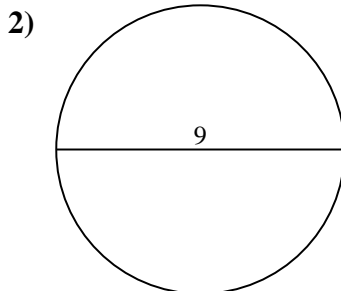
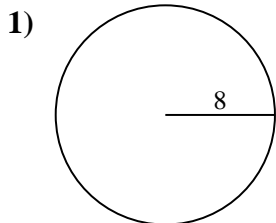
10c. 59.69 cm



Encuentra el área y circunferencia de cada círculo. Los círculos no están a escala.

19.63 cm ²	91.11 cm	15.71 cm	78.54 cm	201.06 cm ²
63.62 cm ²	18.85 cm	59.69 cm	283.53 cm ²	37.7 cm
9.42 cm	53.41 cm	660.52 cm ²	226.98 cm ²	490.87 cm ²
50.27 cm	28.27 cm ²	28.27 cm	7.07 cm ²	113.1 cm ²

Respuestas



1a. _____

1c. _____

2a. _____

2c. _____

3a. _____

3c. _____

4a. _____

4c. _____

5a. _____

5c. _____

6a. _____

6c. _____

7a. _____

7c. _____

8a. _____

8c. _____

9a. _____

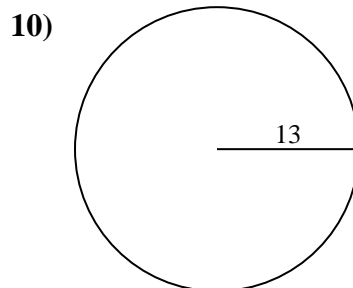
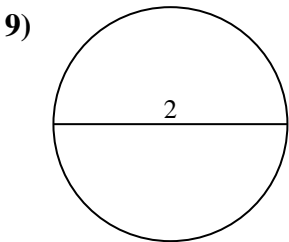
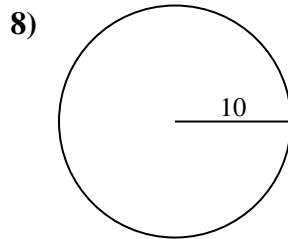
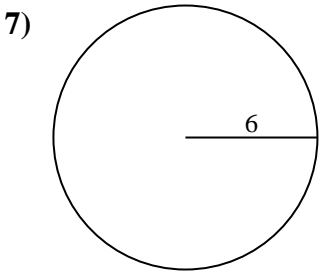
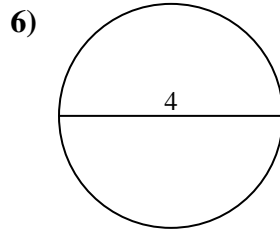
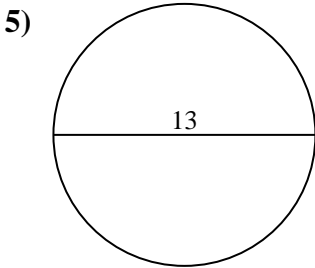
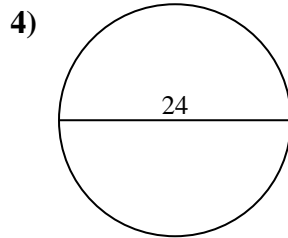
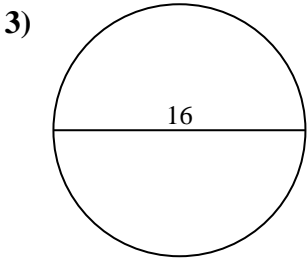
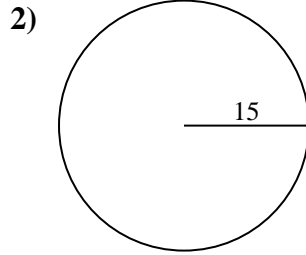
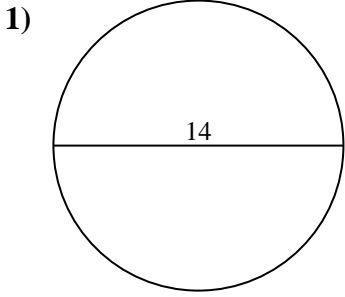
9c. _____

10a. _____

10c. _____



Encuentra el área y circunferencia de cada círculo. Los círculos no están a escala.



Respuestas

1a. _____

1c. _____

2a. _____

2c. _____

3a. _____

3c. _____

4a. _____

4c. _____

5a. _____

5c. _____

6a. _____

6c. _____

7a. _____

7c. _____

8a. _____

8c. _____

9a. _____

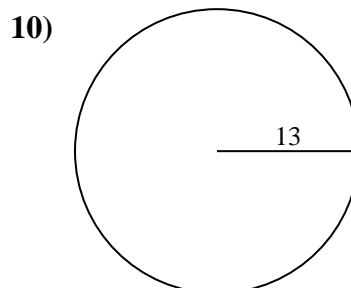
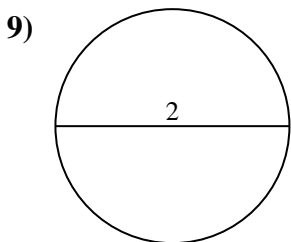
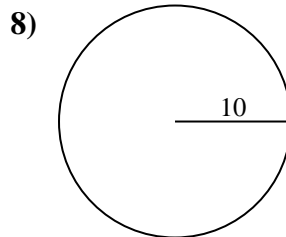
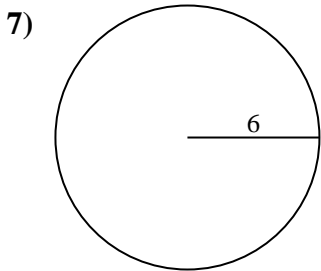
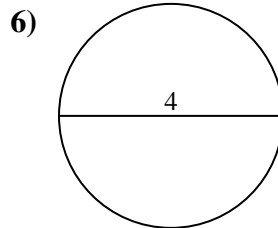
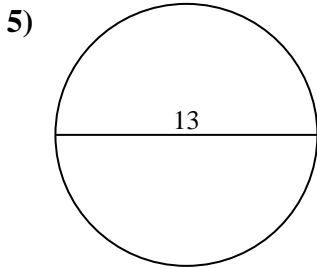
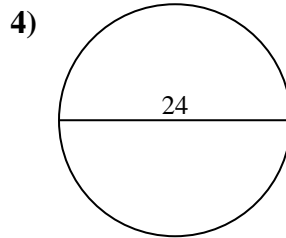
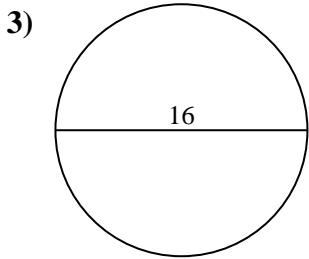
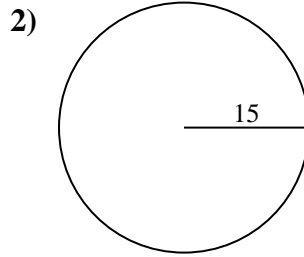
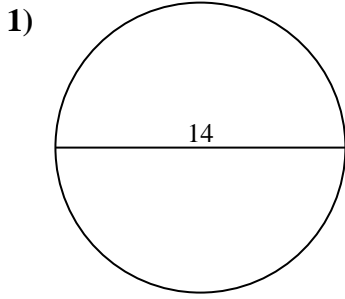
9c. _____

10a. _____

10c. _____



Encuentra el área y circunferencia de cada círculo. Los círculos no están a escala.



Respuestas

1a. 153.94 cm²

1c. 43.98 cm

2a. 706.86 cm²

2c. 94.25 cm

3a. 201.06 cm²

3c. 50.27 cm

4a. 452.39 cm²

4c. 75.4 cm

5a. 132.73 cm²

5c. 40.84 cm

6a. 12.57 cm²

6c. 12.57 cm

7a. 113.1 cm²

7c. 37.7 cm

8a. 314.16 cm²

8c. 62.83 cm

9a. 3.14 cm²

9c. 6.28 cm

10a. 530.93 cm²

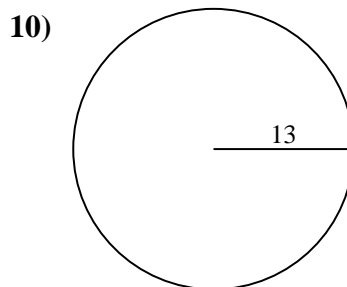
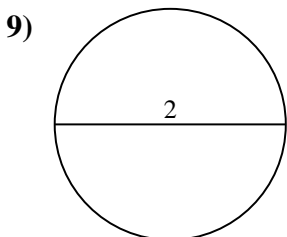
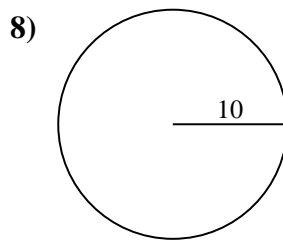
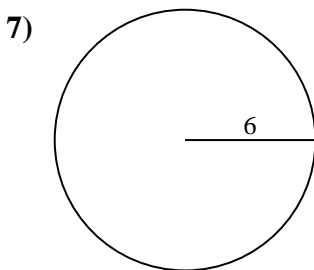
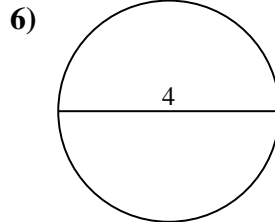
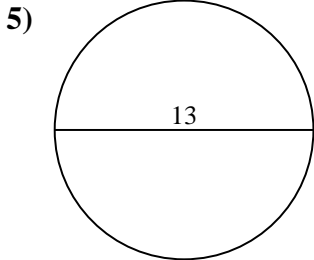
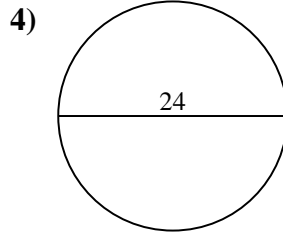
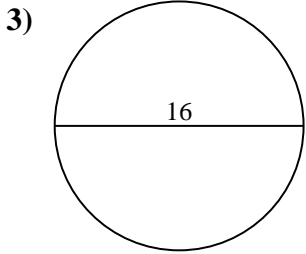
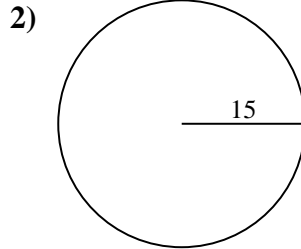
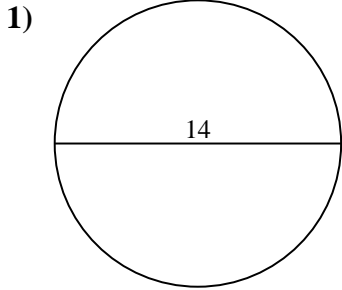
10c. 81.68 cm



Encuentra el área y circunferencia de cada círculo. Los círculos no están a escala.

12.57 cm ²	75.4 cm	530.93 cm ²	81.68 cm	706.86 cm ²
6.28 cm	153.94 cm ²	452.39 cm ²	132.73 cm ²	40.84 cm
50.27 cm	12.57 cm	3.14 cm ²	314.16 cm ²	43.98 cm
201.06 cm ²	113.1 cm ²	94.25 cm	62.83 cm	37.7 cm

Respuestas



1a. _____

1c. _____

2a. _____

2c. _____

3a. _____

3c. _____

4a. _____

4c. _____

5a. _____

5c. _____

6a. _____

6c. _____

7a. _____

7c. _____

8a. _____

8c. _____

9a. _____

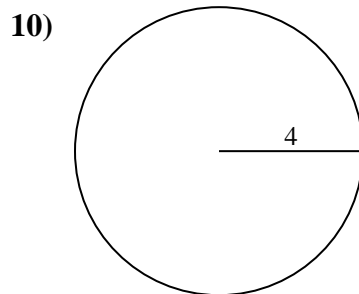
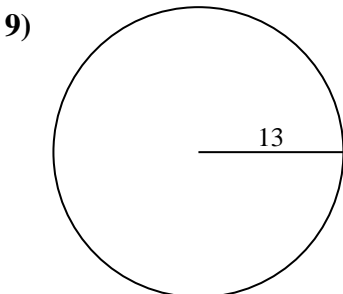
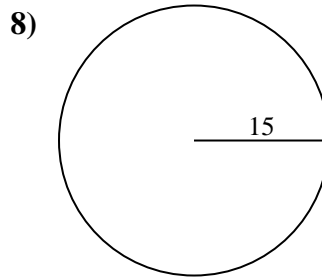
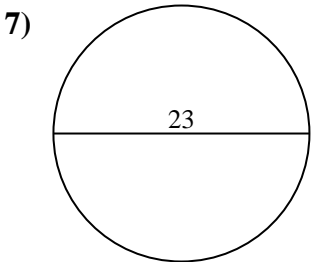
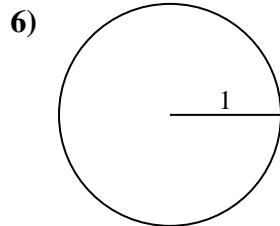
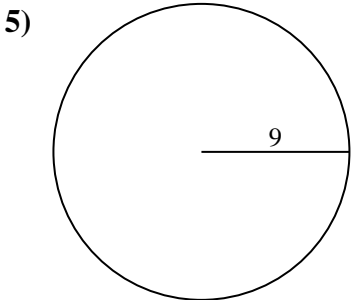
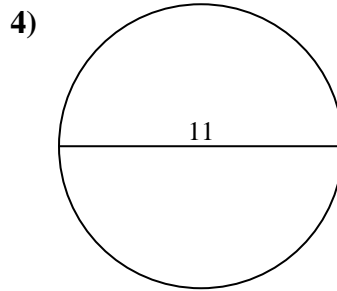
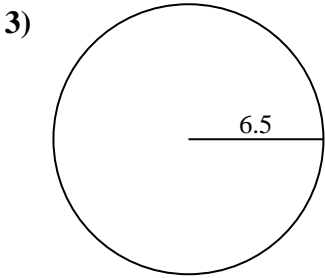
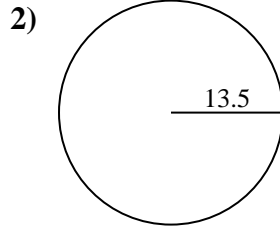
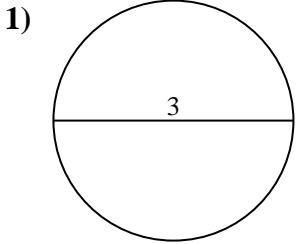
9c. _____

10a. _____

10c. _____



Encuentra el área y circunferencia de cada círculo. Los círculos no están a escala.



Respuestas

1a. _____

1c. _____

2a. _____

2c. _____

3a. _____

3c. _____

4a. _____

4c. _____

5a. _____

5c. _____

6a. _____

6c. _____

7a. _____

7c. _____

8a. _____

8c. _____

9a. _____

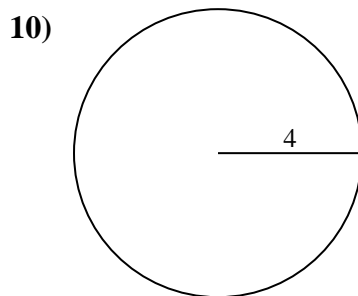
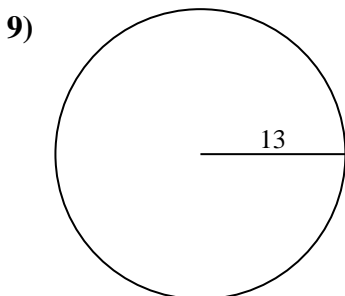
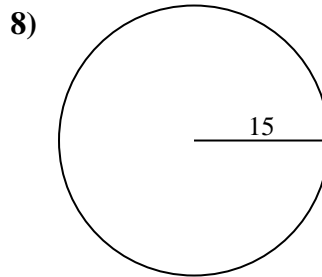
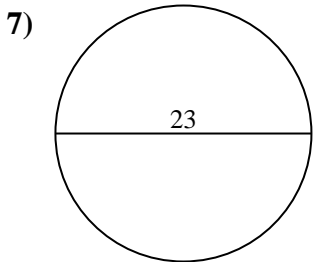
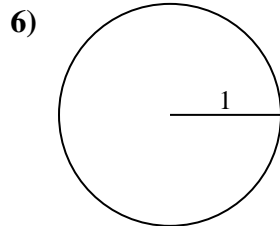
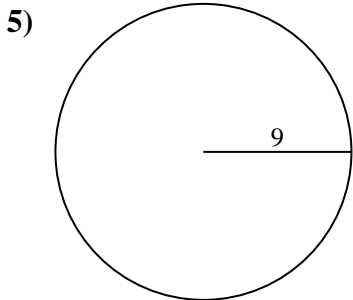
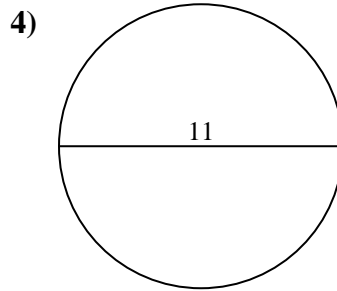
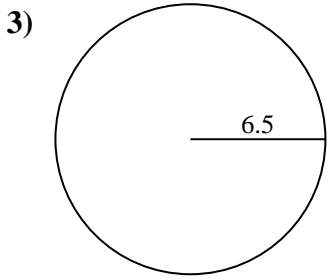
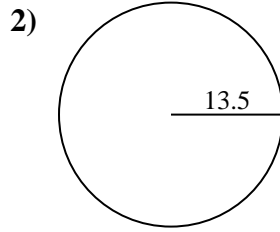
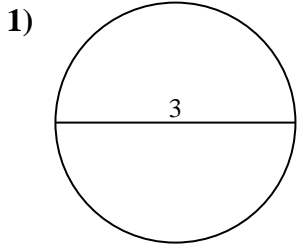
9c. _____

10a. _____

10c. _____



Encuentra el área y circunferencia de cada círculo. Los círculos no están a escala.



Respuestas

1a. 7.07 cm²

1c. 9.42 cm

2a. 572.56 cm²

2c. 84.82 cm

3a. 132.73 cm²

3c. 40.84 cm

4a. 95.03 cm²

4c. 34.56 cm

5a. 254.47 cm²

5c. 56.55 cm

6a. 3.14 cm²

6c. 6.28 cm

7a. 415.48 cm²

7c. 72.26 cm

8a. 706.86 cm²

8c. 94.25 cm

9a. 530.93 cm²

9c. 81.68 cm

10a. 50.27 cm²

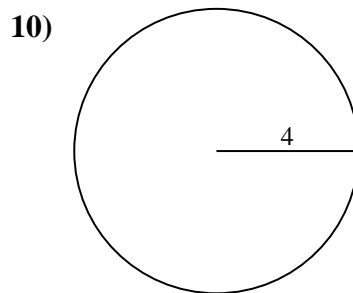
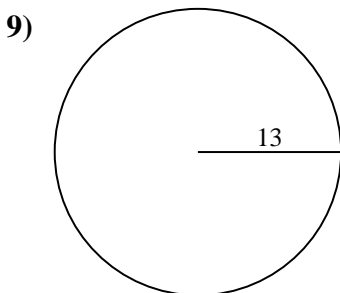
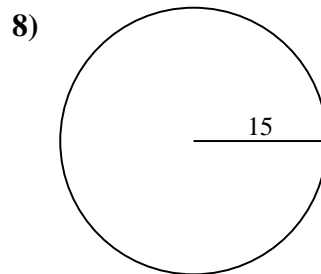
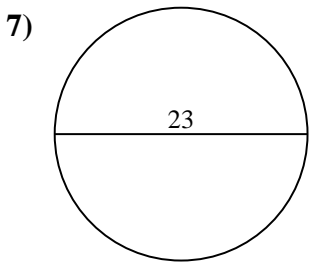
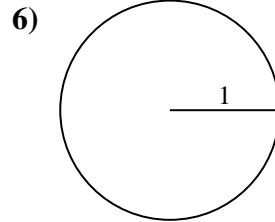
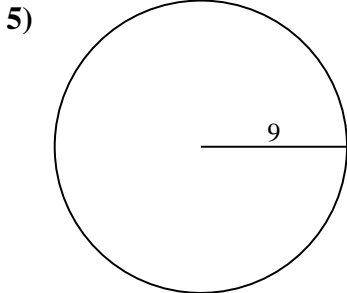
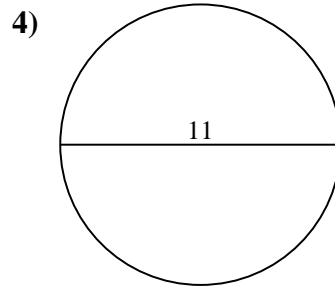
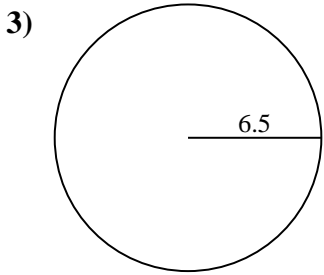
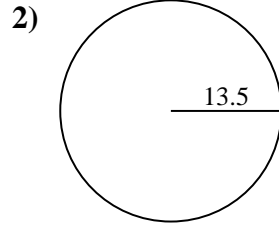
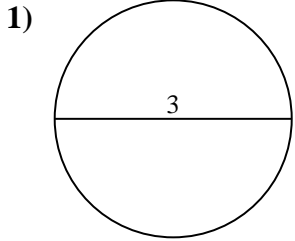
10c. 25.13 cm



Encuentra el área y circunferencia de cada círculo. Los círculos no están a escala.

40.84 cm	50.27 cm ²	572.56 cm ²	34.56 cm	706.86 cm ²
56.55 cm	25.13 cm	94.25 cm	3.14 cm ²	72.26 cm
9.42 cm	254.47 cm ²	84.82 cm	7.07 cm ²	95.03 cm ²
132.73 cm ²	6.28 cm	81.68 cm	415.48 cm ²	530.93 cm ²

Respuestas



1a. _____

1c. _____

2a. _____

2c. _____

3a. _____

3c. _____

4a. _____

4c. _____

5a. _____

5c. _____

6a. _____

6c. _____

7a. _____

7c. _____

8a. _____

8c. _____

9a. _____

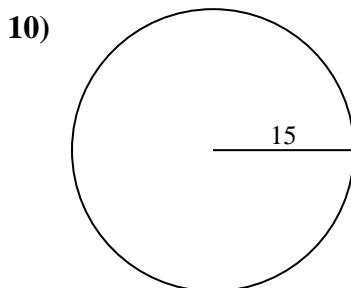
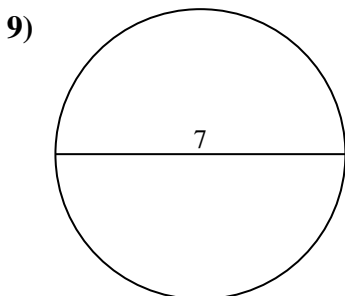
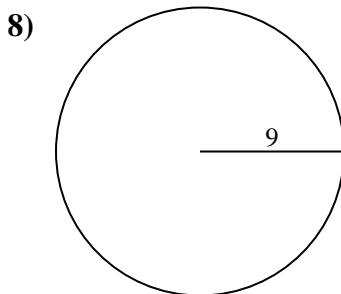
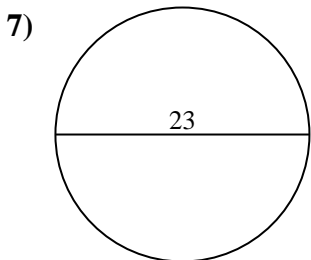
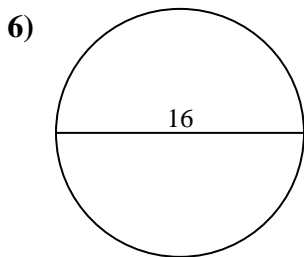
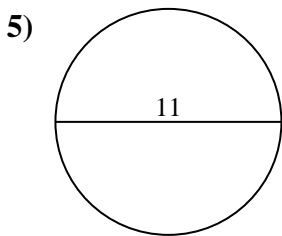
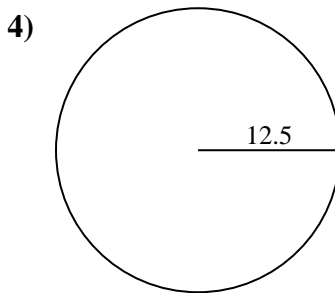
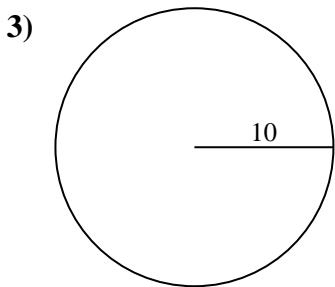
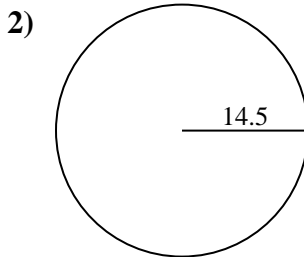
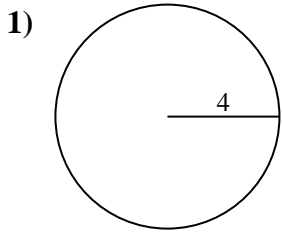
9c. _____

10a. _____

10c. _____



Encuentra el área y circunferencia de cada círculo. Los círculos no están a escala.



Respuestas

1a. _____

1c. _____

2a. _____

2c. _____

3a. _____

3c. _____

4a. _____

4c. _____

5a. _____

5c. _____

6a. _____

6c. _____

7a. _____

7c. _____

8a. _____

8c. _____

9a. _____

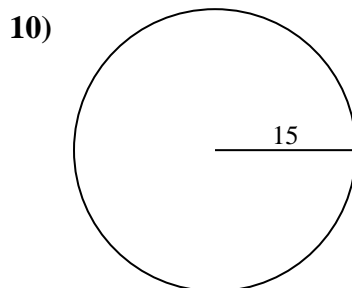
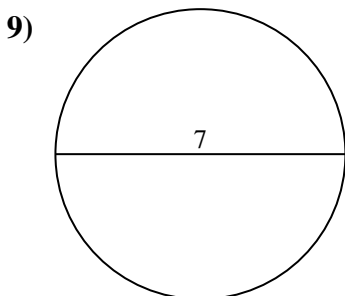
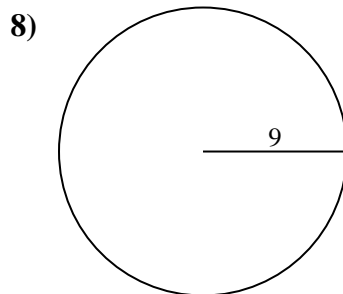
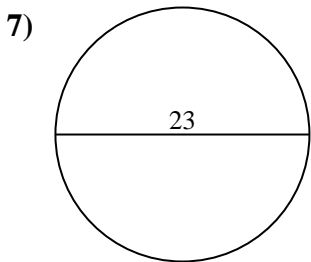
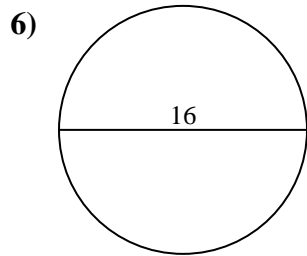
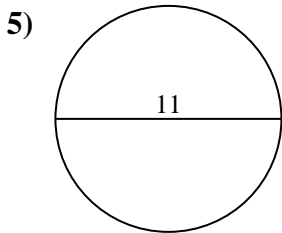
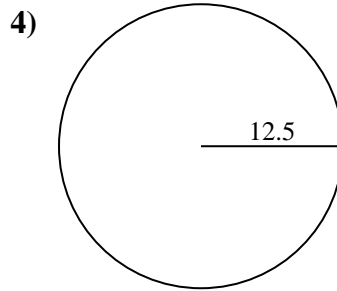
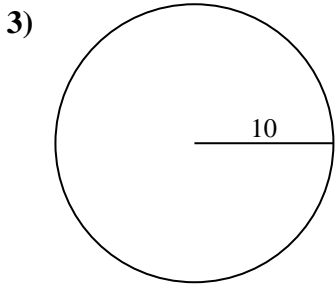
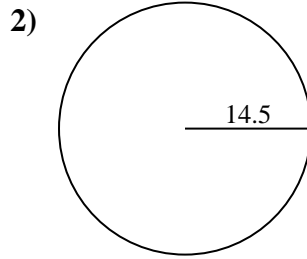
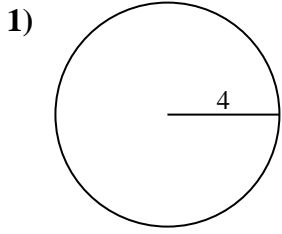
9c. _____

10a. _____

10c. _____



Encuentra el área y circunferencia de cada círculo. Los círculos no están a escala.



Respuestas

1a. 50.27 cm²

1c. 25.13 cm

2a. 660.52 cm²

2c. 91.11 cm

3a. 314.16 cm²

3c. 62.83 cm

4a. 490.87 cm²

4c. 78.54 cm

5a. 95.03 cm²

5c. 34.56 cm

6a. 201.06 cm²

6c. 50.27 cm

7a. 415.48 cm²

7c. 72.26 cm

8a. 254.47 cm²

8c. 56.55 cm

9a. 38.48 cm²

9c. 21.99 cm

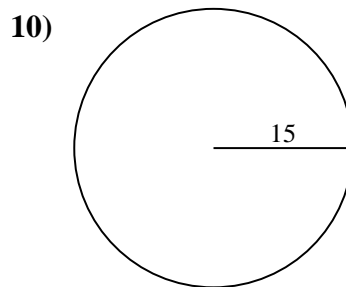
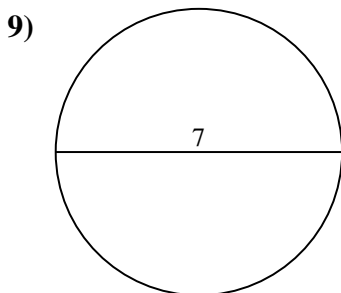
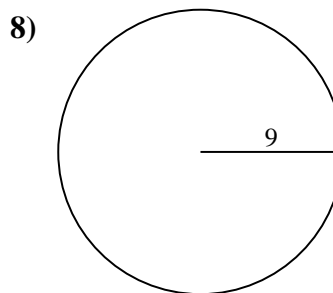
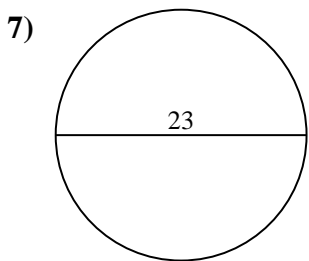
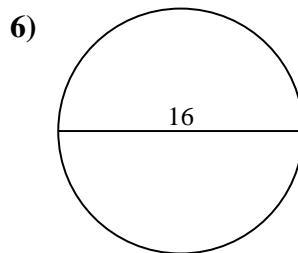
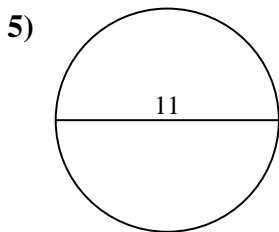
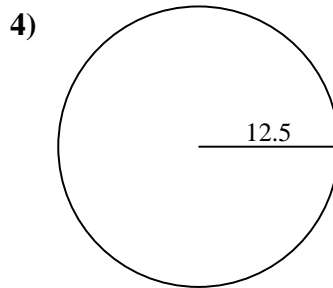
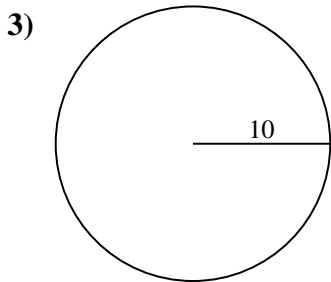
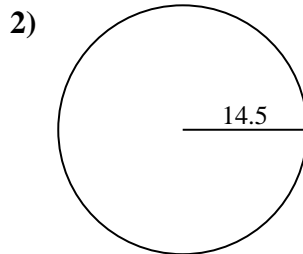
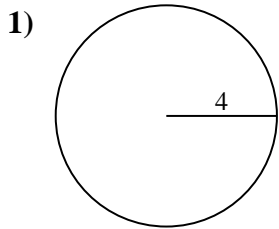
10a. 706.86 cm²

10c. 94.25 cm



Encuentra el área y circunferencia de cada círculo. Los círculos no están a escala.

34.56 cm	72.26 cm	38.48 cm ²	56.55 cm	78.54 cm
314.16 cm ²	95.03 cm ²	706.86 cm ²	25.13 cm	254.47 cm ²
50.27 cm	94.25 cm	50.27 cm ²	91.11 cm	21.99 cm
660.52 cm ²	201.06 cm ²	62.83 cm	490.87 cm ²	415.48 cm ²



Respuestas

1a. _____

1c. _____

2a. _____

2c. _____

3a. _____

3c. _____

4a. _____

4c. _____

5a. _____

5c. _____

6a. _____

6c. _____

7a. _____

7c. _____

8a. _____

8c. _____

9a. _____

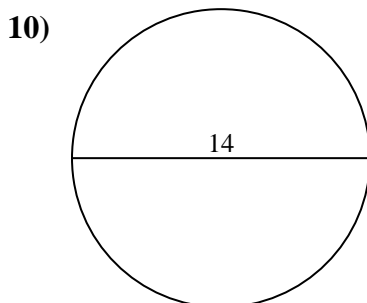
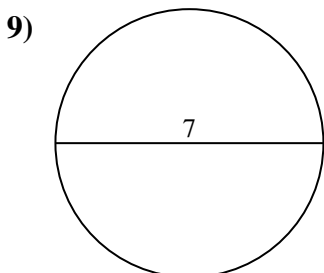
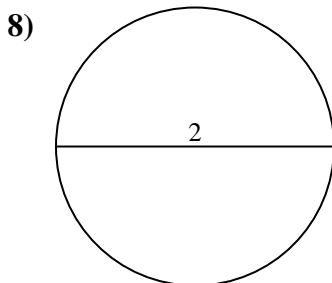
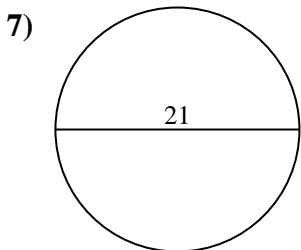
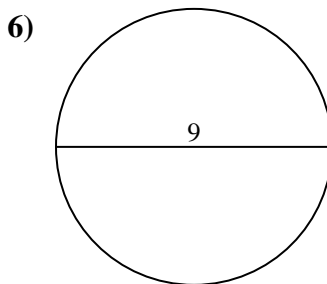
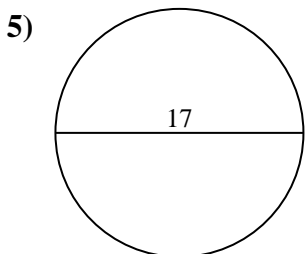
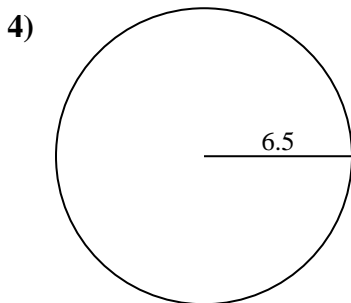
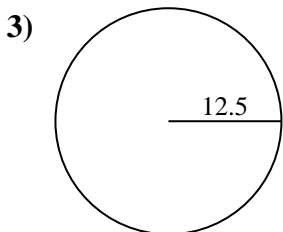
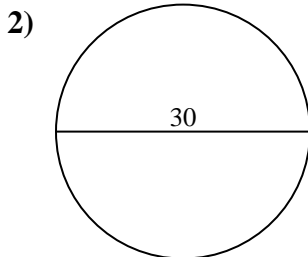
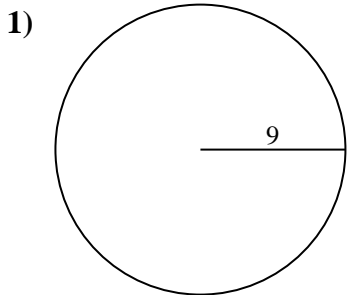
9c. _____

10a. _____

10c. _____



Encuentra el área y circunferencia de cada círculo. Los círculos no están a escala.



Respuestas

1a. _____

1c. _____

2a. _____

2c. _____

3a. _____

3c. _____

4a. _____

4c. _____

5a. _____

5c. _____

6a. _____

6c. _____

7a. _____

7c. _____

8a. _____

8c. _____

9a. _____

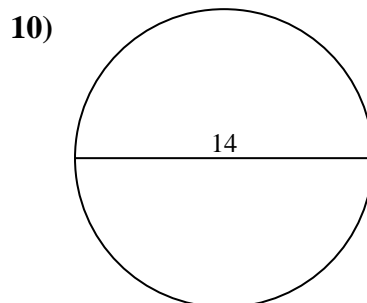
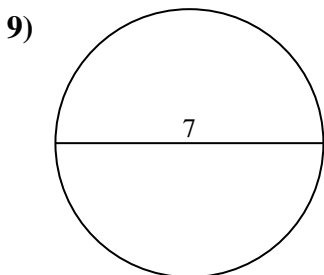
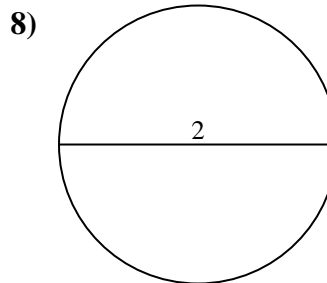
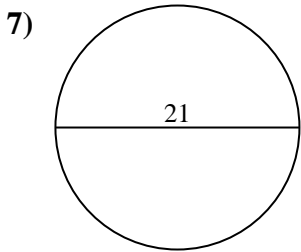
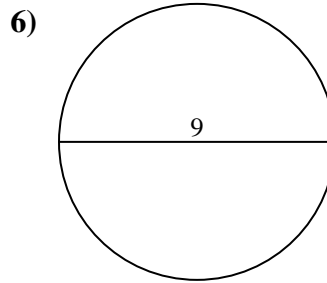
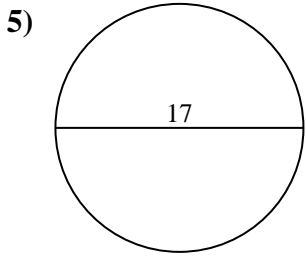
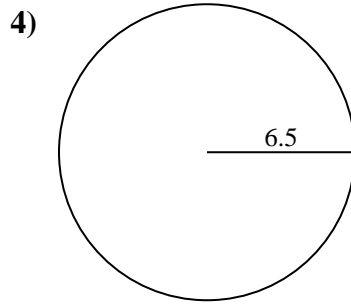
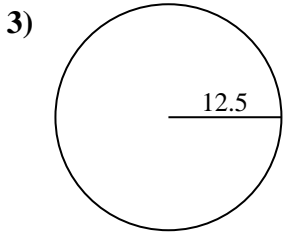
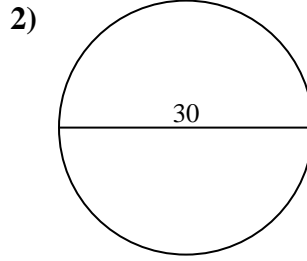
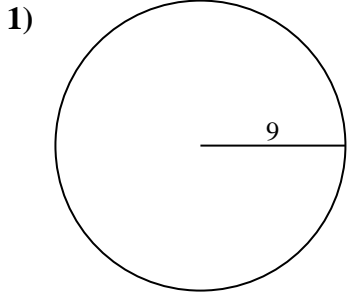
9c. _____

10a. _____

10c. _____



Encuentra el área y circunferencia de cada círculo. Los círculos no están a escala.



Respuestas

1a. 254.47 cm²

1c. 56.55 cm

2a. 706.86 cm²

2c. 94.25 cm

3a. 490.87 cm²

3c. 78.54 cm

4a. 132.73 cm²

4c. 40.84 cm

5a. 226.98 cm²

5c. 53.41 cm

6a. 63.62 cm²

6c. 28.27 cm

7a. 346.36 cm²

7c. 65.97 cm

8a. 3.14 cm²

8c. 6.28 cm

9a. 38.48 cm²

9c. 21.99 cm

10a. 153.94 cm²

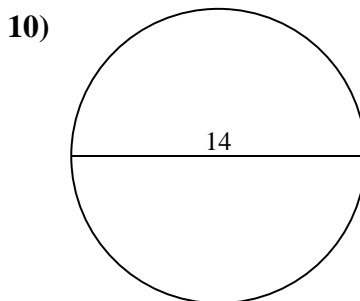
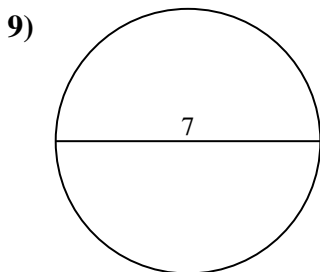
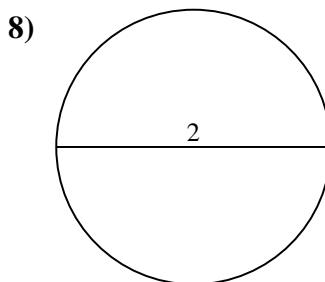
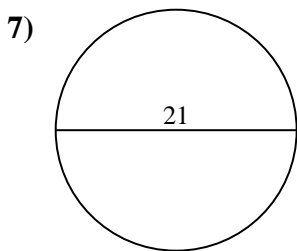
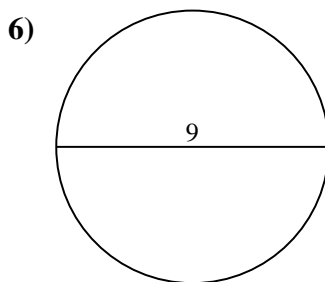
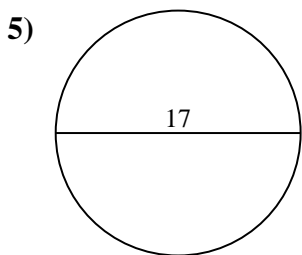
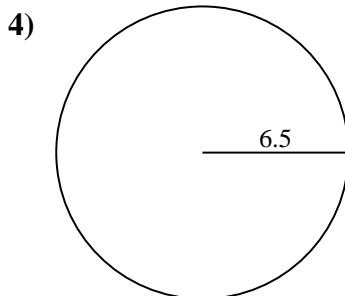
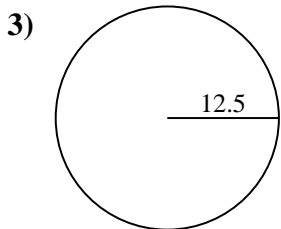
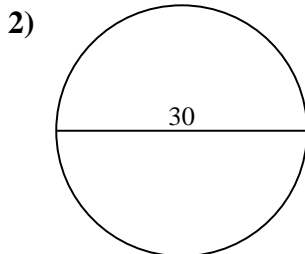
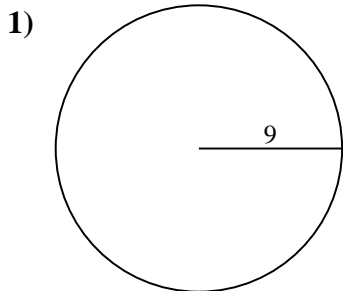
10c. 43.98 cm



Encuentra el área y circunferencia de cada círculo. Los círculos no están a escala.

65.97 cm	226.98 cm ²	40.84 cm	53.41 cm	43.98 cm
94.25 cm	254.47 cm ²	78.54 cm	21.99 cm	346.36 cm ²
706.86 cm ²	490.87 cm ²	63.62 cm ²	6.28 cm	38.48 cm ²
153.94 cm ²	56.55 cm	28.27 cm	132.73 cm ²	3.14 cm ²

Respuestas



1a. _____

1c. _____

2a. _____

2c. _____

3a. _____

3c. _____

4a. _____

4c. _____

5a. _____

5c. _____

6a. _____

6c. _____

7a. _____

7c. _____

8a. _____

8c. _____

9a. _____

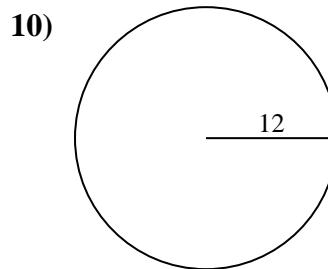
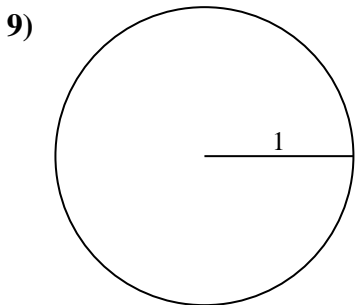
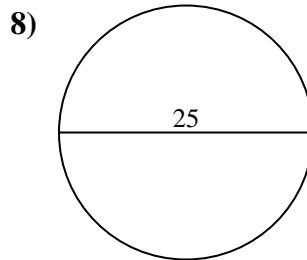
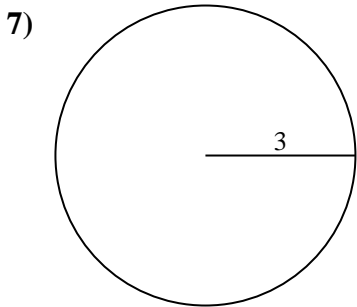
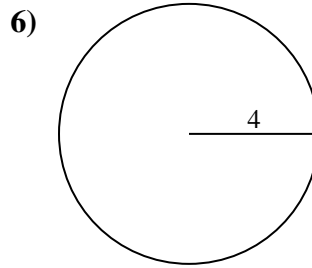
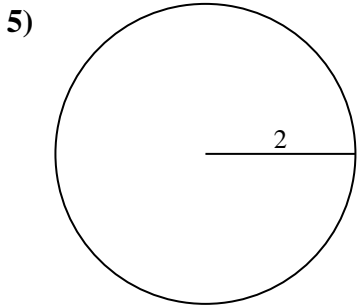
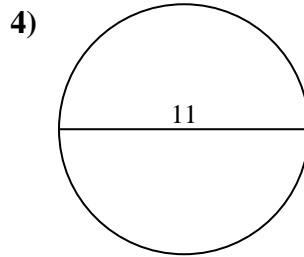
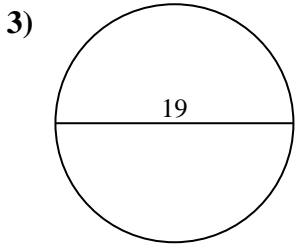
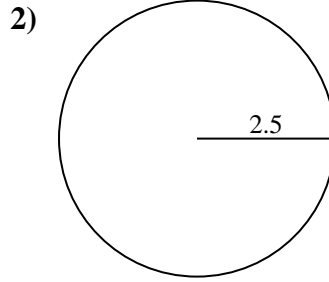
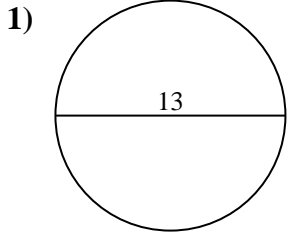
9c. _____

10a. _____

10c. _____



Encuentra el área y circunferencia de cada círculo. Los círculos no están a escala.



Respuestas

1a. _____

1c. _____

2a. _____

2c. _____

3a. _____

3c. _____

4a. _____

4c. _____

5a. _____

5c. _____

6a. _____

6c. _____

7a. _____

7c. _____

8a. _____

8c. _____

9a. _____

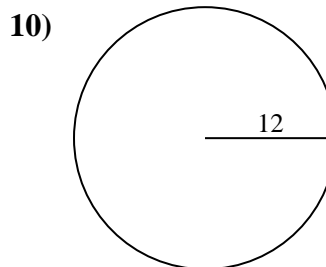
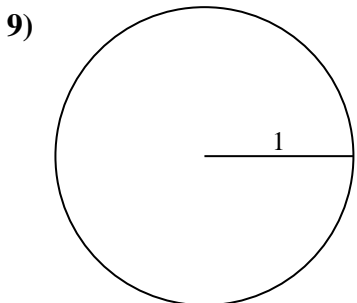
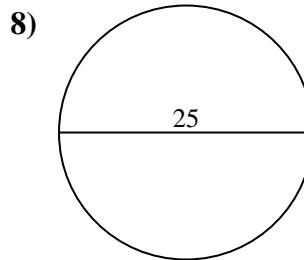
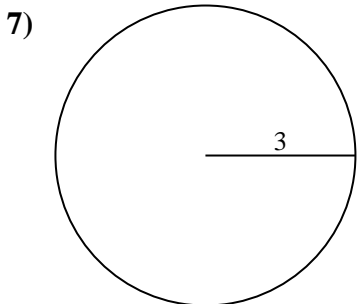
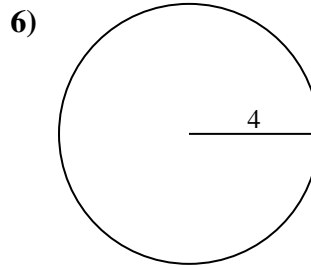
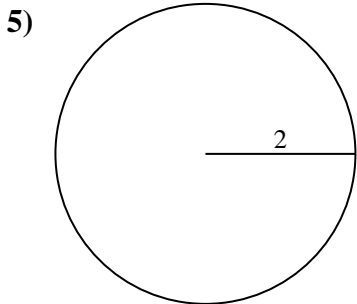
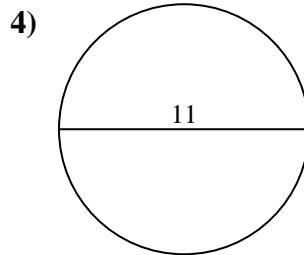
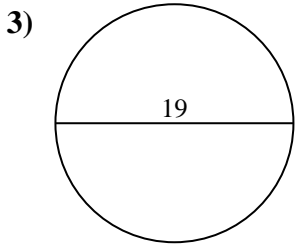
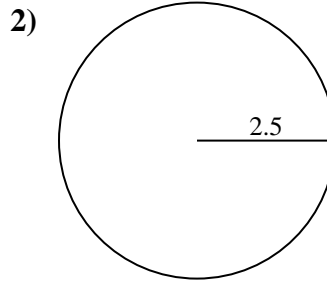
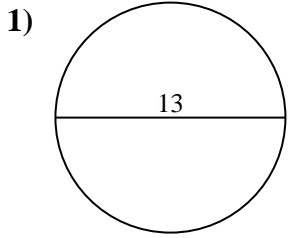
9c. _____

10a. _____

10c. _____



Encuentra el área y circunferencia de cada círculo. Los círculos no están a escala.



Respuestas

1a. 132.73 cm²

1c. 40.84 cm

2a. 19.63 cm²

2c. 15.71 cm

3a. 283.53 cm²

3c. 59.69 cm

4a. 95.03 cm²

4c. 34.56 cm

5a. 12.57 cm²

5c. 12.57 cm

6a. 50.27 cm²

6c. 25.13 cm

7a. 28.27 cm²

7c. 18.85 cm

8a. 490.87 cm²

8c. 78.54 cm

9a. 3.14 cm²

9c. 6.28 cm

10a. 452.39 cm²

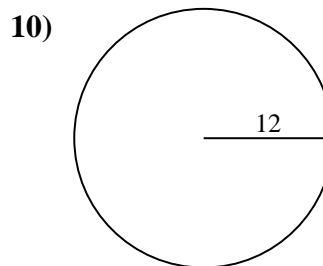
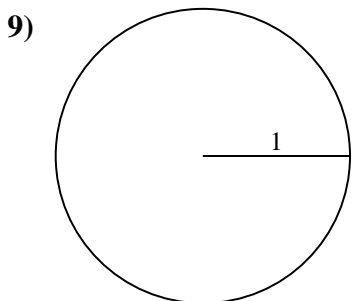
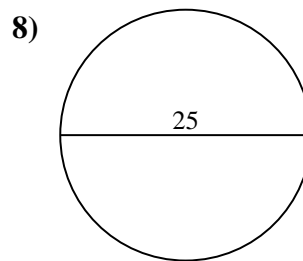
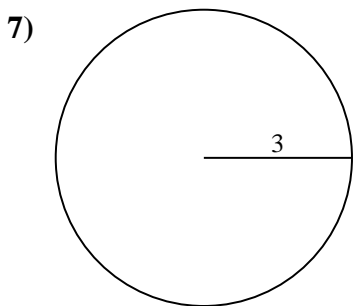
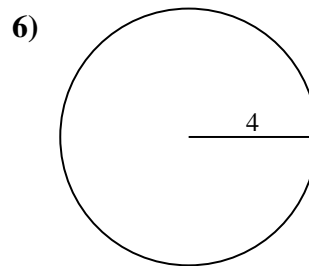
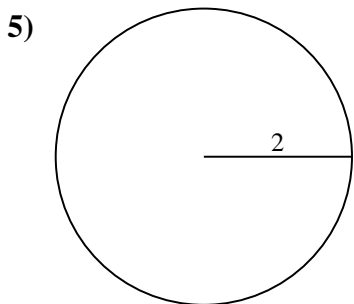
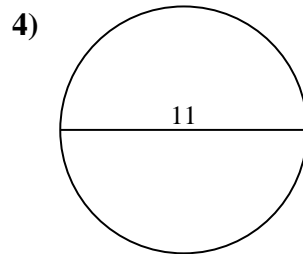
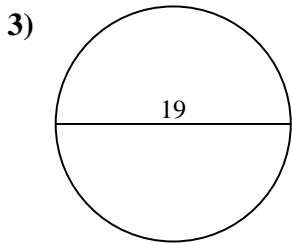
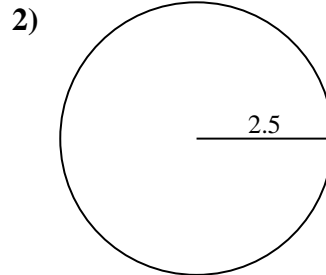
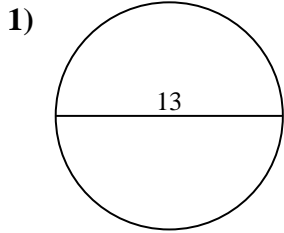
10c. 75.4 cm



Encuentra el área y circunferencia de cada círculo. Los círculos no están a escala.

3.14 cm ²	19.63 cm ²	78.54 cm	132.73 cm ²	12.57 cm ²
452.39 cm ²	15.71 cm	12.57 cm	283.53 cm ²	28.27 cm ²
6.28 cm	490.87 cm ²	25.13 cm	34.56 cm	50.27 cm ²
18.85 cm	59.69 cm	40.84 cm	75.4 cm	95.03 cm ²

Respuestas



1a. _____

1c. _____

2a. _____

2c. _____

3a. _____

3c. _____

4a. _____

4c. _____

5a. _____

5c. _____

6a. _____

6c. _____

7a. _____

7c. _____

8a. _____

8c. _____

9a. _____

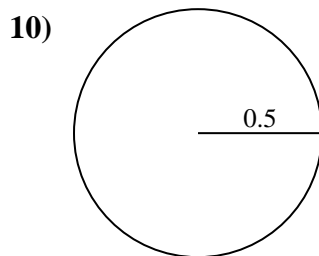
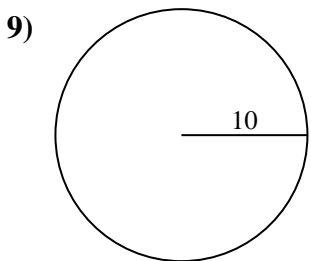
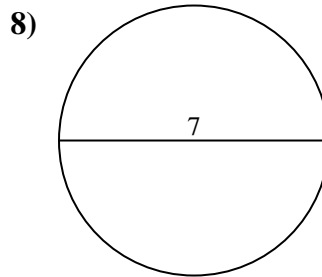
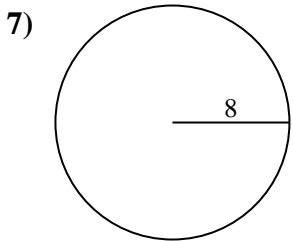
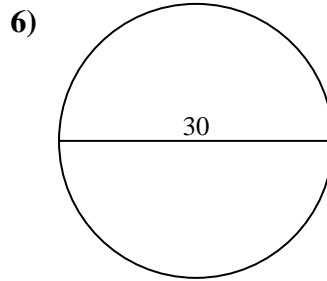
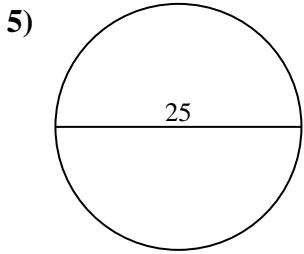
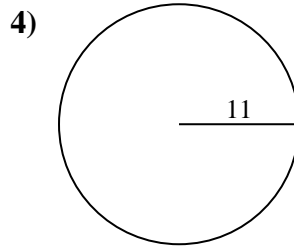
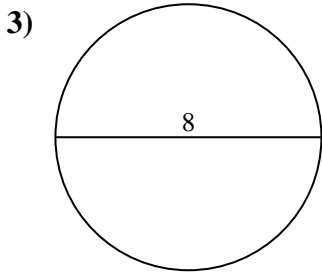
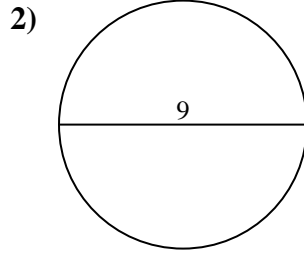
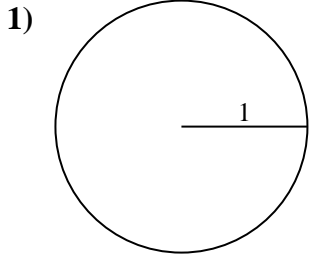
9c. _____

10a. _____

10c. _____



Encuentra el área y circunferencia de cada círculo. Los círculos no están a escala.



Respuestas

1a. _____

1c. _____

2a. _____

2c. _____

3a. _____

3c. _____

4a. _____

4c. _____

5a. _____

5c. _____

6a. _____

6c. _____

7a. _____

7c. _____

8a. _____

8c. _____

9a. _____

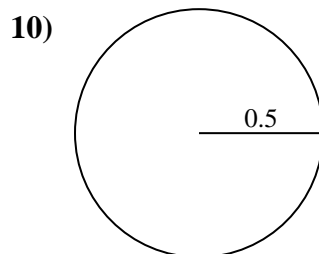
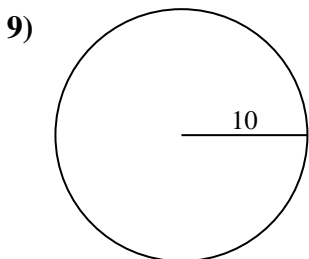
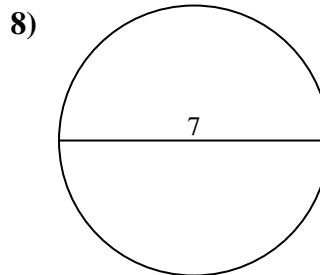
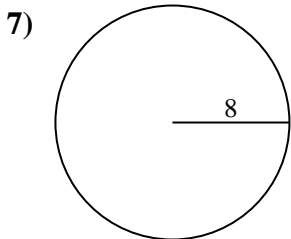
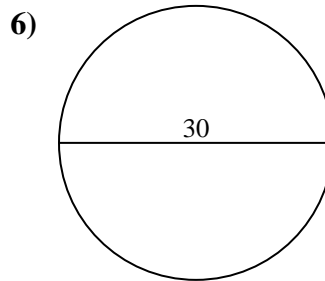
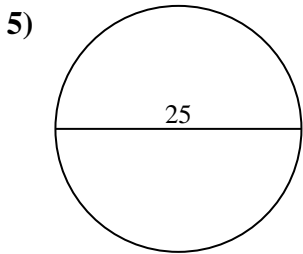
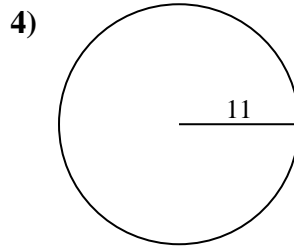
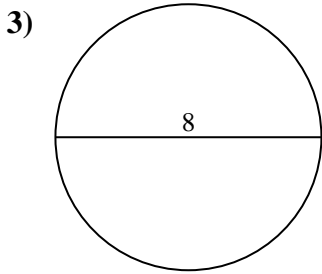
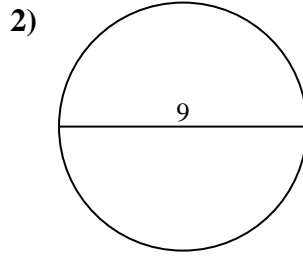
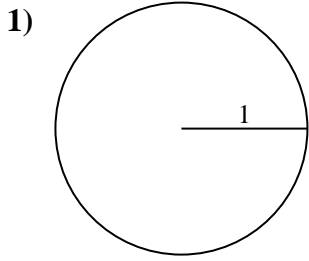
9c. _____

10a. _____

10c. _____



Encuentra el área y circunferencia de cada círculo. Los círculos no están a escala.



Respuestas

1a. 3.14 cm²

1c. 6.28 cm

2a. 63.62 cm²

2c. 28.27 cm

3a. 50.27 cm²

3c. 25.13 cm

4a. 380.13 cm²

4c. 69.12 cm

5a. 490.87 cm²

5c. 78.54 cm

6a. 706.86 cm²

6c. 94.25 cm

7a. 201.06 cm²

7c. 50.27 cm

8a. 38.48 cm²

8c. 21.99 cm

9a. 314.16 cm²

9c. 62.83 cm

10a. 0.79 cm²

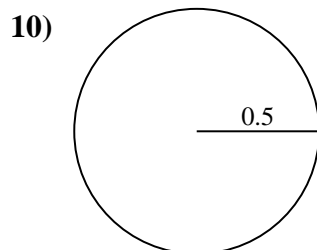
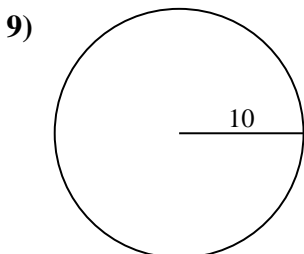
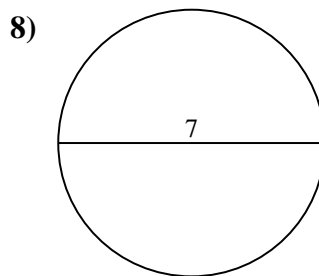
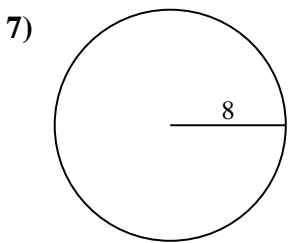
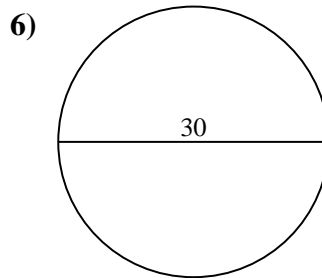
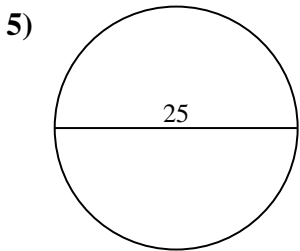
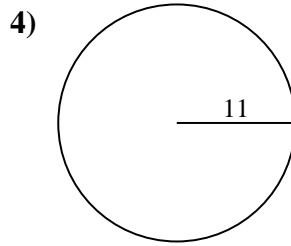
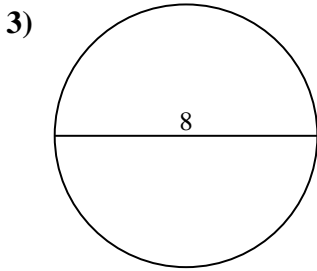
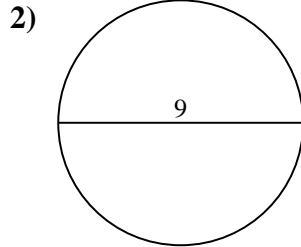
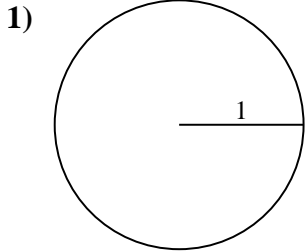
10c. 3.14 cm



Encuentra el área y circunferencia de cada círculo. Los círculos no están a escala.

490.87 cm ²	62.83 cm	94.25 cm	50.27 cm ²	706.86 cm ²
21.99 cm	78.54 cm	0.79 cm ²	38.48 cm ²	3.14 cm
314.16 cm ²	3.14 cm ²	201.06 cm ²	28.27 cm	63.62 cm ²
25.13 cm	69.12 cm	6.28 cm	50.27 cm	380.13 cm ²

Respuestas



1a. _____

1c. _____

2a. _____

2c. _____

3a. _____

3c. _____

4a. _____

4c. _____

5a. _____

5c. _____

6a. _____

6c. _____

7a. _____

7c. _____

8a. _____

8c. _____

9a. _____

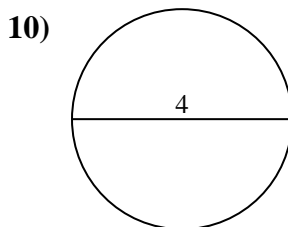
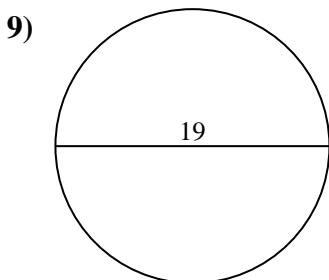
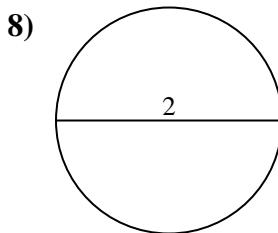
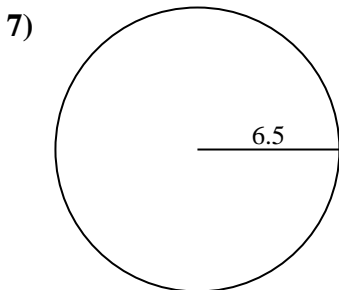
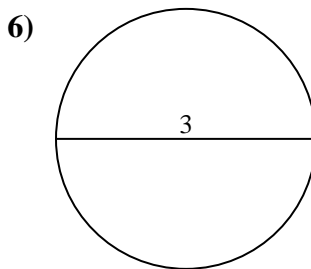
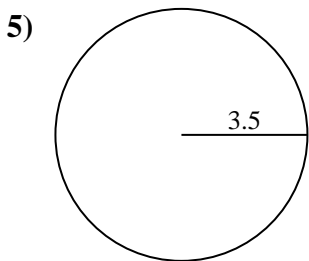
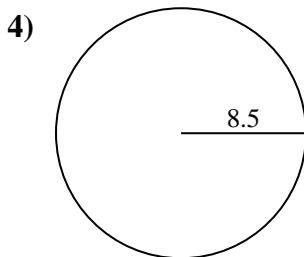
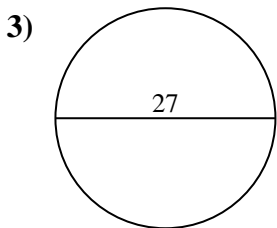
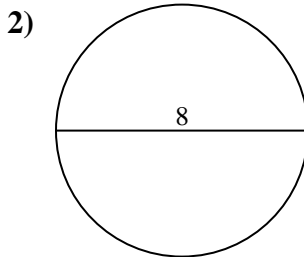
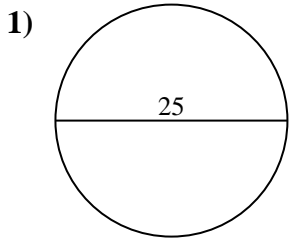
9c. _____

10a. _____

10c. _____



Encuentra el área y circunferencia de cada círculo. Los círculos no están a escala.



Respuestas

1a. _____

1c. _____

2a. _____

2c. _____

3a. _____

3c. _____

4a. _____

4c. _____

5a. _____

5c. _____

6a. _____

6c. _____

7a. _____

7c. _____

8a. _____

8c. _____

9a. _____

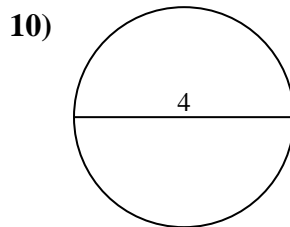
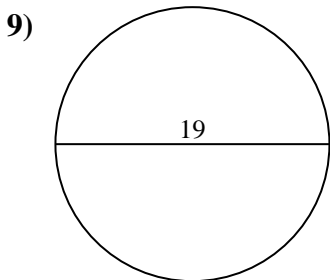
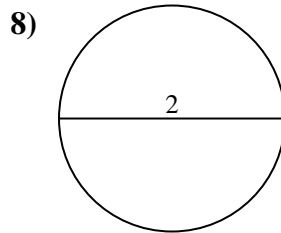
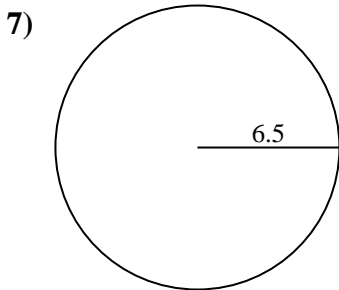
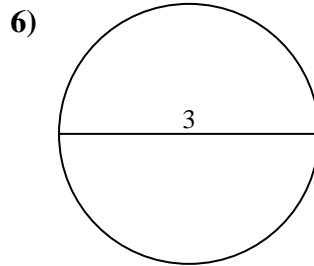
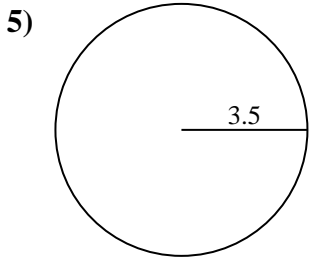
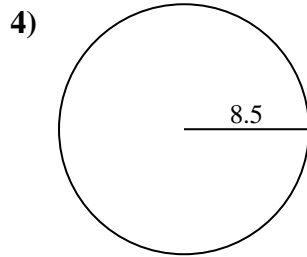
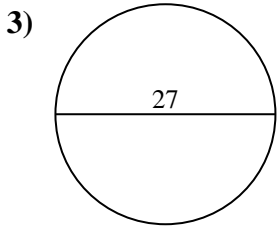
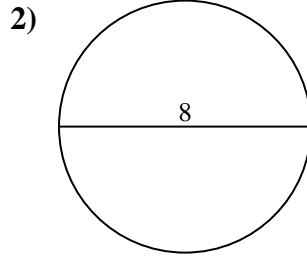
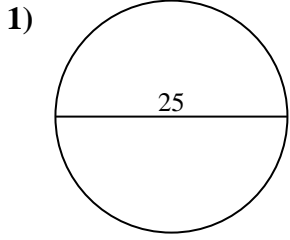
9c. _____

10a. _____

10c. _____



Encuentra el área y circunferencia de cada círculo. Los círculos no están a escala.



Respuestas

1a. 490.87 cm²

1c. 78.54 cm

2a. 50.27 cm²

2c. 25.13 cm

3a. 572.56 cm²

3c. 84.82 cm

4a. 226.98 cm²

4c. 53.41 cm

5a. 38.48 cm²

5c. 21.99 cm

6a. 7.07 cm²

6c. 9.42 cm

7a. 132.73 cm²

7c. 40.84 cm

8a. 3.14 cm²

8c. 6.28 cm

9a. 283.53 cm²

9c. 59.69 cm

10a. 12.57 cm²

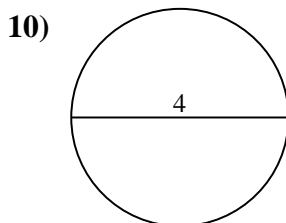
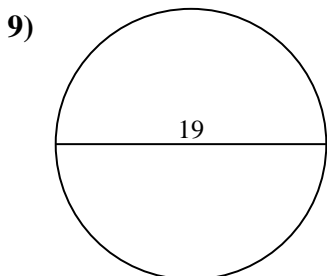
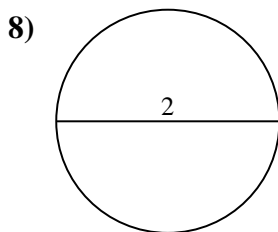
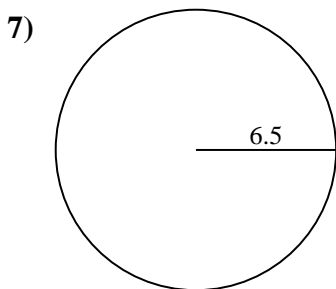
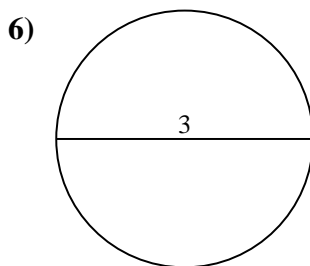
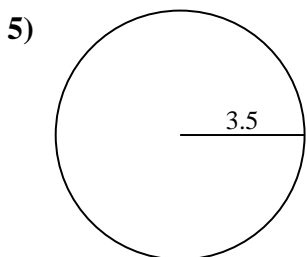
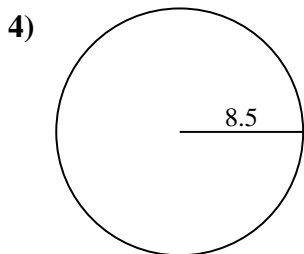
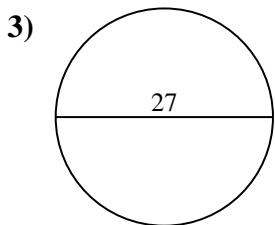
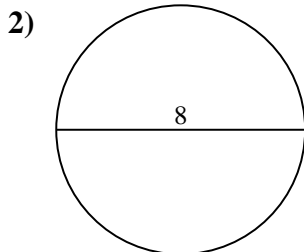
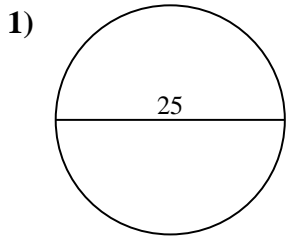
10c. 12.57 cm



Encuentra el área y circunferencia de cada círculo. Los círculos no están a escala.

78.54 cm	132.73 cm ²	59.69 cm	6.28 cm	50.27 cm ²
53.41 cm	9.42 cm	12.57 cm	25.13 cm	84.82 cm
21.99 cm	3.14 cm ²	572.56 cm ²	12.57 cm ²	490.87 cm ²
38.48 cm ²	40.84 cm	283.53 cm ²	7.07 cm ²	226.98 cm ²

Respuestas



1a. _____

1c. _____

2a. _____

2c. _____

3a. _____

3c. _____

4a. _____

4c. _____

5a. _____

5c. _____

6a. _____

6c. _____

7a. _____

7c. _____

8a. _____

8c. _____

9a. _____

9c. _____

10a. _____

10c. _____