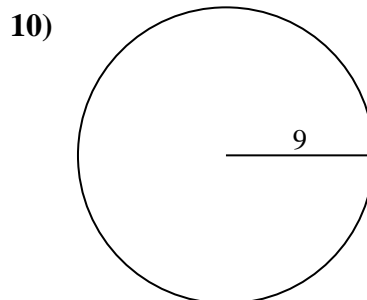
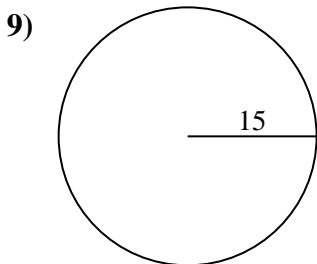
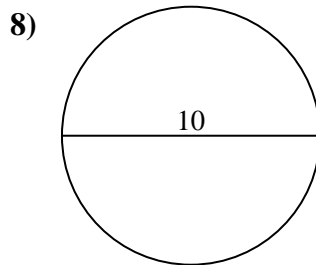
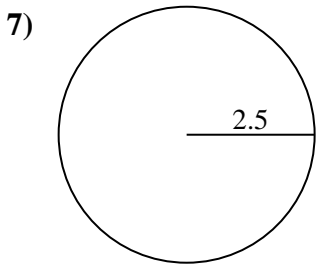
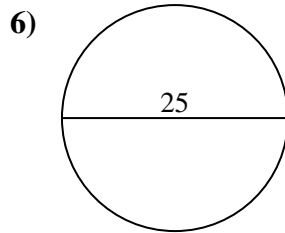
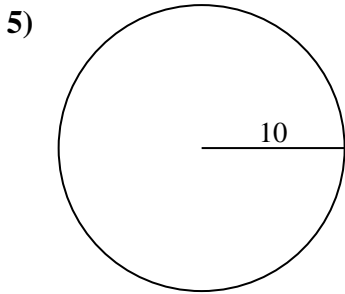
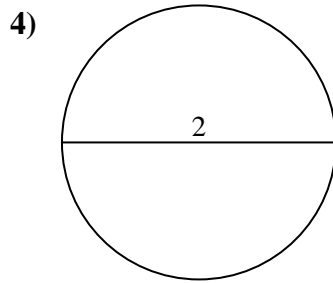
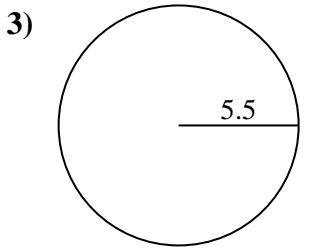
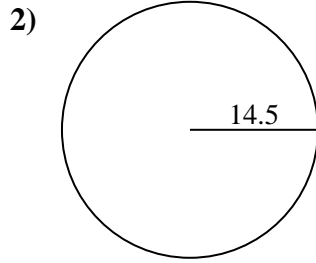
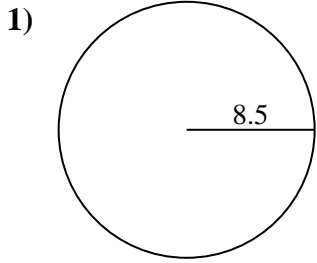




Encuentra el área y circunferencia de cada círculo. Los círculos no están a escala.



Respuestas

1a. _____

1c. _____

2a. _____

2c. _____

3a. _____

3c. _____

4a. _____

4c. _____

5a. _____

5c. _____

6a. _____

6c. _____

7a. _____

7c. _____

8a. _____

8c. _____

9a. _____

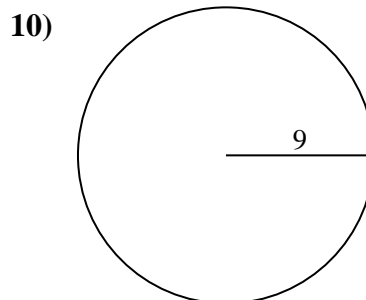
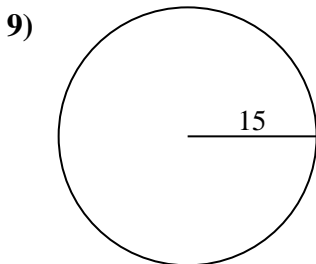
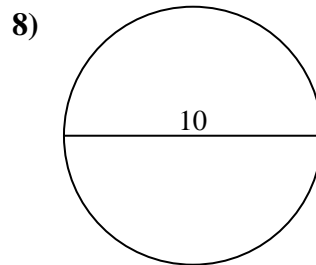
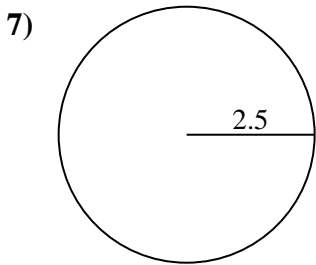
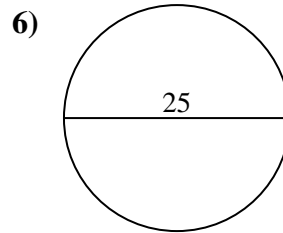
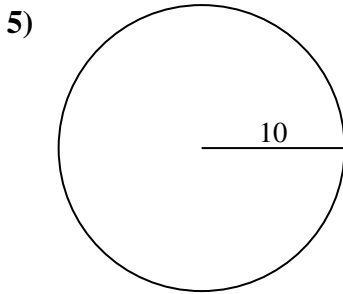
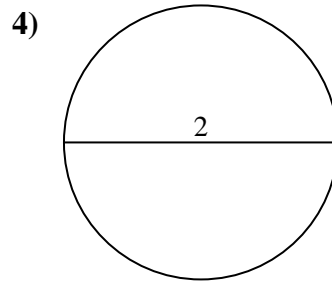
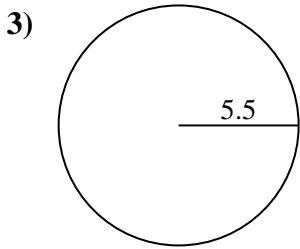
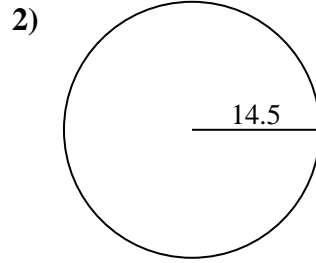
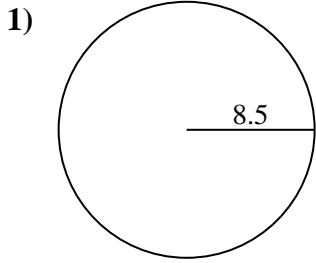
9c. _____

10a. _____

10c. _____



Encuentra el área y circunferencia de cada círculo. Los círculos no están a escala.



Respuestas

1a. **226.98 cm²**

1c. **53.41 cm**

2a. **660.52 cm²**

2c. **91.11 cm**

3a. **95.03 cm²**

3c. **34.56 cm**

4a. **3.14 cm²**

4c. **6.28 cm**

5a. **314.16 cm²**

5c. **62.83 cm**

6a. **490.87 cm²**

6c. **78.54 cm**

7a. **19.63 cm²**

7c. **15.71 cm**

8a. **78.54 cm²**

8c. **31.42 cm**

9a. **706.86 cm²**

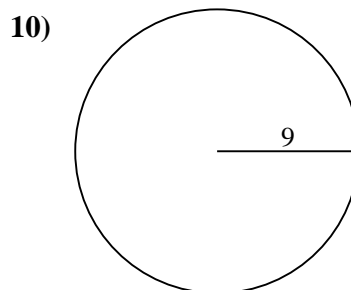
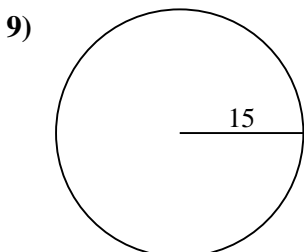
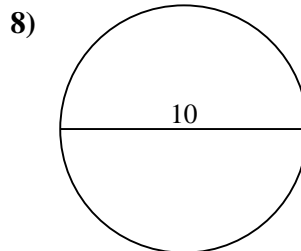
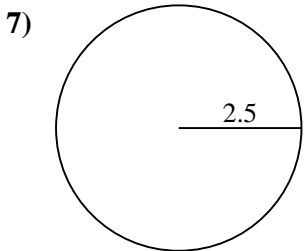
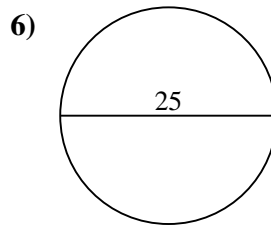
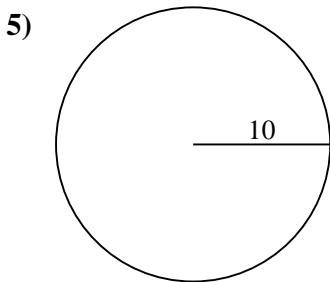
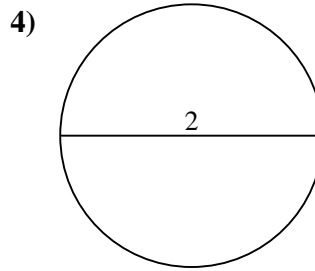
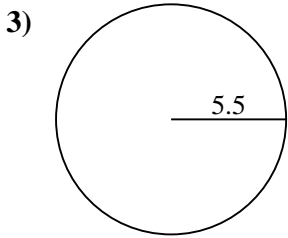
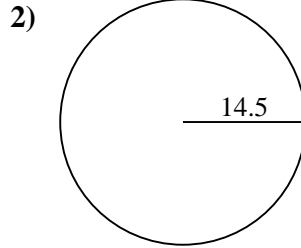
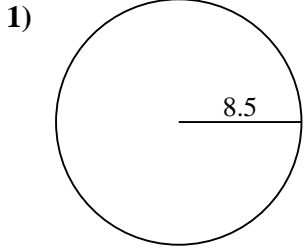
9c. **94.25 cm**

10a. **254.47 cm²**

10c. **56.55 cm**



Encuentra el área y circunferencia de cada círculo. Los círculos no están a escala.



Respuestas

1a. _____

1c. _____

2a. _____

2c. _____

3a. _____

3c. _____

4a. _____

4c. _____

5a. _____

5c. _____

6a. _____

6c. _____

7a. _____

7c. _____

8a. _____

8c. _____

9a. _____

9c. _____

10a. _____

10c. _____