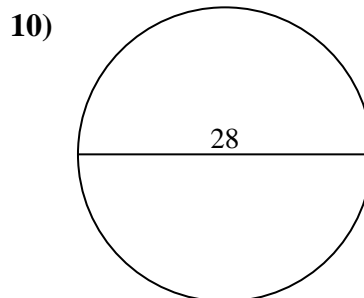
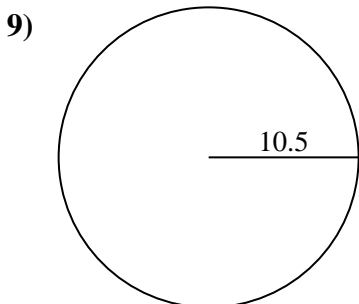
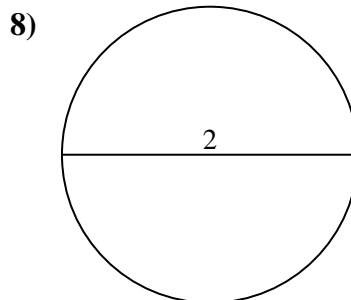
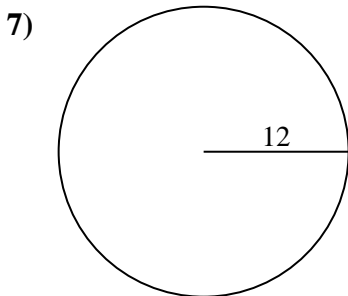
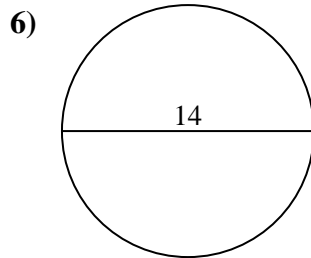
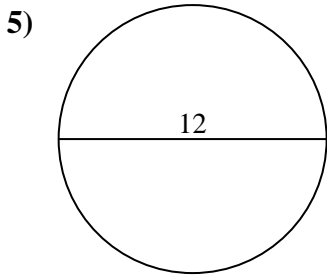
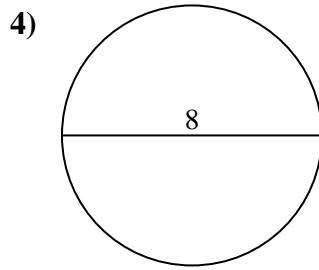
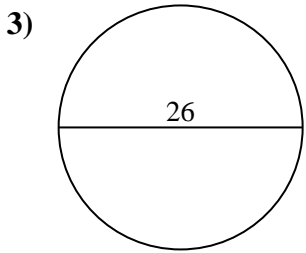
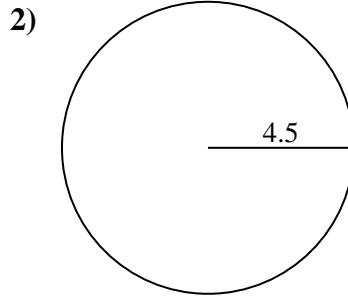
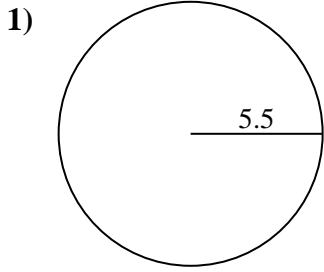




Encuentra el área y circunferencia de cada círculo. Los círculos no están a escala.



Respuestas

1a. _____

1c. _____

2a. _____

2c. _____

3a. _____

3c. _____

4a. _____

4c. _____

5a. _____

5c. _____

6a. _____

6c. _____

7a. _____

7c. _____

8a. _____

8c. _____

9a. _____

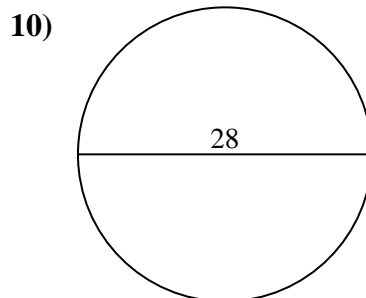
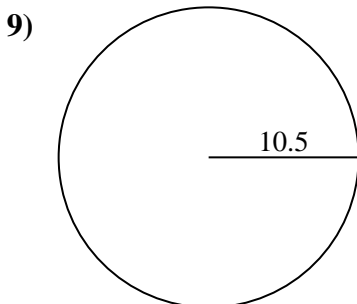
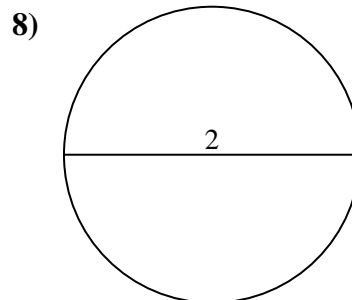
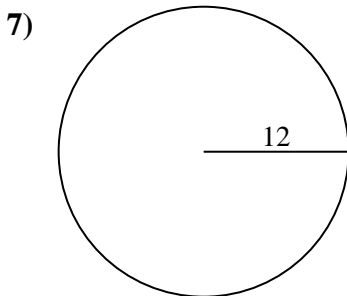
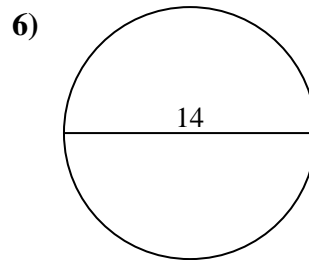
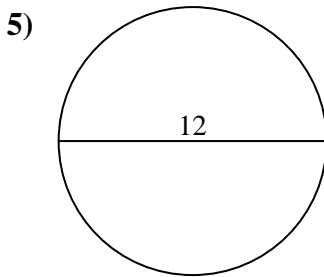
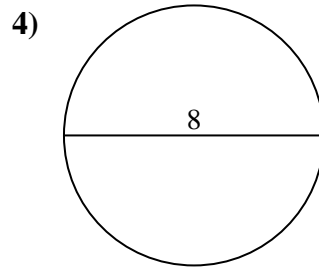
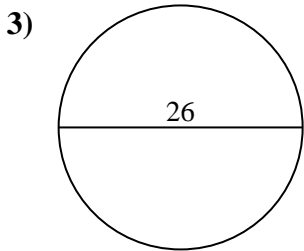
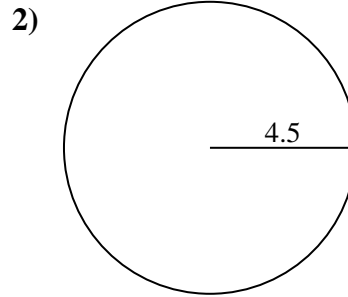
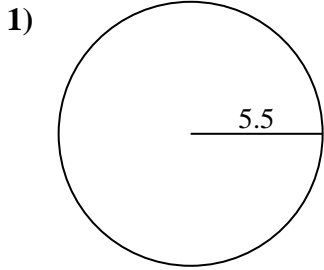
9c. _____

10a. _____

10c. _____



Encuentra el área y circunferencia de cada círculo. Los círculos no están a escala.



Respuestas

1a. 95.03 cm²

1c. 34.56 cm

2a. 63.62 cm²

2c. 28.27 cm

3a. 530.93 cm²

3c. 81.68 cm

4a. 50.27 cm²

4c. 25.13 cm

5a. 113.1 cm²

5c. 37.7 cm

6a. 153.94 cm²

6c. 43.98 cm

7a. 452.39 cm²

7c. 75.4 cm

8a. 3.14 cm²

8c. 6.28 cm

9a. 346.36 cm²

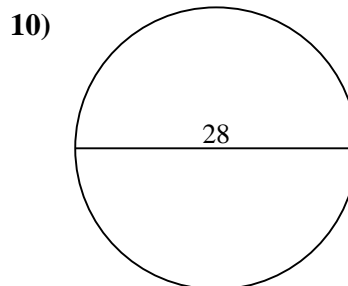
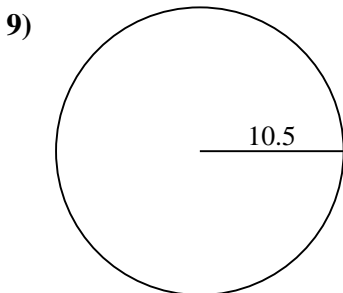
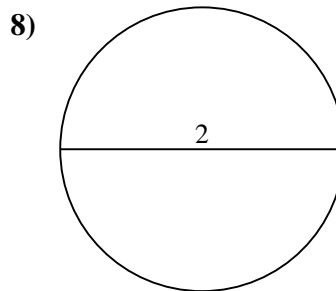
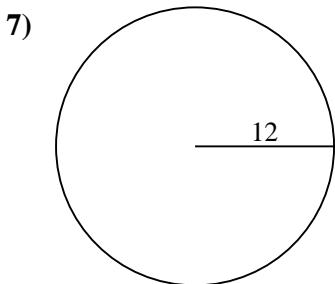
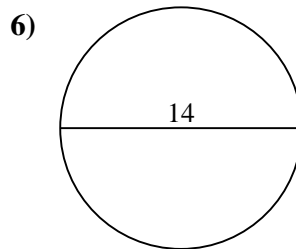
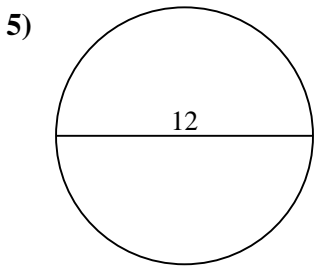
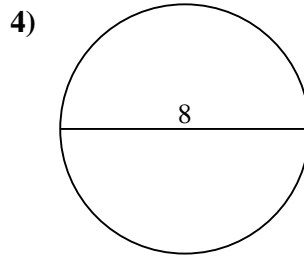
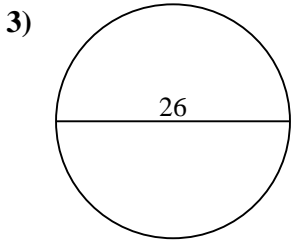
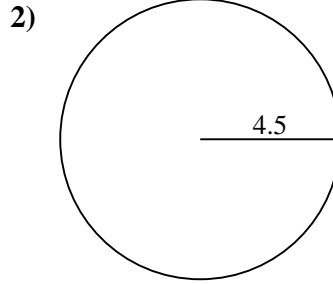
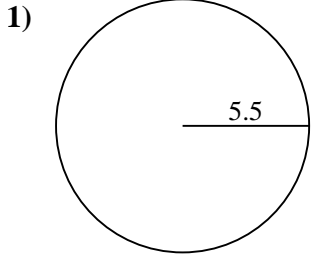
9c. 65.97 cm

10a. 615.75 cm²

10c. 87.96 cm



Encuentra el área y circunferencia de cada círculo. Los círculos no están a escala.



Respuestas

1a. _____

1c. _____

2a. _____

2c. _____

3a. _____

3c. _____

4a. _____

4c. _____

5a. _____

5c. _____

6a. _____

6c. _____

7a. _____

7c. _____

8a. _____

8c. _____

9a. _____

9c. _____

10a. _____

10c. _____