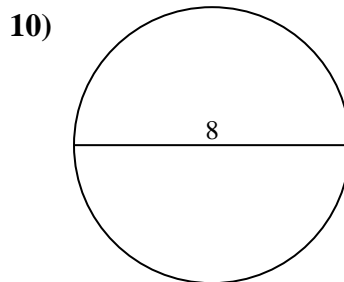
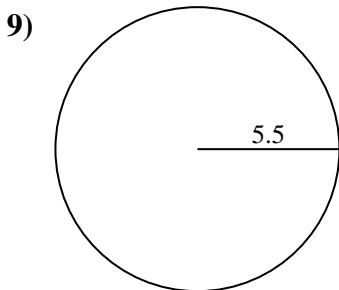
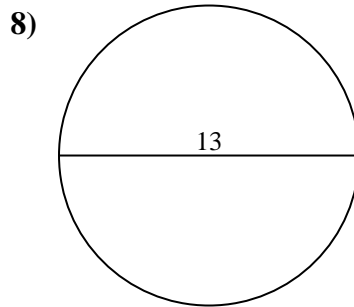
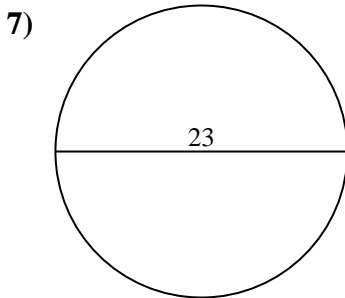
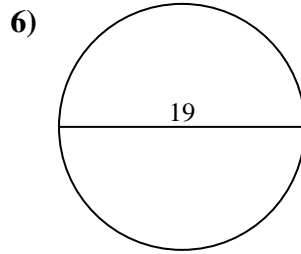
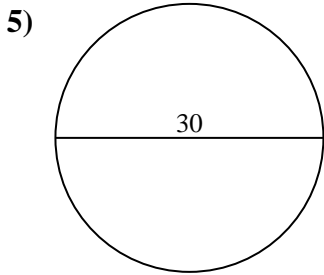
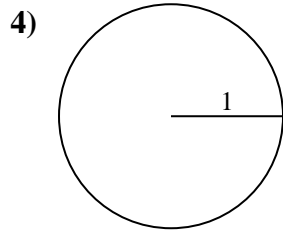
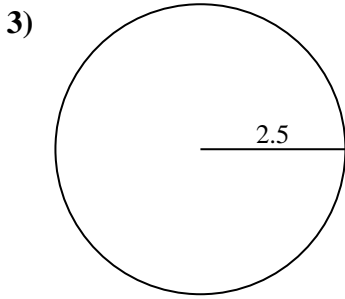
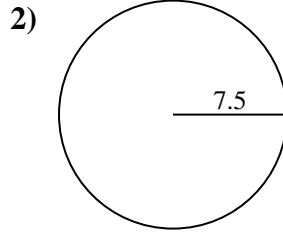
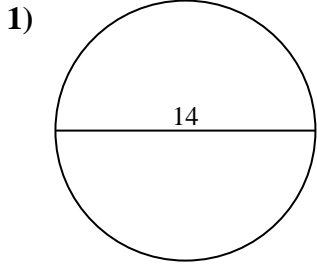




Encuentra el área de cada círculo. Los círculos no están a escala.

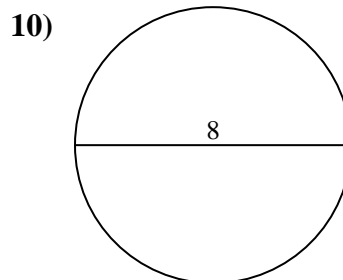
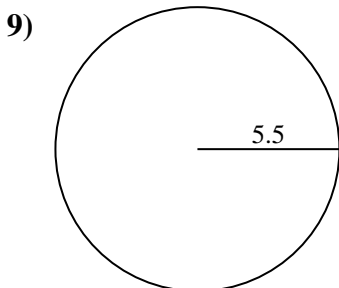
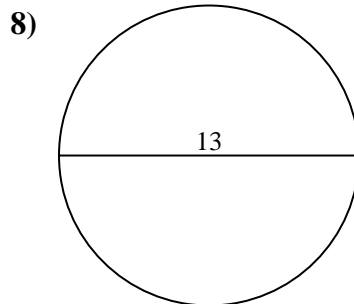
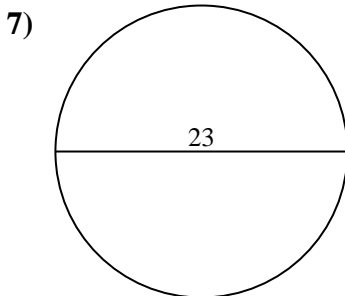
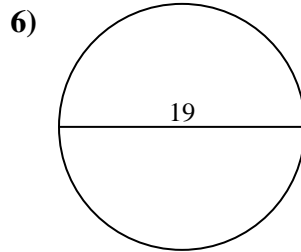
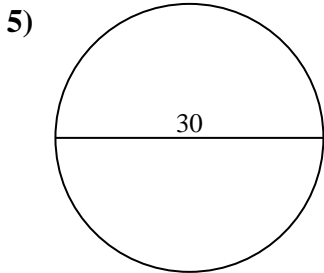
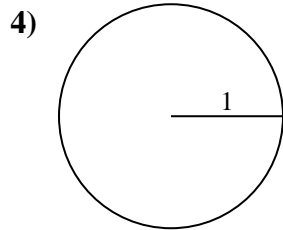
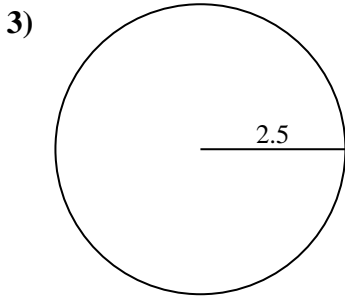
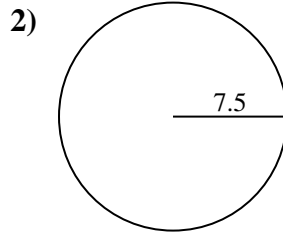
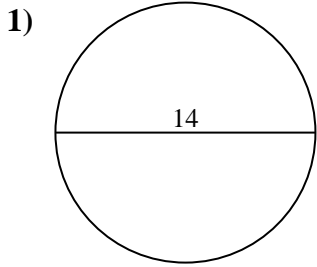


**Respuestas**

- 1. \_\_\_\_\_
- 2. \_\_\_\_\_
- 3. \_\_\_\_\_
- 4. \_\_\_\_\_
- 5. \_\_\_\_\_
- 6. \_\_\_\_\_
- 7. \_\_\_\_\_
- 8. \_\_\_\_\_
- 9. \_\_\_\_\_
- 10. \_\_\_\_\_



Encuentra el área de cada círculo. Los círculos no están a escala.



**Respuestas**

1. 153.94 cm<sup>2</sup>
2. 176.71 cm<sup>2</sup>
3. 19.63 cm<sup>2</sup>
4. 3.14 cm<sup>2</sup>
5. 706.86 cm<sup>2</sup>
6. 283.53 cm<sup>2</sup>
7. 415.48 cm<sup>2</sup>
8. 132.73 cm<sup>2</sup>
9. 95.03 cm<sup>2</sup>
10. 50.27 cm<sup>2</sup>



Encuentra el área de cada círculo. Los círculos no están a escala.

**Respuestas**

95.03 cm<sup>2</sup>

132.73 cm<sup>2</sup>

153.94 cm<sup>2</sup>

19.63 cm<sup>2</sup>

283.53 cm<sup>2</sup>

415.48 cm<sup>2</sup>

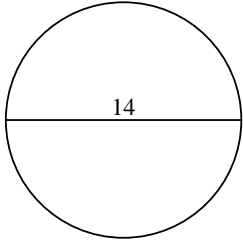
50.27 cm<sup>2</sup>

3.14 cm<sup>2</sup>

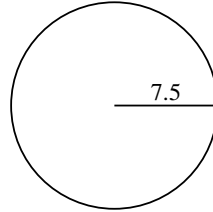
706.86 cm<sup>2</sup>

176.71 cm<sup>2</sup>

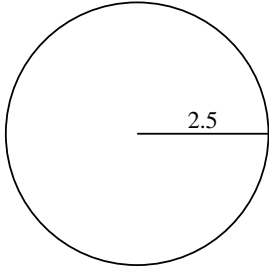
1)



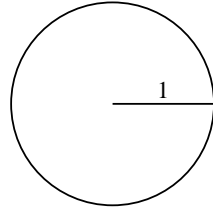
2)



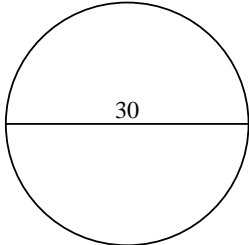
3)



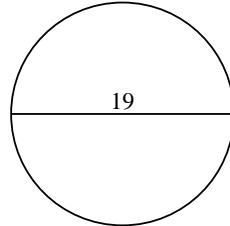
4)



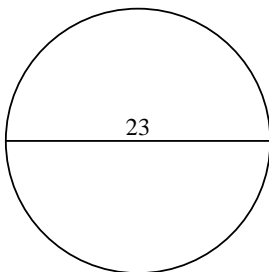
5)



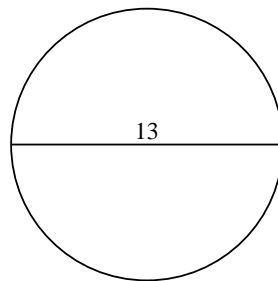
6)



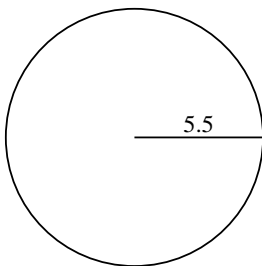
7)



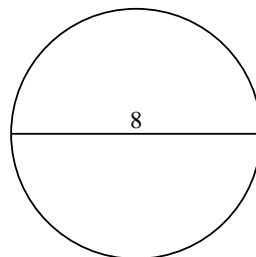
8)



9)



10)



1. \_\_\_\_\_

2. \_\_\_\_\_

3. \_\_\_\_\_

4. \_\_\_\_\_

5. \_\_\_\_\_

6. \_\_\_\_\_

7. \_\_\_\_\_

8. \_\_\_\_\_

9. \_\_\_\_\_

10. \_\_\_\_\_