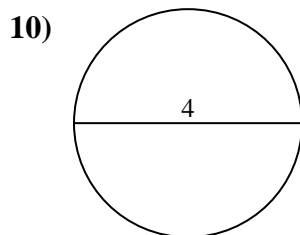
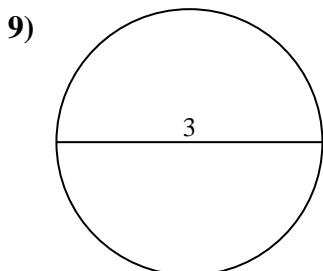
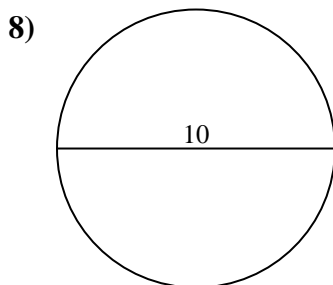
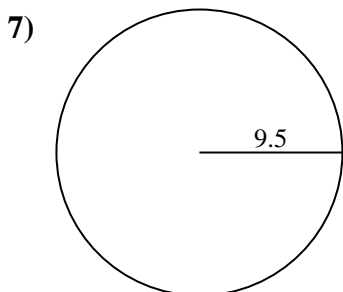
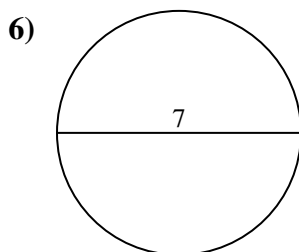
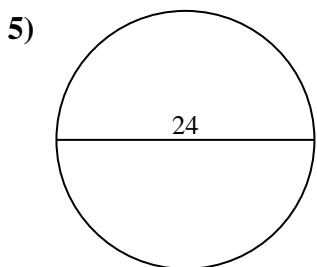
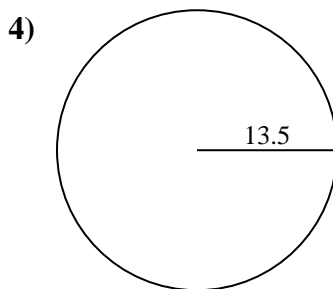
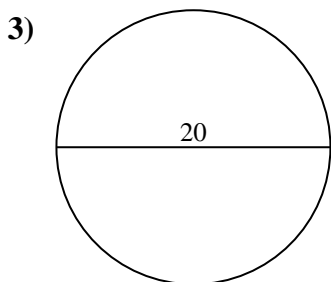
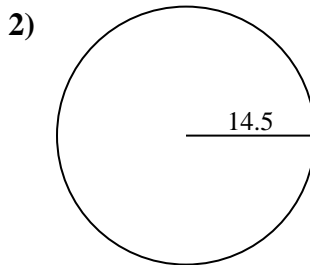
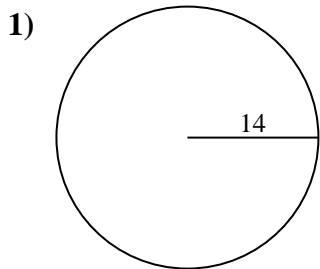




Encuentra el área de cada círculo. Los círculos no están a escala.

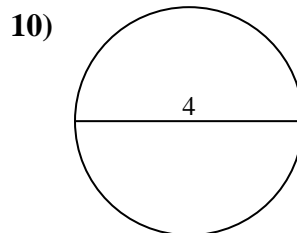
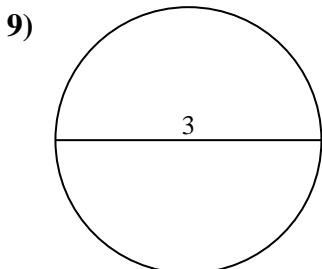
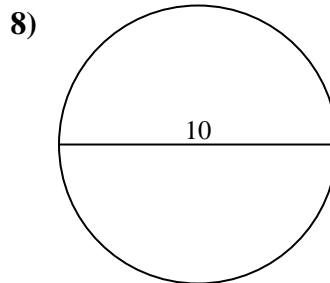
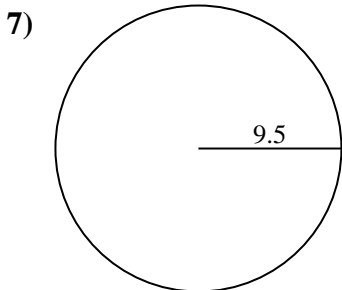
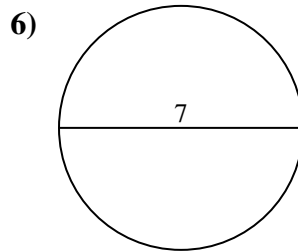
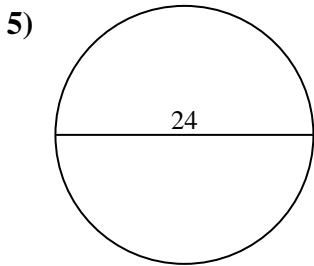
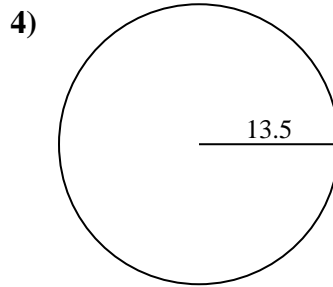
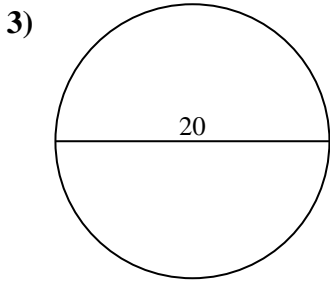
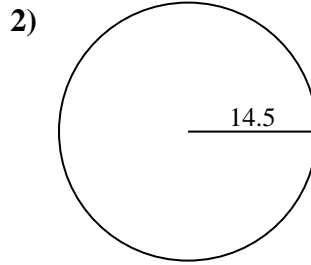
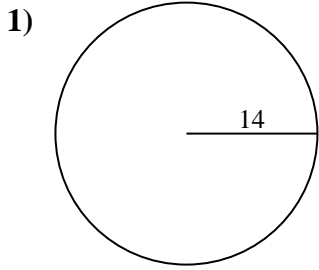


Respuestas

- 1. _____
- 2. _____
- 3. _____
- 4. _____
- 5. _____
- 6. _____
- 7. _____
- 8. _____
- 9. _____
- 10. _____



Encuentra el área de cada círculo. Los círculos no están a escala.



Respuestas

- 1. **615.75 cm²**
- 2. **660.52 cm²**
- 3. **314.16 cm²**
- 4. **572.56 cm²**
- 5. **452.39 cm²**
- 6. **38.48 cm²**
- 7. **283.53 cm²**
- 8. **78.54 cm²**
- 9. **7.07 cm²**
- 10. **12.57 cm²**



Encuentra el área de cada círculo. Los círculos no están a escala.

314.16 cm²

452.39 cm²

660.52 cm²

7.07 cm²

572.56 cm²

38.48 cm²

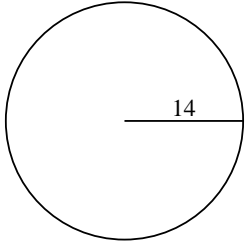
78.54 cm²

283.53 cm²

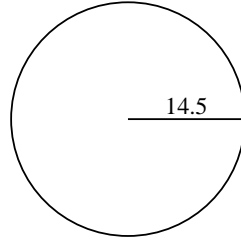
12.57 cm²

615.75 cm²

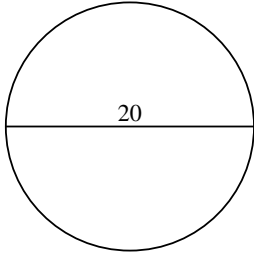
1)



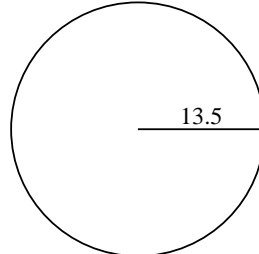
2)



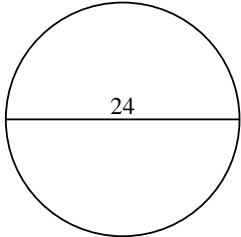
3)



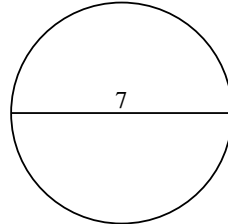
4)



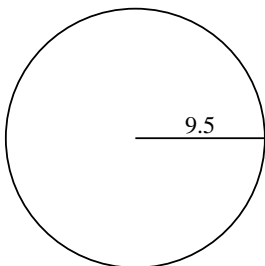
5)



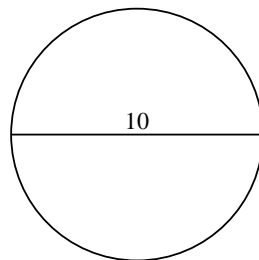
6)



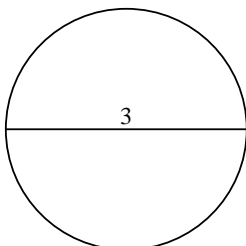
7)



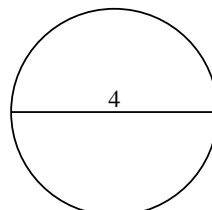
8)



9)



10)



Respuestas

1. _____

2. _____

3. _____

4. _____

5. _____

6. _____

7. _____

8. _____

9. _____

10. _____