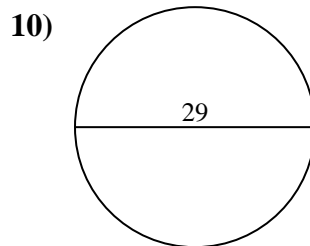
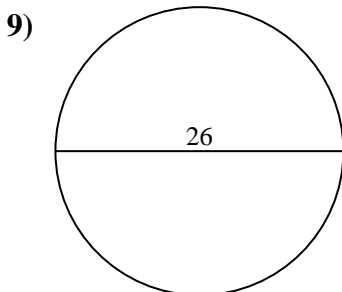
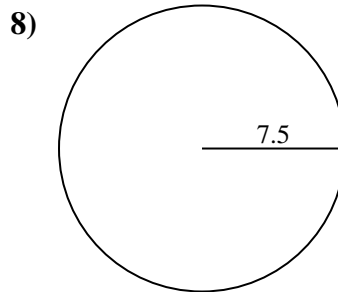
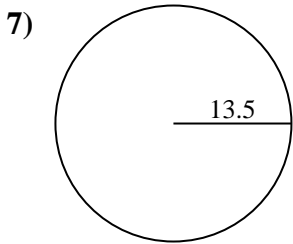
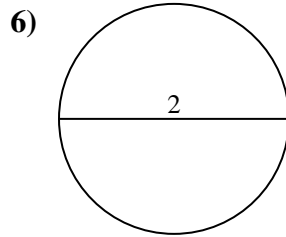
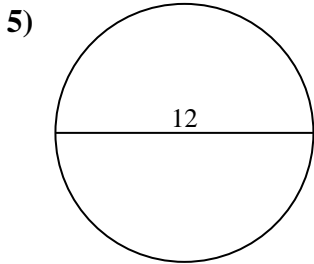
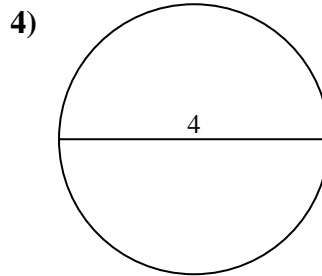
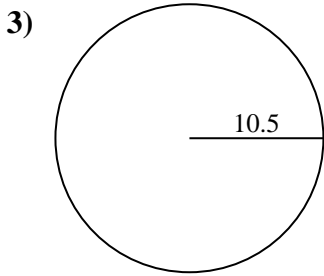
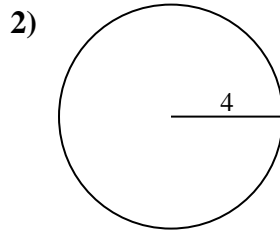
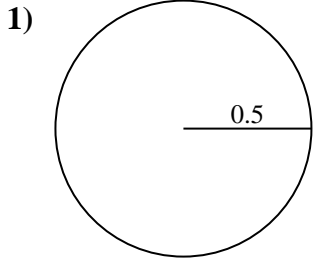




Encuentra el área de cada círculo. Los círculos no están a escala.

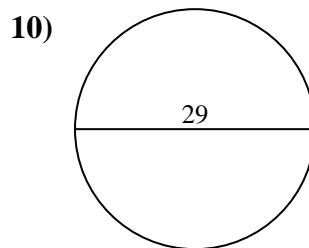
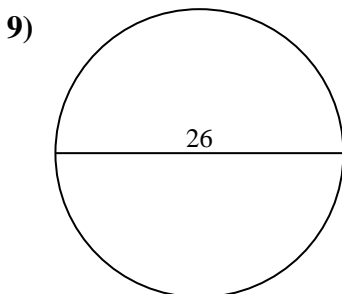
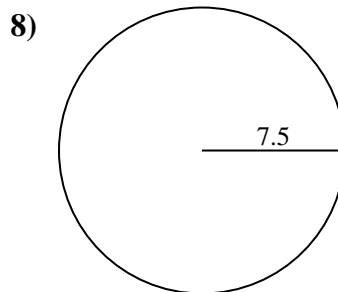
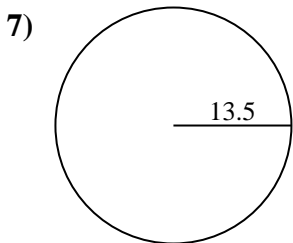
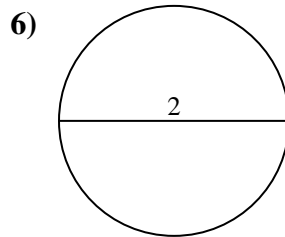
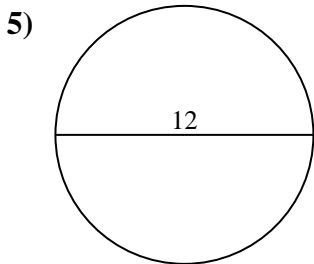
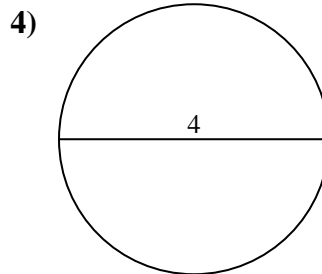
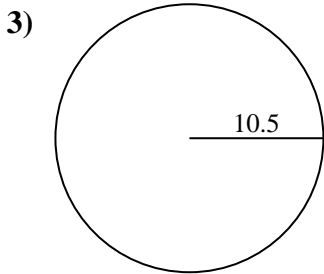
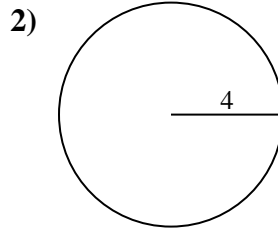
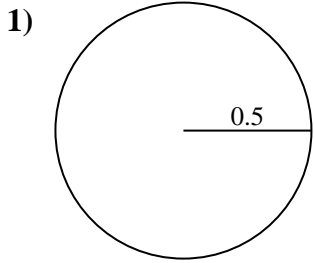


Respuestas

- 1. _____
- 2. _____
- 3. _____
- 4. _____
- 5. _____
- 6. _____
- 7. _____
- 8. _____
- 9. _____
- 10. _____



Encuentra el área de cada círculo. Los círculos no están a escala.



Respuestas

1. 0.79 cm²
2. 50.27 cm²
3. 346.36 cm²
4. 12.57 cm²
5. 113.1 cm²
6. 3.14 cm²
7. 572.56 cm²
8. 176.71 cm²
9. 530.93 cm²
10. 660.52 cm²



Encuentra el área de cada círculo. Los círculos no están a escala.

176.71 cm²

113.1 cm²

660.52 cm²

346.36 cm²

50.27 cm²

572.56 cm²

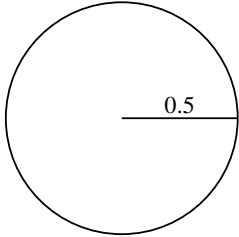
3.14 cm²

0.79 cm²

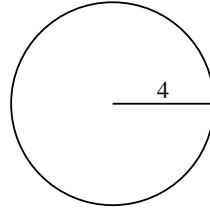
530.93 cm²

12.57 cm²

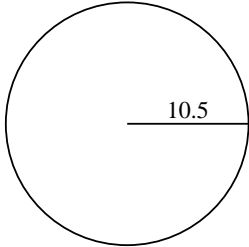
1)



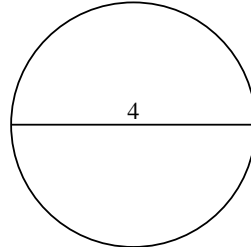
2)



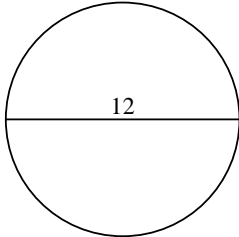
3)



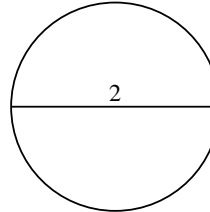
4)



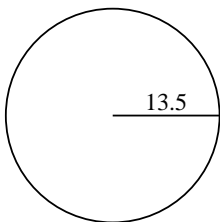
5)



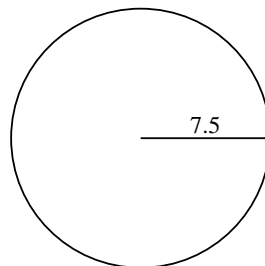
6)



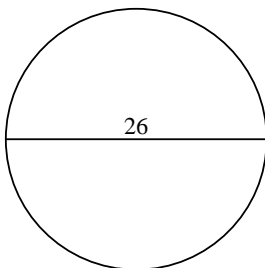
7)



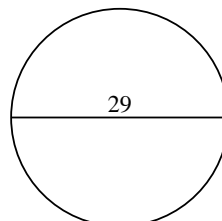
8)



9)



10)



Respuestas

1. _____

2. _____

3. _____

4. _____

5. _____

6. _____

7. _____

8. _____

9. _____

10. _____