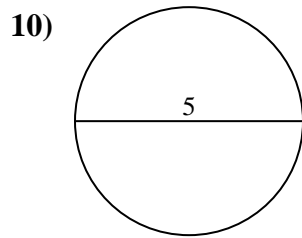
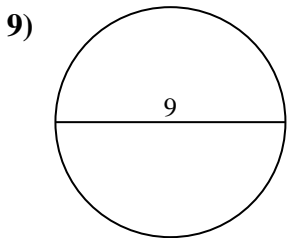
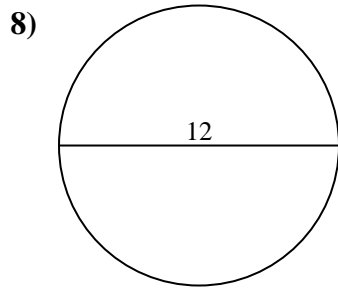
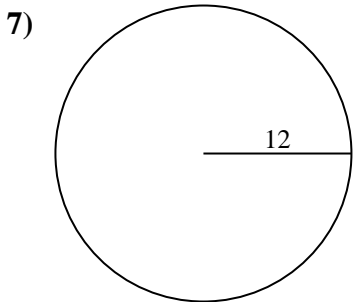
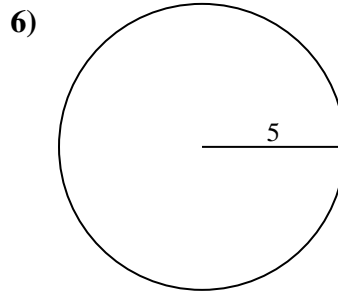
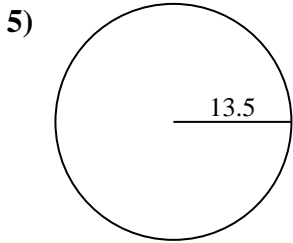
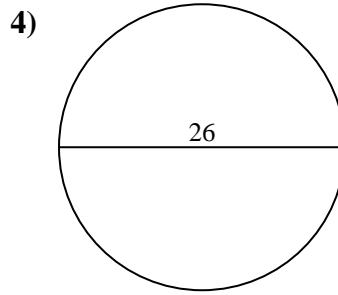
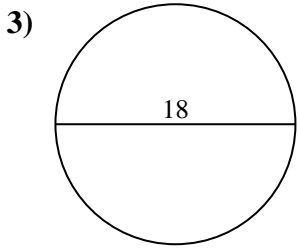
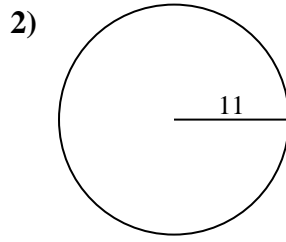
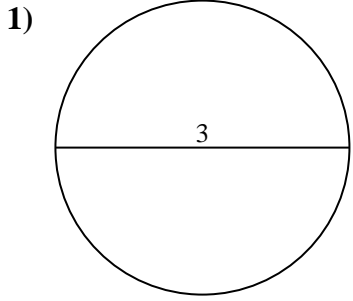




Encuentra el área de cada círculo. Los círculos no están a escala.

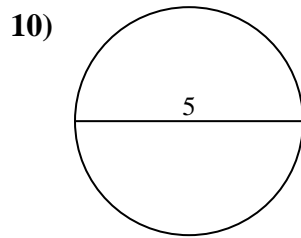
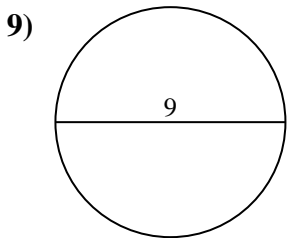
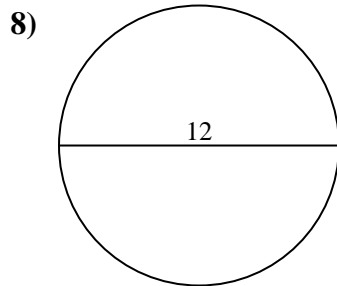
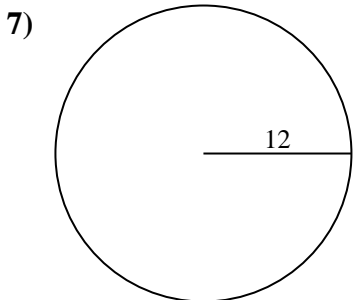
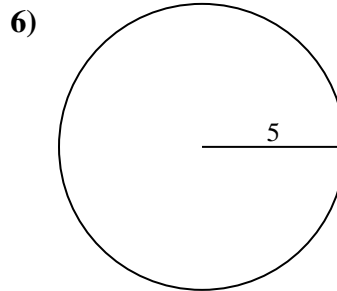
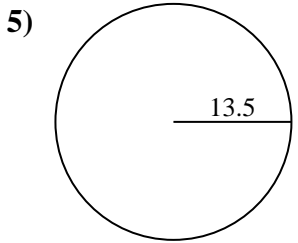
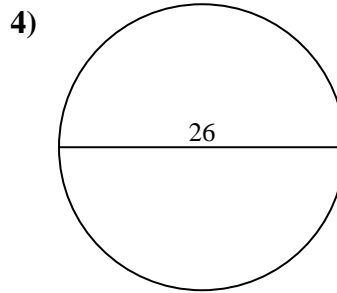
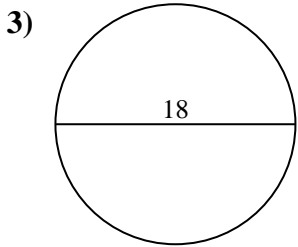
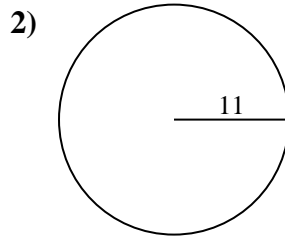
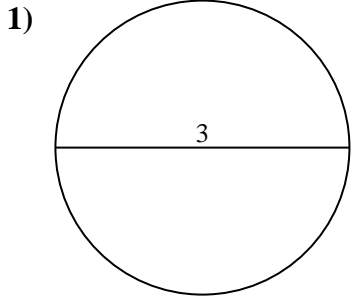


Respuestas

- 1. _____
- 2. _____
- 3. _____
- 4. _____
- 5. _____
- 6. _____
- 7. _____
- 8. _____
- 9. _____
- 10. _____



Encuentra el área de cada círculo. Los círculos no están a escala.



Respuestas

1. 7.07 cm²
2. 380.13 cm²
3. 254.47 cm²
4. 530.93 cm²
5. 572.56 cm²
6. 78.54 cm²
7. 452.39 cm²
8. 113.1 cm²
9. 63.62 cm²
10. 19.63 cm²



Encuentra el área de cada círculo. Los círculos no están a escala.

Respuestas

7.07 cm ²	78.54 cm ²	254.47 cm ²	63.62 cm ²	380.13 cm ²
572.56 cm ²	113.1 cm ²	530.93 cm ²	19.63 cm ²	452.39 cm ²

1. _____
2. _____
3. _____
4. _____
5. _____
6. _____
7. _____
8. _____
9. _____
10. _____

