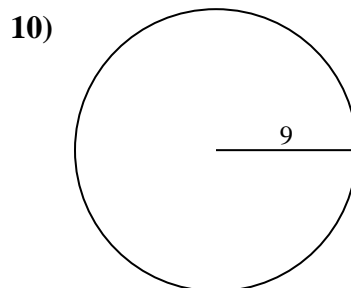
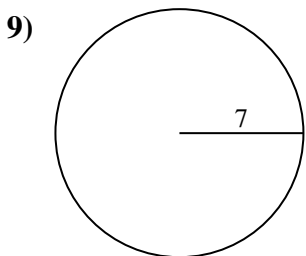
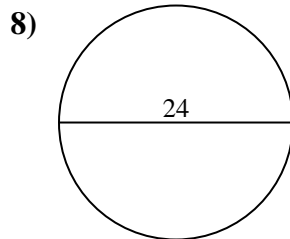
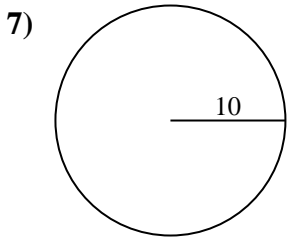
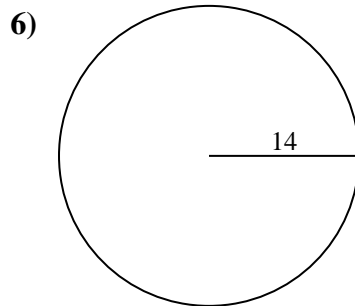
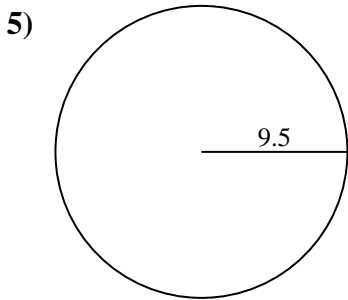
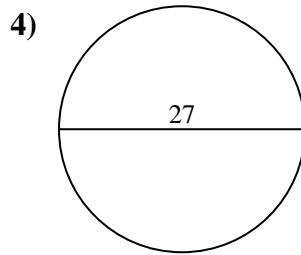
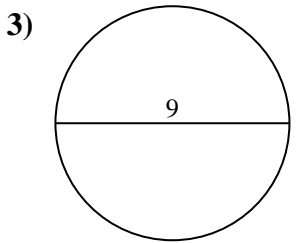
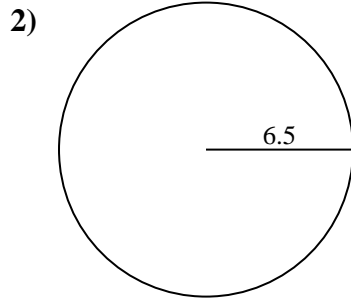
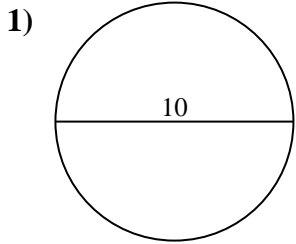




Encuentra el área de cada círculo. Los círculos no están a escala.

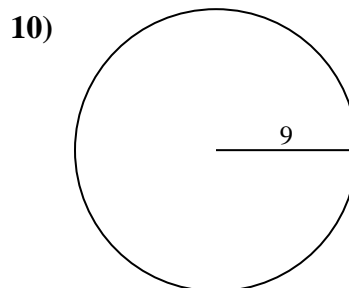
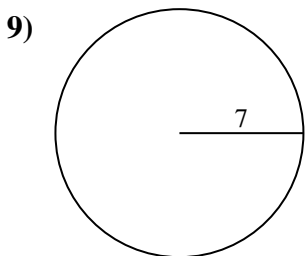
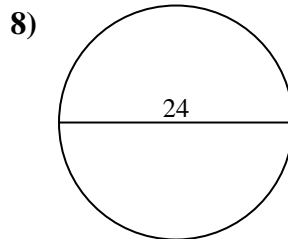
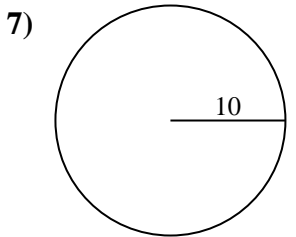
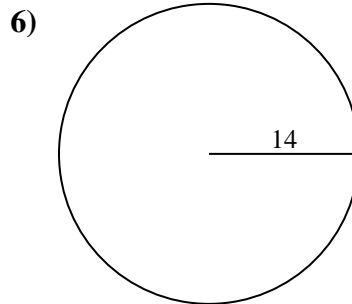
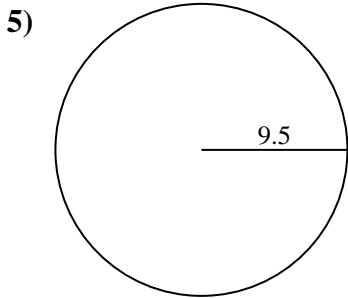
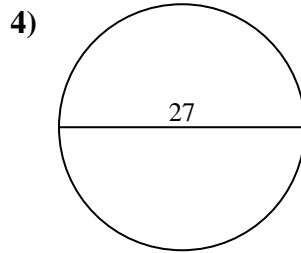
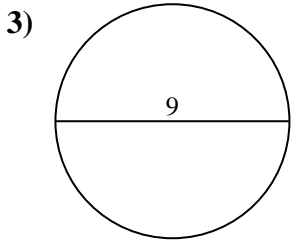
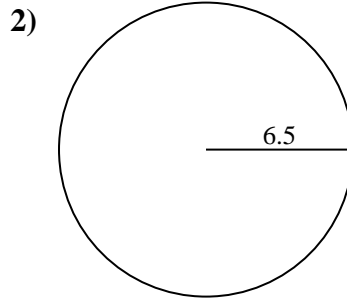
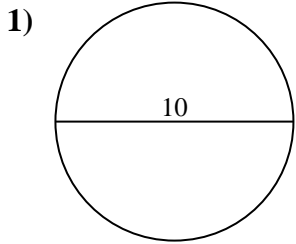


Respuestas

- 1. _____
- 2. _____
- 3. _____
- 4. _____
- 5. _____
- 6. _____
- 7. _____
- 8. _____
- 9. _____
- 10. _____



Encuentra el área de cada círculo. Los círculos no están a escala.



Respuestas

1. 78.54 cm²
2. 132.73 cm²
3. 63.62 cm²
4. 572.56 cm²
5. 283.53 cm²
6. 615.75 cm²
7. 314.16 cm²
8. 452.39 cm²
9. 153.94 cm²
10. 254.47 cm²



Encuentra el área de cada círculo. Los círculos no están a escala.

132.73 cm²

572.56 cm²

78.54 cm²

615.75 cm²

153.94 cm²

254.47 cm²

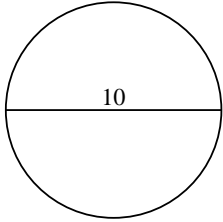
314.16 cm²

63.62 cm²

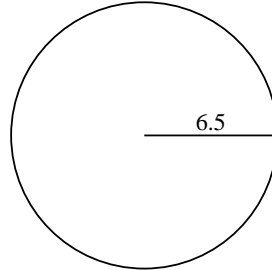
283.53 cm²

452.39 cm²

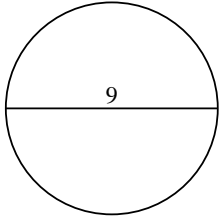
1)



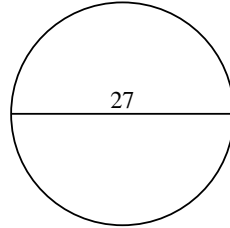
2)



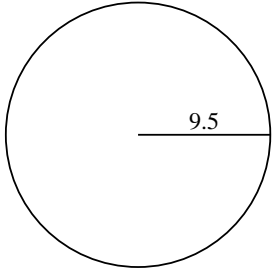
3)



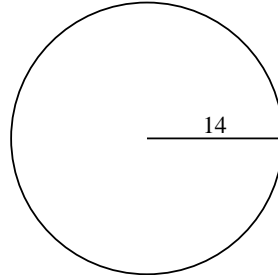
4)



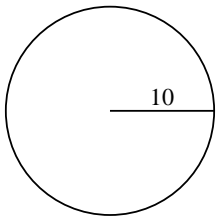
5)



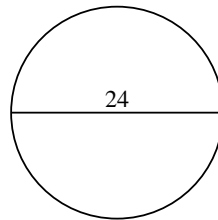
6)



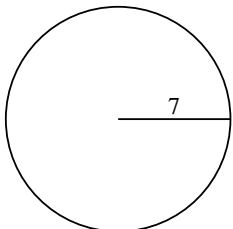
7)



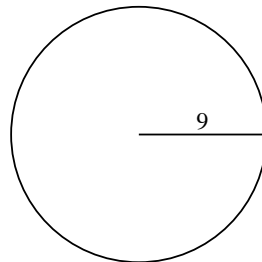
8)



9)



10)



Respuestas

1. _____

2. _____

3. _____

4. _____

5. _____

6. _____

7. _____

8. _____

9. _____

10. _____