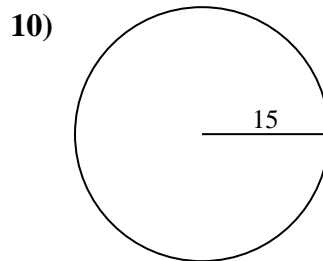
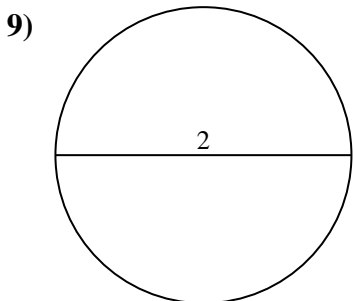
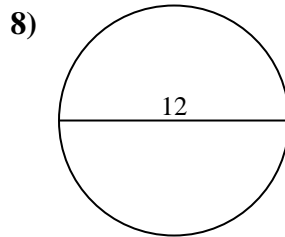
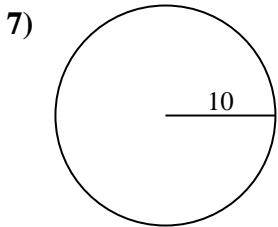
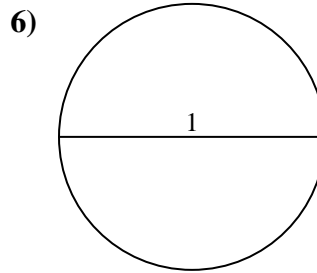
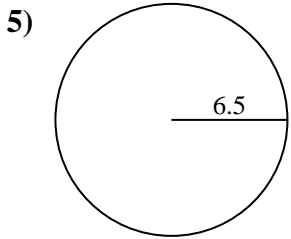
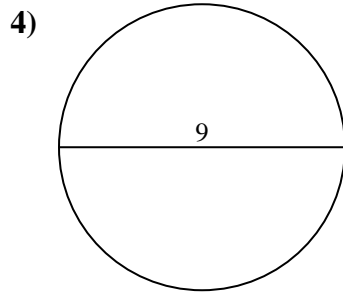
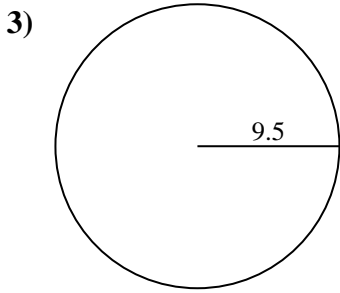
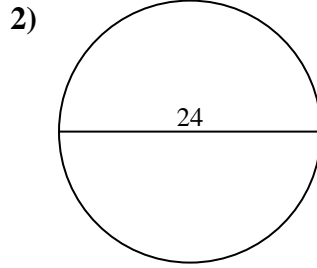
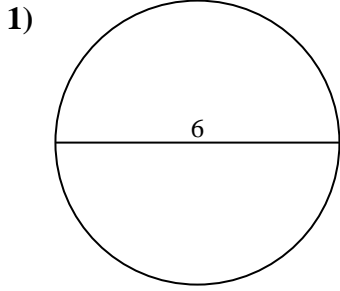




Encuentra el área de cada círculo. Los círculos no están a escala.

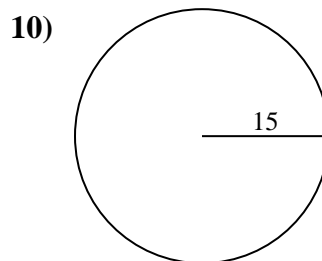
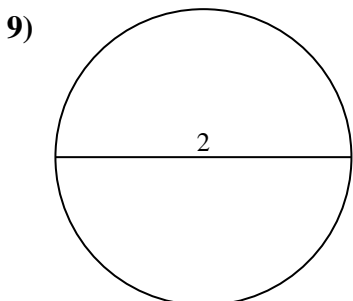
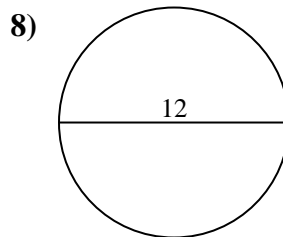
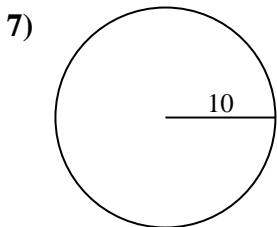
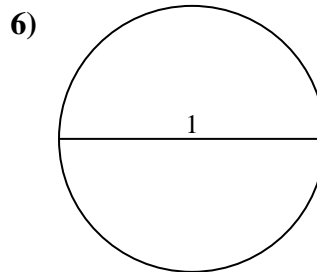
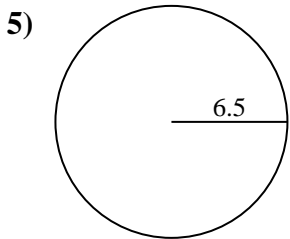
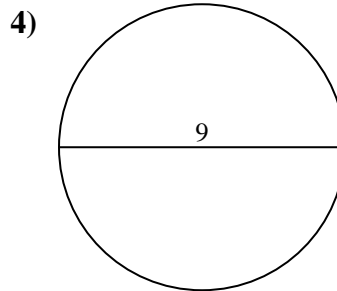
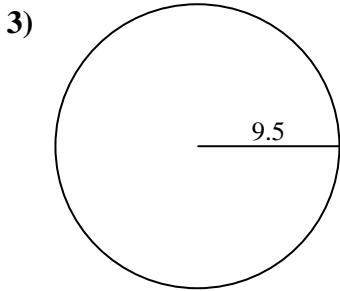
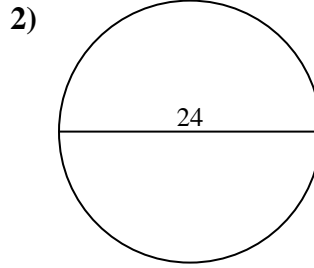
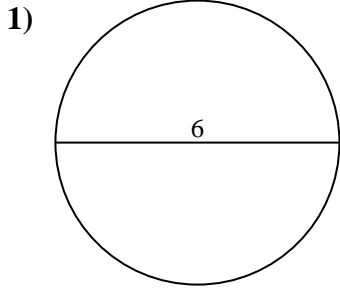


**Respuestas**

- 1. \_\_\_\_\_
- 2. \_\_\_\_\_
- 3. \_\_\_\_\_
- 4. \_\_\_\_\_
- 5. \_\_\_\_\_
- 6. \_\_\_\_\_
- 7. \_\_\_\_\_
- 8. \_\_\_\_\_
- 9. \_\_\_\_\_
- 10. \_\_\_\_\_



Encuentra el área de cada círculo. Los círculos no están a escala.



**Respuestas**

1. 28.27 cm<sup>2</sup>
2. 452.39 cm<sup>2</sup>
3. 283.53 cm<sup>2</sup>
4. 63.62 cm<sup>2</sup>
5. 132.73 cm<sup>2</sup>
6. 0.79 cm<sup>2</sup>
7. 314.16 cm<sup>2</sup>
8. 113.1 cm<sup>2</sup>
9. 3.14 cm<sup>2</sup>
10. 706.86 cm<sup>2</sup>



Encuentra el área de cada círculo. Los círculos no están a escala.

283.53 cm<sup>2</sup>

452.39 cm<sup>2</sup>

3.14 cm<sup>2</sup>

0.79 cm<sup>2</sup>

132.73 cm<sup>2</sup>

63.62 cm<sup>2</sup>

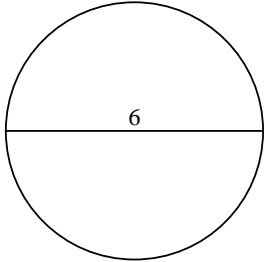
28.27 cm<sup>2</sup>

706.86 cm<sup>2</sup>

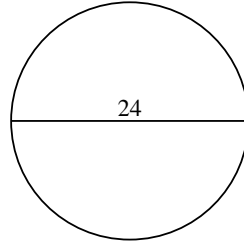
314.16 cm<sup>2</sup>

113.1 cm<sup>2</sup>

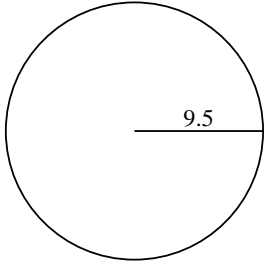
1)



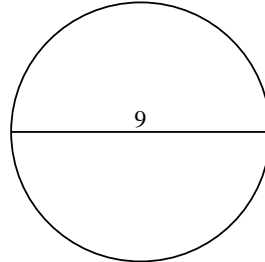
2)



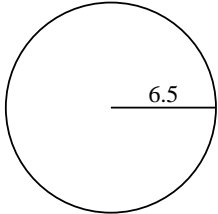
3)



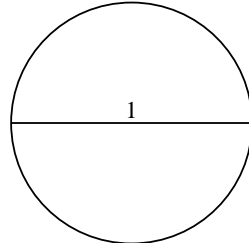
4)



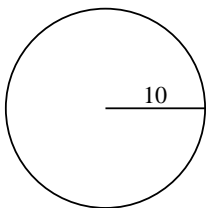
5)



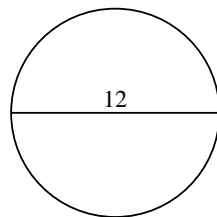
6)



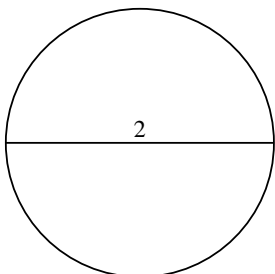
7)



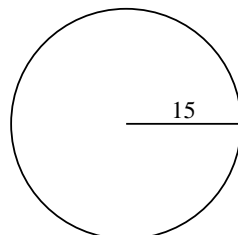
8)



9)



10)



**Respuestas**

1. \_\_\_\_\_

2. \_\_\_\_\_

3. \_\_\_\_\_

4. \_\_\_\_\_

5. \_\_\_\_\_

6. \_\_\_\_\_

7. \_\_\_\_\_

8. \_\_\_\_\_

9. \_\_\_\_\_

10. \_\_\_\_\_