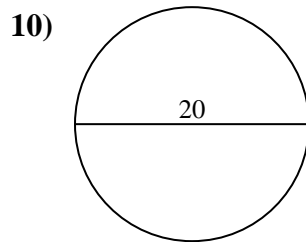
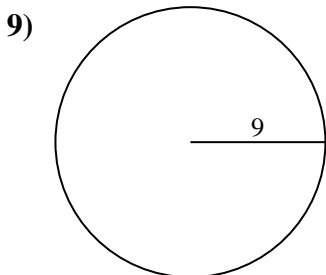
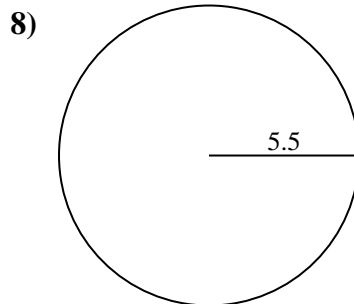
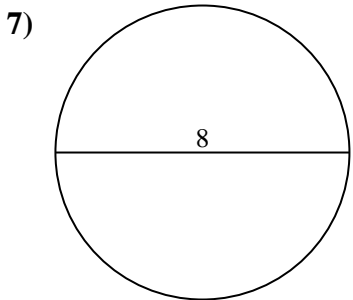
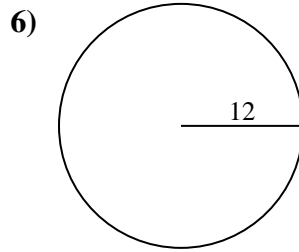
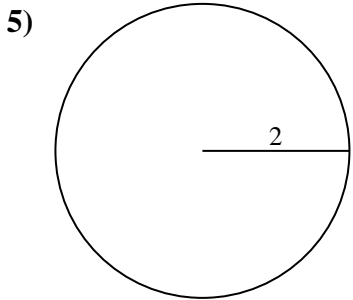
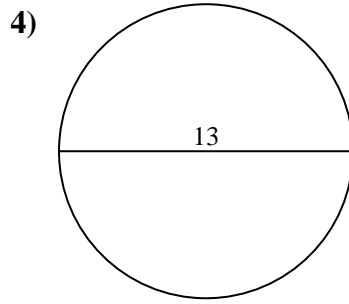
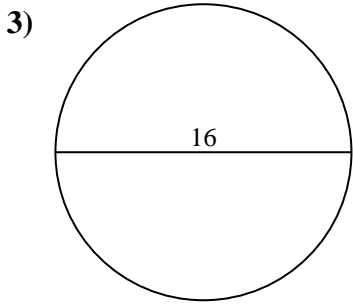
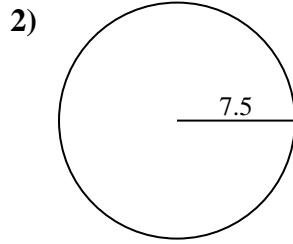
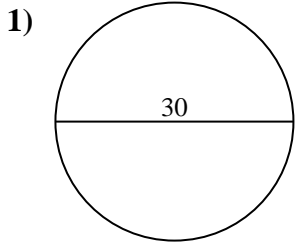




Encuentra el área de cada círculo. Los círculos no están a escala.

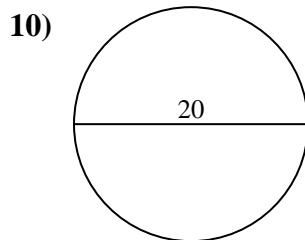
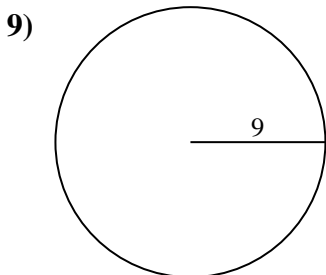
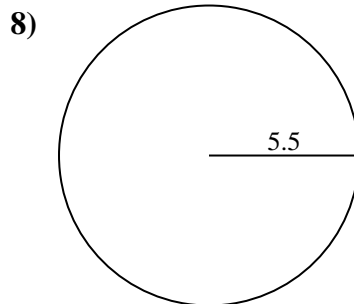
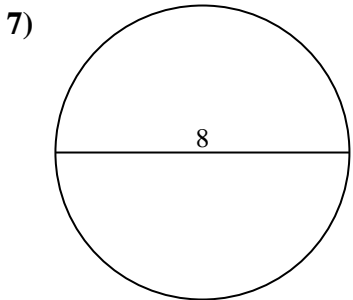
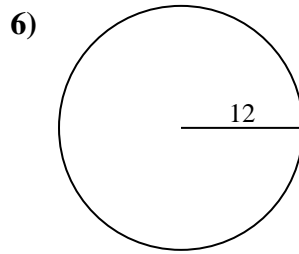
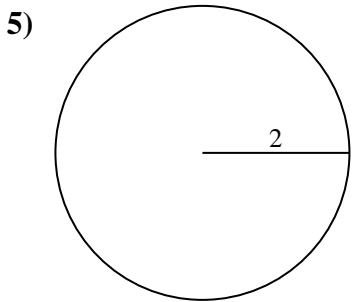
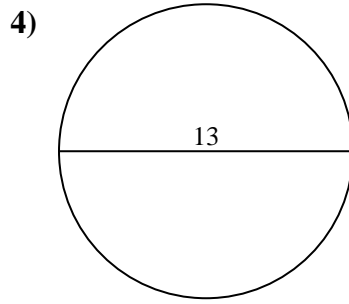
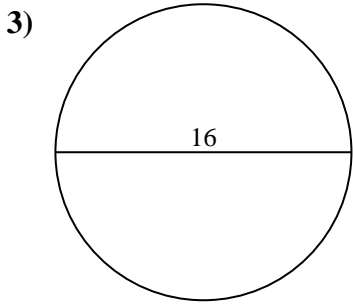
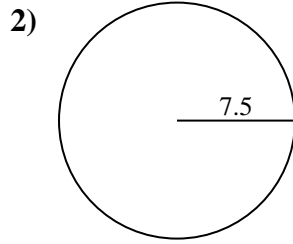
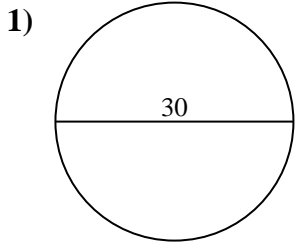


Respuestas

- 1. _____
- 2. _____
- 3. _____
- 4. _____
- 5. _____
- 6. _____
- 7. _____
- 8. _____
- 9. _____
- 10. _____



Encuentra el área de cada círculo. Los círculos no están a escala.



Respuestas

1. 706.86 cm²
2. 176.71 cm²
3. 201.06 cm²
4. 132.73 cm²
5. 12.57 cm²
6. 452.39 cm²
7. 50.27 cm²
8. 95.03 cm²
9. 254.47 cm²
10. 314.16 cm²



Encuentra el área de cada círculo. Los círculos no están a escala.

Respuestas

12.57 cm²

254.47 cm²

132.73 cm²

706.86 cm²

50.27 cm²

201.06 cm²

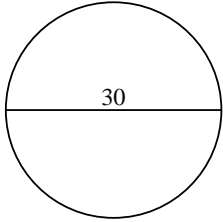
452.39 cm²

176.71 cm²

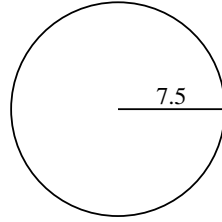
95.03 cm²

314.16 cm²

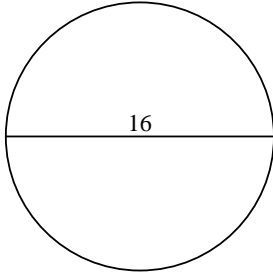
1)



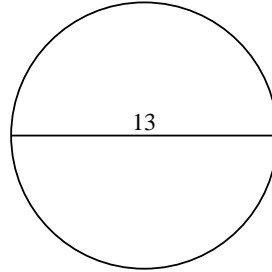
2)



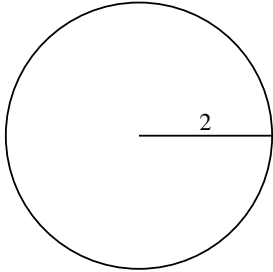
3)



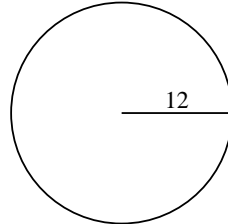
4)



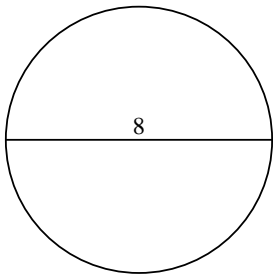
5)



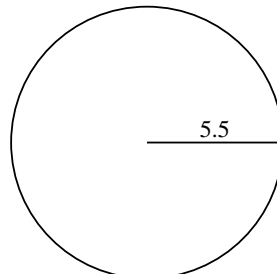
6)



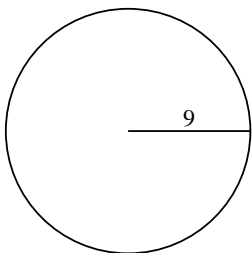
7)



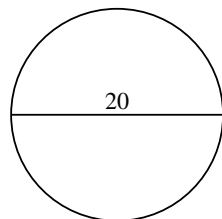
8)



9)



10)



1. _____

2. _____

3. _____

4. _____

5. _____

6. _____

7. _____

8. _____

9. _____

10. _____