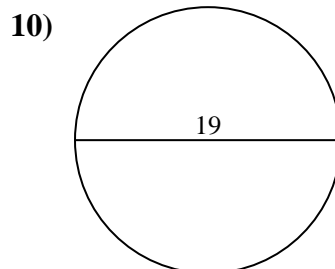
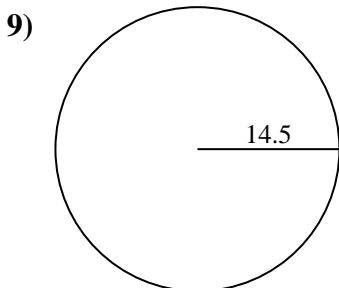
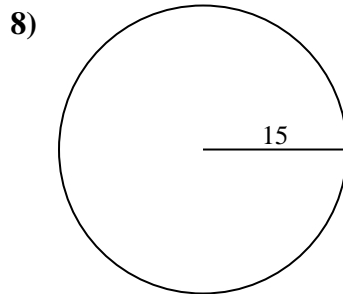
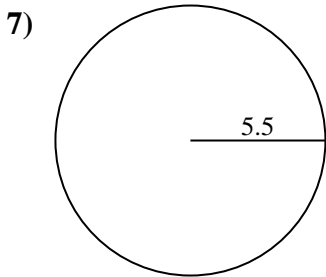
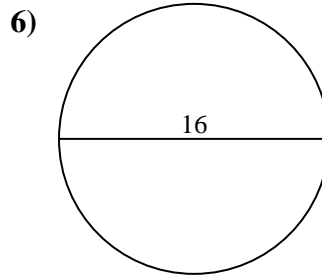
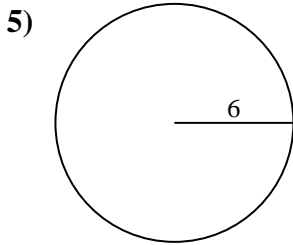
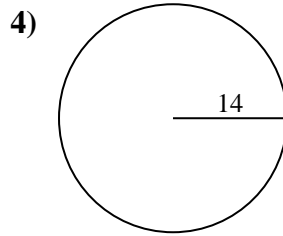
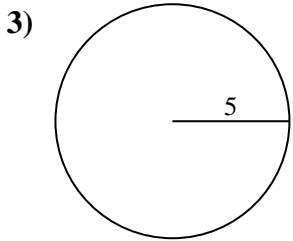
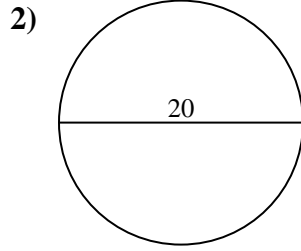
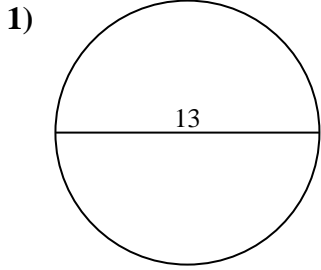




Encuentra el área de cada círculo. Los círculos no están a escala.

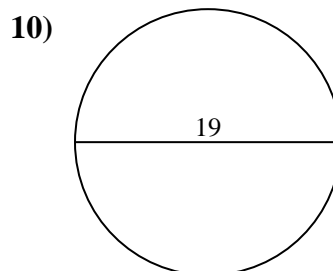
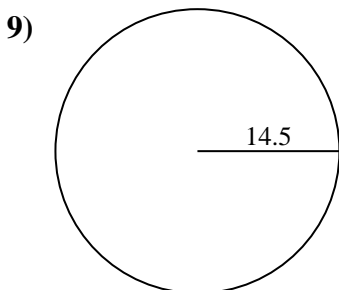
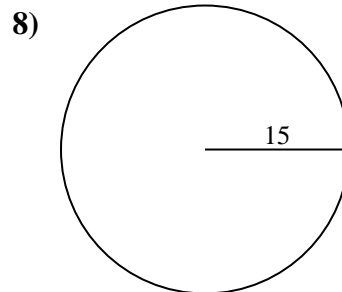
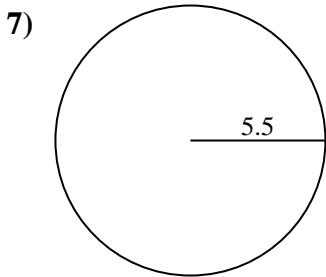
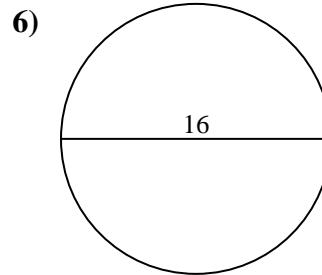
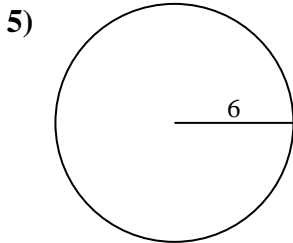
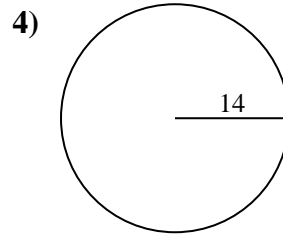
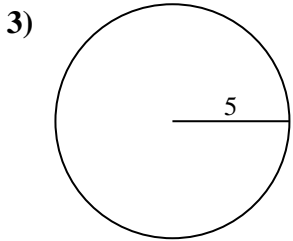
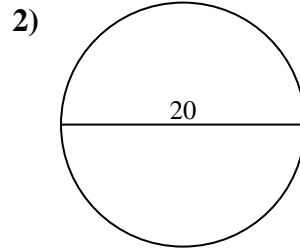
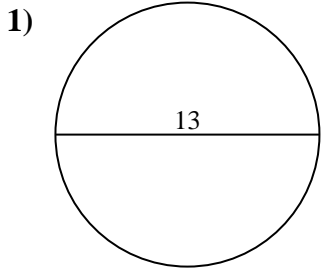


Respuestas

- 1. _____
- 2. _____
- 3. _____
- 4. _____
- 5. _____
- 6. _____
- 7. _____
- 8. _____
- 9. _____
- 10. _____



Encuentra el área de cada círculo. Los círculos no están a escala.



Respuestas

1. 132.73 cm²
2. 314.16 cm²
3. 78.54 cm²
4. 615.75 cm²
5. 113.1 cm²
6. 201.06 cm²
7. 95.03 cm²
8. 706.86 cm²
9. 660.52 cm²
10. 283.53 cm²



Encuentra el área de cada círculo. Los círculos no están a escala.

660.52 cm²

113.1 cm²

706.86 cm²

132.73 cm²

615.75 cm²

95.03 cm²

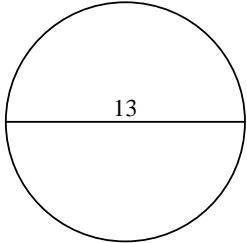
283.53 cm²

314.16 cm²

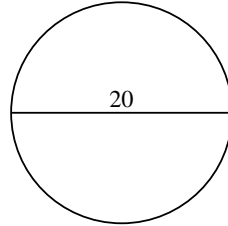
78.54 cm²

201.06 cm²

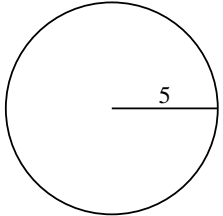
1)



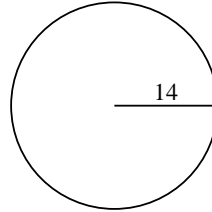
2)



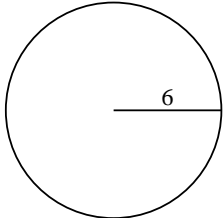
3)



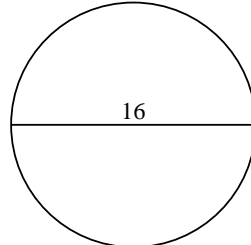
4)



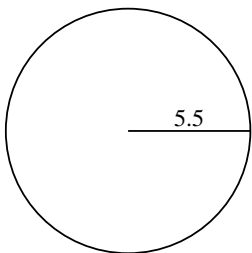
5)



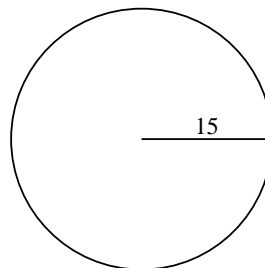
6)



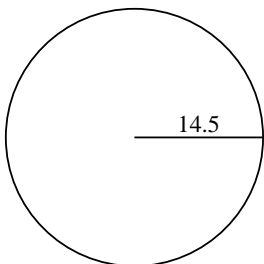
7)



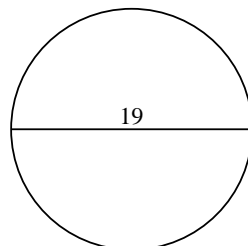
8)



9)



10)



Respuestas

1. _____

2. _____

3. _____

4. _____

5. _____

6. _____

7. _____

8. _____

9. _____

10. _____