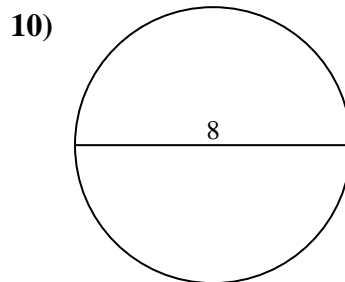
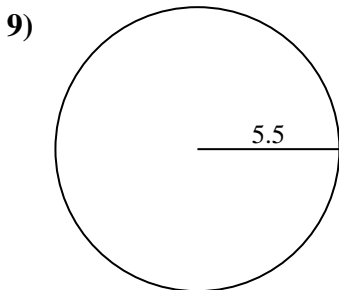
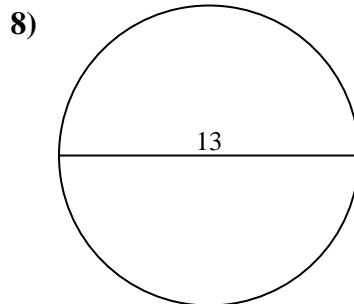
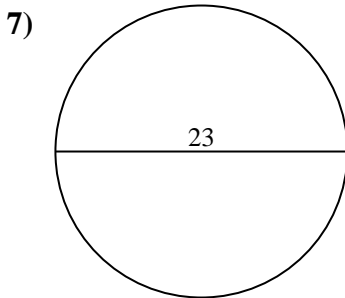
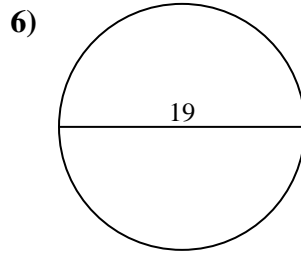
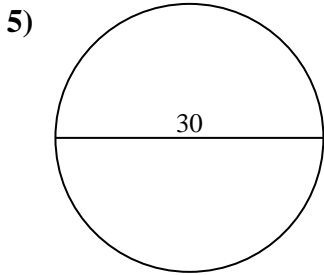
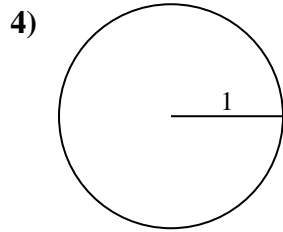
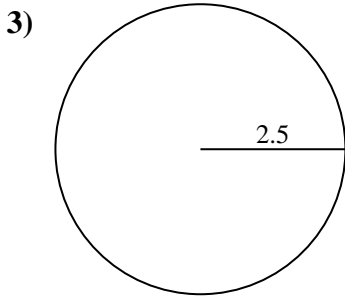
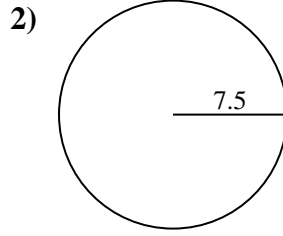
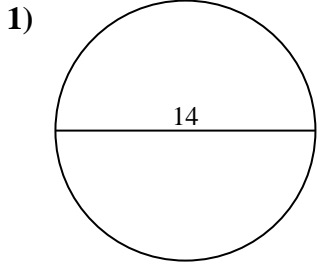




Encuentra el área de cada círculo. Los círculos no están a escala.

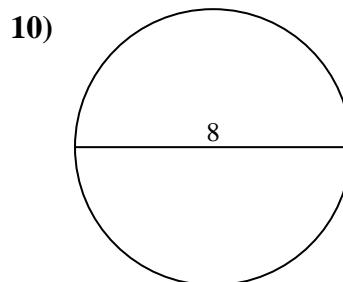
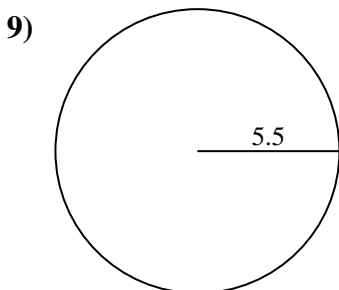
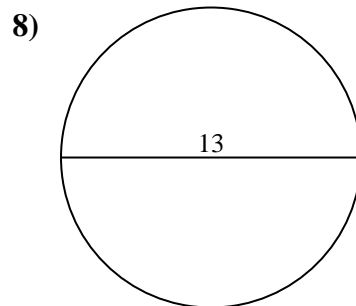
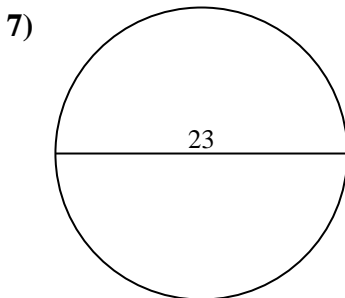
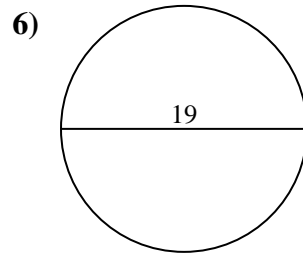
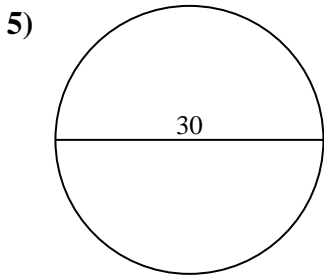
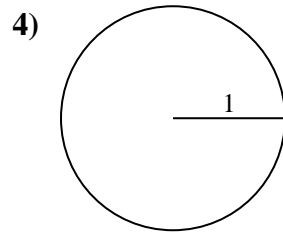
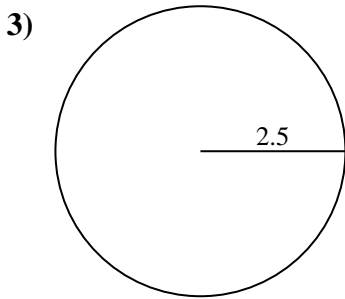
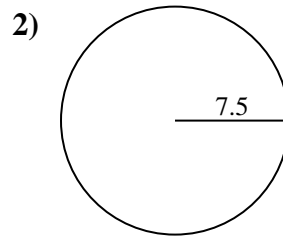
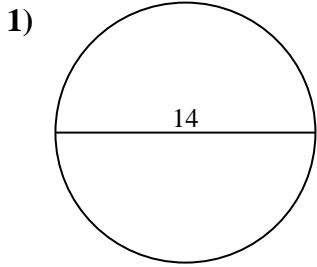


**Respuestas**

- 1. \_\_\_\_\_
- 2. \_\_\_\_\_
- 3. \_\_\_\_\_
- 4. \_\_\_\_\_
- 5. \_\_\_\_\_
- 6. \_\_\_\_\_
- 7. \_\_\_\_\_
- 8. \_\_\_\_\_
- 9. \_\_\_\_\_
- 10. \_\_\_\_\_



Encuentra el área de cada círculo. Los círculos no están a escala.



**Respuestas**

1. 153.94 cm<sup>2</sup>
2. 176.71 cm<sup>2</sup>
3. 19.63 cm<sup>2</sup>
4. 3.14 cm<sup>2</sup>
5. 706.86 cm<sup>2</sup>
6. 283.53 cm<sup>2</sup>
7. 415.48 cm<sup>2</sup>
8. 132.73 cm<sup>2</sup>
9. 95.03 cm<sup>2</sup>
10. 50.27 cm<sup>2</sup>



Encuentra el área de cada círculo. Los círculos no están a escala.

95.03 cm<sup>2</sup>

132.73 cm<sup>2</sup>

153.94 cm<sup>2</sup>

19.63 cm<sup>2</sup>

283.53 cm<sup>2</sup>

415.48 cm<sup>2</sup>

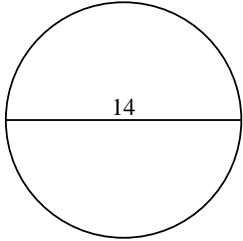
50.27 cm<sup>2</sup>

3.14 cm<sup>2</sup>

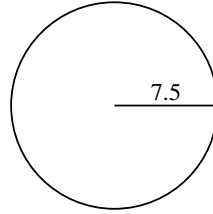
706.86 cm<sup>2</sup>

176.71 cm<sup>2</sup>

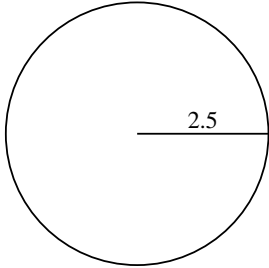
1)



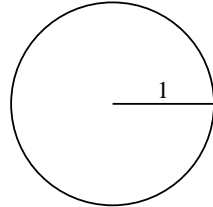
2)



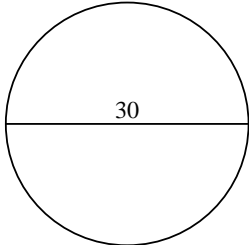
3)



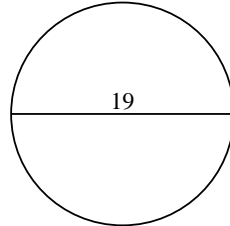
4)



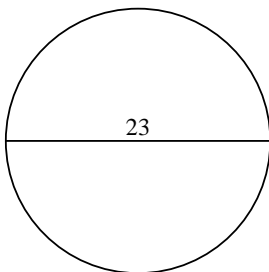
5)



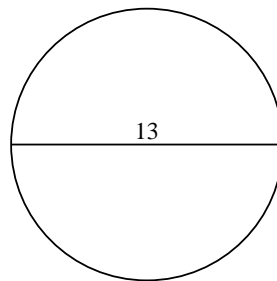
6)



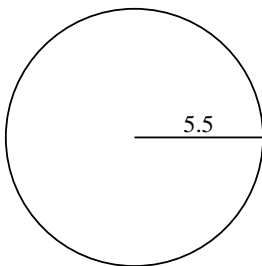
7)



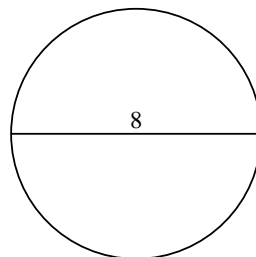
8)



9)



10)



**Respuestas**

1. \_\_\_\_\_

2. \_\_\_\_\_

3. \_\_\_\_\_

4. \_\_\_\_\_

5. \_\_\_\_\_

6. \_\_\_\_\_

7. \_\_\_\_\_

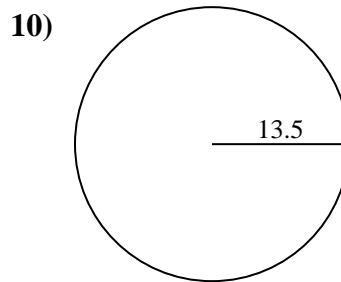
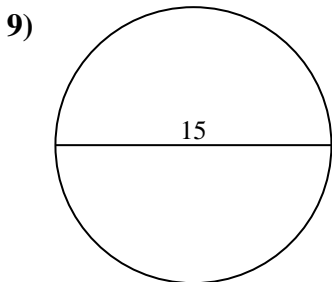
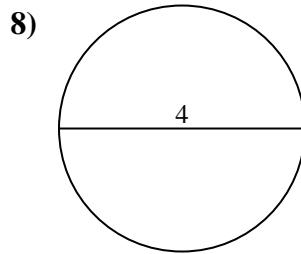
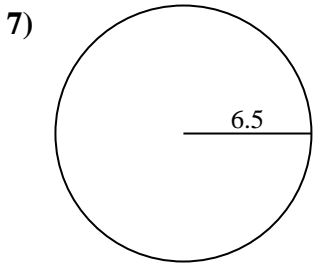
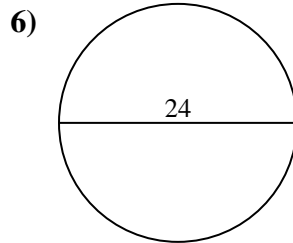
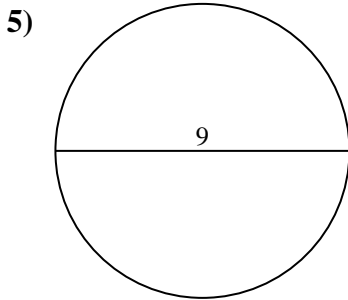
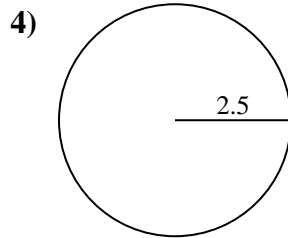
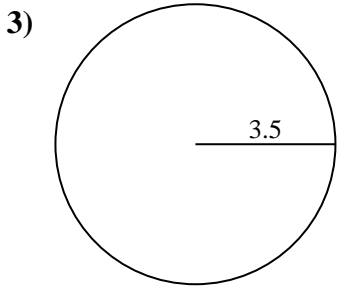
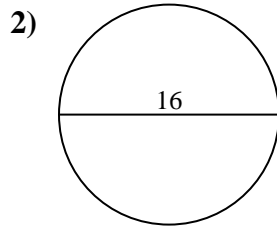
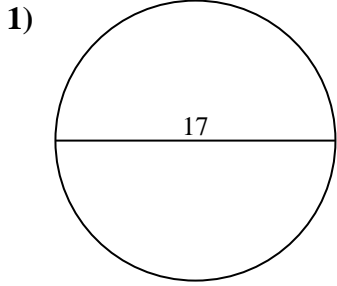
8. \_\_\_\_\_

9. \_\_\_\_\_

10. \_\_\_\_\_



Encuentra el área de cada círculo. Los círculos no están a escala.

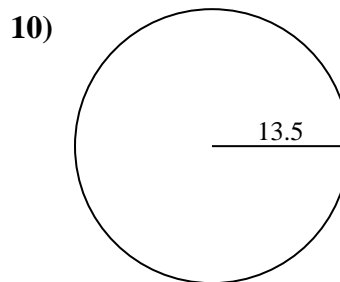
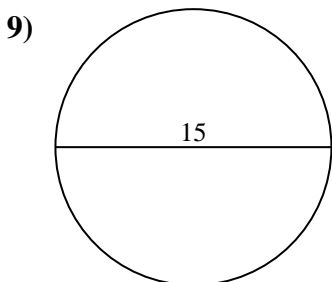
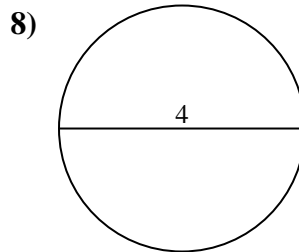
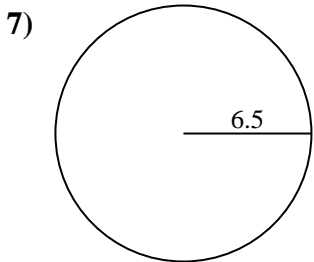
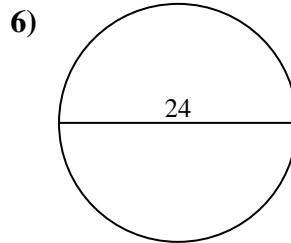
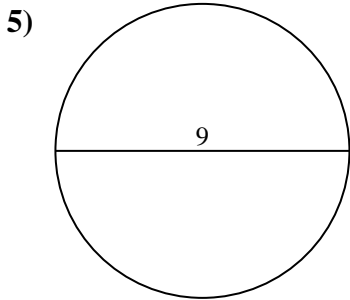
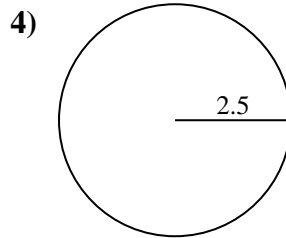
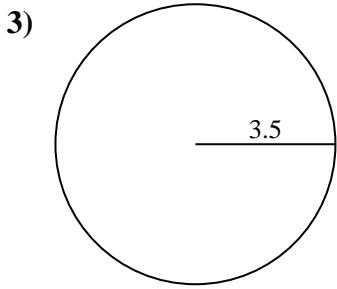
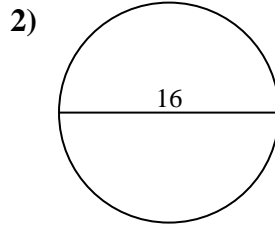
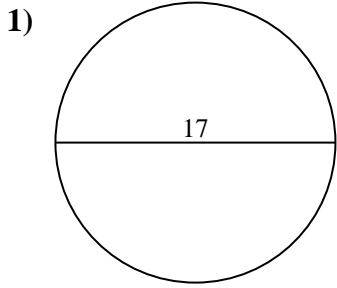


**Respuestas**

- 1. \_\_\_\_\_
- 2. \_\_\_\_\_
- 3. \_\_\_\_\_
- 4. \_\_\_\_\_
- 5. \_\_\_\_\_
- 6. \_\_\_\_\_
- 7. \_\_\_\_\_
- 8. \_\_\_\_\_
- 9. \_\_\_\_\_
- 10. \_\_\_\_\_



Encuentra el área de cada círculo. Los círculos no están a escala.



**Respuestas**

1. 226.98 cm<sup>2</sup>
2. 201.06 cm<sup>2</sup>
3. 38.48 cm<sup>2</sup>
4. 19.63 cm<sup>2</sup>
5. 63.62 cm<sup>2</sup>
6. 452.39 cm<sup>2</sup>
7. 132.73 cm<sup>2</sup>
8. 12.57 cm<sup>2</sup>
9. 176.71 cm<sup>2</sup>
10. 572.56 cm<sup>2</sup>



Encuentra el área de cada círculo. Los círculos no están a escala.

201.06 cm<sup>2</sup>

176.71 cm<sup>2</sup>

452.39 cm<sup>2</sup>

38.48 cm<sup>2</sup>

226.98 cm<sup>2</sup>

132.73 cm<sup>2</sup>

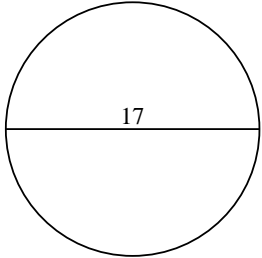
12.57 cm<sup>2</sup>

63.62 cm<sup>2</sup>

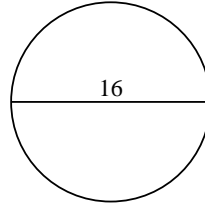
19.63 cm<sup>2</sup>

572.56 cm<sup>2</sup>

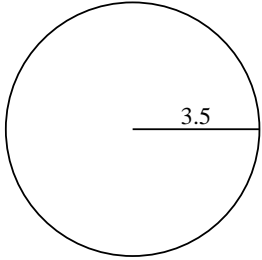
1)



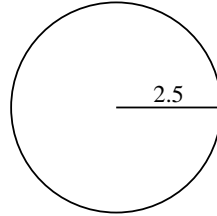
2)



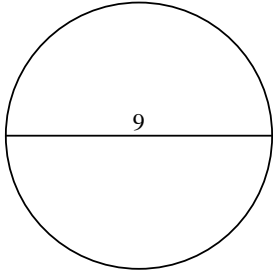
3)



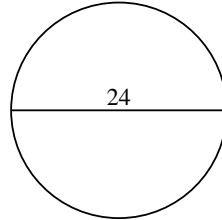
4)



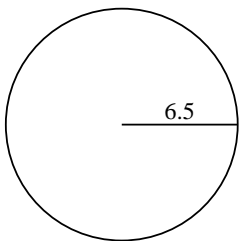
5)



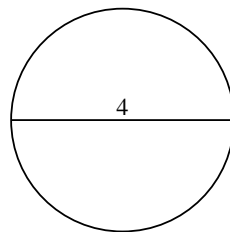
6)



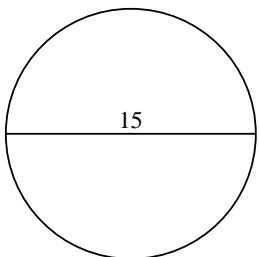
7)



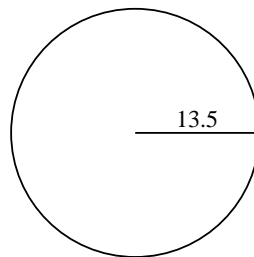
8)



9)



10)



**Respuestas**

1. \_\_\_\_\_

2. \_\_\_\_\_

3. \_\_\_\_\_

4. \_\_\_\_\_

5. \_\_\_\_\_

6. \_\_\_\_\_

7. \_\_\_\_\_

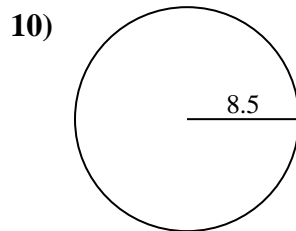
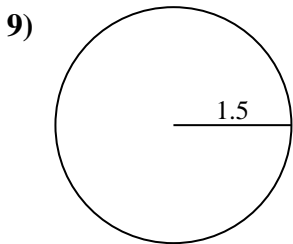
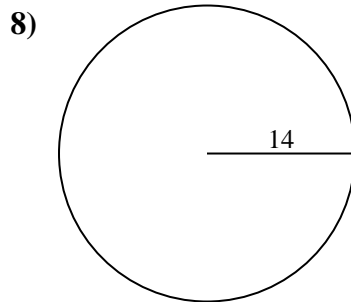
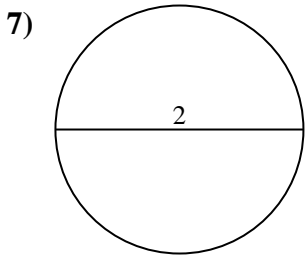
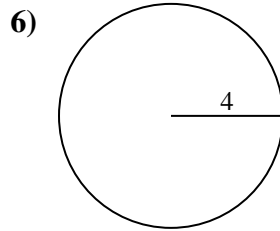
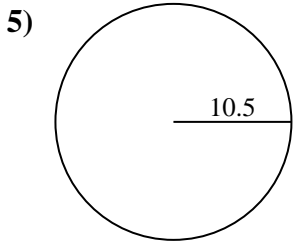
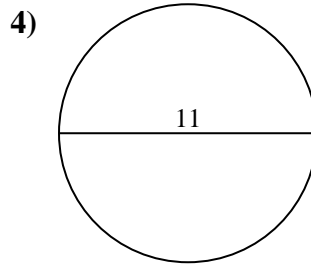
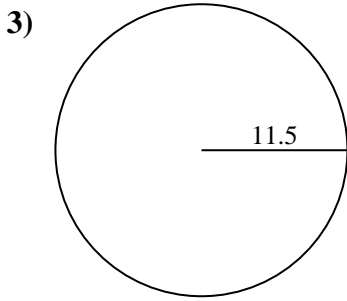
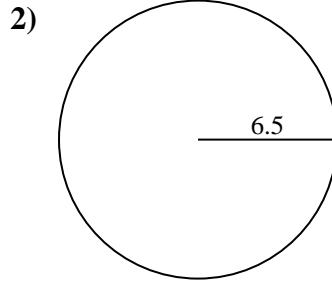
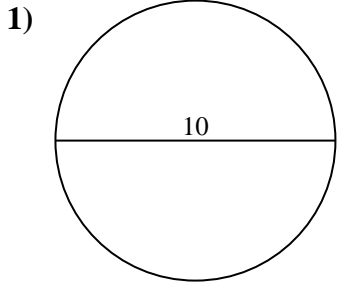
8. \_\_\_\_\_

9. \_\_\_\_\_

10. \_\_\_\_\_



Encuentra el área de cada círculo. Los círculos no están a escala.

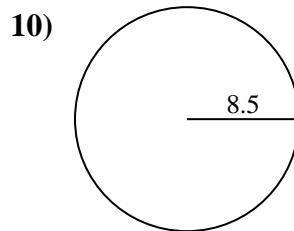
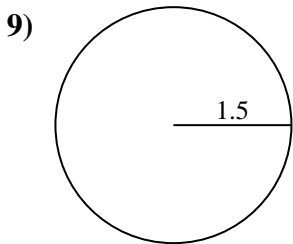
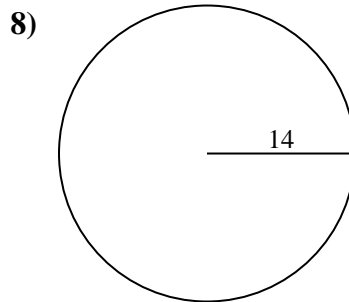
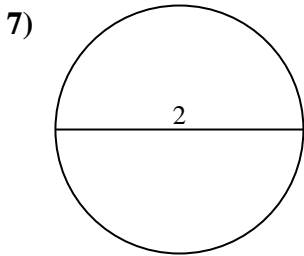
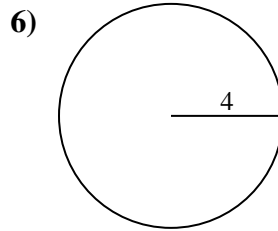
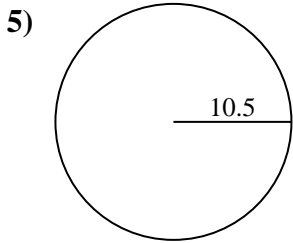
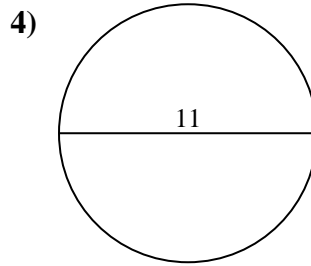
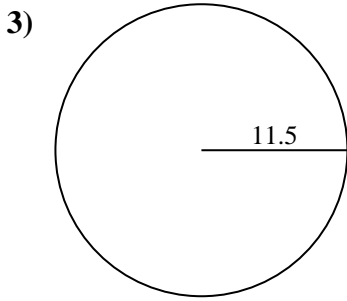
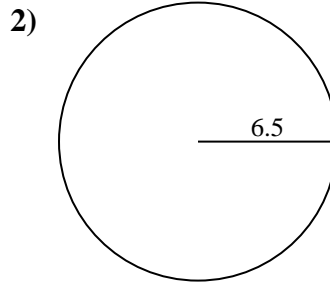
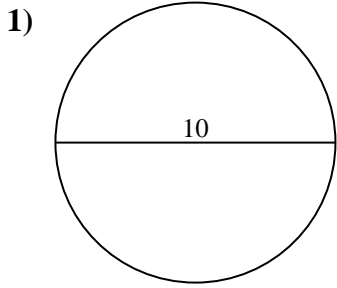


**Respuestas**

- 1. \_\_\_\_\_
- 2. \_\_\_\_\_
- 3. \_\_\_\_\_
- 4. \_\_\_\_\_
- 5. \_\_\_\_\_
- 6. \_\_\_\_\_
- 7. \_\_\_\_\_
- 8. \_\_\_\_\_
- 9. \_\_\_\_\_
- 10. \_\_\_\_\_



Encuentra el área de cada círculo. Los círculos no están a escala.



**Respuestas**

1. 78.54 cm<sup>2</sup>
2. 132.73 cm<sup>2</sup>
3. 415.48 cm<sup>2</sup>
4. 95.03 cm<sup>2</sup>
5. 346.36 cm<sup>2</sup>
6. 50.27 cm<sup>2</sup>
7. 3.14 cm<sup>2</sup>
8. 615.75 cm<sup>2</sup>
9. 7.07 cm<sup>2</sup>
10. 226.98 cm<sup>2</sup>





Encuentra el área de cada círculo. Los círculos no están a escala.

**Respuestas**

132.73 cm<sup>2</sup>

3.14 cm<sup>2</sup>

346.36 cm<sup>2</sup>

226.98 cm<sup>2</sup>

95.03 cm<sup>2</sup>

50.27 cm<sup>2</sup>

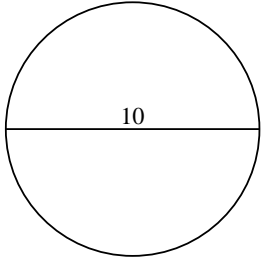
615.75 cm<sup>2</sup>

415.48 cm<sup>2</sup>

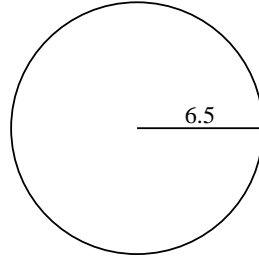
7.07 cm<sup>2</sup>

78.54 cm<sup>2</sup>

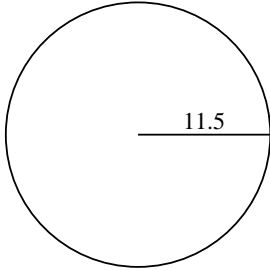
1)



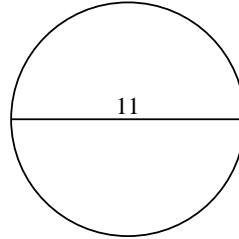
2)



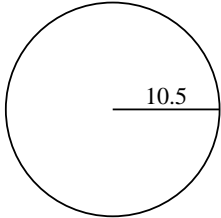
3)



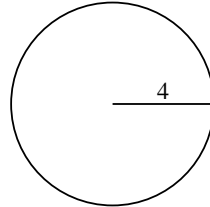
4)



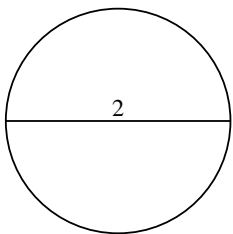
5)



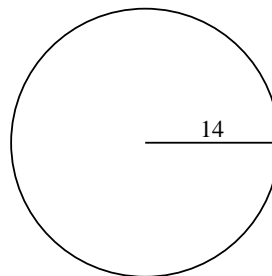
6)



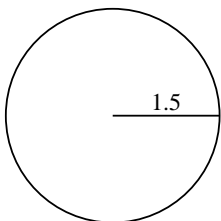
7)



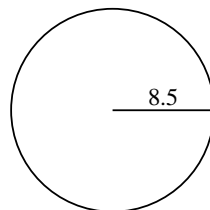
8)



9)



10)



1. \_\_\_\_\_

2. \_\_\_\_\_

3. \_\_\_\_\_

4. \_\_\_\_\_

5. \_\_\_\_\_

6. \_\_\_\_\_

7. \_\_\_\_\_

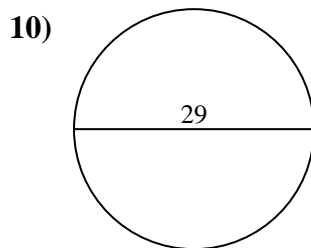
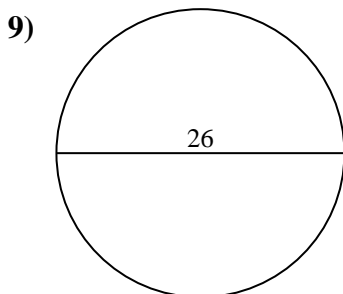
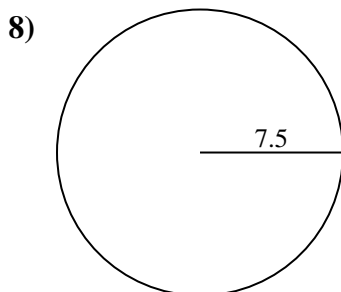
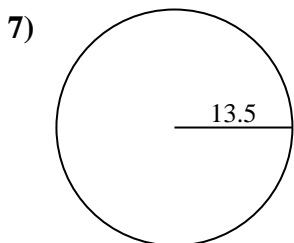
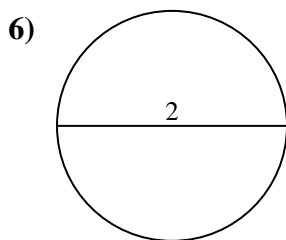
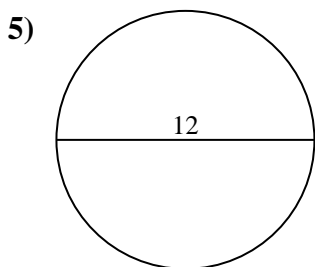
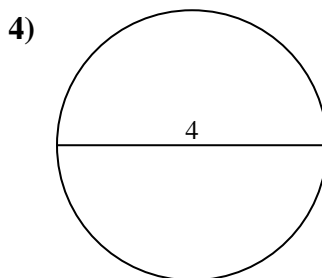
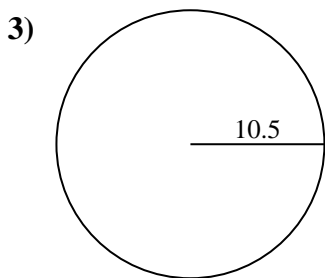
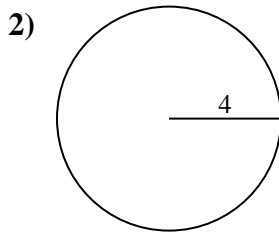
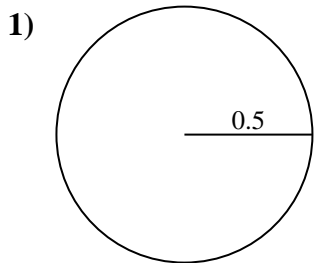
8. \_\_\_\_\_

9. \_\_\_\_\_

10. \_\_\_\_\_



Encuentra el área de cada círculo. Los círculos no están a escala.

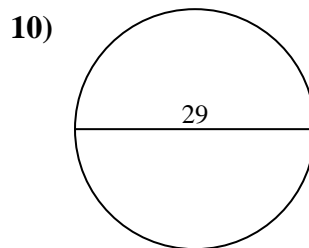
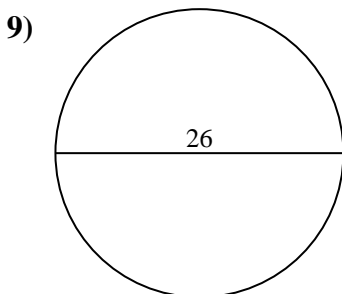
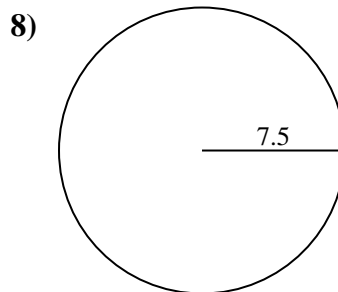
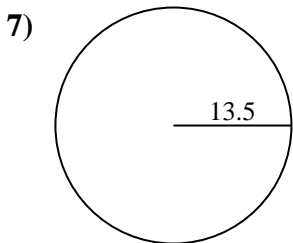
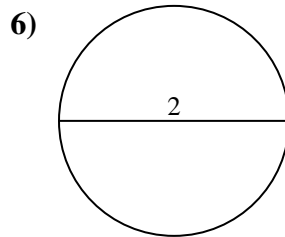
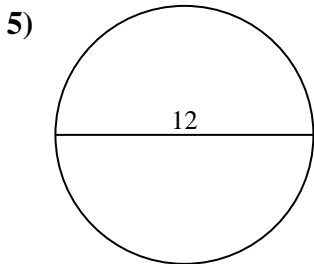
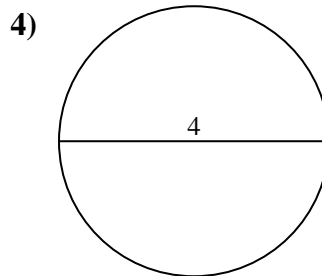
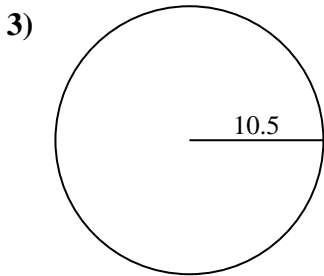
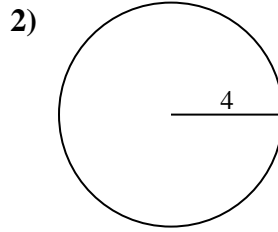
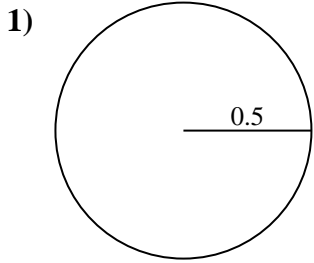


**Respuestas**

- 1. \_\_\_\_\_
- 2. \_\_\_\_\_
- 3. \_\_\_\_\_
- 4. \_\_\_\_\_
- 5. \_\_\_\_\_
- 6. \_\_\_\_\_
- 7. \_\_\_\_\_
- 8. \_\_\_\_\_
- 9. \_\_\_\_\_
- 10. \_\_\_\_\_



Encuentra el área de cada círculo. Los círculos no están a escala.



**Respuestas**

1. 0.79 cm<sup>2</sup>
2. 50.27 cm<sup>2</sup>
3. 346.36 cm<sup>2</sup>
4. 12.57 cm<sup>2</sup>
5. 113.1 cm<sup>2</sup>
6. 3.14 cm<sup>2</sup>
7. 572.56 cm<sup>2</sup>
8. 176.71 cm<sup>2</sup>
9. 530.93 cm<sup>2</sup>
10. 660.52 cm<sup>2</sup>



Encuentra el área de cada círculo. Los círculos no están a escala.

176.71 cm<sup>2</sup>

113.1 cm<sup>2</sup>

660.52 cm<sup>2</sup>

346.36 cm<sup>2</sup>

50.27 cm<sup>2</sup>

572.56 cm<sup>2</sup>

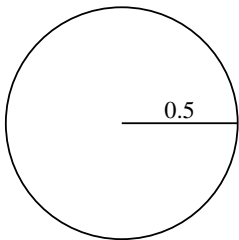
3.14 cm<sup>2</sup>

0.79 cm<sup>2</sup>

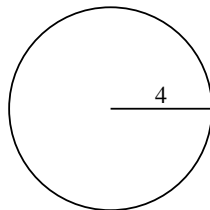
530.93 cm<sup>2</sup>

12.57 cm<sup>2</sup>

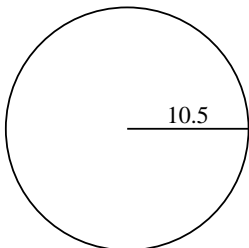
1)



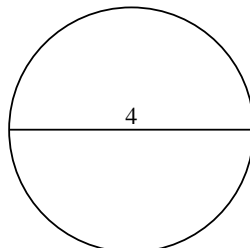
2)



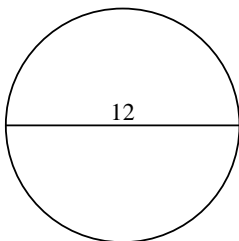
3)



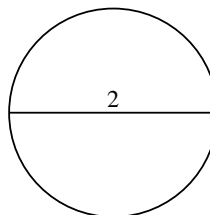
4)



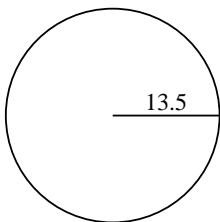
5)



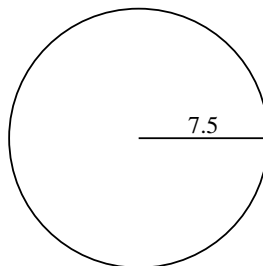
6)



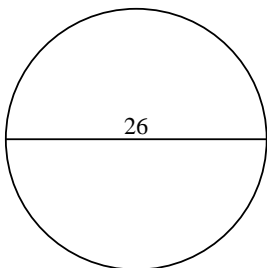
7)



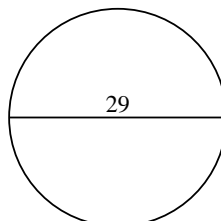
8)



9)



10)



**Respuestas**

1. \_\_\_\_\_

2. \_\_\_\_\_

3. \_\_\_\_\_

4. \_\_\_\_\_

5. \_\_\_\_\_

6. \_\_\_\_\_

7. \_\_\_\_\_

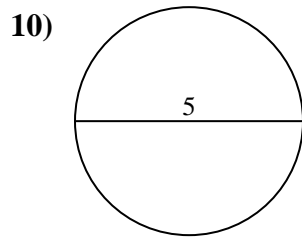
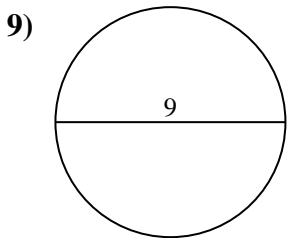
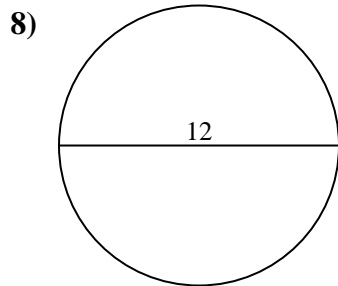
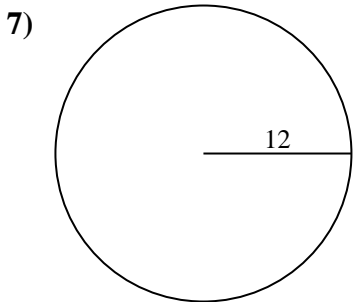
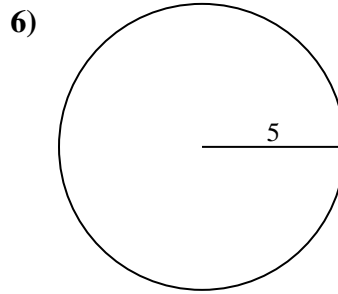
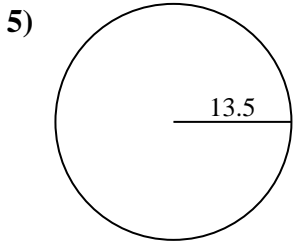
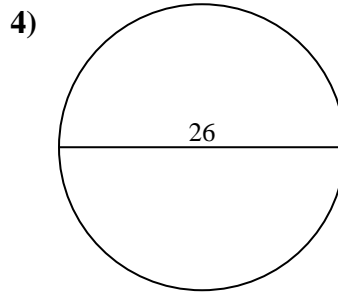
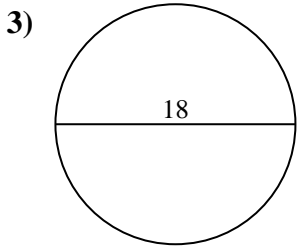
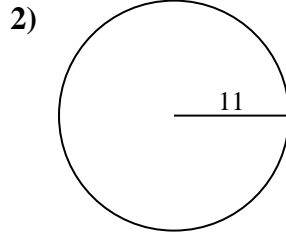
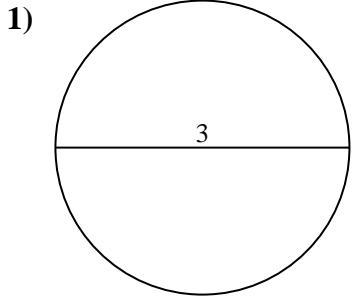
8. \_\_\_\_\_

9. \_\_\_\_\_

10. \_\_\_\_\_



Encuentra el área de cada círculo. Los círculos no están a escala.

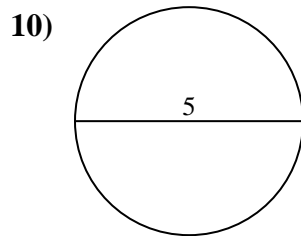
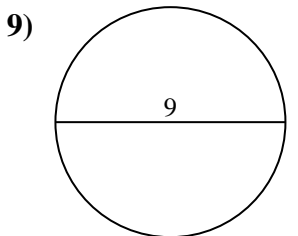
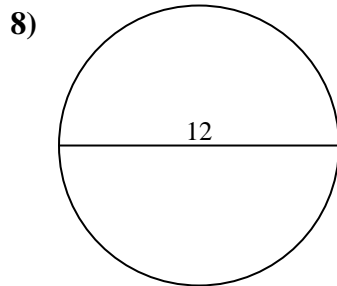
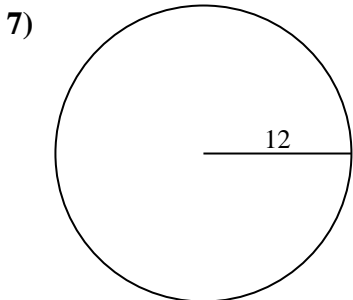
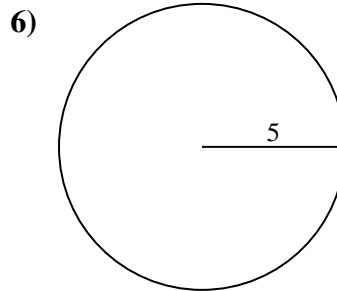
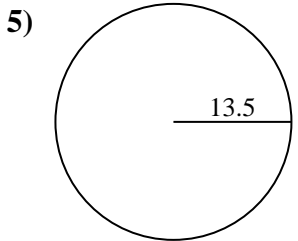
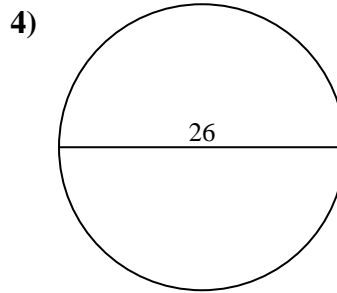
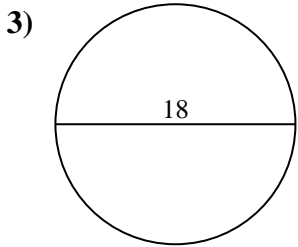
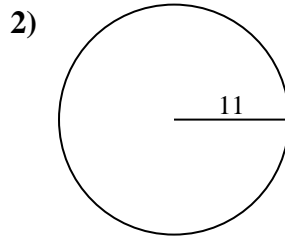
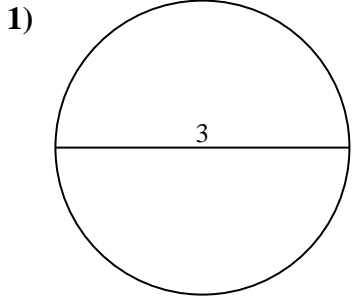


**Respuestas**

- 1. \_\_\_\_\_
- 2. \_\_\_\_\_
- 3. \_\_\_\_\_
- 4. \_\_\_\_\_
- 5. \_\_\_\_\_
- 6. \_\_\_\_\_
- 7. \_\_\_\_\_
- 8. \_\_\_\_\_
- 9. \_\_\_\_\_
- 10. \_\_\_\_\_



Encuentra el área de cada círculo. Los círculos no están a escala.



**Respuestas**

1. 7.07 cm<sup>2</sup>
2. 380.13 cm<sup>2</sup>
3. 254.47 cm<sup>2</sup>
4. 530.93 cm<sup>2</sup>
5. 572.56 cm<sup>2</sup>
6. 78.54 cm<sup>2</sup>
7. 452.39 cm<sup>2</sup>
8. 113.1 cm<sup>2</sup>
9. 63.62 cm<sup>2</sup>
10. 19.63 cm<sup>2</sup>

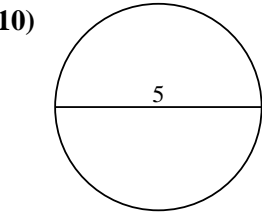
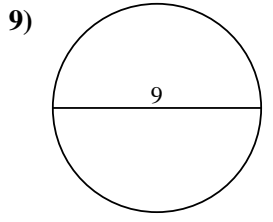
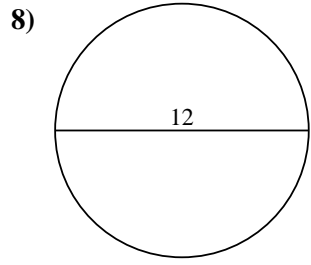
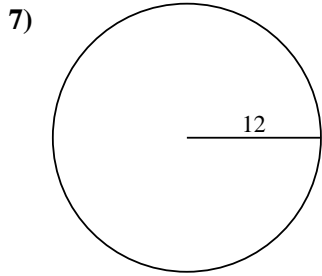
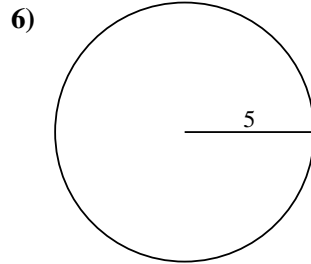
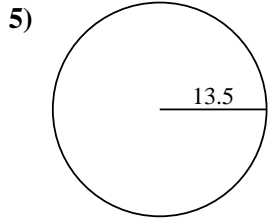
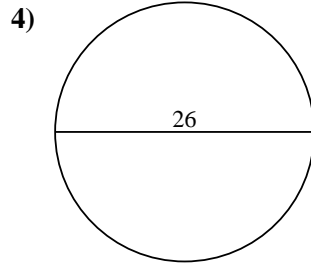
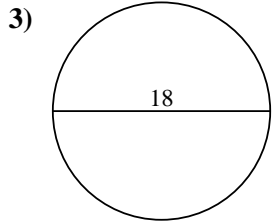
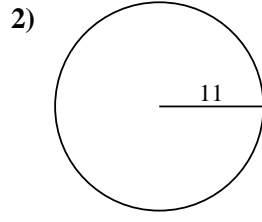
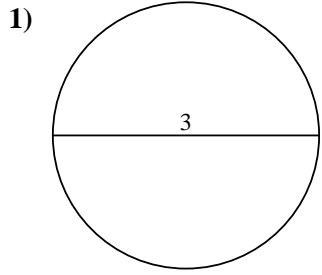


Encuentra el área de cada círculo. Los círculos no están a escala.

**Respuestas**

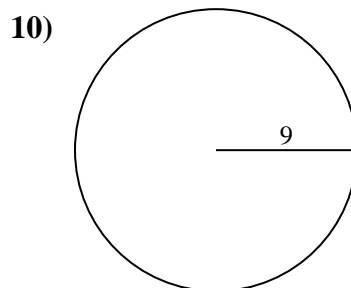
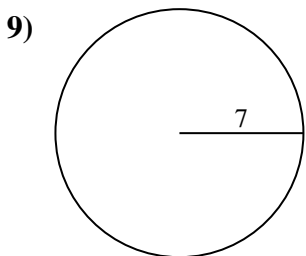
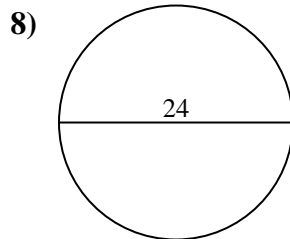
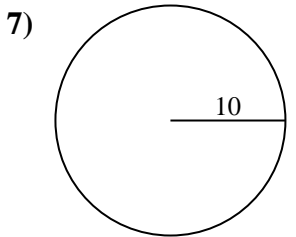
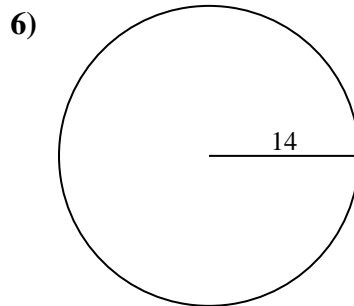
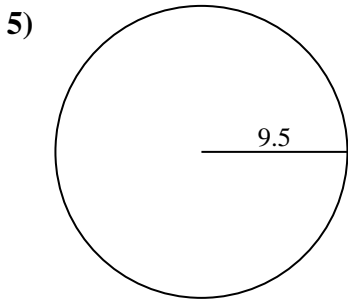
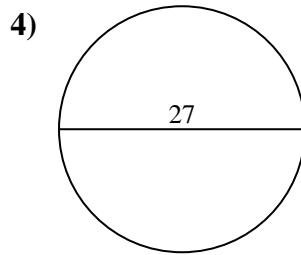
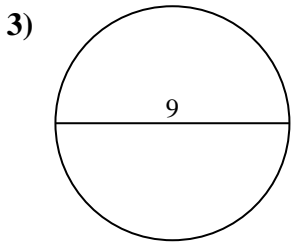
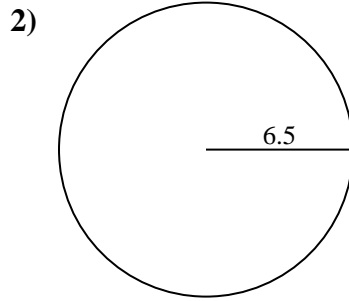
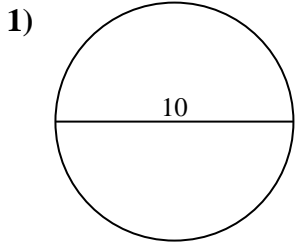
7.07 cm <sup>2</sup>	78.54 cm <sup>2</sup>	254.47 cm <sup>2</sup>	63.62 cm <sup>2</sup>	380.13 cm <sup>2</sup>
572.56 cm <sup>2</sup>	113.1 cm <sup>2</sup>	530.93 cm <sup>2</sup>	19.63 cm <sup>2</sup>	452.39 cm <sup>2</sup>

1. \_\_\_\_\_
2. \_\_\_\_\_
3. \_\_\_\_\_
4. \_\_\_\_\_
5. \_\_\_\_\_
6. \_\_\_\_\_
7. \_\_\_\_\_
8. \_\_\_\_\_
9. \_\_\_\_\_
10. \_\_\_\_\_





Encuentra el área de cada círculo. Los círculos no están a escala.



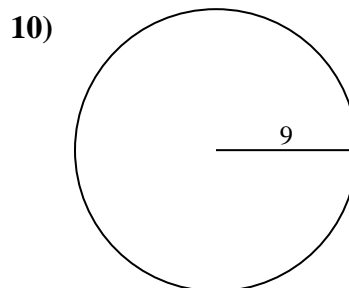
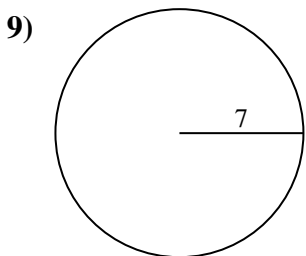
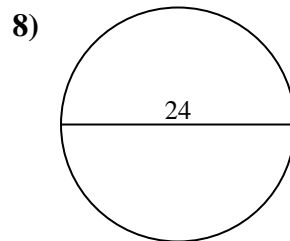
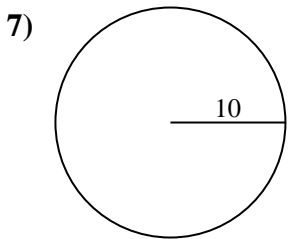
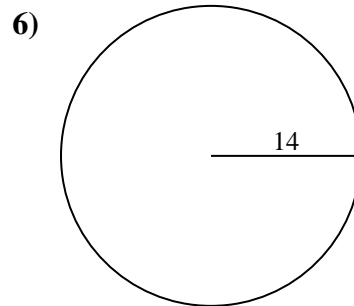
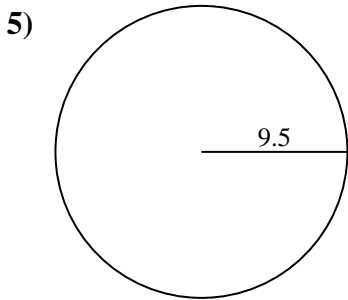
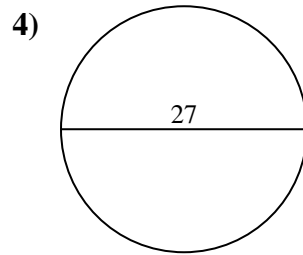
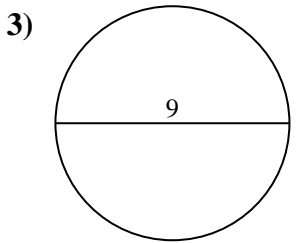
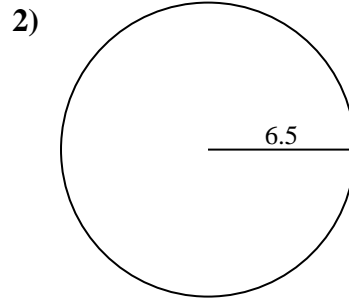
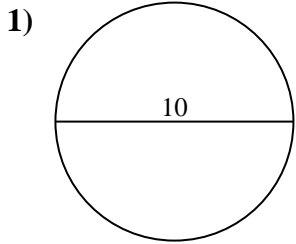
**Respuestas**

- 1. \_\_\_\_\_
- 2. \_\_\_\_\_
- 3. \_\_\_\_\_
- 4. \_\_\_\_\_
- 5. \_\_\_\_\_
- 6. \_\_\_\_\_
- 7. \_\_\_\_\_
- 8. \_\_\_\_\_
- 9. \_\_\_\_\_
- 10. \_\_\_\_\_





Encuentra el área de cada círculo. Los círculos no están a escala.



**Respuestas**

1. 78.54 cm<sup>2</sup>
2. 132.73 cm<sup>2</sup>
3. 63.62 cm<sup>2</sup>
4. 572.56 cm<sup>2</sup>
5. 283.53 cm<sup>2</sup>
6. 615.75 cm<sup>2</sup>
7. 314.16 cm<sup>2</sup>
8. 452.39 cm<sup>2</sup>
9. 153.94 cm<sup>2</sup>
10. 254.47 cm<sup>2</sup>



Encuentra el área de cada círculo. Los círculos no están a escala.

132.73 cm<sup>2</sup>

572.56 cm<sup>2</sup>

78.54 cm<sup>2</sup>

615.75 cm<sup>2</sup>

153.94 cm<sup>2</sup>

254.47 cm<sup>2</sup>

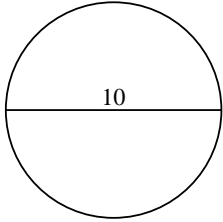
314.16 cm<sup>2</sup>

63.62 cm<sup>2</sup>

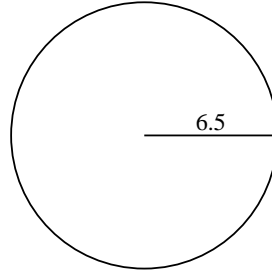
283.53 cm<sup>2</sup>

452.39 cm<sup>2</sup>

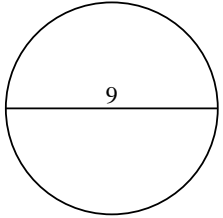
1)



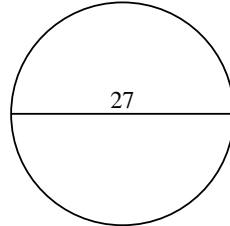
2)



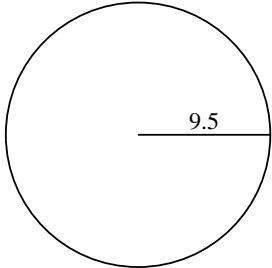
3)



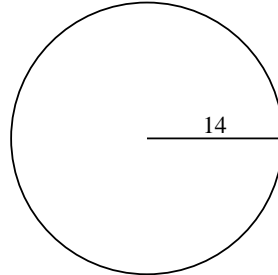
4)



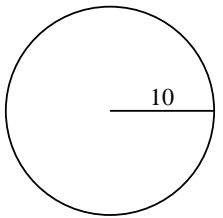
5)



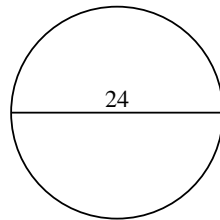
6)



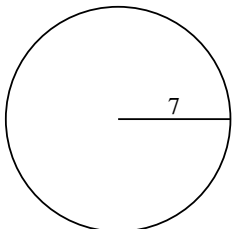
7)



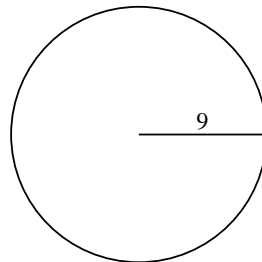
8)



9)



10)



**Respuestas**

1. \_\_\_\_\_

2. \_\_\_\_\_

3. \_\_\_\_\_

4. \_\_\_\_\_

5. \_\_\_\_\_

6. \_\_\_\_\_

7. \_\_\_\_\_

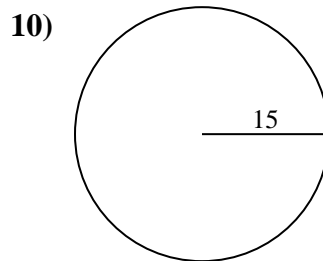
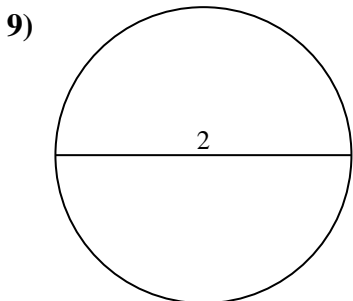
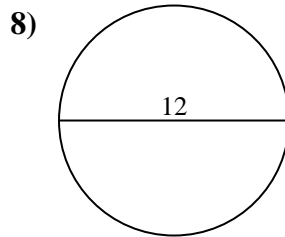
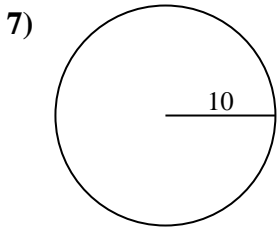
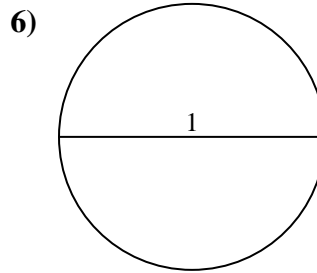
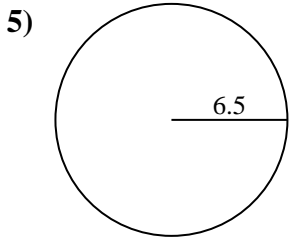
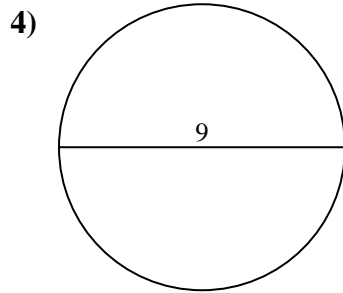
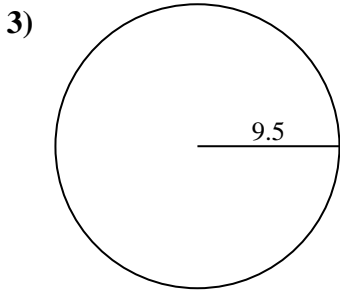
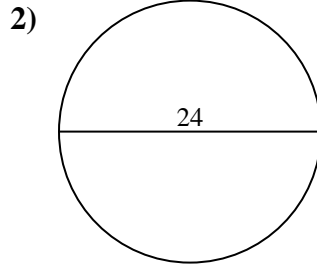
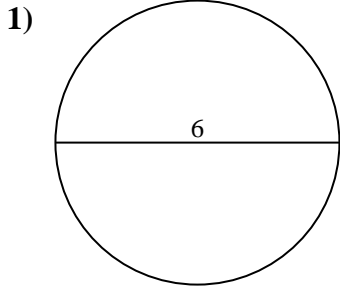
8. \_\_\_\_\_

9. \_\_\_\_\_

10. \_\_\_\_\_



Encuentra el área de cada círculo. Los círculos no están a escala.

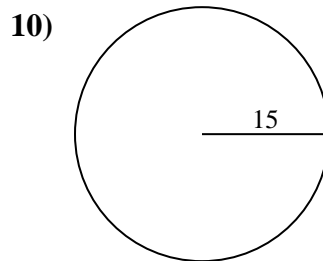
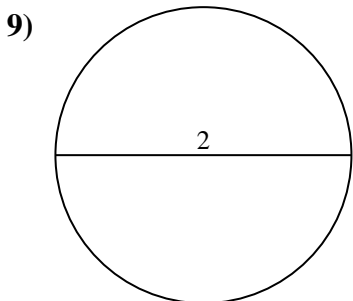
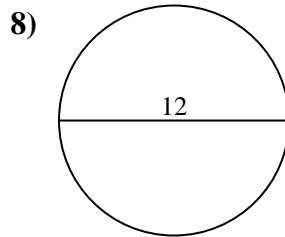
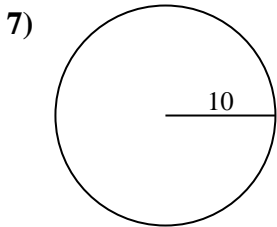
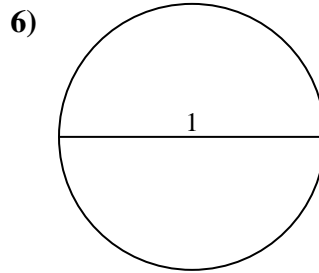
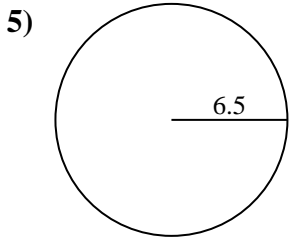
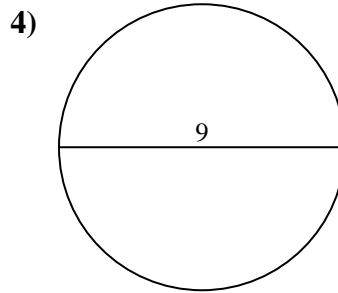
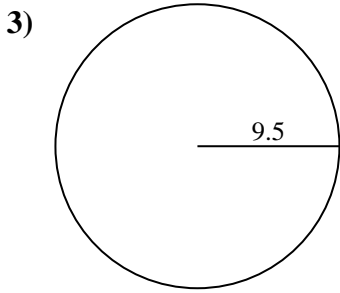
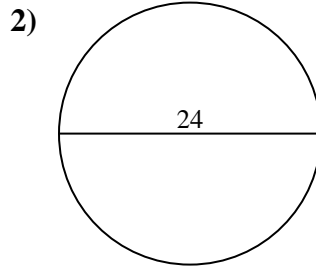
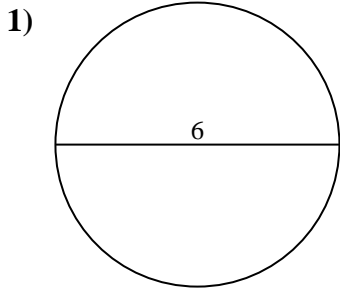


**Respuestas**

- 1. \_\_\_\_\_
- 2. \_\_\_\_\_
- 3. \_\_\_\_\_
- 4. \_\_\_\_\_
- 5. \_\_\_\_\_
- 6. \_\_\_\_\_
- 7. \_\_\_\_\_
- 8. \_\_\_\_\_
- 9. \_\_\_\_\_
- 10. \_\_\_\_\_



Encuentra el área de cada círculo. Los círculos no están a escala.



**Respuestas**

1. 28.27 cm<sup>2</sup>
2. 452.39 cm<sup>2</sup>
3. 283.53 cm<sup>2</sup>
4. 63.62 cm<sup>2</sup>
5. 132.73 cm<sup>2</sup>
6. 0.79 cm<sup>2</sup>
7. 314.16 cm<sup>2</sup>
8. 113.1 cm<sup>2</sup>
9. 3.14 cm<sup>2</sup>
10. 706.86 cm<sup>2</sup>



Encuentra el área de cada círculo. Los círculos no están a escala.

283.53 cm<sup>2</sup>

452.39 cm<sup>2</sup>

3.14 cm<sup>2</sup>

0.79 cm<sup>2</sup>

132.73 cm<sup>2</sup>

63.62 cm<sup>2</sup>

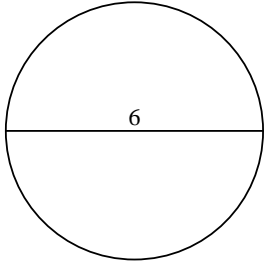
28.27 cm<sup>2</sup>

706.86 cm<sup>2</sup>

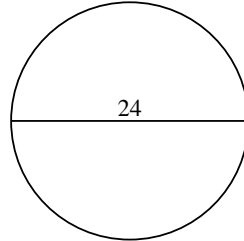
314.16 cm<sup>2</sup>

113.1 cm<sup>2</sup>

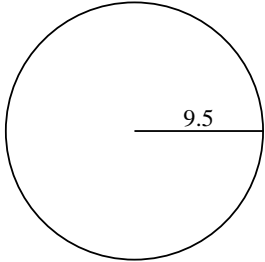
1)



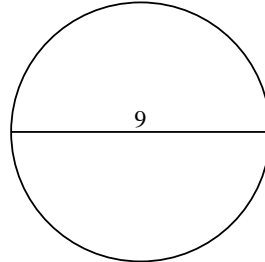
2)



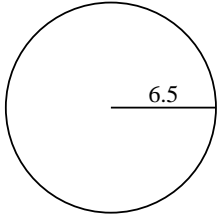
3)



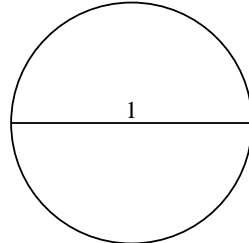
4)



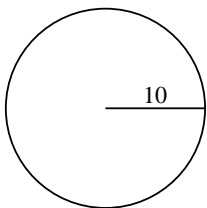
5)



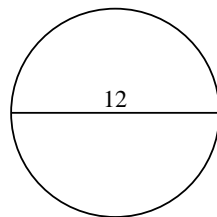
6)



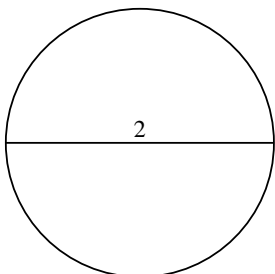
7)



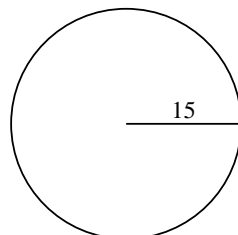
8)



9)



10)



**Respuestas**

1. \_\_\_\_\_

2. \_\_\_\_\_

3. \_\_\_\_\_

4. \_\_\_\_\_

5. \_\_\_\_\_

6. \_\_\_\_\_

7. \_\_\_\_\_

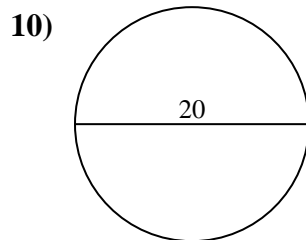
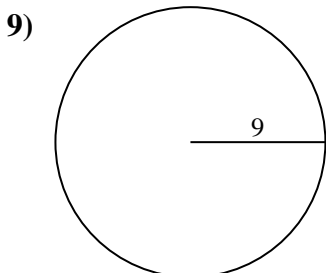
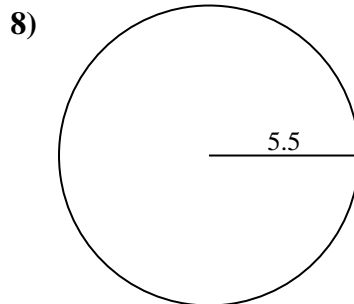
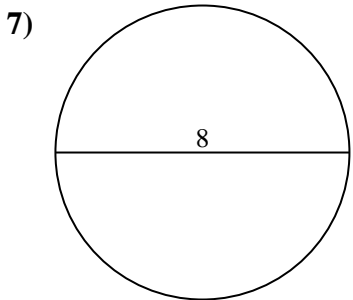
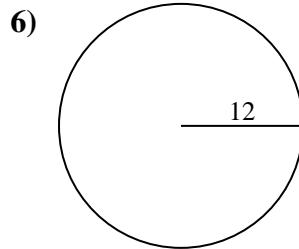
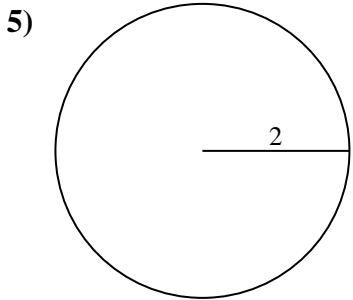
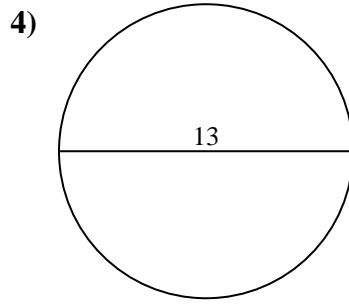
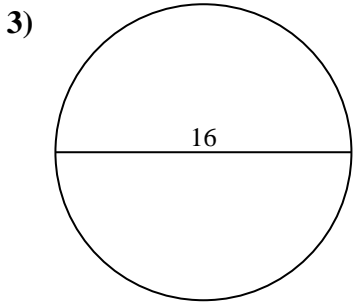
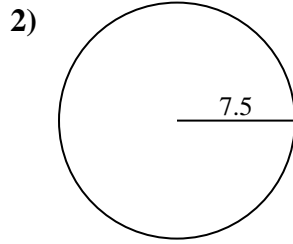
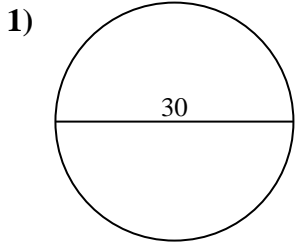
8. \_\_\_\_\_

9. \_\_\_\_\_

10. \_\_\_\_\_



Encuentra el área de cada círculo. Los círculos no están a escala.

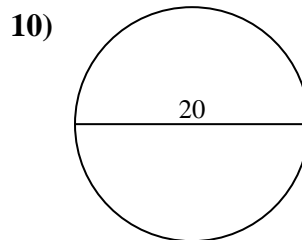
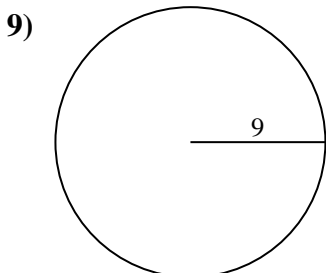
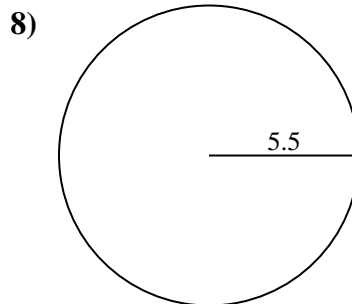
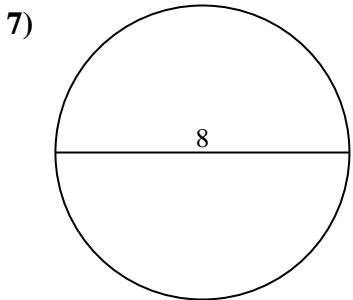
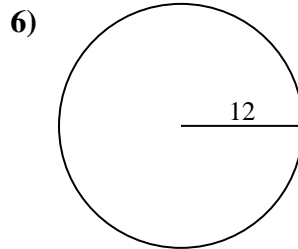
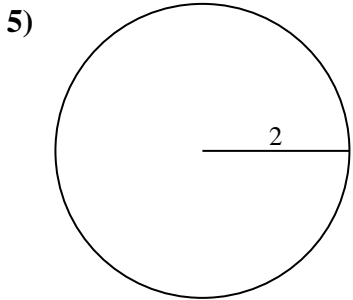
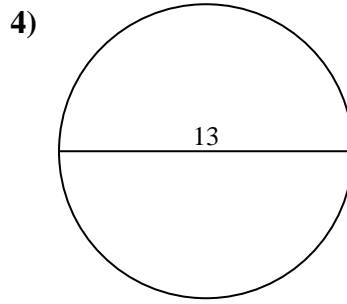
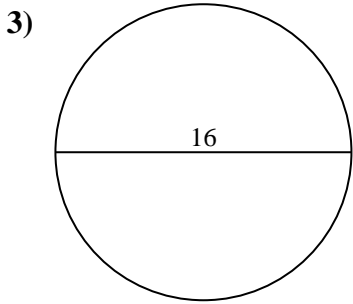
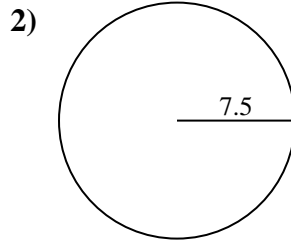
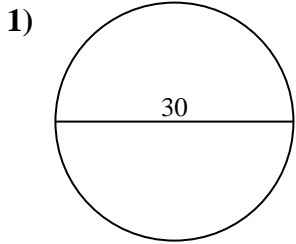


**Respuestas**

- 1. \_\_\_\_\_
- 2. \_\_\_\_\_
- 3. \_\_\_\_\_
- 4. \_\_\_\_\_
- 5. \_\_\_\_\_
- 6. \_\_\_\_\_
- 7. \_\_\_\_\_
- 8. \_\_\_\_\_
- 9. \_\_\_\_\_
- 10. \_\_\_\_\_



Encuentra el área de cada círculo. Los círculos no están a escala.



**Respuestas**

1. 706.86 cm<sup>2</sup>
2. 176.71 cm<sup>2</sup>
3. 201.06 cm<sup>2</sup>
4. 132.73 cm<sup>2</sup>
5. 12.57 cm<sup>2</sup>
6. 452.39 cm<sup>2</sup>
7. 50.27 cm<sup>2</sup>
8. 95.03 cm<sup>2</sup>
9. 254.47 cm<sup>2</sup>
10. 314.16 cm<sup>2</sup>



Encuentra el área de cada círculo. Los círculos no están a escala.

**Respuestas**

12.57 cm<sup>2</sup>

254.47 cm<sup>2</sup>

132.73 cm<sup>2</sup>

706.86 cm<sup>2</sup>

50.27 cm<sup>2</sup>

201.06 cm<sup>2</sup>

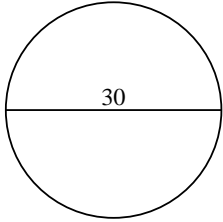
452.39 cm<sup>2</sup>

176.71 cm<sup>2</sup>

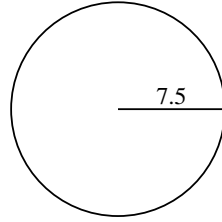
95.03 cm<sup>2</sup>

314.16 cm<sup>2</sup>

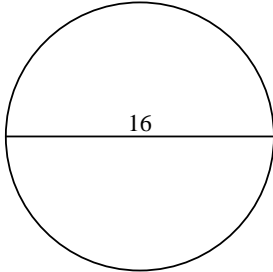
1)



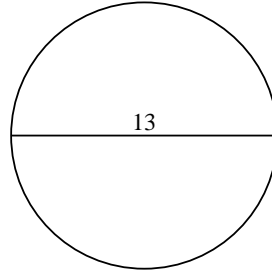
2)



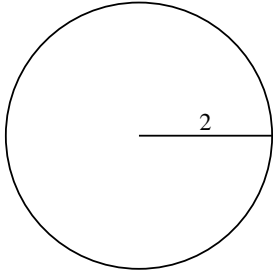
3)



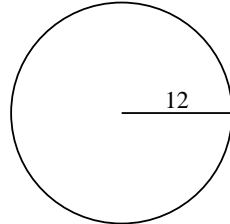
4)



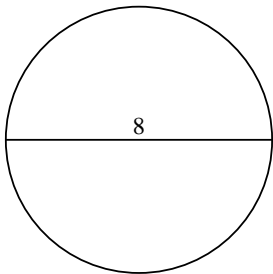
5)



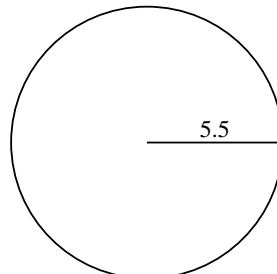
6)



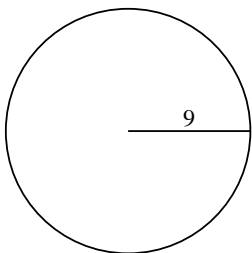
7)



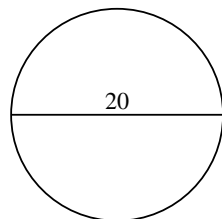
8)



9)



10)



1. \_\_\_\_\_

2. \_\_\_\_\_

3. \_\_\_\_\_

4. \_\_\_\_\_

5. \_\_\_\_\_

6. \_\_\_\_\_

7. \_\_\_\_\_

8. \_\_\_\_\_

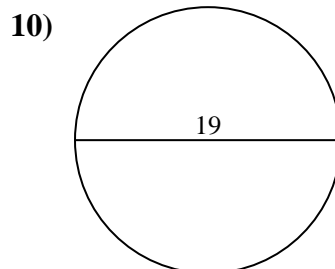
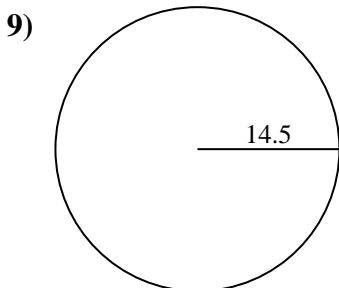
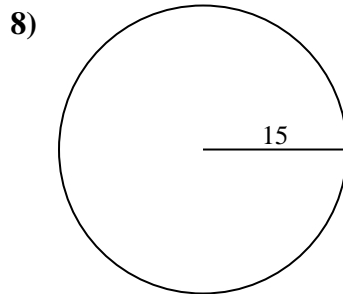
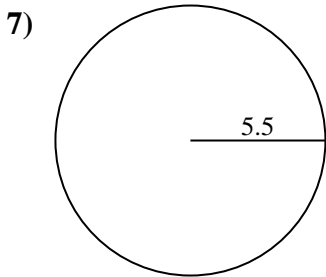
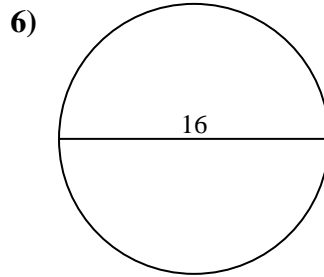
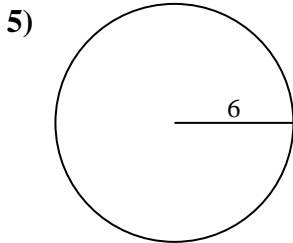
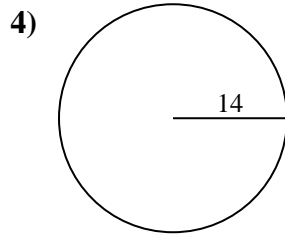
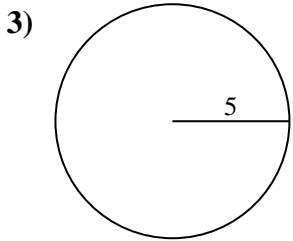
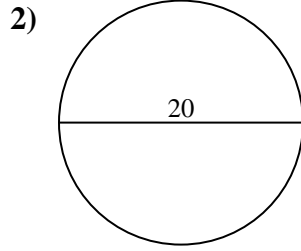
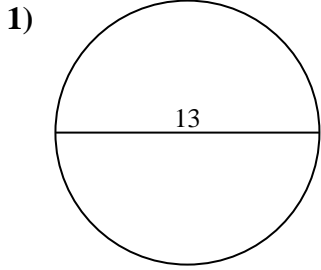
9. \_\_\_\_\_

10. \_\_\_\_\_





Encuentra el área de cada círculo. Los círculos no están a escala.

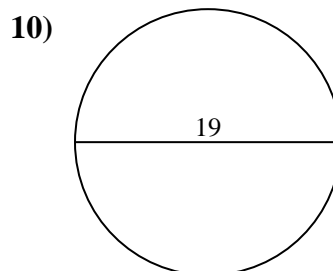
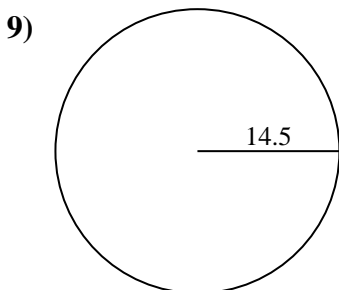
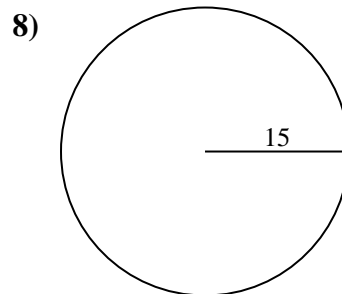
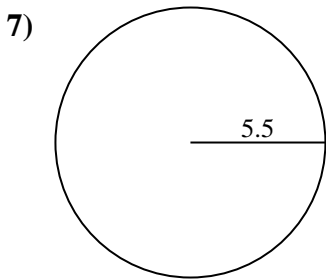
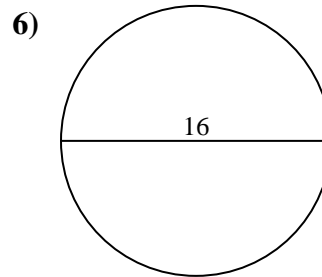
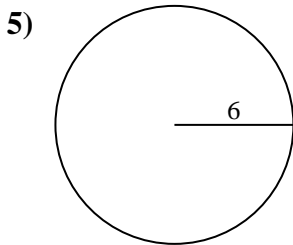
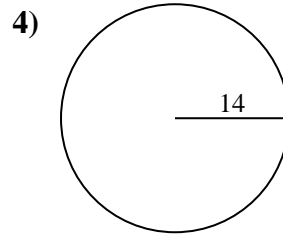
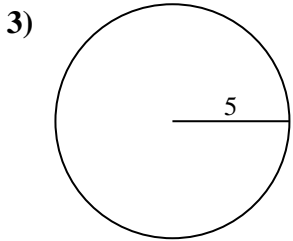
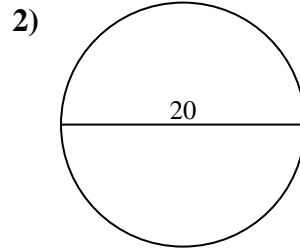
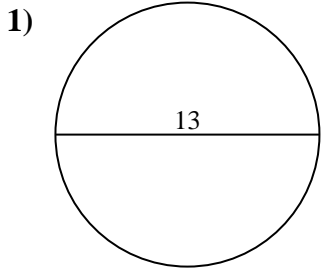


**Respuestas**

- 1. \_\_\_\_\_
- 2. \_\_\_\_\_
- 3. \_\_\_\_\_
- 4. \_\_\_\_\_
- 5. \_\_\_\_\_
- 6. \_\_\_\_\_
- 7. \_\_\_\_\_
- 8. \_\_\_\_\_
- 9. \_\_\_\_\_
- 10. \_\_\_\_\_



Encuentra el área de cada círculo. Los círculos no están a escala.



**Respuestas**

1. 132.73 cm<sup>2</sup>
2. 314.16 cm<sup>2</sup>
3. 78.54 cm<sup>2</sup>
4. 615.75 cm<sup>2</sup>
5. 113.1 cm<sup>2</sup>
6. 201.06 cm<sup>2</sup>
7. 95.03 cm<sup>2</sup>
8. 706.86 cm<sup>2</sup>
9. 660.52 cm<sup>2</sup>
10. 283.53 cm<sup>2</sup>



Encuentra el área de cada círculo. Los círculos no están a escala.

660.52 cm<sup>2</sup>

113.1 cm<sup>2</sup>

706.86 cm<sup>2</sup>

132.73 cm<sup>2</sup>

615.75 cm<sup>2</sup>

95.03 cm<sup>2</sup>

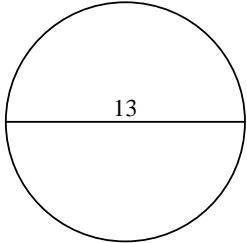
283.53 cm<sup>2</sup>

314.16 cm<sup>2</sup>

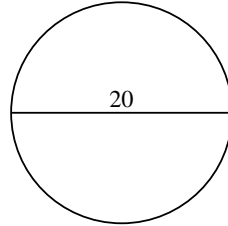
78.54 cm<sup>2</sup>

201.06 cm<sup>2</sup>

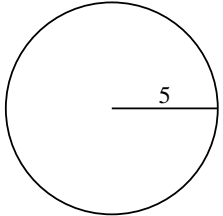
1)



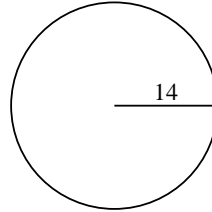
2)



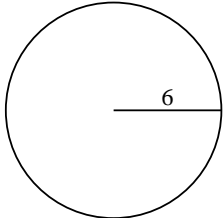
3)



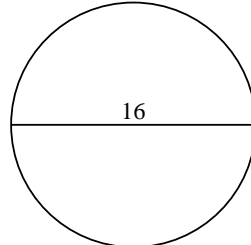
4)



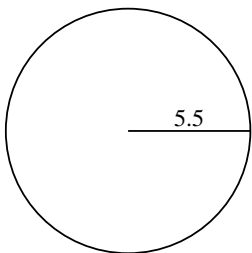
5)



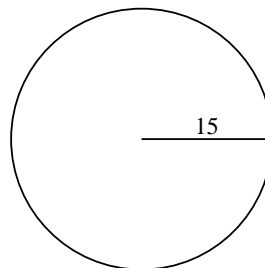
6)



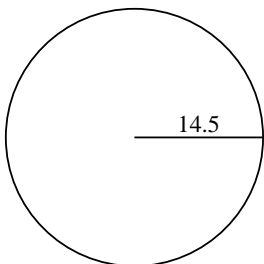
7)



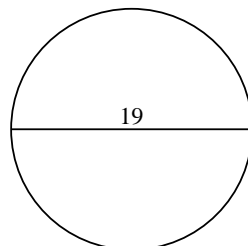
8)



9)



10)



**Respuestas**

1. \_\_\_\_\_

2. \_\_\_\_\_

3. \_\_\_\_\_

4. \_\_\_\_\_

5. \_\_\_\_\_

6. \_\_\_\_\_

7. \_\_\_\_\_

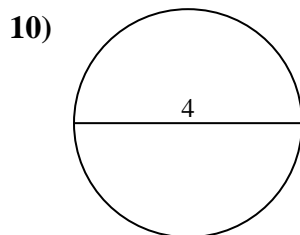
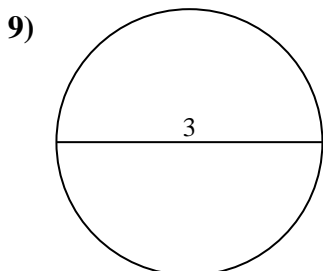
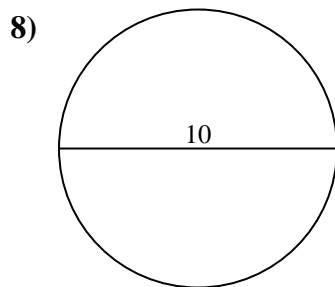
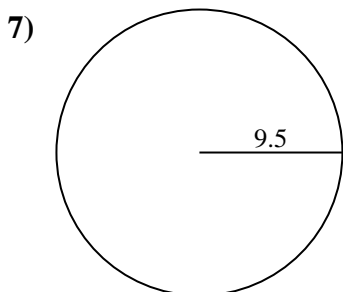
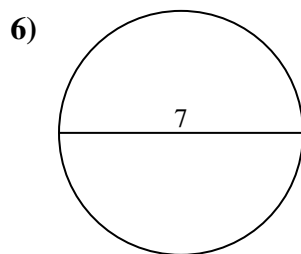
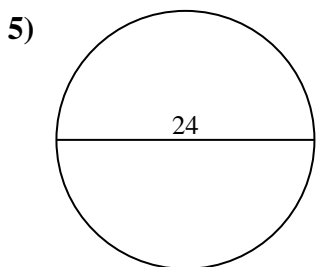
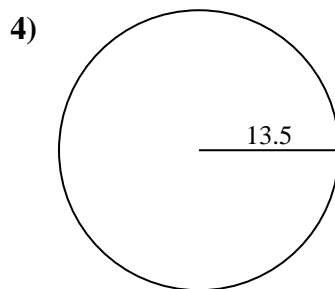
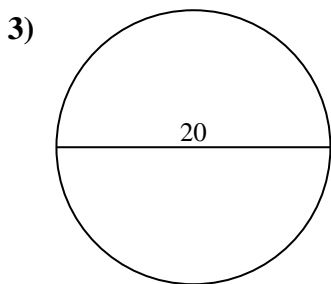
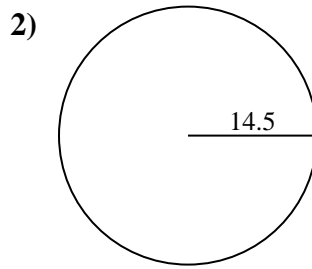
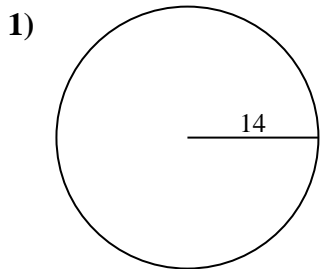
8. \_\_\_\_\_

9. \_\_\_\_\_

10. \_\_\_\_\_



Encuentra el área de cada círculo. Los círculos no están a escala.

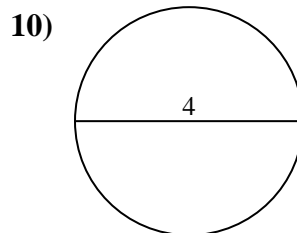
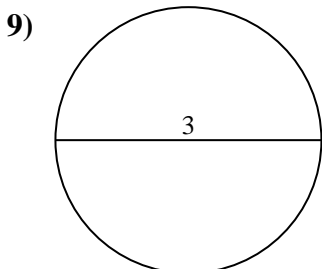
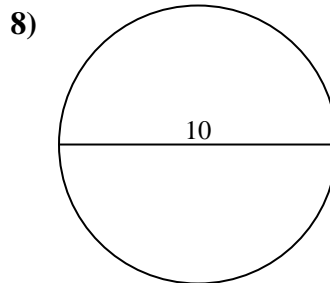
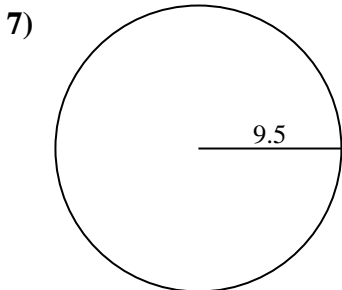
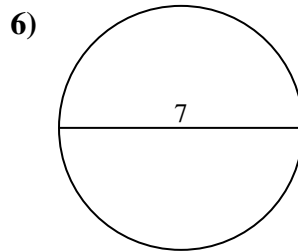
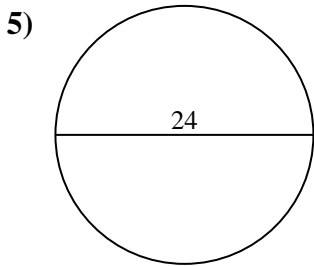
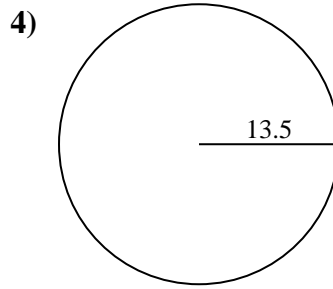
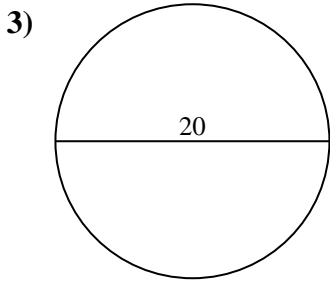
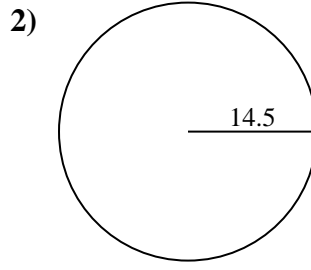
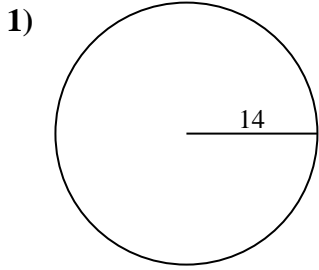


**Respuestas**

- 1. \_\_\_\_\_
- 2. \_\_\_\_\_
- 3. \_\_\_\_\_
- 4. \_\_\_\_\_
- 5. \_\_\_\_\_
- 6. \_\_\_\_\_
- 7. \_\_\_\_\_
- 8. \_\_\_\_\_
- 9. \_\_\_\_\_
- 10. \_\_\_\_\_



Encuentra el área de cada círculo. Los círculos no están a escala.



**Respuestas**

- 1. **615.75 cm<sup>2</sup>**
- 2. **660.52 cm<sup>2</sup>**
- 3. **314.16 cm<sup>2</sup>**
- 4. **572.56 cm<sup>2</sup>**
- 5. **452.39 cm<sup>2</sup>**
- 6. **38.48 cm<sup>2</sup>**
- 7. **283.53 cm<sup>2</sup>**
- 8. **78.54 cm<sup>2</sup>**
- 9. **7.07 cm<sup>2</sup>**
- 10. **12.57 cm<sup>2</sup>**



Encuentra el área de cada círculo. Los círculos no están a escala.

314.16 cm<sup>2</sup>

452.39 cm<sup>2</sup>

660.52 cm<sup>2</sup>

7.07 cm<sup>2</sup>

572.56 cm<sup>2</sup>

38.48 cm<sup>2</sup>

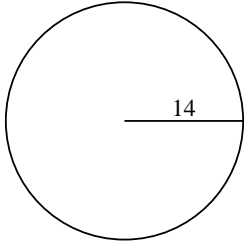
78.54 cm<sup>2</sup>

283.53 cm<sup>2</sup>

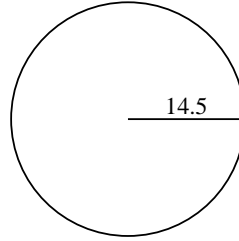
12.57 cm<sup>2</sup>

615.75 cm<sup>2</sup>

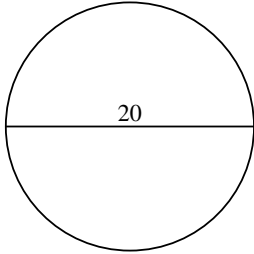
1)



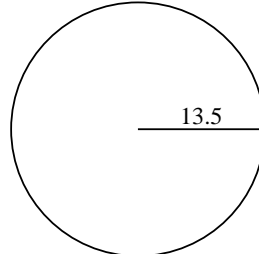
2)



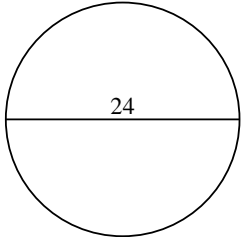
3)



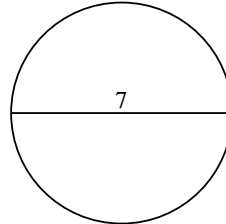
4)



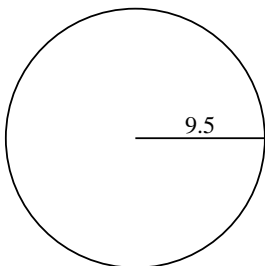
5)



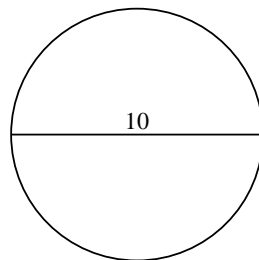
6)



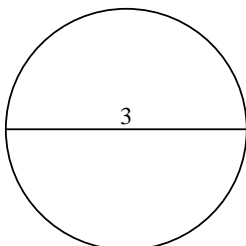
7)



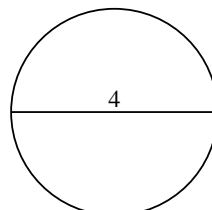
8)



9)



10)



**Respuestas**

1. \_\_\_\_\_

2. \_\_\_\_\_

3. \_\_\_\_\_

4. \_\_\_\_\_

5. \_\_\_\_\_

6. \_\_\_\_\_

7. \_\_\_\_\_

8. \_\_\_\_\_

9. \_\_\_\_\_

10. \_\_\_\_\_