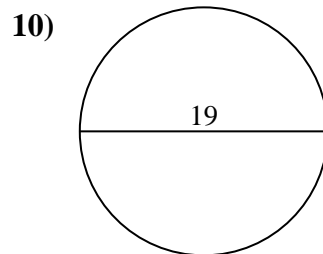
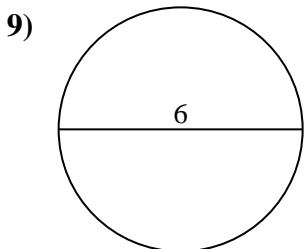
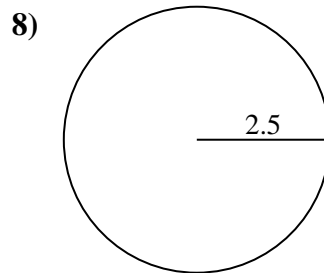
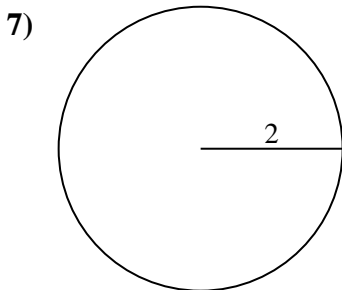
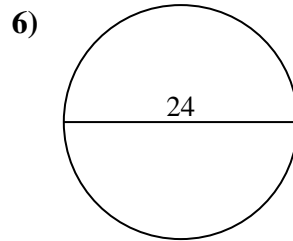
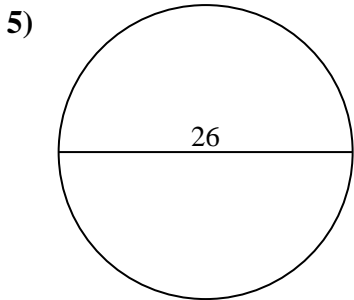
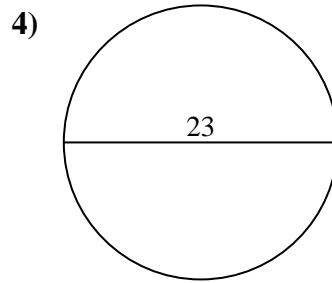
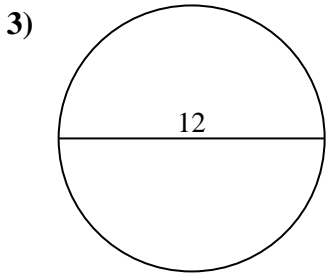
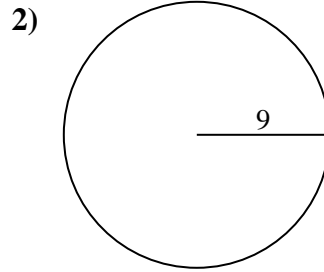
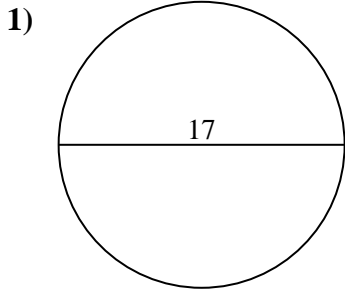




Encuentra el área de cada círculo. Los círculos no están a escala.



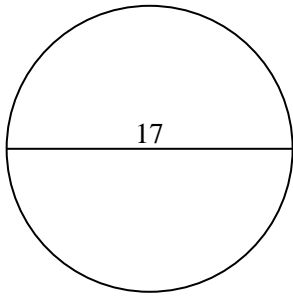
Respuestas

- 1. _____
- 2. _____
- 3. _____
- 4. _____
- 5. _____
- 6. _____
- 7. _____
- 8. _____
- 9. _____
- 10. _____

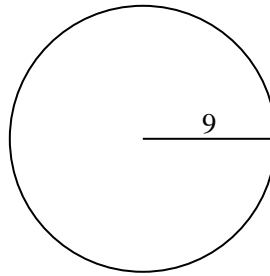


Encuentra el área de cada círculo. Los círculos no están a escala.

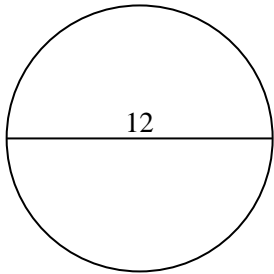
1)



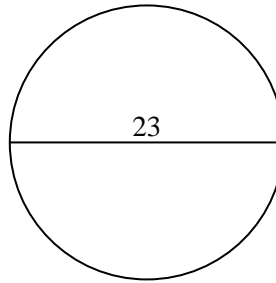
2)



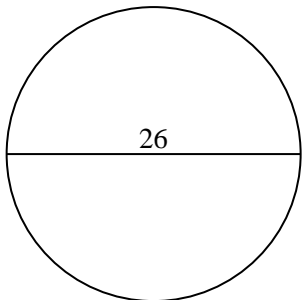
3)



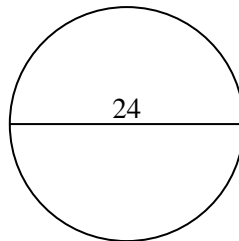
4)



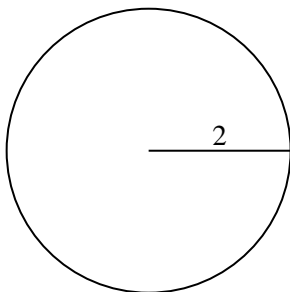
5)



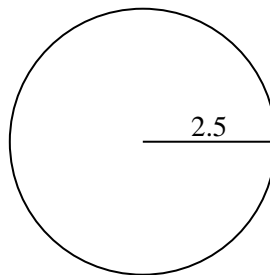
6)



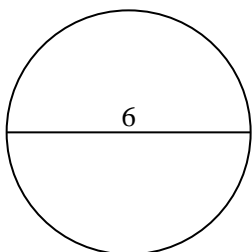
7)



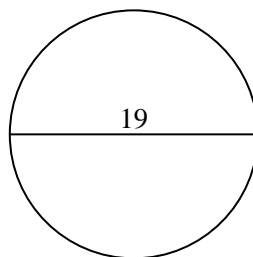
8)



9)



10)

**Respuestas**

1. 226.98 cm²
2. 254.47 cm²
3. 113.1 cm²
4. 415.48 cm²
5. 530.93 cm²
6. 452.39 cm²
7. 12.57 cm²
8. 19.63 cm²
9. 28.27 cm²
10. 283.53 cm²