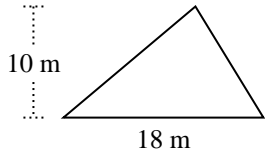


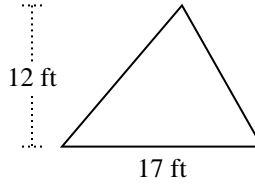


Encuentra el área de cada triángulo. Las unidades no están a escala.

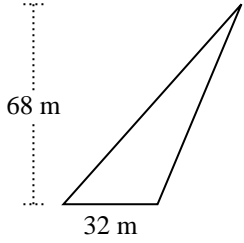
1)



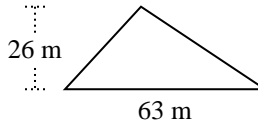
2)



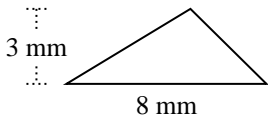
3)



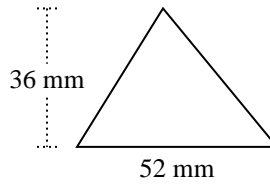
4)



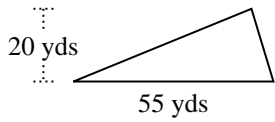
5)



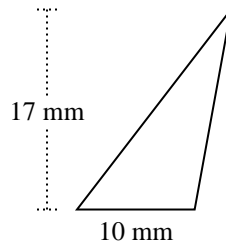
6)



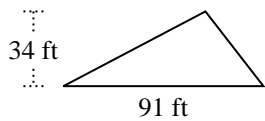
7)



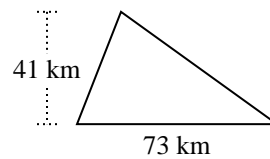
8)



9)



10)



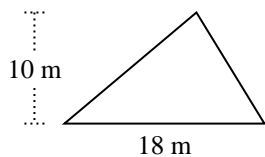
Respuestas

- 1. _____
- 2. _____
- 3. _____
- 4. _____
- 5. _____
- 6. _____
- 7. _____
- 8. _____
- 9. _____
- 10. _____

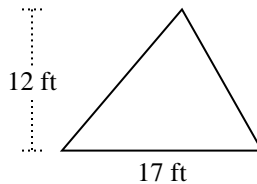


Encuentra el área de cada triángulo. Las unidades no están a escala.

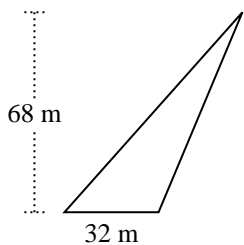
1)



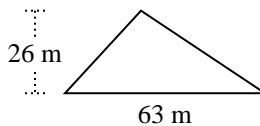
2)



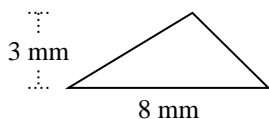
3)



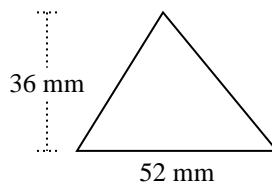
4)



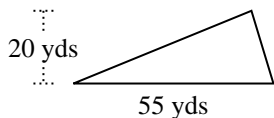
5)



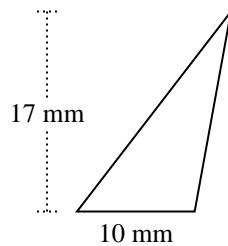
6)



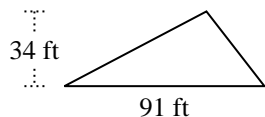
7)



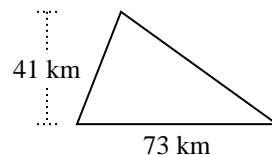
8)



9)



10)



Respuestas

1. 90 m²
2. 102 ft²
3. 1,088 m²
4. 819 m²
5. 12 mm²
6. 936 mm²
7. 550 yds²
8. 85 mm²
9. 1,547 ft²
10. 1,496.5 km²



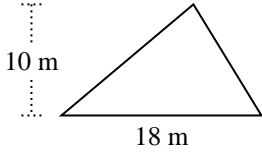
Encuentra el área de cada triángulo. Las unidades no están a escala.

12	1,547	550	936
819	102	85	90
1,496.5	1,088		

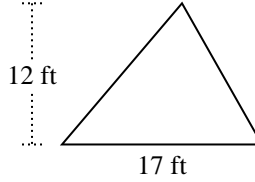
Respuestas

1. _____
2. _____
3. _____
4. _____
5. _____
6. _____
7. _____
8. _____
9. _____
10. _____

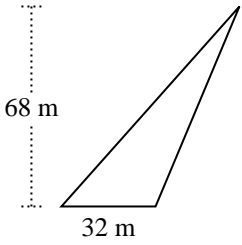
1)



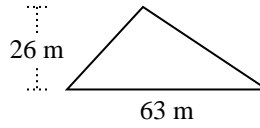
2)



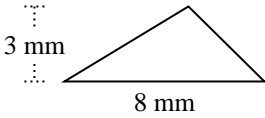
3)



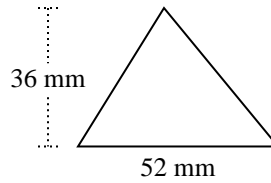
4)



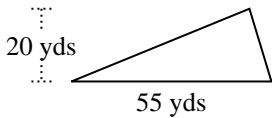
5)



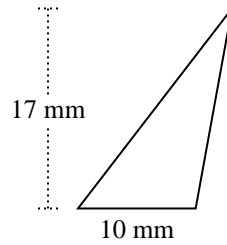
6)



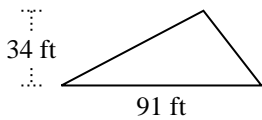
7)



8)



9)



10)

