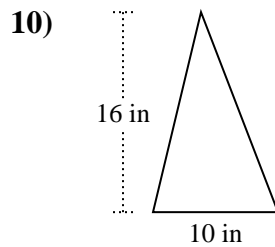
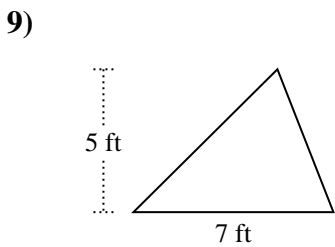
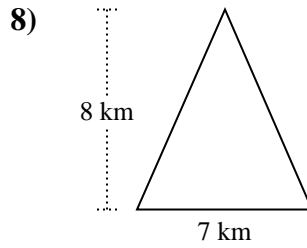
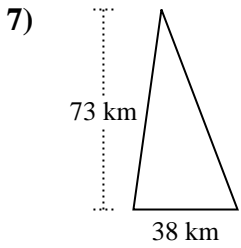
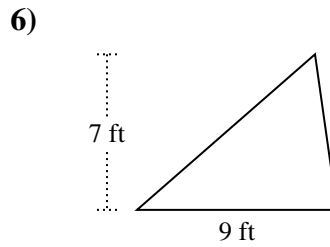
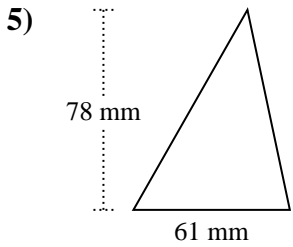
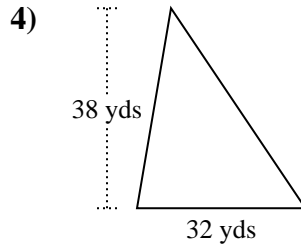
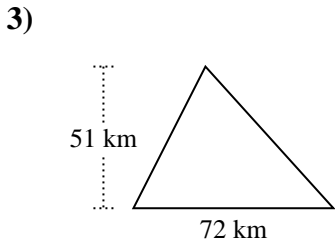
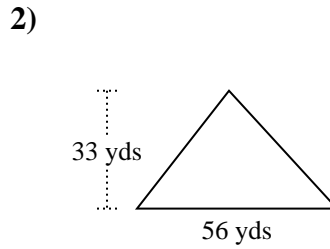
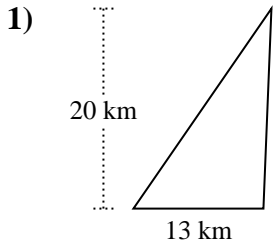




Encuentra el área de cada triángulo. Las unidades no están a escala.

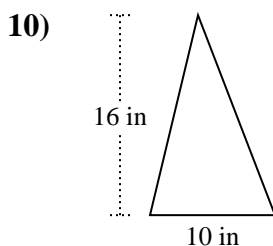
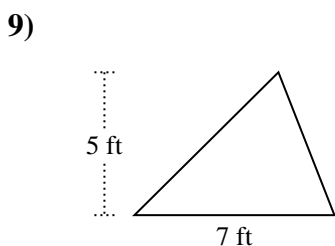
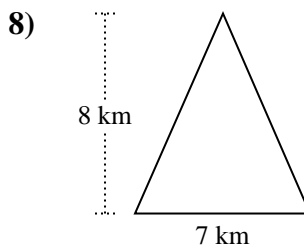
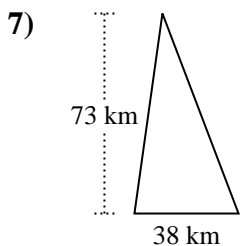
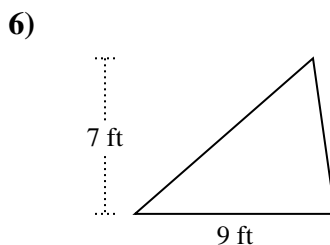
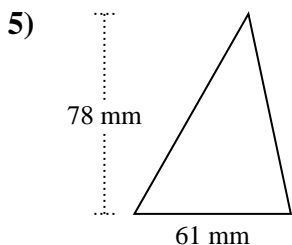
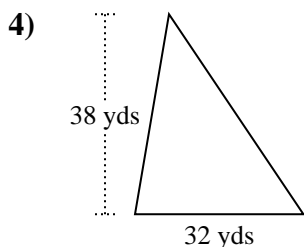
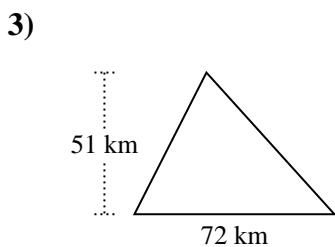
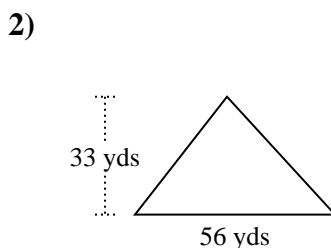
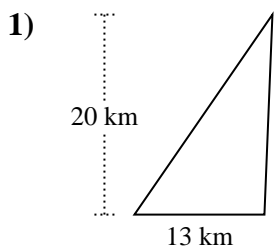


**Respuestas**

1. \_\_\_\_\_
2. \_\_\_\_\_
3. \_\_\_\_\_
4. \_\_\_\_\_
5. \_\_\_\_\_
6. \_\_\_\_\_
7. \_\_\_\_\_
8. \_\_\_\_\_
9. \_\_\_\_\_
10. \_\_\_\_\_



Encuentra el área de cada triángulo. Las unidades no están a escala.



**Respuestas**

1. 130 km<sup>2</sup>

2. 924 yds<sup>2</sup>

3. 1,836 km<sup>2</sup>

4. 608 yds<sup>2</sup>

5. 2,379 mm<sup>2</sup>

6. 31.5 ft<sup>2</sup>

7. 1,387 km<sup>2</sup>

8. 28 km<sup>2</sup>

9. 17.5 ft<sup>2</sup>

10. 80 in<sup>2</sup>



Encuentra el área de cada triángulo. Las unidades no están a escala.

2,379	31.5	17.5	28
130	924	80	1,387
1,836	608		

**Respuestas**

1. \_\_\_\_\_
2. \_\_\_\_\_
3. \_\_\_\_\_
4. \_\_\_\_\_
5. \_\_\_\_\_
6. \_\_\_\_\_
7. \_\_\_\_\_
8. \_\_\_\_\_
9. \_\_\_\_\_
10. \_\_\_\_\_

