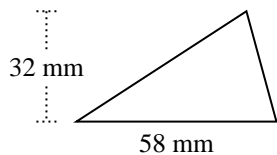


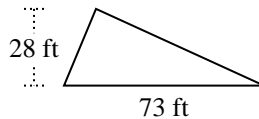


Encuentra el área de cada triángulo. Las unidades no están a escala.

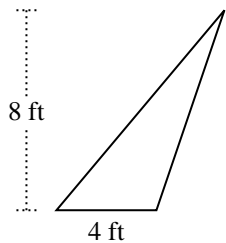
1)



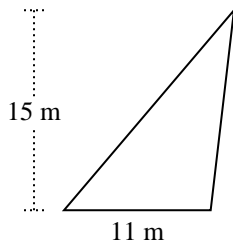
2)



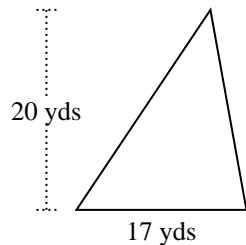
3)



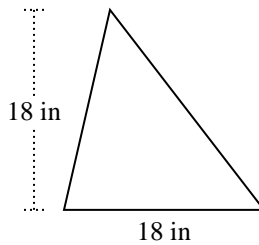
4)



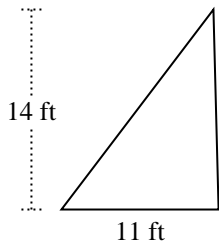
5)



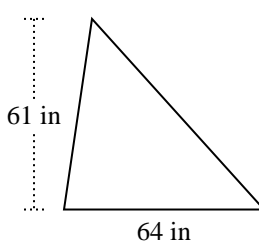
6)



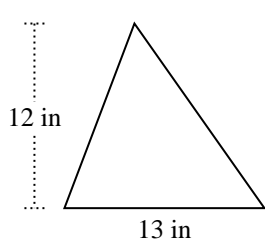
7)



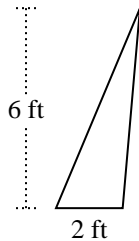
8)



9)



10)



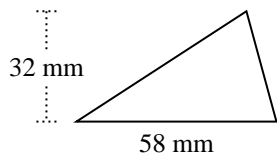
Respuestas

1. _____
2. _____
3. _____
4. _____
5. _____
6. _____
7. _____
8. _____
9. _____
10. _____

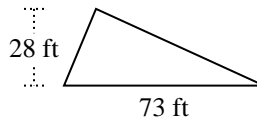


Encuentra el área de cada triángulo. Las unidades no están a escala.

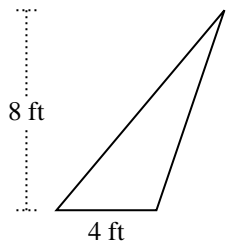
1)



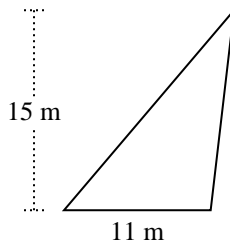
2)



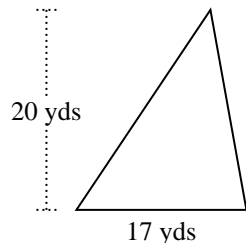
3)



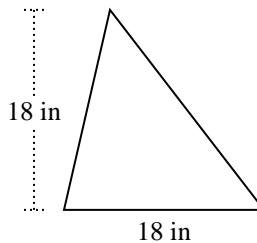
4)



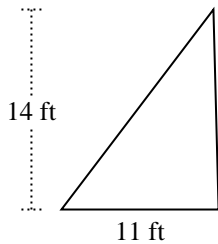
5)



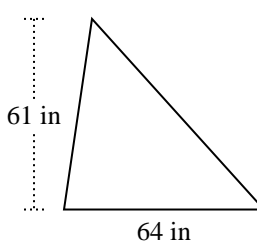
6)



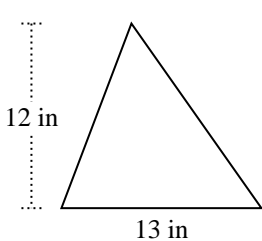
7)



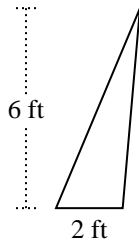
8)



9)



10)



Respuestas

1. 928 mm²

2. 1,022 ft²

3. 16 ft²

4. 82.5 m²

5. 170 yds²

6. 162 in²

7. 77 ft²

8. 1,952 in²

9. 78 in²

10. 6 ft²



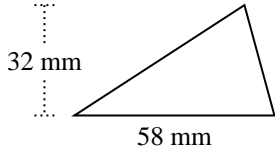
Encuentra el área de cada triángulo. Las unidades no están a escala.

Respuestas

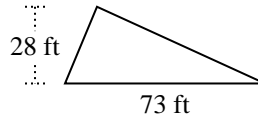
| | | | |
|-------|-----|-----|------|
| 16 | 162 | 78 | 77 |
| 1,952 | 170 | 928 | 82.5 |
| 1,022 | 6 | | |

1. _____
2. _____
3. _____
4. _____
5. _____
6. _____
7. _____
8. _____
9. _____
10. _____

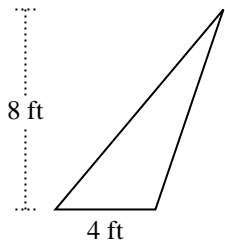
1)



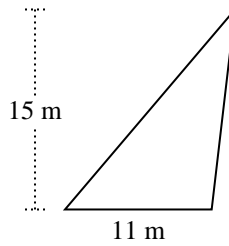
2)



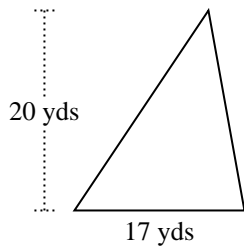
3)



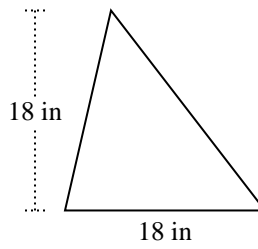
4)



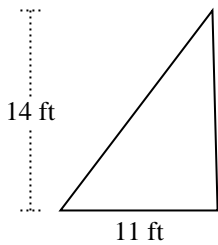
5)



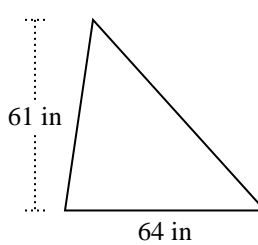
6)



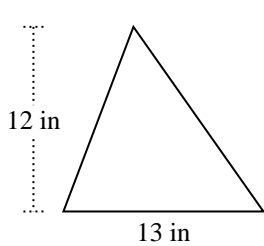
7)



8)



9)



10)

