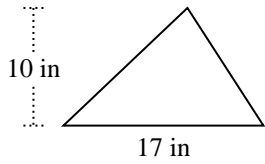


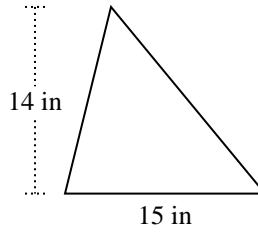


Encuentra el área de cada triángulo. Las unidades no están a escala.

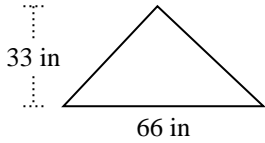
1)



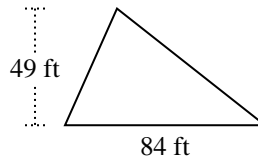
2)



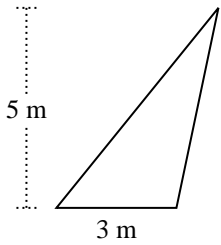
3)



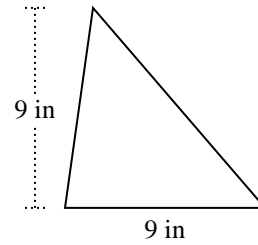
4)



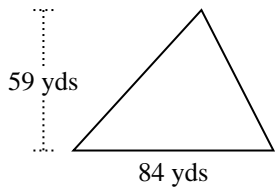
5)



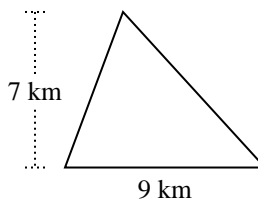
6)



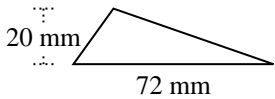
7)



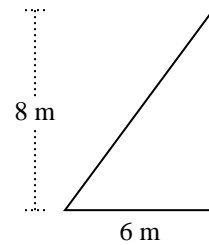
8)



9)



10)



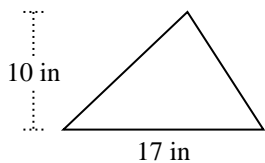
Respuestas

1. _____
2. _____
3. _____
4. _____
5. _____
6. _____
7. _____
8. _____
9. _____
10. _____

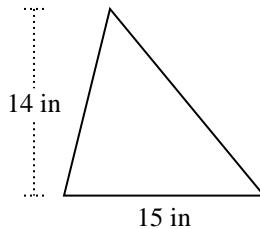


Encuentra el área de cada triángulo. Las unidades no están a escala.

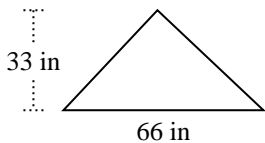
1)



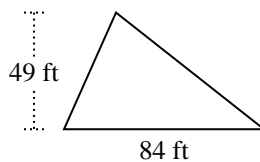
2)



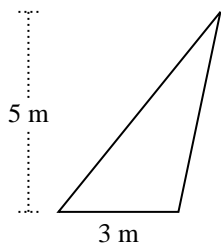
3)



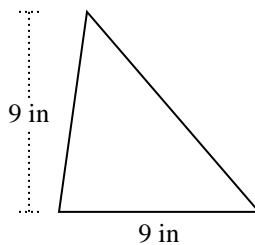
4)



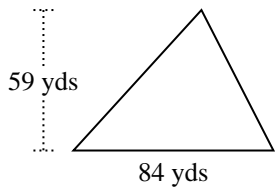
5)



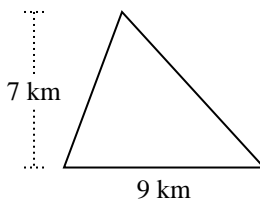
6)



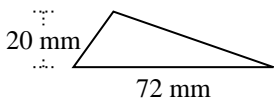
7)



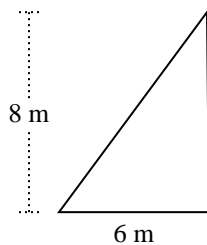
8)



9)



10)



Respuestas

1. 85 in²

2. 105 in²

3. 1,089 in²

4. 2,058 ft²

5. 7.5 m²

6. 40.5 in²

7. 2,478 yds²

8. 31.5 km²

9. 720 mm²

10. 24 m²



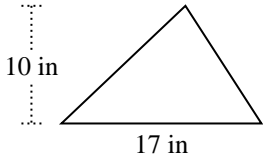
Encuentra el área de cada triángulo. Las unidades no están a escala.

Respuestas

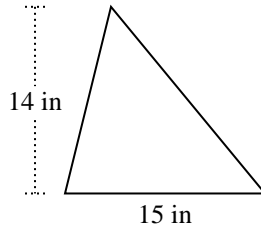
7.5	2,478	31.5	2,058
1,089	24	40.5	720
105	85		

1. _____
2. _____
3. _____
4. _____
5. _____
6. _____
7. _____
8. _____
9. _____
10. _____

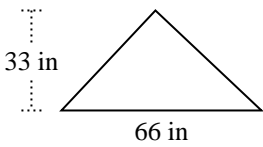
1)



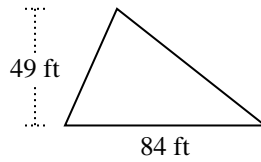
2)



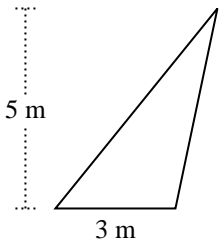
3)



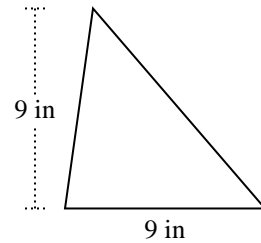
4)



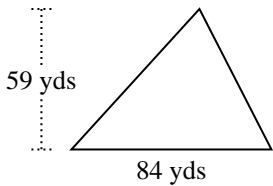
5)



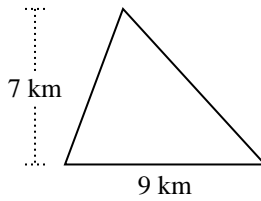
6)



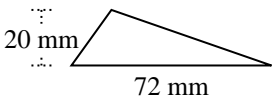
7)



8)



9)



10)

