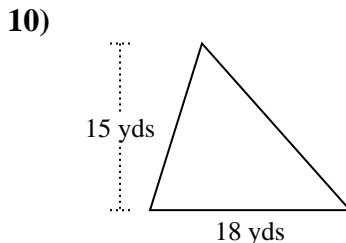
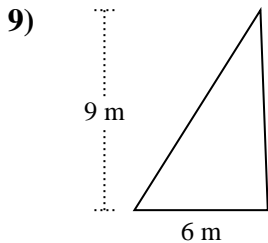
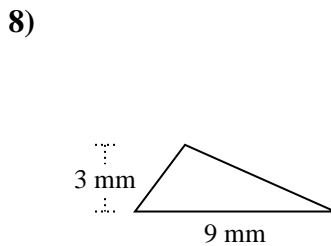
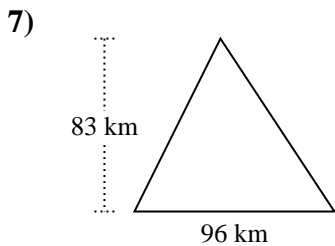
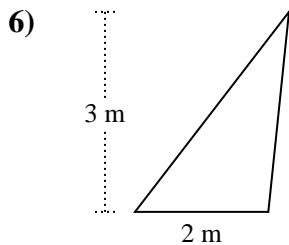
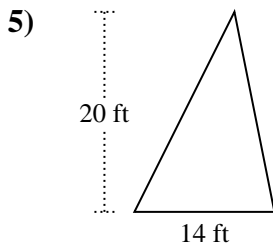
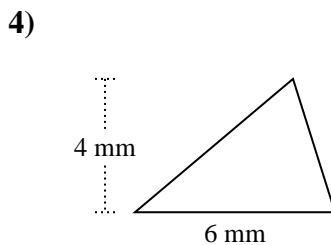
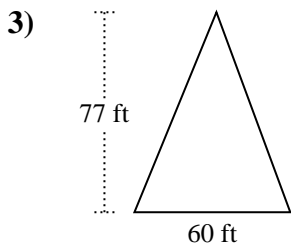
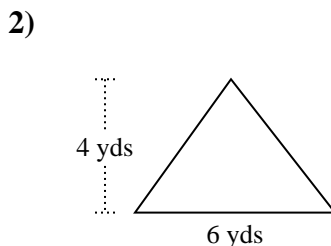
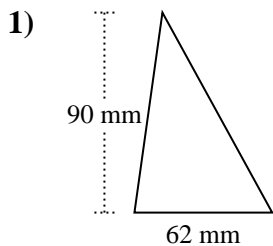




Encuentra el área de cada triángulo. Las unidades no están a escala.

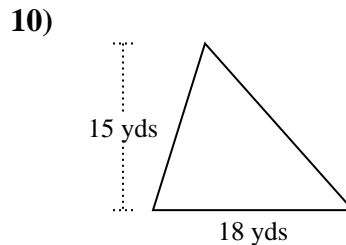
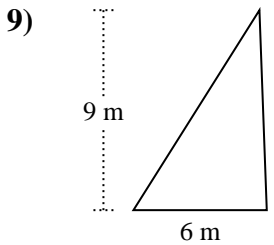
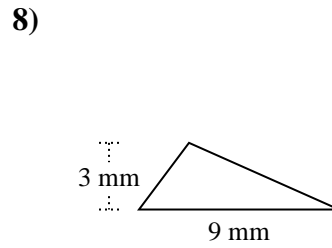
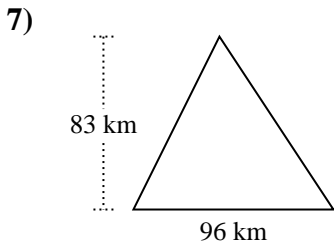
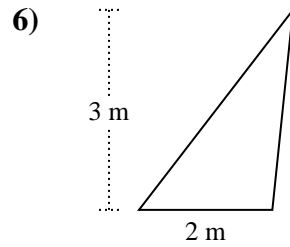
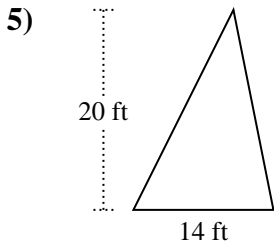
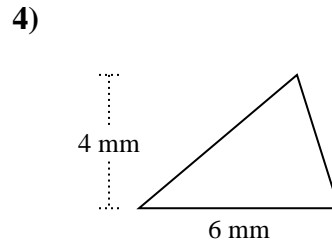
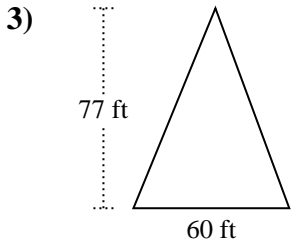
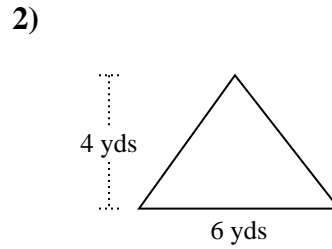
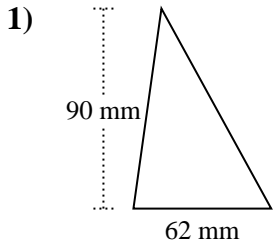


Respuestas

1. _____
2. _____
3. _____
4. _____
5. _____
6. _____
7. _____
8. _____
9. _____
10. _____



Encuentra el área de cada triángulo. Las unidades no están a escala.



Respuestas

1. 2,790 mm²
2. 12 yds²
3. 2,310 ft²
4. 12 mm²
5. 140 ft²
6. 3 m²
7. 3,984 km²
8. 13.5 mm²
9. 27 m²
10. 135 yds²



Encuentra el área de cada triángulo. Las unidades no están a escala.

Respuestas

3	140	2,790	13.5
12	12	135	3,984
27	2,310		

1. _____
2. _____
3. _____
4. _____
5. _____
6. _____
7. _____
8. _____
9. _____
10. _____

