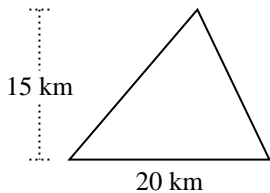


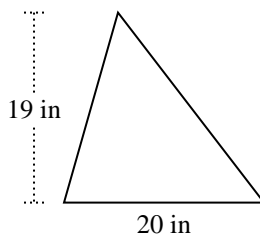


Encuentra el área de cada triángulo. Las unidades no están a escala.

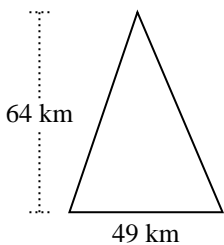
1)



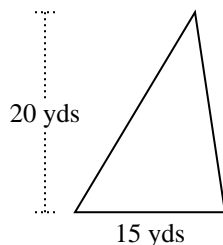
2)



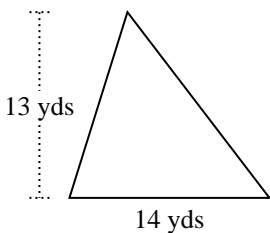
3)



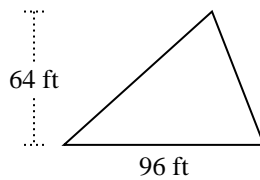
4)



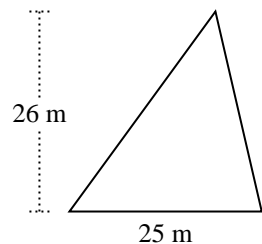
5)



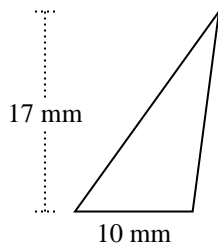
6)



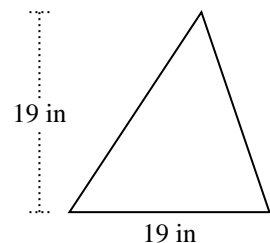
7)



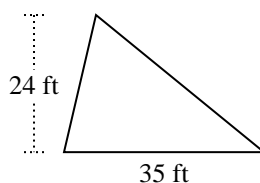
8)



9)



10)



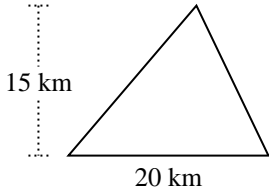
**Respuestas**

1. \_\_\_\_\_
2. \_\_\_\_\_
3. \_\_\_\_\_
4. \_\_\_\_\_
5. \_\_\_\_\_
6. \_\_\_\_\_
7. \_\_\_\_\_
8. \_\_\_\_\_
9. \_\_\_\_\_
10. \_\_\_\_\_

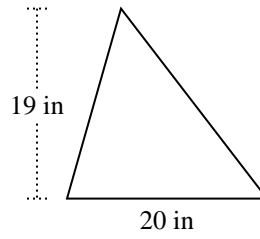


Encuentra el área de cada triángulo. Las unidades no están a escala.

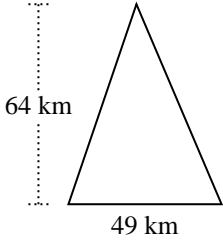
1)



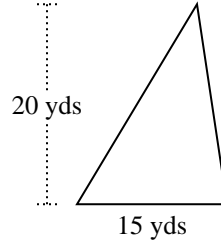
2)



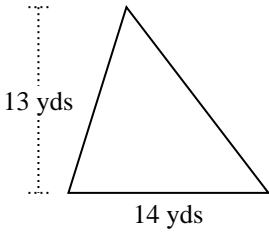
3)



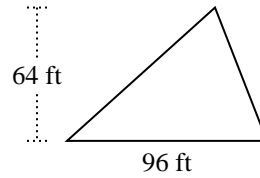
4)



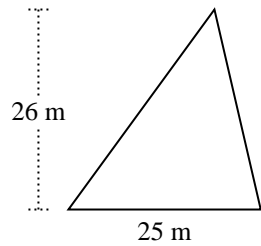
5)



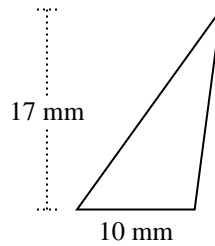
6)



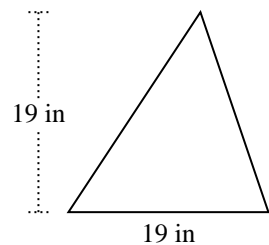
7)



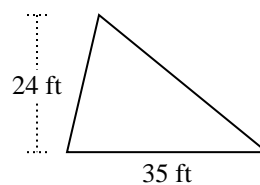
8)



9)



10)



**Respuestas**

1. 150 km<sup>2</sup>

2. 190 in<sup>2</sup>

3. 1,568 km<sup>2</sup>

4. 150 yds<sup>2</sup>

5. 91 yds<sup>2</sup>

6. 3,072 ft<sup>2</sup>

7. 325 m<sup>2</sup>

8. 85 mm<sup>2</sup>

9. 180.5 in<sup>2</sup>

10. 420 ft<sup>2</sup>



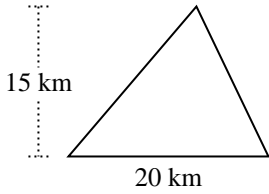
Encuentra el área de cada triángulo. Las unidades no están a escala.

1,568	150	3,072	91
180.5	190	420	325
150	85		

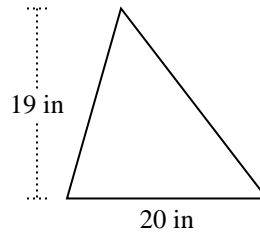
**Respuestas**

1. \_\_\_\_\_
2. \_\_\_\_\_
3. \_\_\_\_\_
4. \_\_\_\_\_
5. \_\_\_\_\_
6. \_\_\_\_\_
7. \_\_\_\_\_
8. \_\_\_\_\_
9. \_\_\_\_\_
10. \_\_\_\_\_

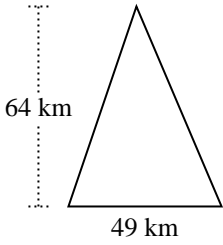
1)



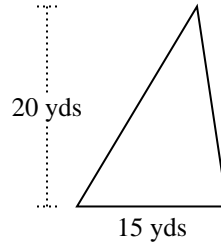
2)



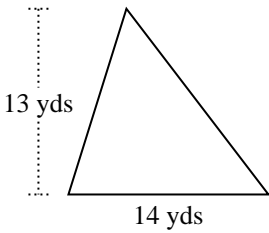
3)



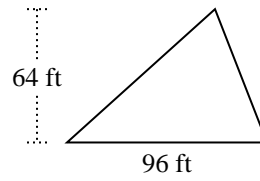
4)



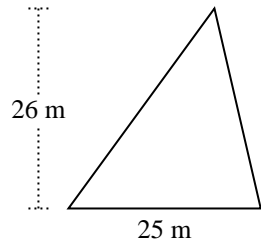
5)



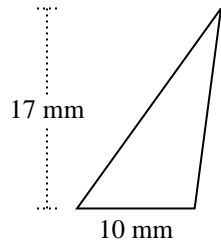
6)



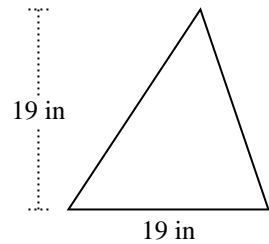
7)



8)



9)



10)

