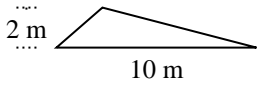


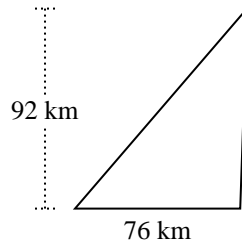


Encuentra el área de cada triángulo. Las unidades no están a escala.

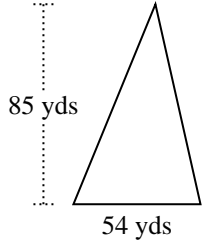
1)



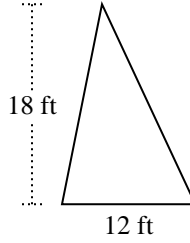
2)



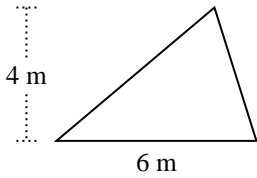
3)



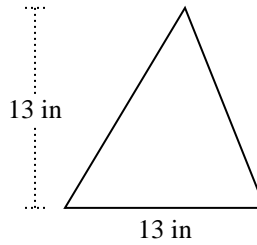
4)



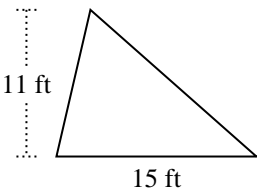
5)



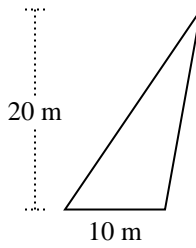
6)



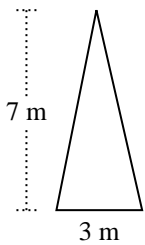
7)



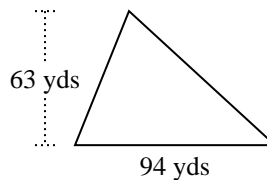
8)



9)



10)



**Respuestas**

1. \_\_\_\_\_

2. \_\_\_\_\_

3. \_\_\_\_\_

4. \_\_\_\_\_

5. \_\_\_\_\_

6. \_\_\_\_\_

7. \_\_\_\_\_

8. \_\_\_\_\_

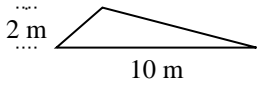
9. \_\_\_\_\_

10. \_\_\_\_\_

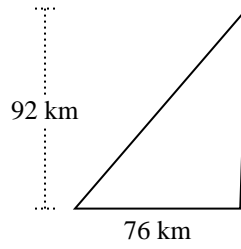


Encuentra el área de cada triángulo. Las unidades no están a escala.

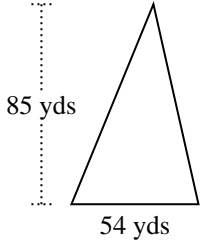
1)



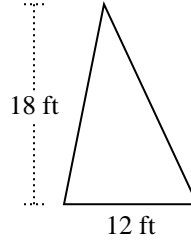
2)



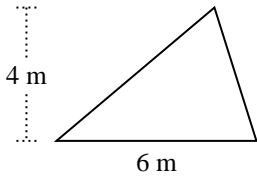
3)



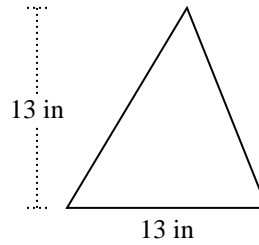
4)



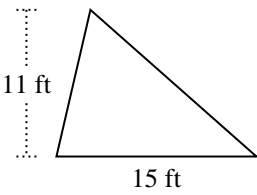
5)



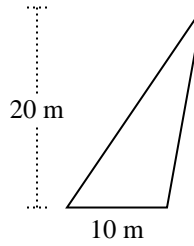
6)



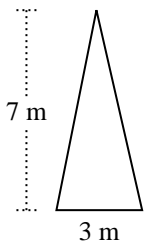
7)



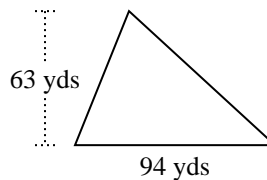
8)



9)



10)



**Respuestas**

1. 10 m<sup>2</sup>

2. 3,496 km<sup>2</sup>

3. 2,295 yds<sup>2</sup>

4. 108 ft<sup>2</sup>

5. 12 m<sup>2</sup>

6. 84.5 in<sup>2</sup>

7. 82.5 ft<sup>2</sup>

8. 100 m<sup>2</sup>

9. 10.5 m<sup>2</sup>

10. 2,961 yds<sup>2</sup>



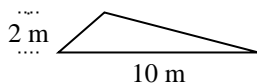
Encuentra el área de cada triángulo. Las unidades no están a escala.

**Respuestas**

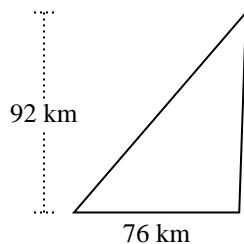
12	82.5	108	84.5
10	2,295	3,496	2,961
100	10.5		

1. \_\_\_\_\_
2. \_\_\_\_\_
3. \_\_\_\_\_
4. \_\_\_\_\_
5. \_\_\_\_\_
6. \_\_\_\_\_
7. \_\_\_\_\_
8. \_\_\_\_\_
9. \_\_\_\_\_
10. \_\_\_\_\_

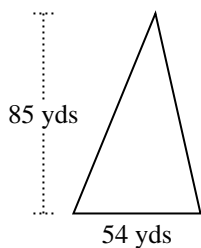
1)



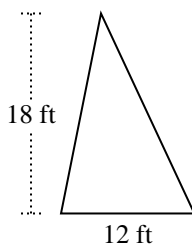
2)



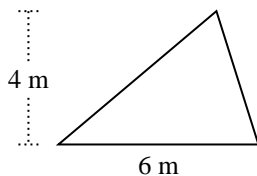
3)



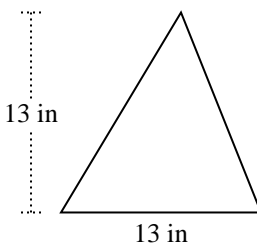
4)



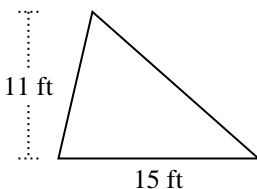
5)



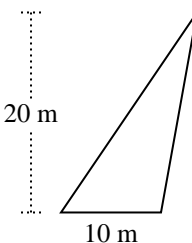
6)



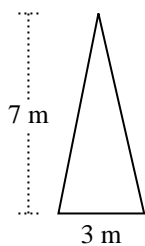
7)



8)



9)



10)

