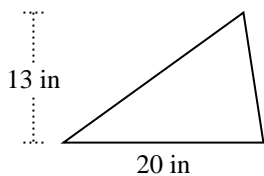


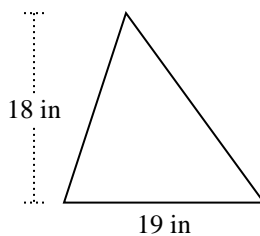


Encuentra el área de cada triángulo. Las unidades no están a escala.

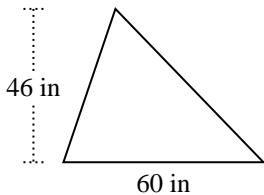
1)



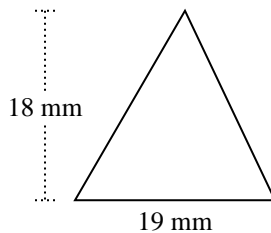
2)



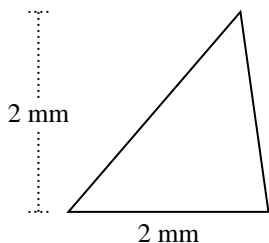
3)



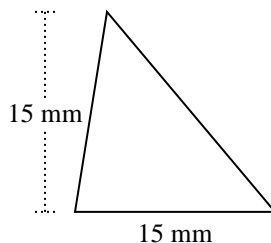
4)



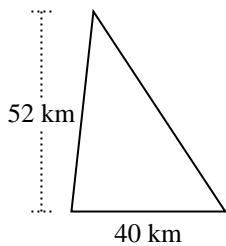
5)



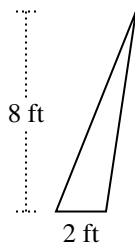
6)



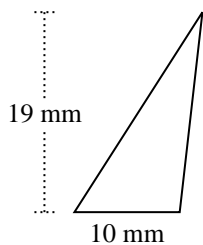
7)



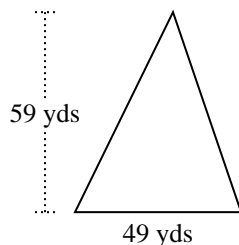
8)



9)



10)



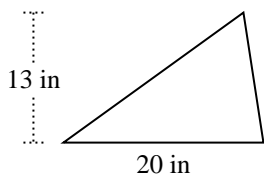
**Respuestas**

- 1. \_\_\_\_\_
- 2. \_\_\_\_\_
- 3. \_\_\_\_\_
- 4. \_\_\_\_\_
- 5. \_\_\_\_\_
- 6. \_\_\_\_\_
- 7. \_\_\_\_\_
- 8. \_\_\_\_\_
- 9. \_\_\_\_\_
- 10. \_\_\_\_\_

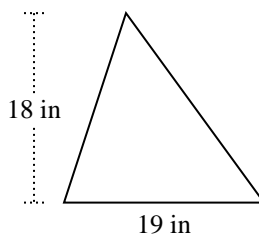


Encuentra el área de cada triángulo. Las unidades no están a escala.

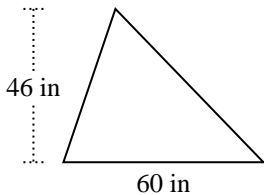
1)



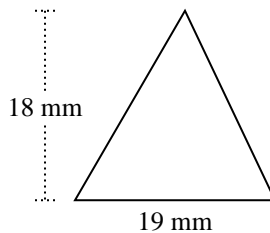
2)



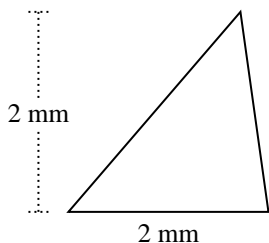
3)



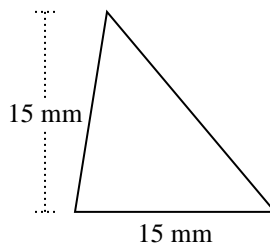
4)



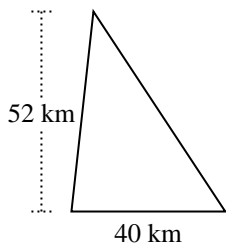
5)



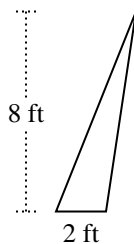
6)



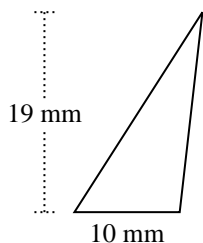
7)



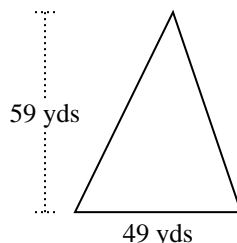
8)



9)



10)



**Respuestas**

1. 130 in<sup>2</sup>

2. 171 in<sup>2</sup>

3. 1,380 in<sup>2</sup>

4. 171 mm<sup>2</sup>

5. 2 mm<sup>2</sup>

6. 112.5 mm<sup>2</sup>

7. 1,040 km<sup>2</sup>

8. 8 ft<sup>2</sup>

9. 95 mm<sup>2</sup>

10. 1,445.5 yds<sup>2</sup>



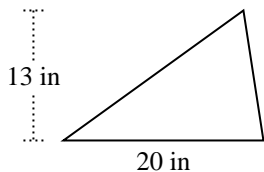
Encuentra el área de cada triángulo. Las unidades no están a escala.

130	1,445.5	1,040	1,380
171	2	171	95
8	112.5		

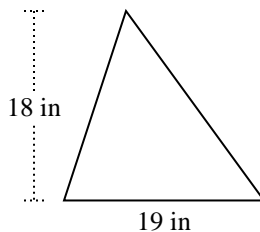
**Respuestas**

1. \_\_\_\_\_
2. \_\_\_\_\_
3. \_\_\_\_\_
4. \_\_\_\_\_
5. \_\_\_\_\_
6. \_\_\_\_\_
7. \_\_\_\_\_
8. \_\_\_\_\_
9. \_\_\_\_\_
10. \_\_\_\_\_

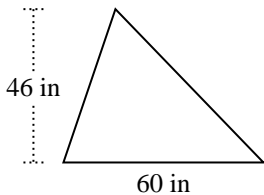
1)



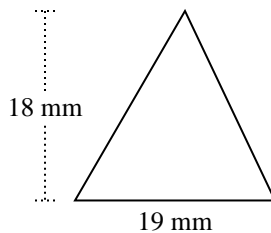
2)



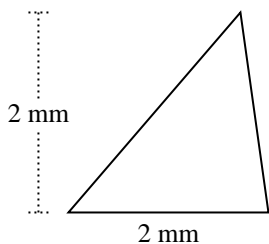
3)



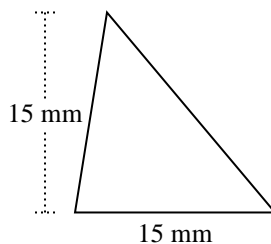
4)



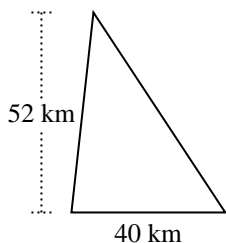
5)



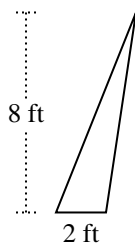
6)



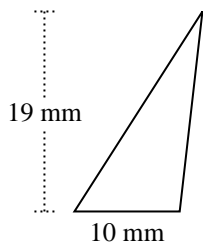
7)



8)



9)



10)

