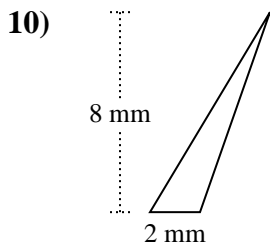
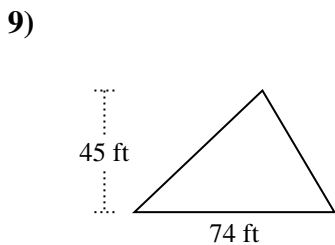
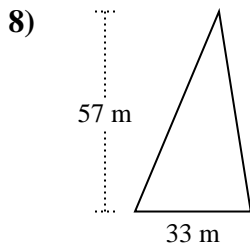
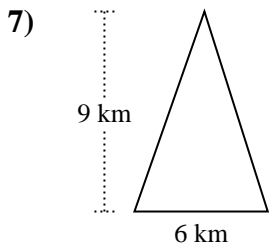
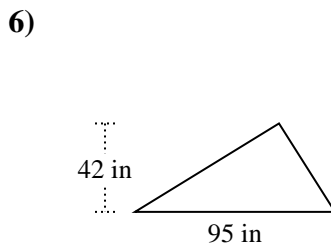
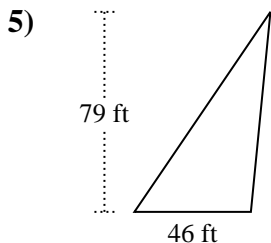
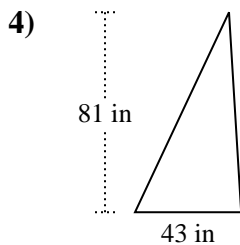
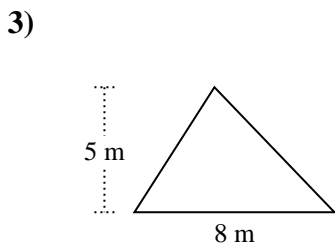
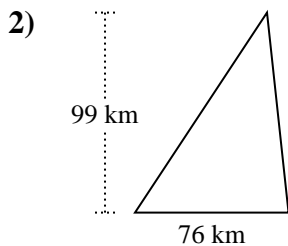
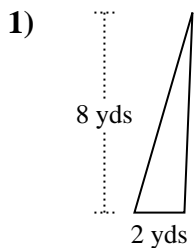




Encuentra el área de cada triángulo. Las unidades no están a escala.

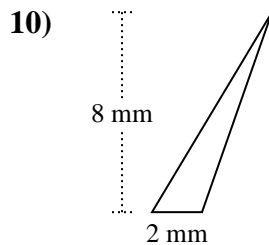
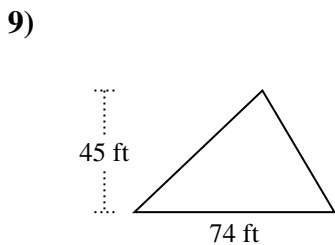
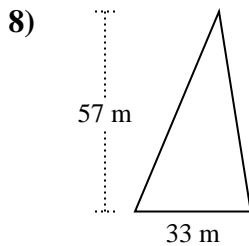
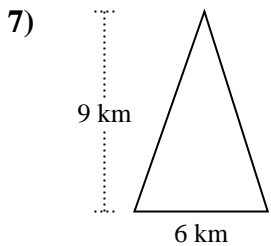
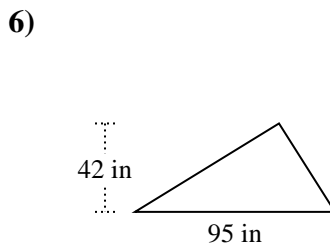
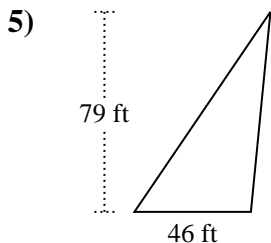
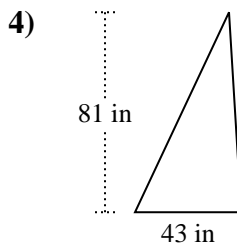
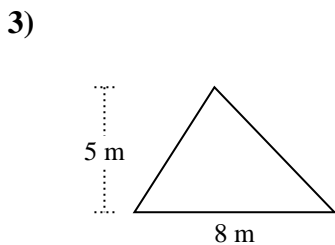
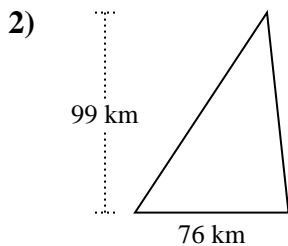
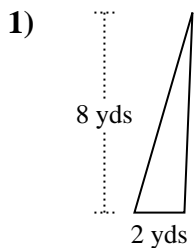


Respuestas

1. _____
2. _____
3. _____
4. _____
5. _____
6. _____
7. _____
8. _____
9. _____
10. _____



Encuentra el área de cada triángulo. Las unidades no están a escala.



Respuestas

1. 8 yds²

2. 3,762 km²

3. 20 m²

4. 1,741.5 in²

5. 1,817 ft²

6. 1,995 in²

7. 27 km²

8. 940.5 m²

9. 1,665 ft²

10. 8 mm²



Encuentra el área de cada triángulo. Las unidades no están a escala.

1,665	27	1,817	8
8	1,995	20	1,741.5
3,762	940.5		

Respuestas

1. _____
2. _____
3. _____
4. _____
5. _____
6. _____
7. _____
8. _____
9. _____
10. _____

