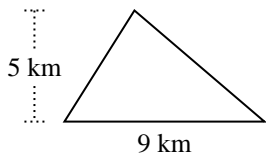


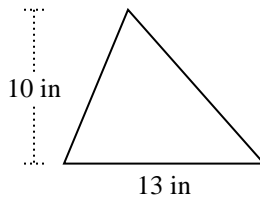


Encuentra el área de cada triángulo. Las unidades no están a escala.

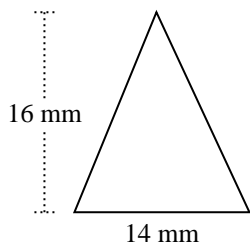
1)



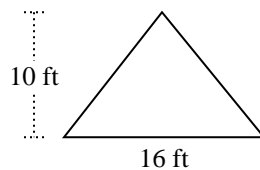
2)



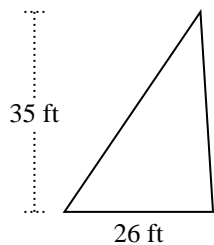
3)



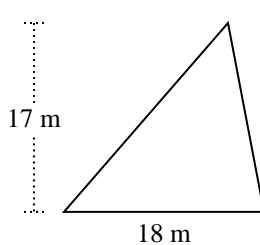
4)



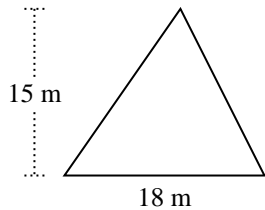
5)



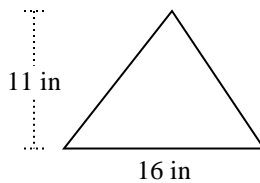
6)



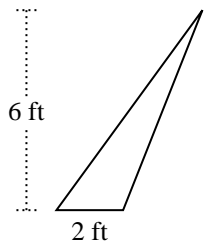
7)



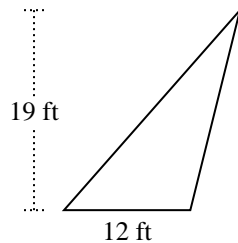
8)



9)



10)



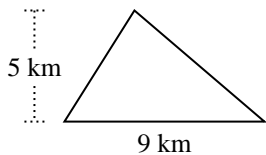
Respuestas

1. _____
2. _____
3. _____
4. _____
5. _____
6. _____
7. _____
8. _____
9. _____
10. _____

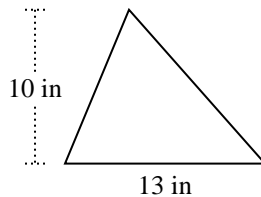


Encuentra el área de cada triángulo. Las unidades no están a escala.

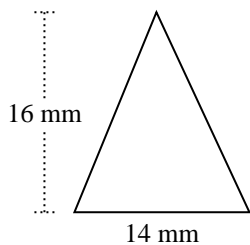
1)



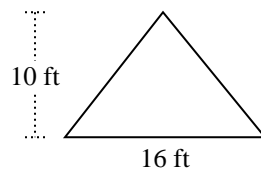
2)



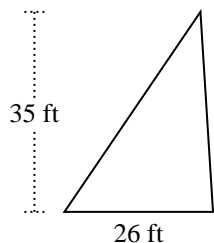
3)



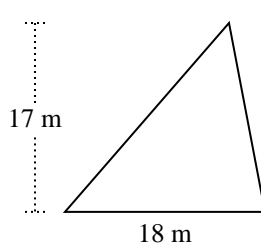
4)



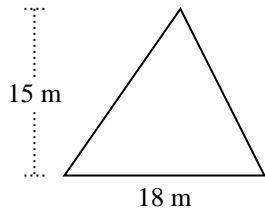
5)



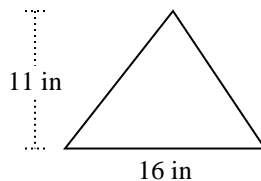
6)



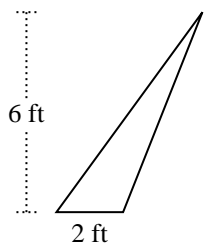
7)



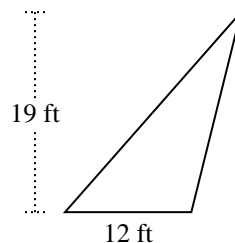
8)



9)



10)



Respuestas

1. 22.5 km²

2. 65 in²

3. 112 mm²

4. 80 ft²

5. 455 ft²

6. 153 m²

7. 135 m²

8. 88 in²

9. 6 ft²

10. 114 ft²



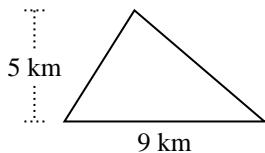
Encuentra el área de cada triángulo. Las unidades no están a escala.

114	153	22.5	455
65	6	80	88
135	112		

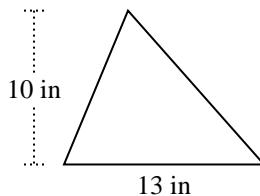
Respuestas

1. _____
2. _____
3. _____
4. _____
5. _____
6. _____
7. _____
8. _____
9. _____
10. _____

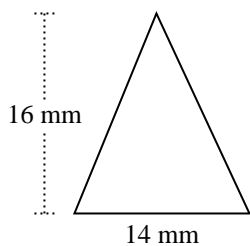
1)



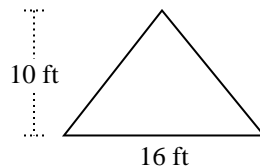
2)



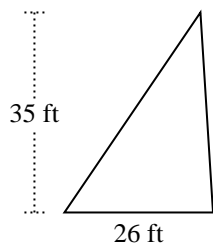
3)



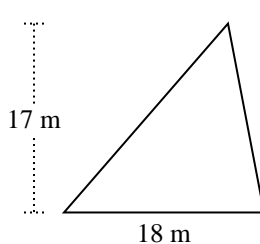
4)



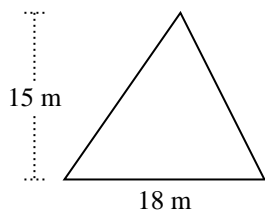
5)



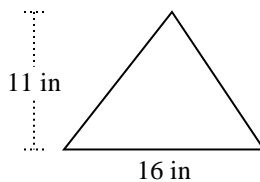
6)



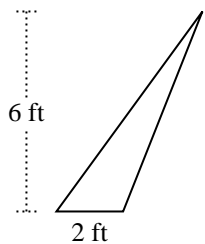
7)



8)



9)



10)

