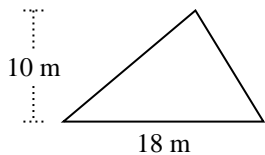


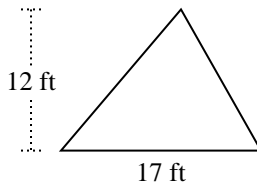


Encuentra el área de cada triángulo. Las unidades no están a escala.

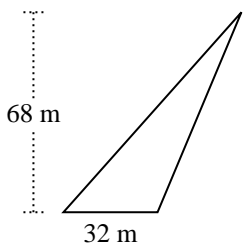
1)



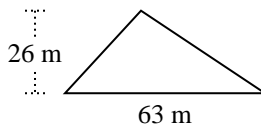
2)



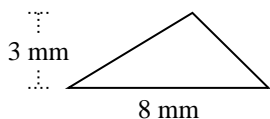
3)



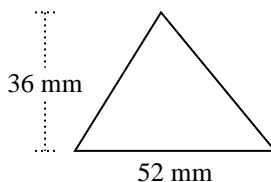
4)



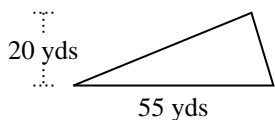
5)



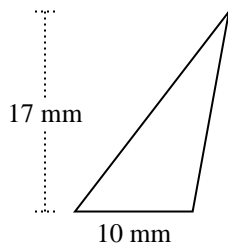
6)



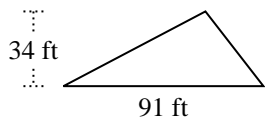
7)



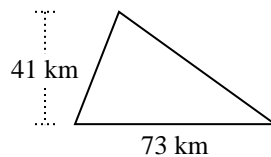
8)



9)



10)



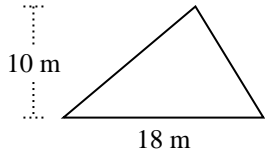
Respuestas

- 1. _____
- 2. _____
- 3. _____
- 4. _____
- 5. _____
- 6. _____
- 7. _____
- 8. _____
- 9. _____
- 10. _____

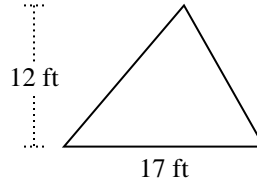


Encuentra el área de cada triángulo. Las unidades no están a escala.

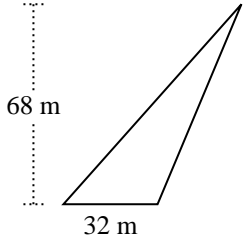
1)



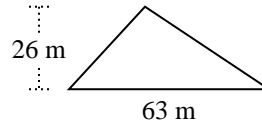
2)



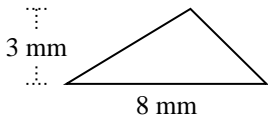
3)



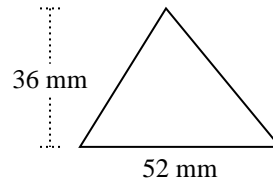
4)



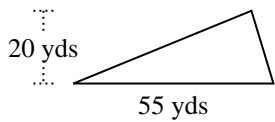
5)



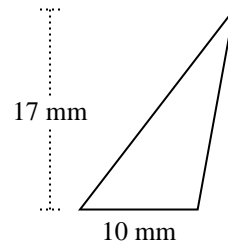
6)



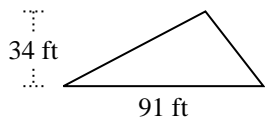
7)



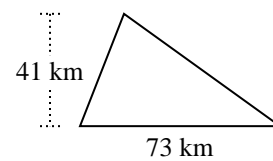
8)



9)



10)



Respuestas

1. 90 m²

2. 102 ft²

3. 1,088 m²

4. 819 m²

5. 12 mm²

6. 936 mm²

7. 550 yds²

8. 85 mm²

9. 1,547 ft²

10. 1,496.5 km²



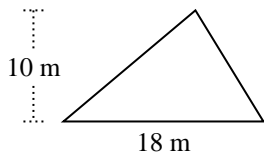
Encuentra el área de cada triángulo. Las unidades no están a escala.

12	1,547	550	936
819	102	85	90
1,496.5	1,088		

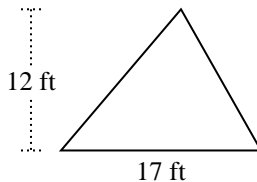
Respuestas

1. _____
2. _____
3. _____
4. _____
5. _____
6. _____
7. _____
8. _____
9. _____
10. _____

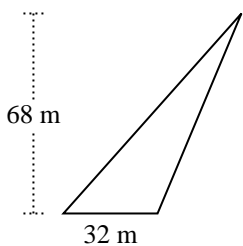
1)



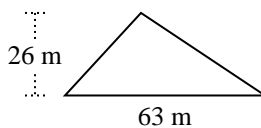
2)



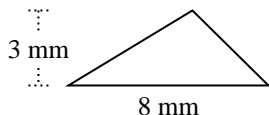
3)



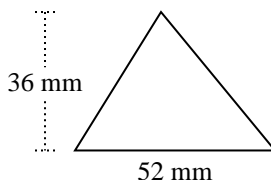
4)



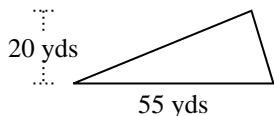
5)



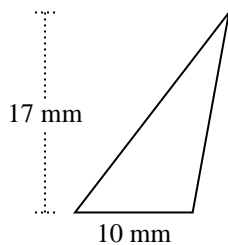
6)



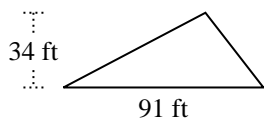
7)



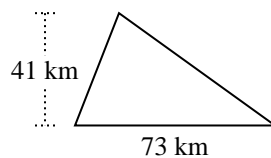
8)



9)



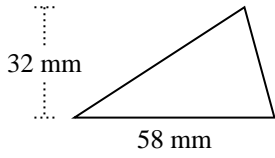
10)



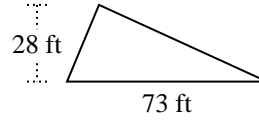


Encuentra el área de cada triángulo. Las unidades no están a escala.

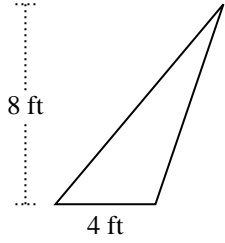
1)



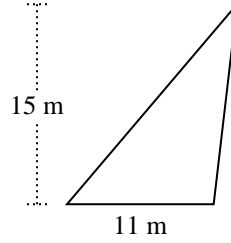
2)



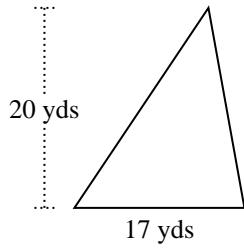
3)



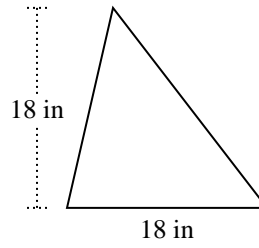
4)



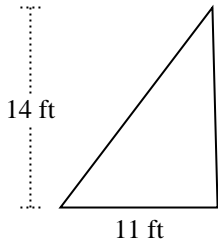
5)



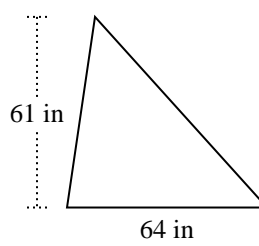
6)



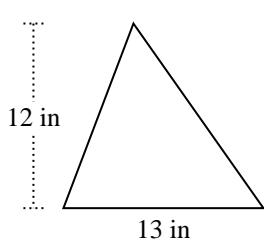
7)



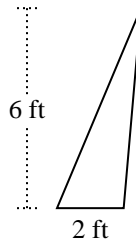
8)



9)



10)



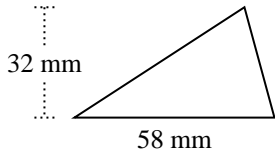
Respuestas

1. _____
2. _____
3. _____
4. _____
5. _____
6. _____
7. _____
8. _____
9. _____
10. _____

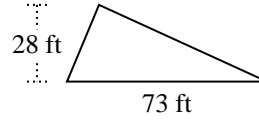


Encuentra el área de cada triángulo. Las unidades no están a escala.

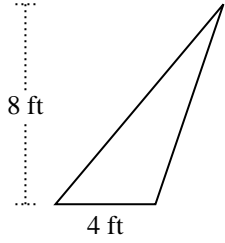
1)



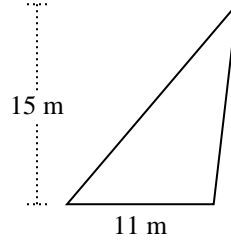
2)



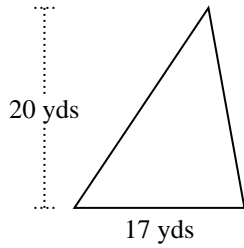
3)



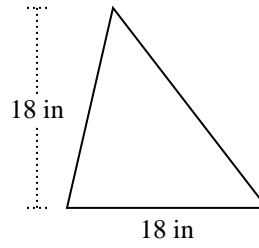
4)



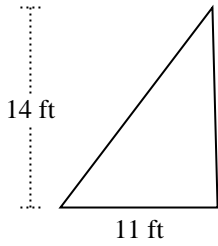
5)



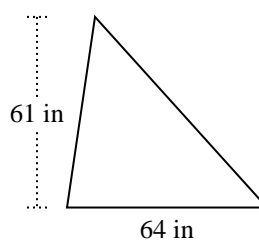
6)



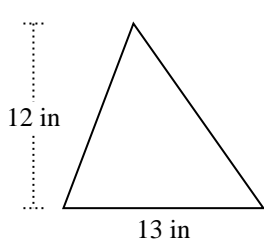
7)



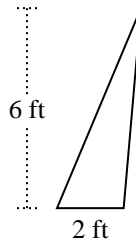
8)



9)



10)



Respuestas

1. 928 mm²
2. 1,022 ft²
3. 16 ft²
4. 82.5 m²
5. 170 yds²
6. 162 in²
7. 77 ft²
8. 1,952 in²
9. 78 in²
10. 6 ft²



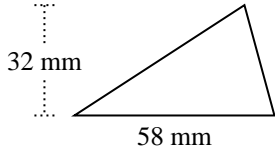
Encuentra el área de cada triángulo. Las unidades no están a escala.

Respuestas

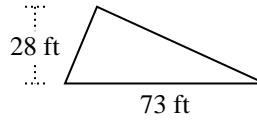
16	162	78	77
1,952	170	928	82.5
1,022	6		

1. _____
2. _____
3. _____
4. _____
5. _____
6. _____
7. _____
8. _____
9. _____
10. _____

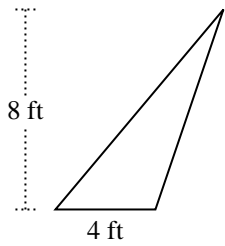
1)



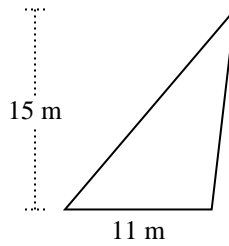
2)



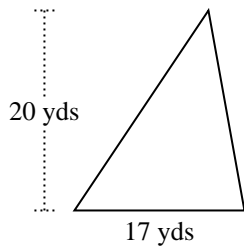
3)



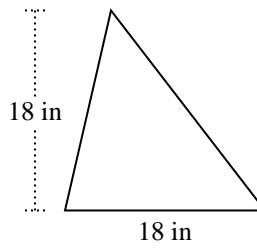
4)



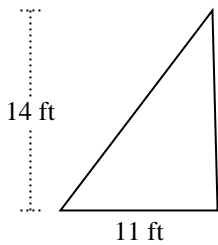
5)



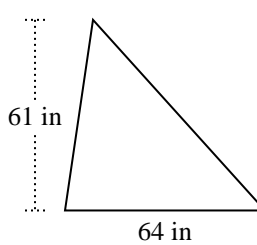
6)



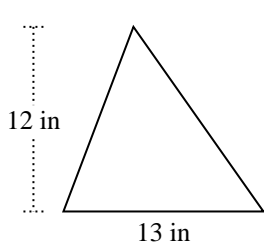
7)



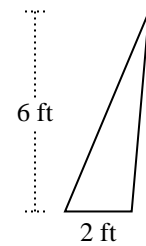
8)



9)



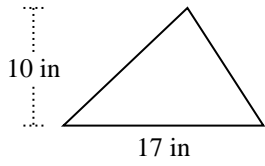
10)



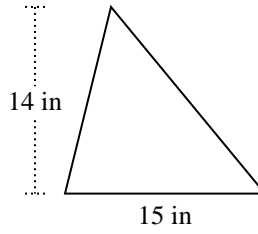


Encuentra el área de cada triángulo. Las unidades no están a escala.

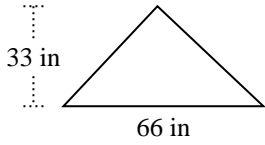
1)



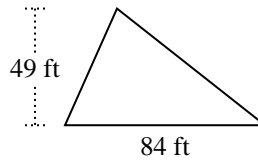
2)



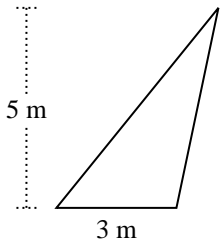
3)



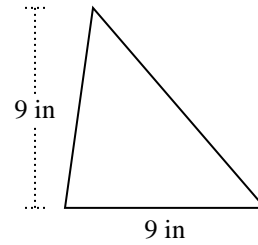
4)



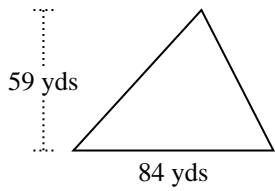
5)



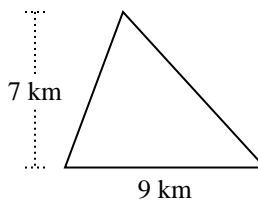
6)



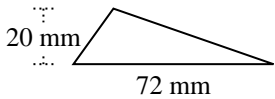
7)



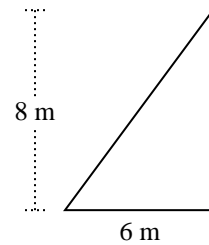
8)



9)



10)



Respuestas

1. _____

2. _____

3. _____

4. _____

5. _____

6. _____

7. _____

8. _____

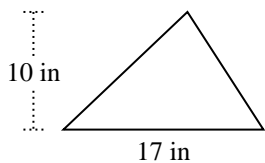
9. _____

10. _____

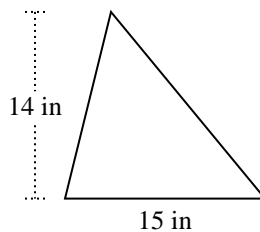


Encuentra el área de cada triángulo. Las unidades no están a escala.

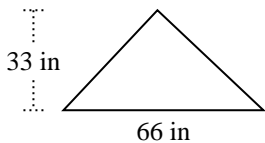
1)



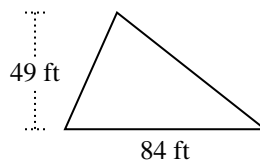
2)



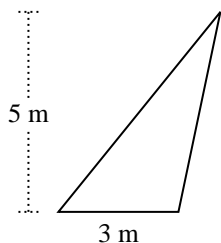
3)



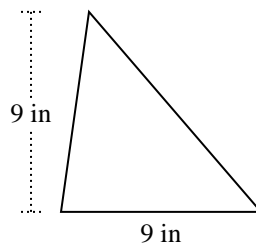
4)



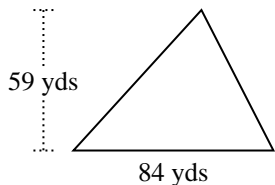
5)



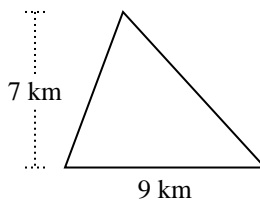
6)



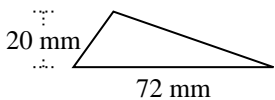
7)



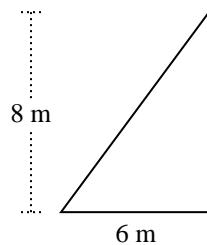
8)



9)



10)



Respuestas

1. 85 in²

2. 105 in²

3. 1,089 in²

4. 2,058 ft²

5. 7.5 m²

6. 40.5 in²

7. 2,478 yds²

8. 31.5 km²

9. 720 mm²

10. 24 m²



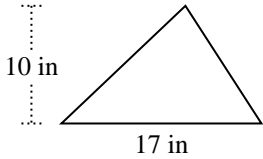
Encuentra el área de cada triángulo. Las unidades no están a escala.

Respuestas

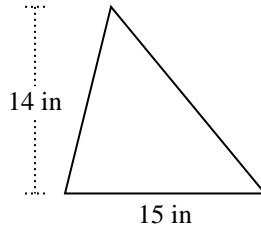
7.5	2,478	31.5	2,058
1,089	24	40.5	720
105	85		

1. _____
2. _____
3. _____
4. _____
5. _____
6. _____
7. _____
8. _____
9. _____
10. _____

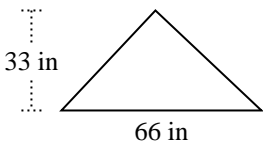
1)



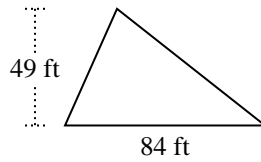
2)



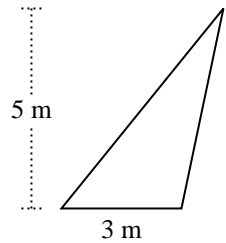
3)



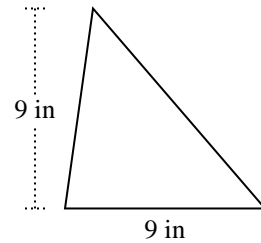
4)



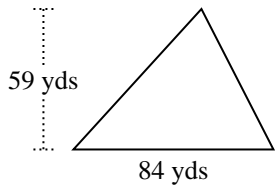
5)



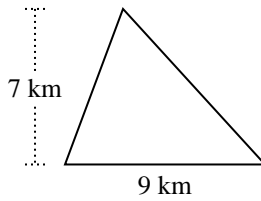
6)



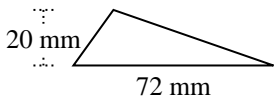
7)



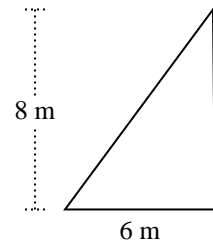
8)



9)

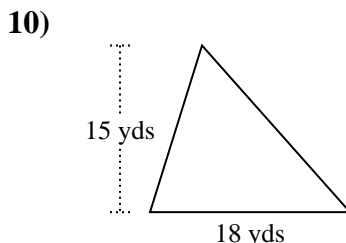
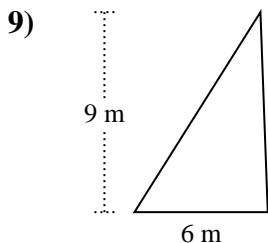
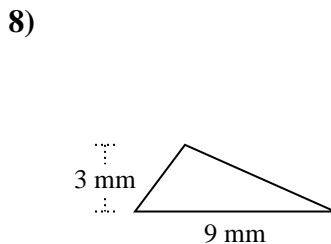
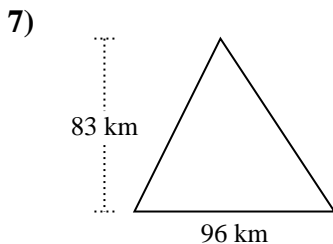
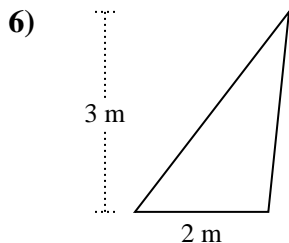
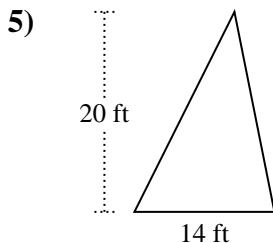
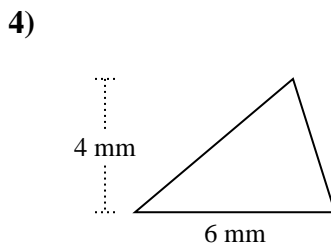
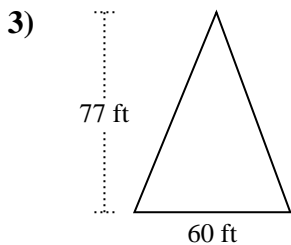
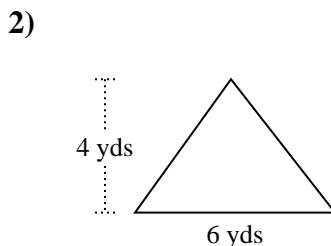
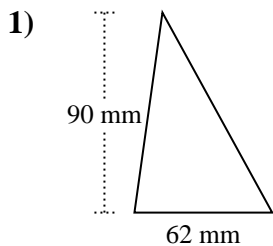


10)





Encuentra el área de cada triángulo. Las unidades no están a escala.

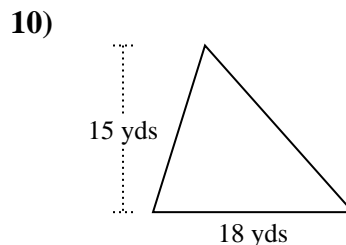
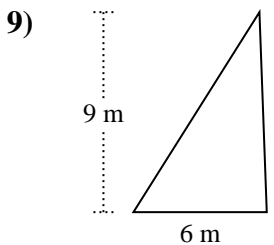
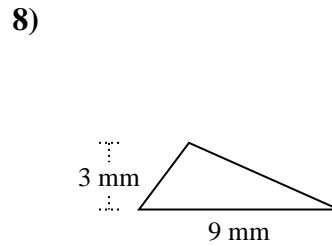
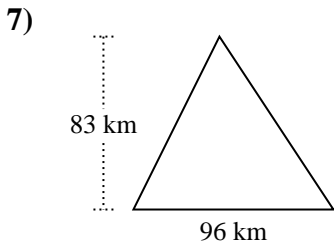
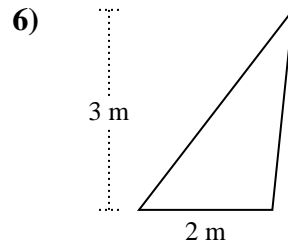
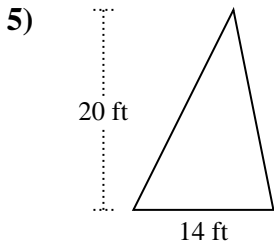
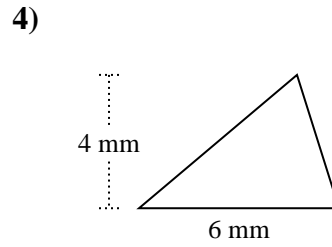
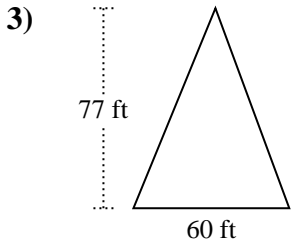
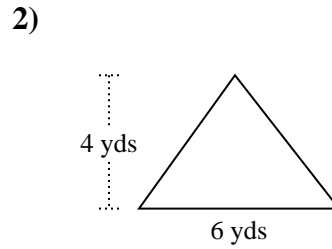
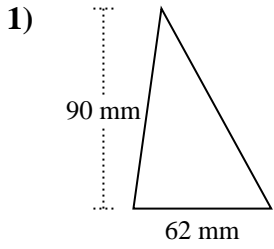


Respuestas

1. _____
2. _____
3. _____
4. _____
5. _____
6. _____
7. _____
8. _____
9. _____
10. _____



Encuentra el área de cada triángulo. Las unidades no están a escala.



Respuestas

1. 2,790 mm²
2. 12 yds²
3. 2,310 ft²
4. 12 mm²
5. 140 ft²
6. 3 m²
7. 3,984 km²
8. 13.5 mm²
9. 27 m²
10. 135 yds²

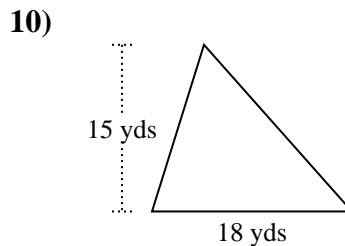
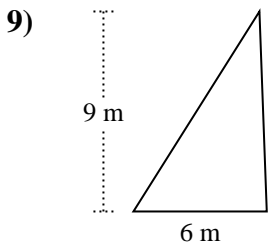
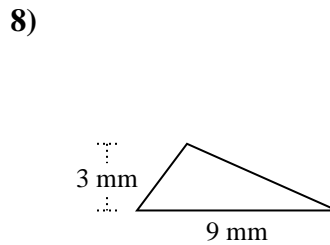
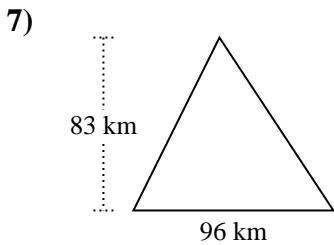
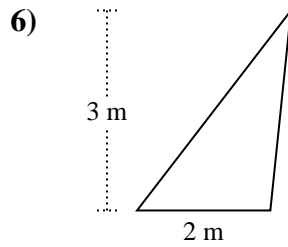
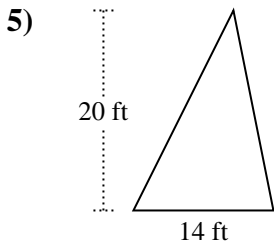
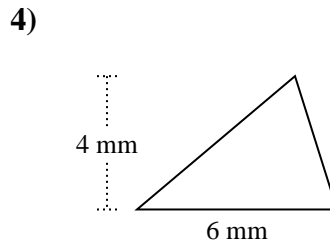
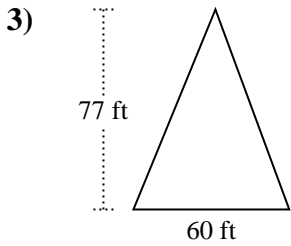
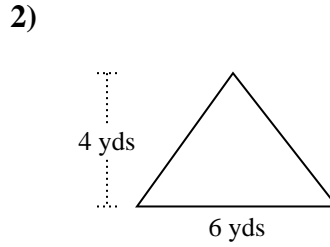
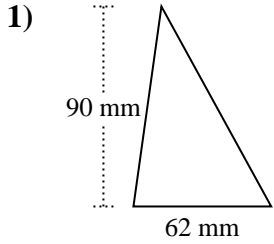


Encuentra el área de cada triángulo. Las unidades no están a escala.

Respuestas

3	140	2,790	13.5
12	12	135	3,984
27	2,310		

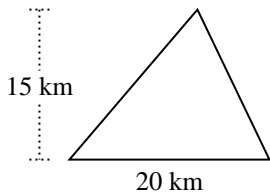
1. _____
2. _____
3. _____
4. _____
5. _____
6. _____
7. _____
8. _____
9. _____
10. _____



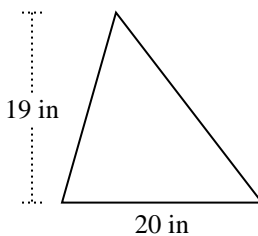


Encuentra el área de cada triángulo. Las unidades no están a escala.

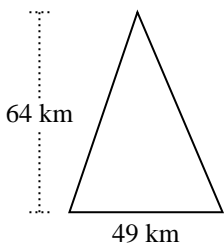
1)



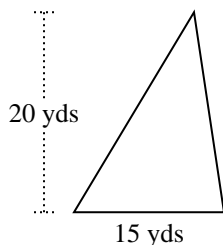
2)



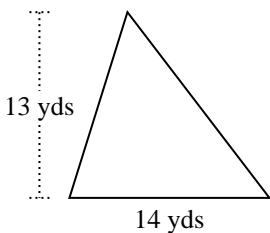
3)



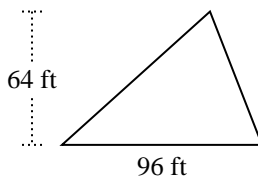
4)



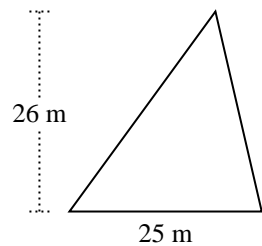
5)



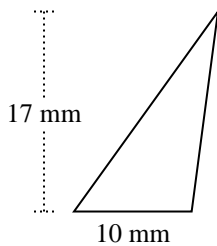
6)



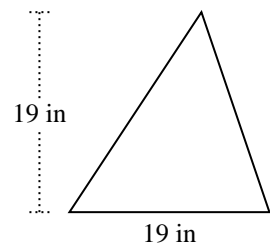
7)



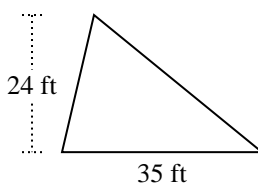
8)



9)



10)



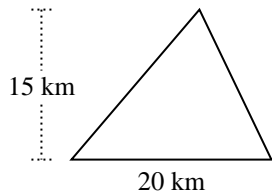
Respuestas

1. _____
2. _____
3. _____
4. _____
5. _____
6. _____
7. _____
8. _____
9. _____
10. _____

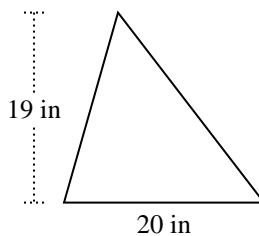


Encuentra el área de cada triángulo. Las unidades no están a escala.

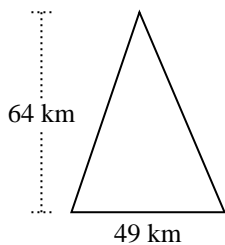
1)



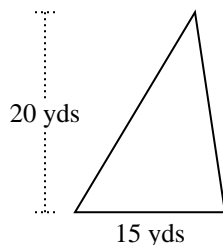
2)



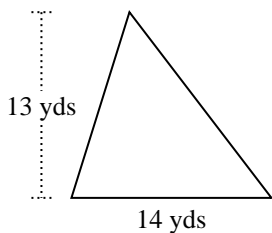
3)



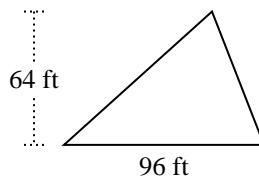
4)



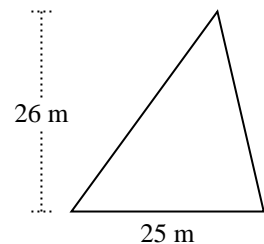
5)



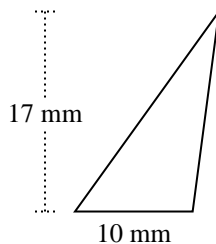
6)



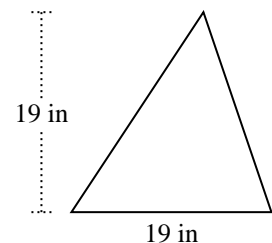
7)



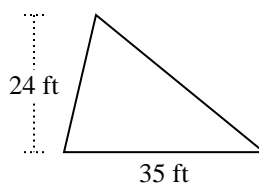
8)



9)



10)



Respuestas

1. 150 km²

2. 190 in²

3. 1,568 km²

4. 150 yds²

5. 91 yds²

6. 3,072 ft²

7. 325 m²

8. 85 mm²

9. 180.5 in²

10. 420 ft²



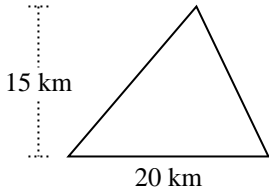
Encuentra el área de cada triángulo. Las unidades no están a escala.

1,568	150	3,072	91
180.5	190	420	325
150	85		

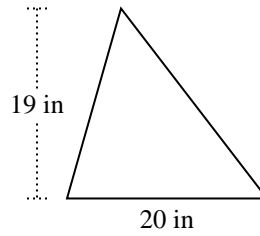
Respuestas

1. _____
2. _____
3. _____
4. _____
5. _____
6. _____
7. _____
8. _____
9. _____
10. _____

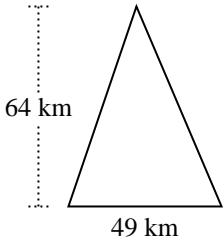
1)



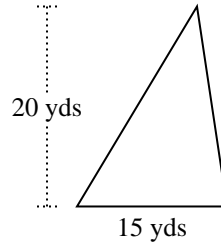
2)



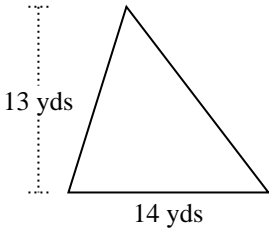
3)



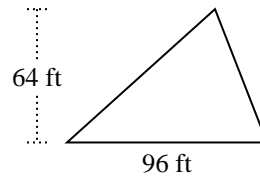
4)



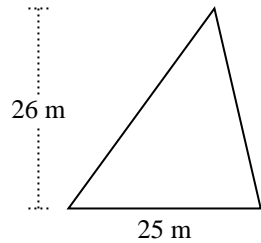
5)



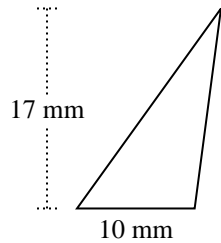
6)



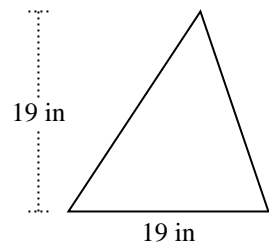
7)



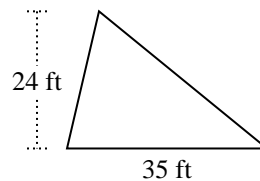
8)



9)



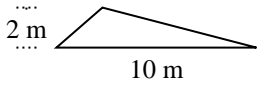
10)



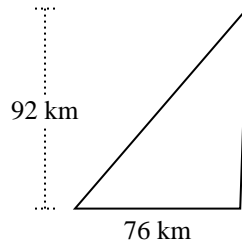


Encuentra el área de cada triángulo. Las unidades no están a escala.

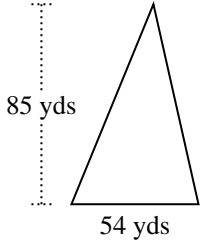
1)



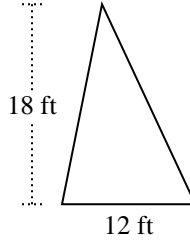
2)



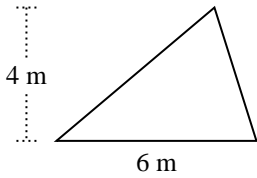
3)



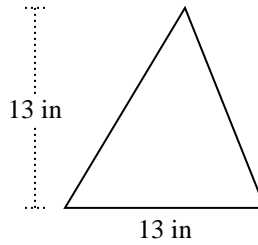
4)



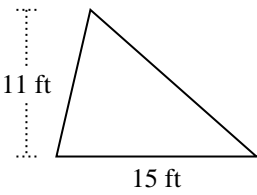
5)



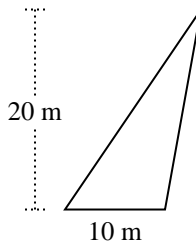
6)



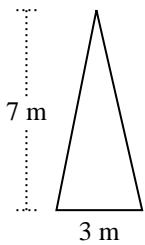
7)



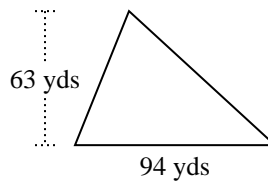
8)



9)



10)



Respuestas

1. _____

2. _____

3. _____

4. _____

5. _____

6. _____

7. _____

8. _____

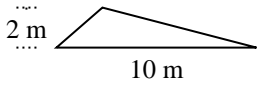
9. _____

10. _____

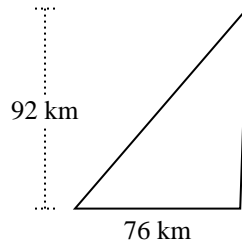


Encuentra el área de cada triángulo. Las unidades no están a escala.

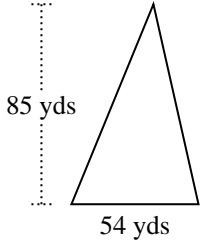
1)



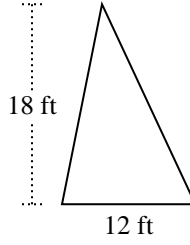
2)



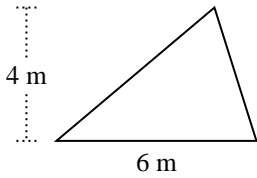
3)



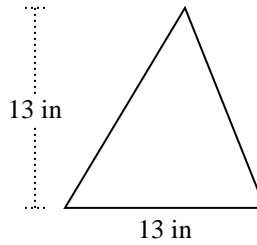
4)



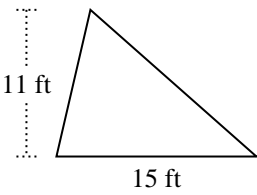
5)



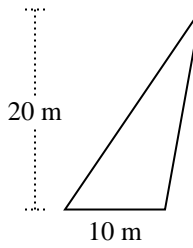
6)



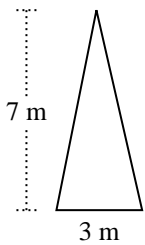
7)



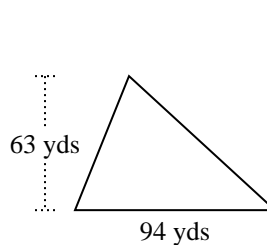
8)



9)



10)



Respuestas

1. 10 m²

2. 3,496 km²

3. 2,295 yds²

4. 108 ft²

5. 12 m²

6. 84.5 in²

7. 82.5 ft²

8. 100 m²

9. 10.5 m²

10. 2,961 yds²



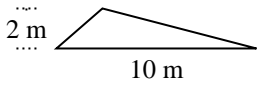
Encuentra el área de cada triángulo. Las unidades no están a escala.

Respuestas

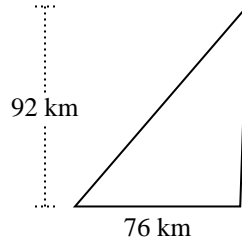
12	82.5	108	84.5
10	2,295	3,496	2,961
100	10.5		

1. _____
2. _____
3. _____
4. _____
5. _____
6. _____
7. _____
8. _____
9. _____
10. _____

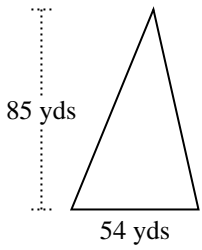
1)



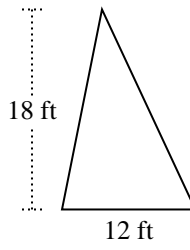
2)



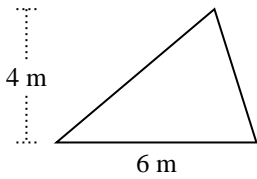
3)



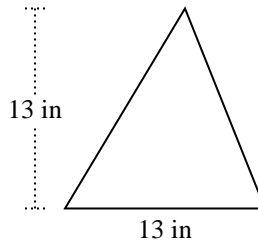
4)



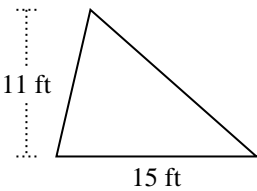
5)



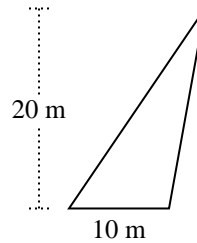
6)



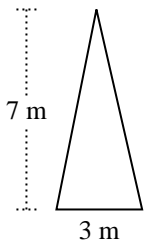
7)



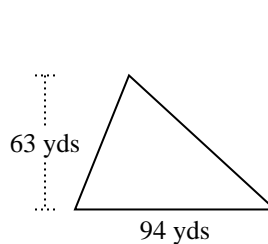
8)



9)



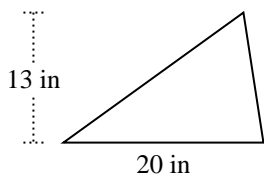
10)



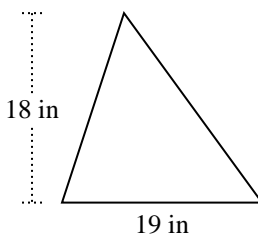


Encuentra el área de cada triángulo. Las unidades no están a escala.

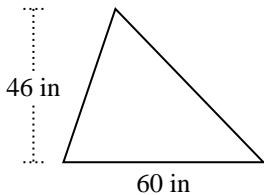
1)



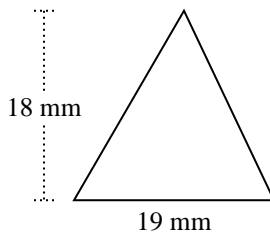
2)



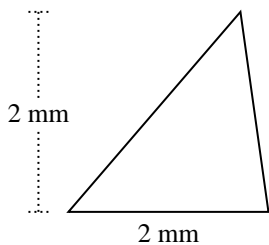
3)



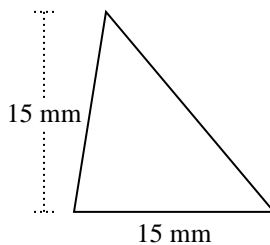
4)



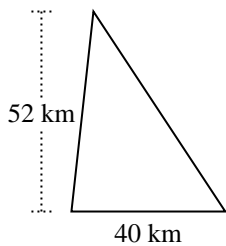
5)



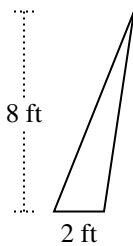
6)



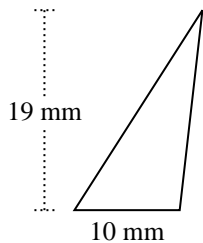
7)



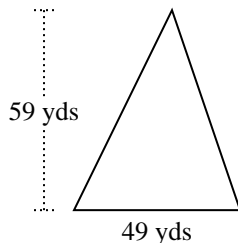
8)



9)



10)



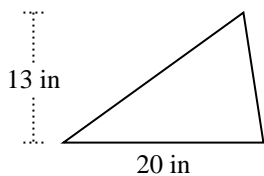
Respuestas

1. _____
2. _____
3. _____
4. _____
5. _____
6. _____
7. _____
8. _____
9. _____
10. _____

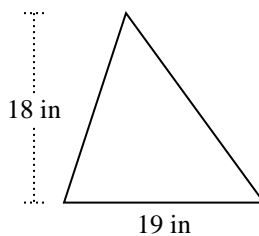


Encuentra el área de cada triángulo. Las unidades no están a escala.

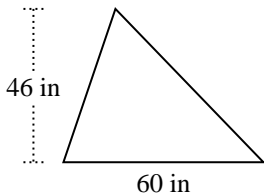
1)



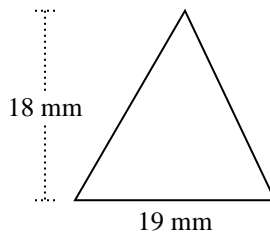
2)



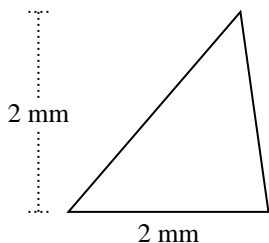
3)



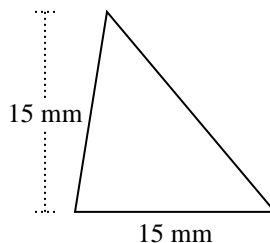
4)



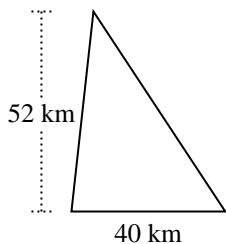
5)



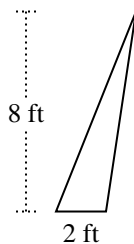
6)



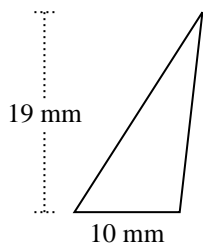
7)



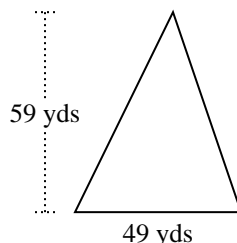
8)



9)



10)



Respuestas

1. 130 in²

2. 171 in²

3. 1,380 in²

4. 171 mm²

5. 2 mm²

6. 112.5 mm²

7. 1,040 km²

8. 8 ft²

9. 95 mm²

10. 1,445.5 yds²



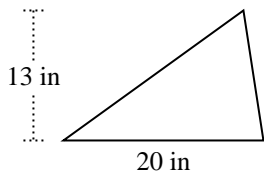
Encuentra el área de cada triángulo. Las unidades no están a escala.

130	1,445.5	1,040	1,380
171	2	171	95
8	112.5		

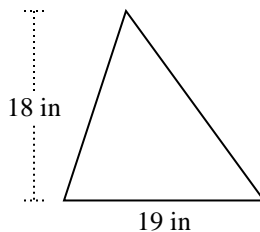
Respuestas

1. _____
2. _____
3. _____
4. _____
5. _____
6. _____
7. _____
8. _____
9. _____
10. _____

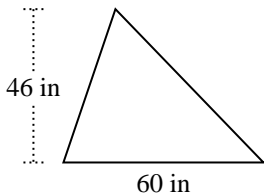
1)



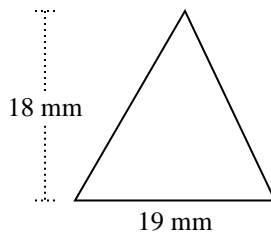
2)



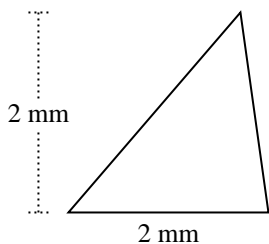
3)



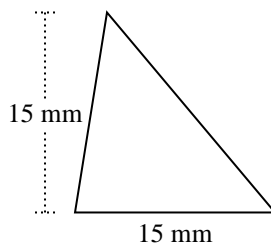
4)



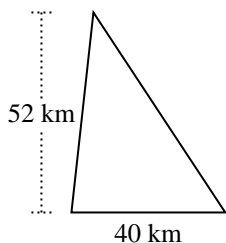
5)



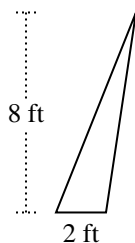
6)



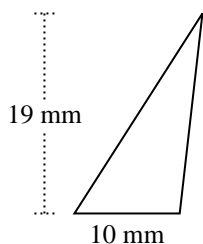
7)



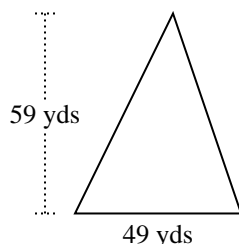
8)



9)

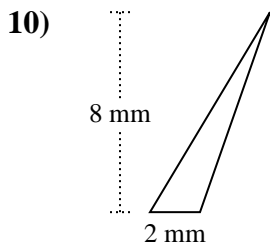
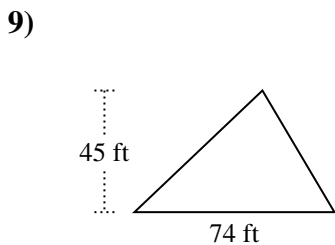
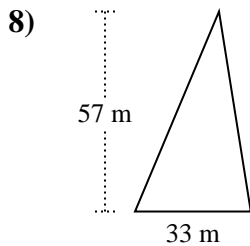
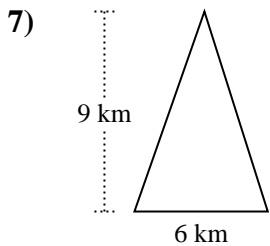
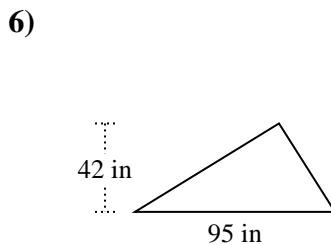
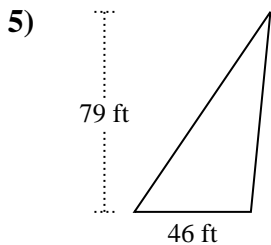
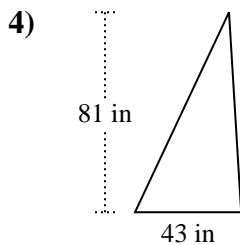
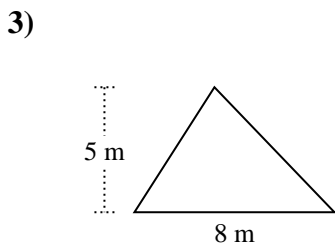
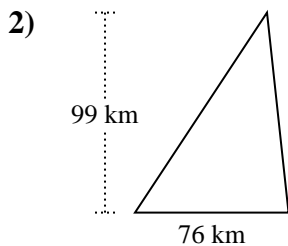
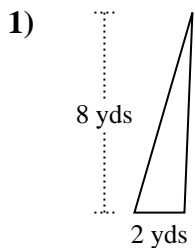


10)





Encuentra el área de cada triángulo. Las unidades no están a escala.

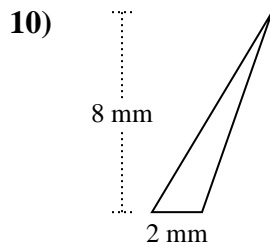
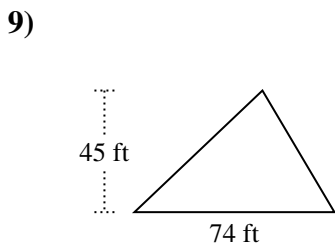
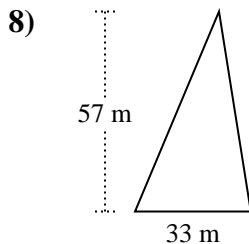
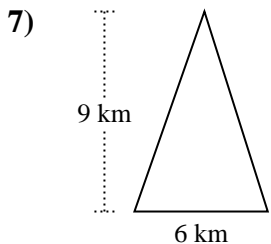
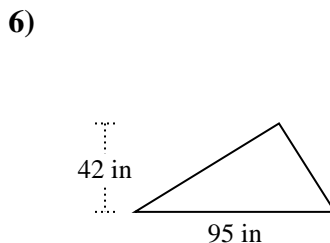
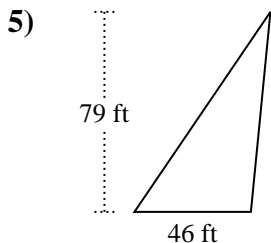
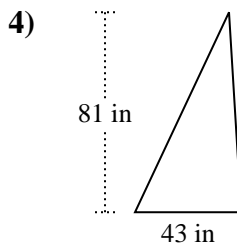
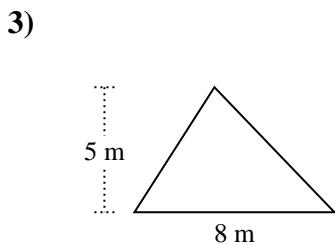
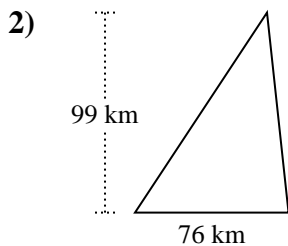
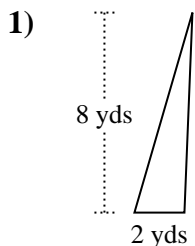


Respuestas

1. _____
2. _____
3. _____
4. _____
5. _____
6. _____
7. _____
8. _____
9. _____
10. _____



Encuentra el área de cada triángulo. Las unidades no están a escala.



Respuestas

1. 8 yds²

2. 3,762 km²

3. 20 m²

4. 1,741.5 in²

5. 1,817 ft²

6. 1,995 in²

7. 27 km²

8. 940.5 m²

9. 1,665 ft²

10. 8 mm²

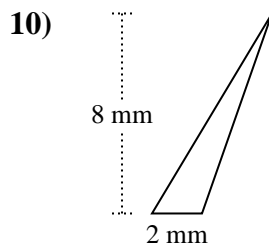
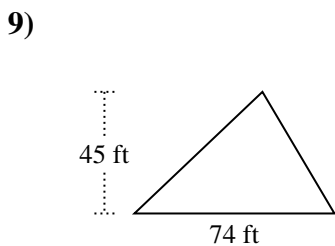
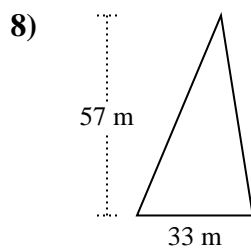
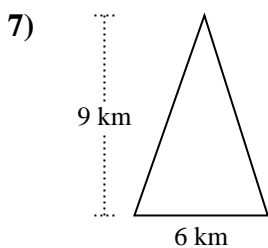
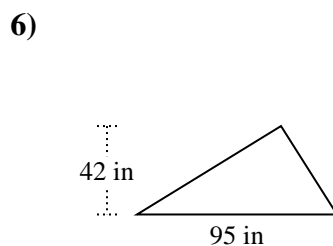
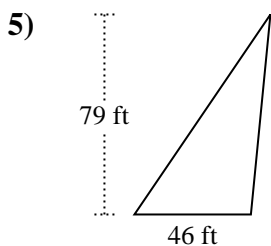
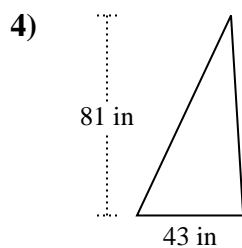
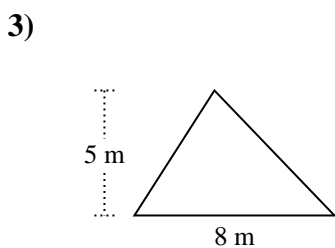
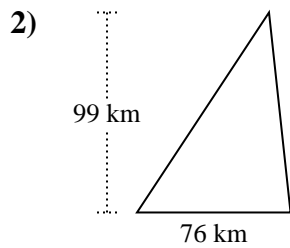
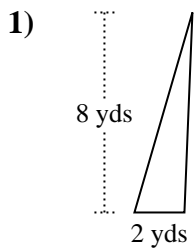


Encuentra el área de cada triángulo. Las unidades no están a escala.

1,665	27	1,817	8
8	1,995	20	1,741.5
3,762	940.5		

Respuestas

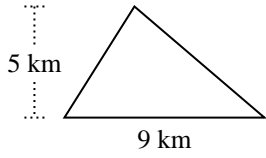
1. _____
2. _____
3. _____
4. _____
5. _____
6. _____
7. _____
8. _____
9. _____
10. _____



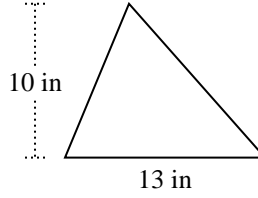


Encuentra el área de cada triángulo. Las unidades no están a escala.

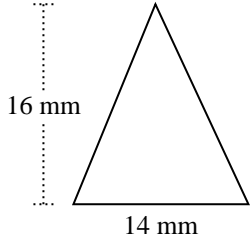
1)



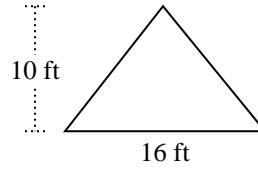
2)



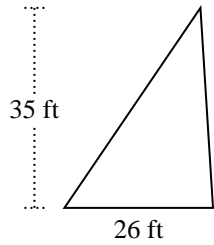
3)



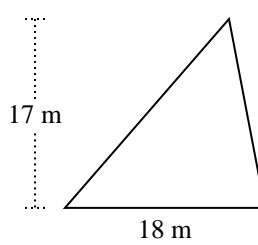
4)



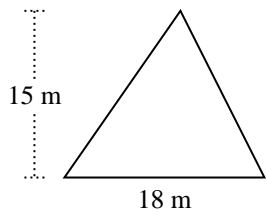
5)



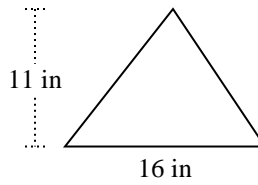
6)



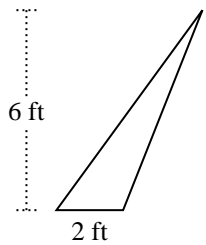
7)



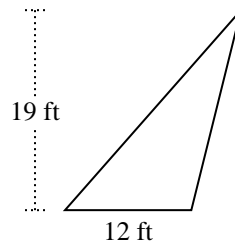
8)



9)



10)



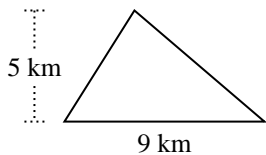
Respuestas

- 1. _____
- 2. _____
- 3. _____
- 4. _____
- 5. _____
- 6. _____
- 7. _____
- 8. _____
- 9. _____
- 10. _____

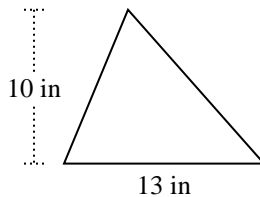


Encuentra el área de cada triángulo. Las unidades no están a escala.

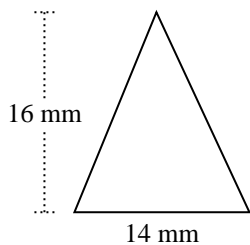
1)



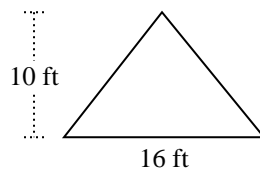
2)



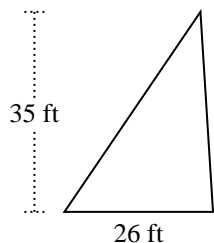
3)



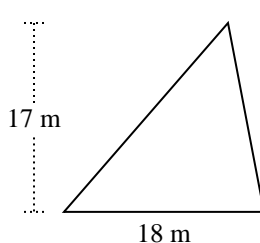
4)



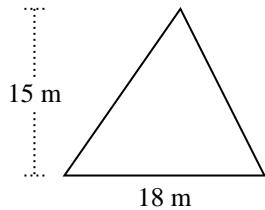
5)



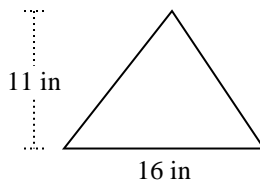
6)



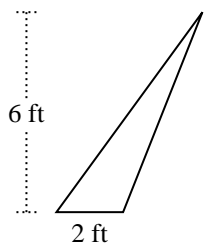
7)



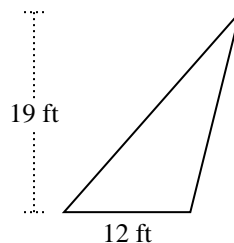
8)



9)



10)



Respuestas

1. 22.5 km²

2. 65 in²

3. 112 mm²

4. 80 ft²

5. 455 ft²

6. 153 m²

7. 135 m²

8. 88 in²

9. 6 ft²

10. 114 ft²



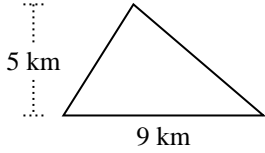
Encuentra el área de cada triángulo. Las unidades no están a escala.

Respuestas

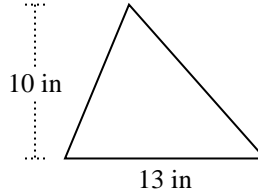
114	153	22.5	455
65	6	80	88
135	112		

1. _____
2. _____
3. _____
4. _____
5. _____
6. _____
7. _____
8. _____
9. _____
10. _____

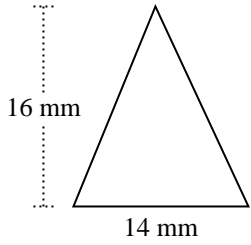
1)



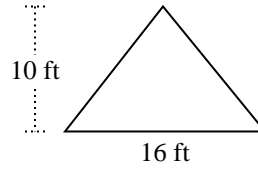
2)



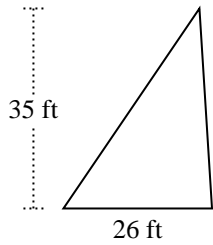
3)



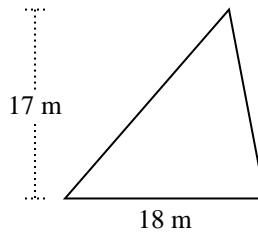
4)



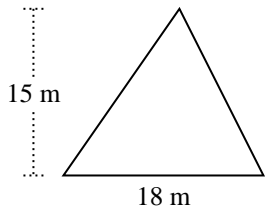
5)



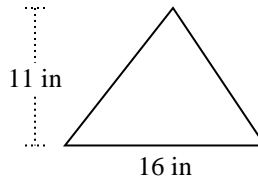
6)



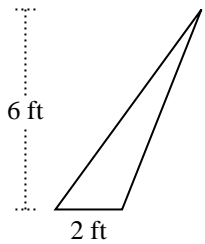
7)



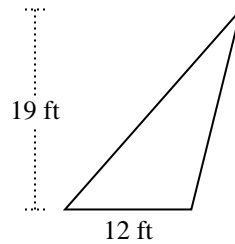
8)



9)

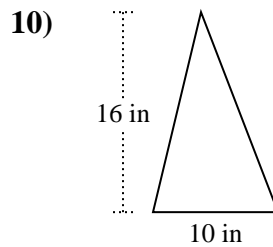
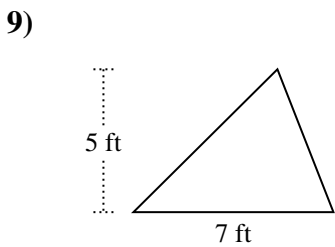
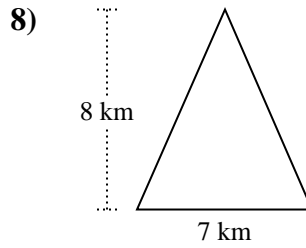
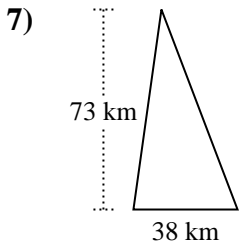
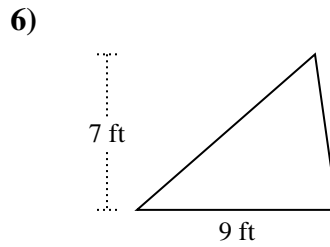
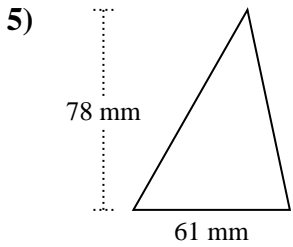
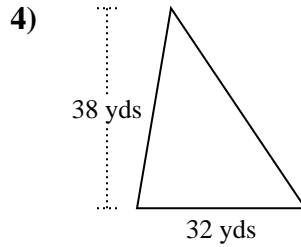
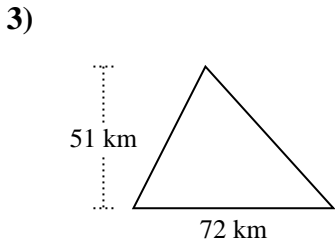
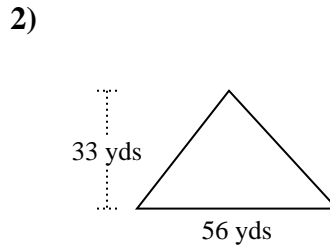
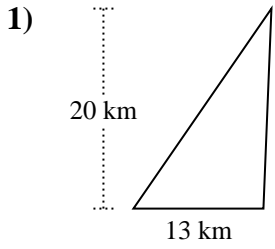


10)





Encuentra el área de cada triángulo. Las unidades no están a escala.

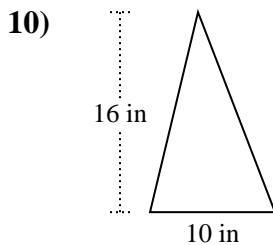
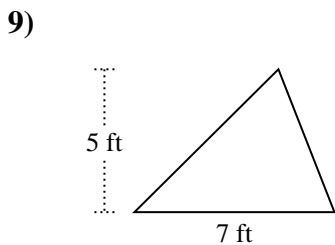
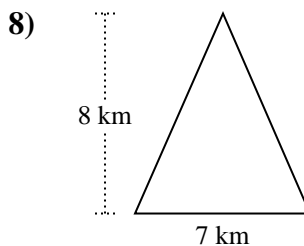
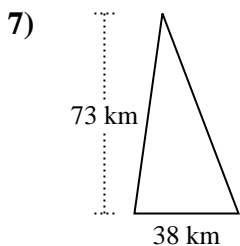
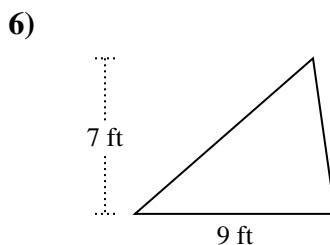
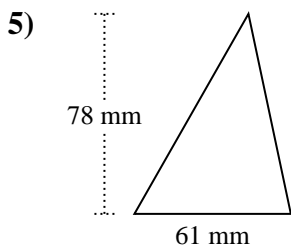
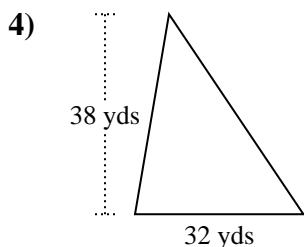
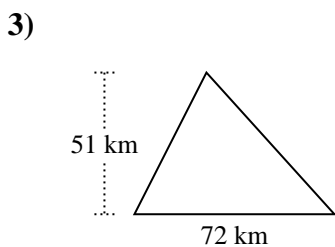
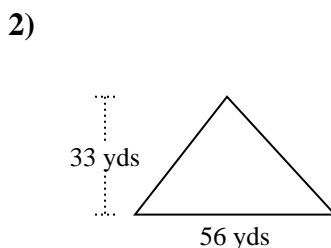
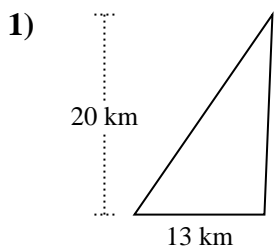


Respuestas

1. _____
2. _____
3. _____
4. _____
5. _____
6. _____
7. _____
8. _____
9. _____
10. _____



Encuentra el área de cada triángulo. Las unidades no están a escala.



Respuestas

1. 130 km²

2. 924 yds²

3. 1,836 km²

4. 608 yds²

5. 2,379 mm²

6. 31.5 ft²

7. 1,387 km²

8. 28 km²

9. 17.5 ft²

10. 80 in²



Encuentra el área de cada triángulo. Las unidades no están a escala.

2,379	31.5	17.5	28
130	924	80	1,387
1,836	608		

Respuestas

1. _____
2. _____
3. _____
4. _____
5. _____
6. _____
7. _____
8. _____
9. _____
10. _____

