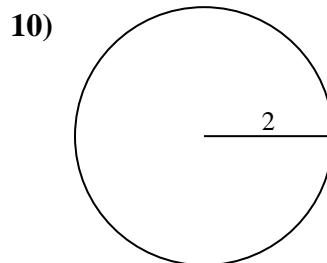
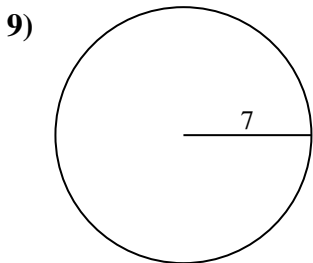
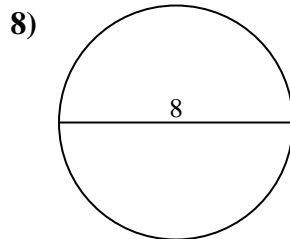
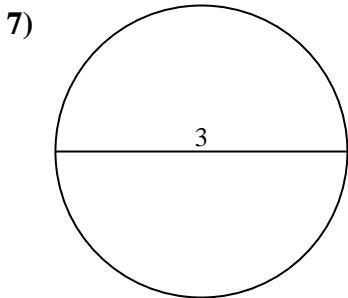
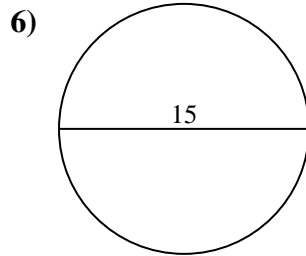
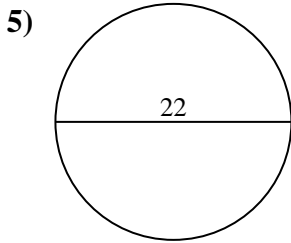
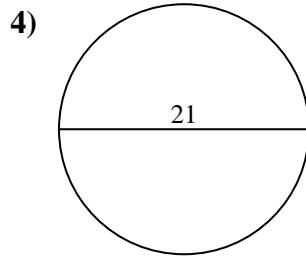
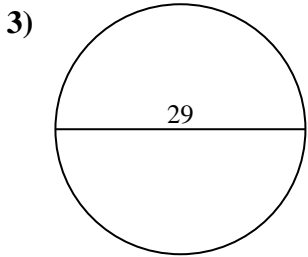
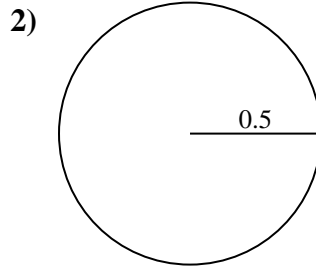
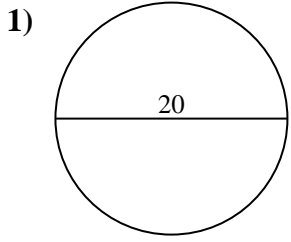




Encuentra la circunferencia de cada círculo. Los círculos no están a escala.



Respuestas

1. _____

2. _____

3. _____

4. _____

5. _____

6. _____

7. _____

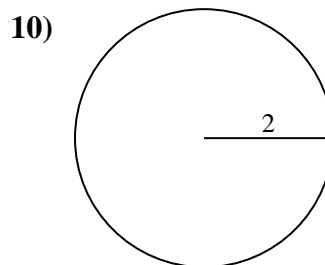
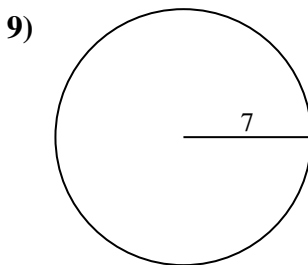
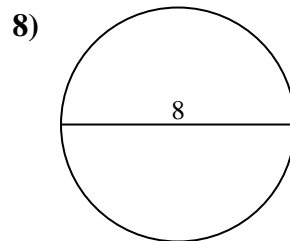
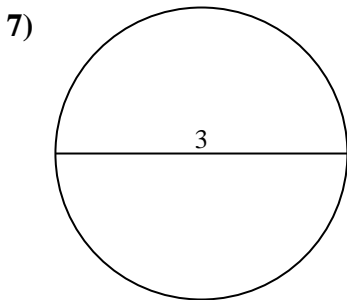
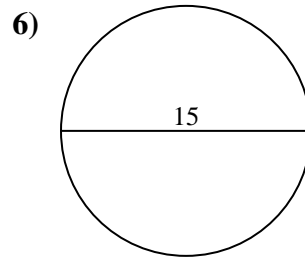
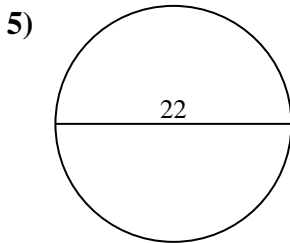
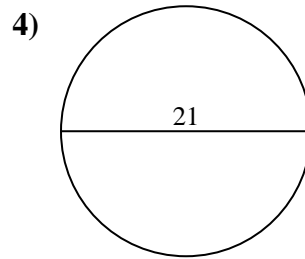
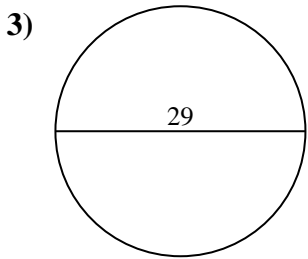
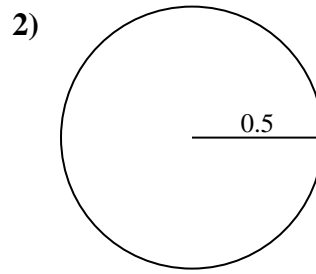
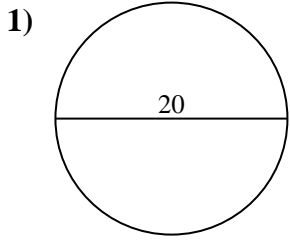
8. _____

9. _____

10. _____



Encuentra la circunferencia de cada círculo. Los círculos no están a escala.

**Respuestas**

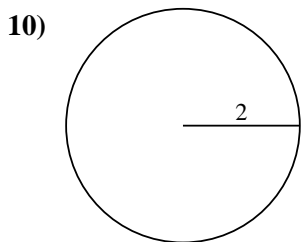
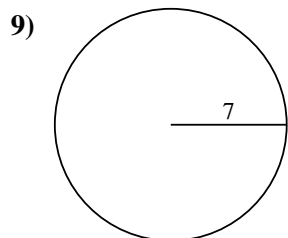
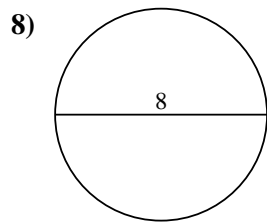
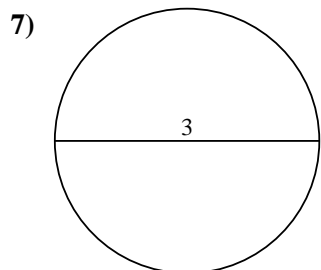
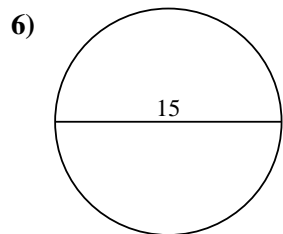
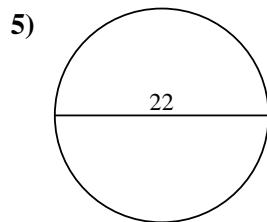
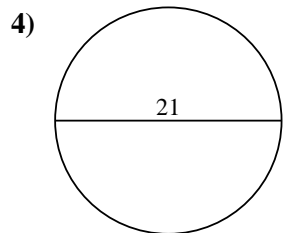
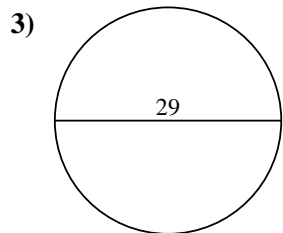
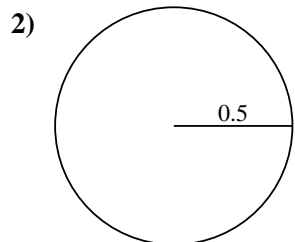
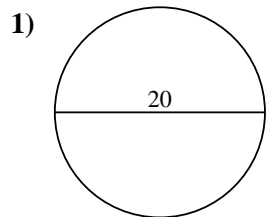
1. 62.83 cm
2. 3.14 cm
3. 91.11 cm
4. 65.97 cm
5. 69.12 cm
6. 47.12 cm
7. 9.42 cm
8. 25.13 cm
9. 43.98 cm
10. 12.57 cm



Encuentra la circunferencia de cada círculo. Los círculos no están a escala.

9.42 cm	47.12 cm	62.83 cm	69.12 cm	3.14 cm
65.97 cm	91.11 cm	12.57 cm	25.13 cm	43.98 cm

Respuestas



1. _____
2. _____
3. _____
4. _____
5. _____
6. _____
7. _____
8. _____
9. _____
10. _____