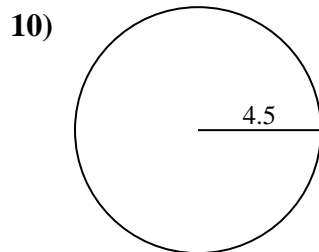
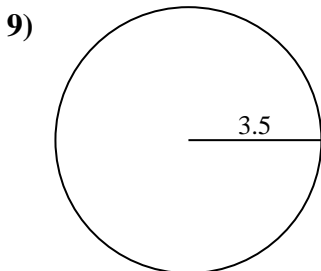
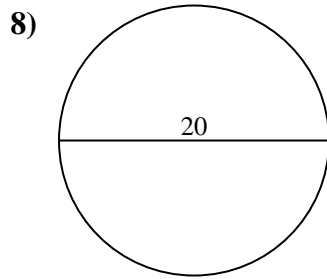
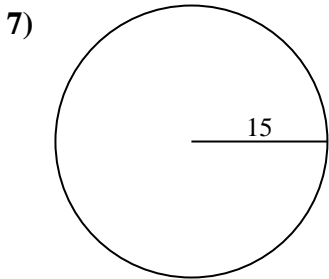
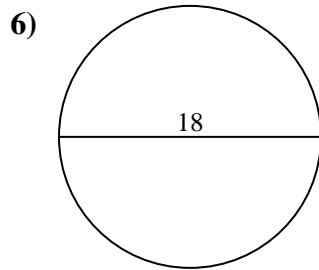
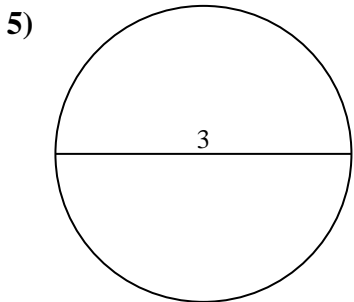
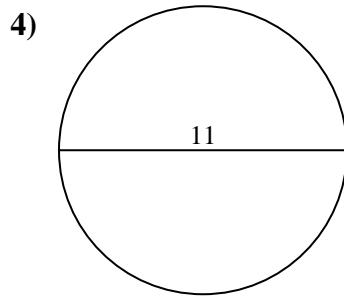
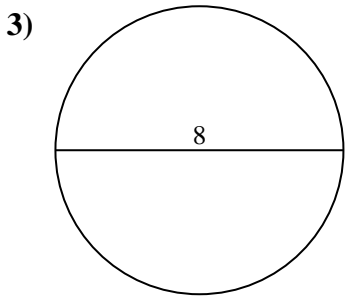
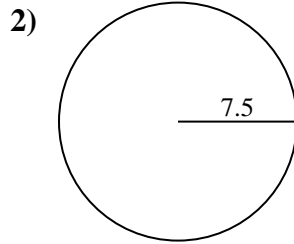
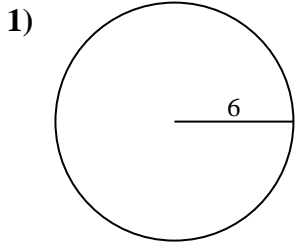




Encuentra la circunferencia de cada círculo. Los círculos no están a escala.

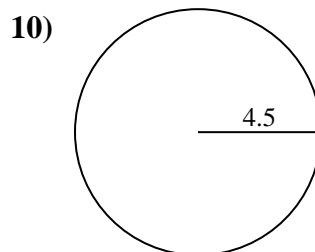
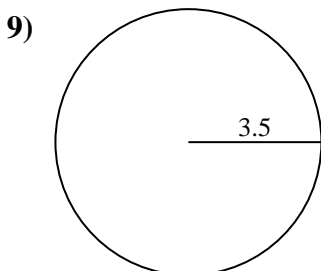
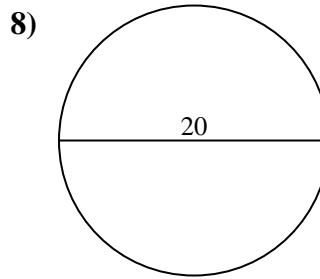
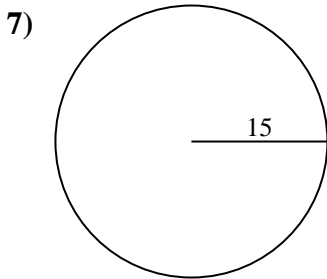
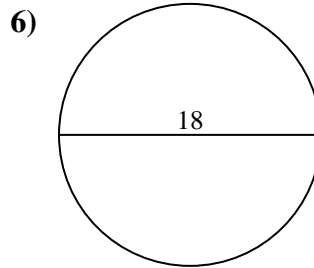
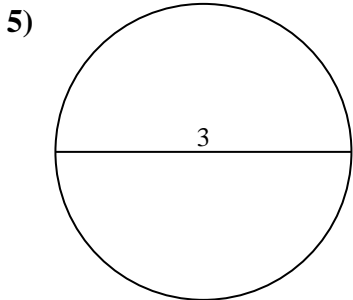
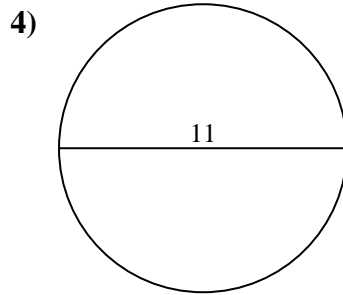
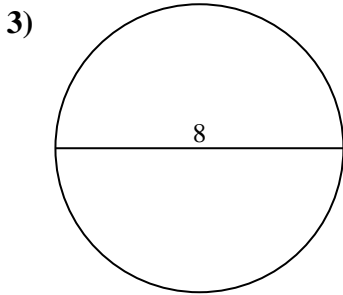
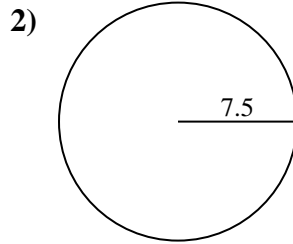
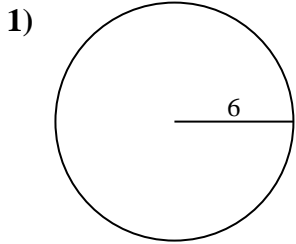


**Respuestas**

- 1. \_\_\_\_\_
- 2. \_\_\_\_\_
- 3. \_\_\_\_\_
- 4. \_\_\_\_\_
- 5. \_\_\_\_\_
- 6. \_\_\_\_\_
- 7. \_\_\_\_\_
- 8. \_\_\_\_\_
- 9. \_\_\_\_\_
- 10. \_\_\_\_\_



Encuentra la circunferencia de cada círculo. Los círculos no están a escala.



**Respuestas**

1. 37.7 cm
2. 47.12 cm
3. 25.13 cm
4. 34.56 cm
5. 9.42 cm
6. 56.55 cm
7. 94.25 cm
8. 62.83 cm
9. 21.99 cm
10. 28.27 cm



Encuentra la circunferencia de cada círculo. Los círculos no están a escala.

62.83 cm

37.7 cm

47.12 cm

9.42 cm

56.55 cm

21.99 cm

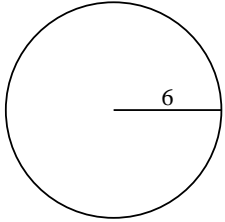
94.25 cm

25.13 cm

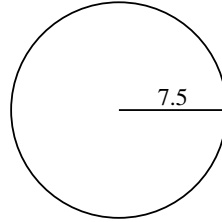
28.27 cm

34.56 cm

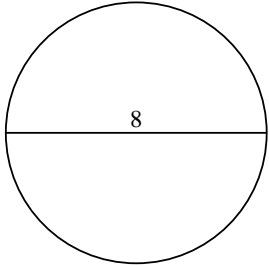
1)



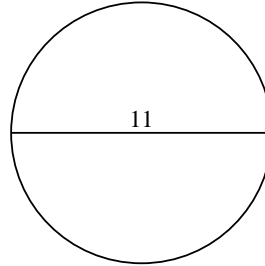
2)



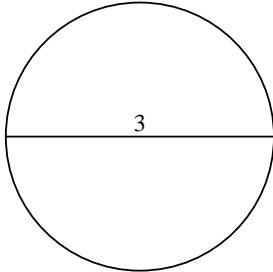
3)



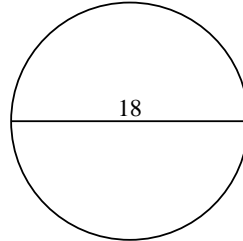
4)



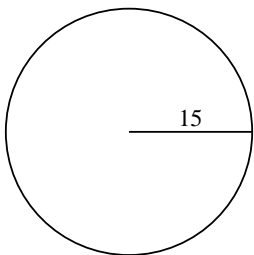
5)



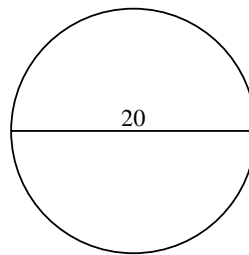
6)



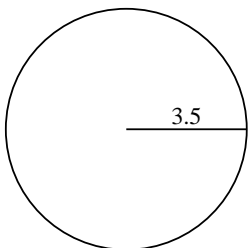
7)



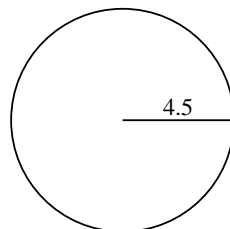
8)



9)



10)



**Respuestas**

1. \_\_\_\_\_

2. \_\_\_\_\_

3. \_\_\_\_\_

4. \_\_\_\_\_

5. \_\_\_\_\_

6. \_\_\_\_\_

7. \_\_\_\_\_

8. \_\_\_\_\_

9. \_\_\_\_\_

10. \_\_\_\_\_