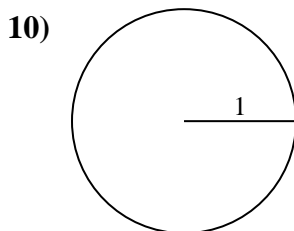
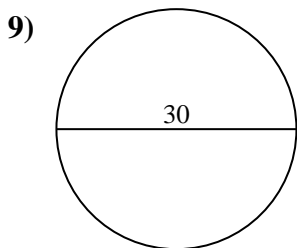
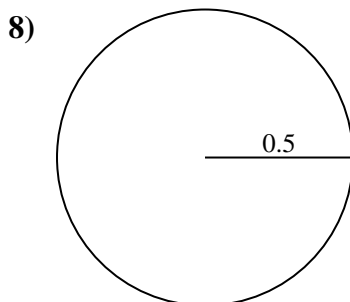
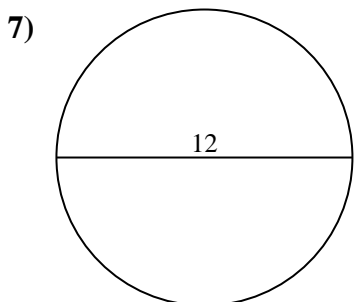
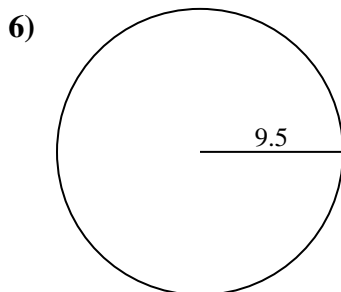
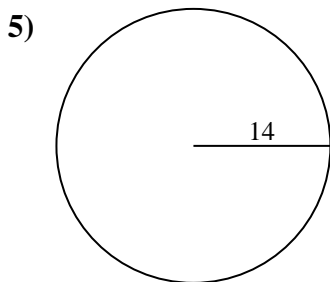
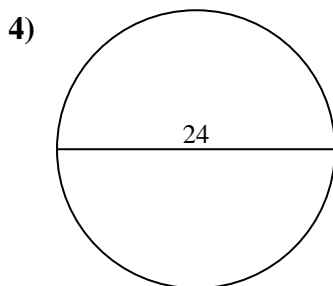
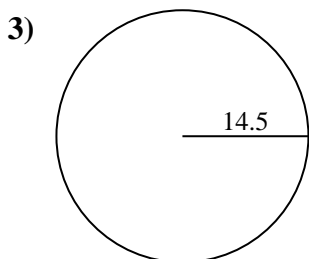
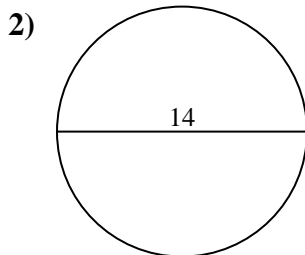
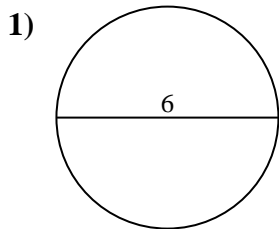




Encuentra la circunferencia de cada círculo. Los círculos no están a escala.

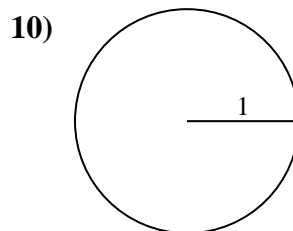
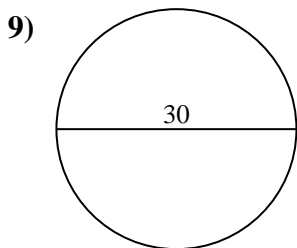
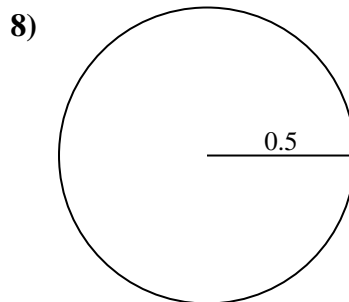
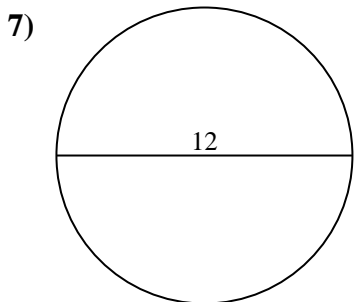
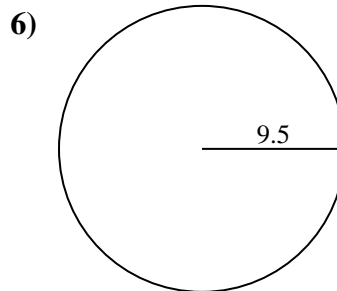
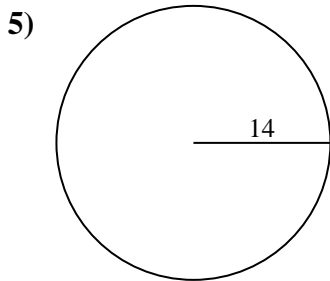
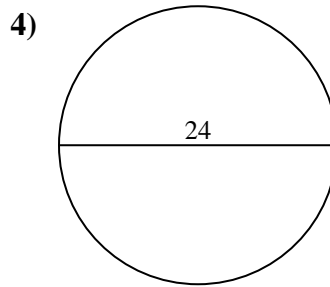
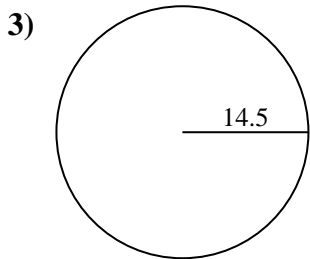
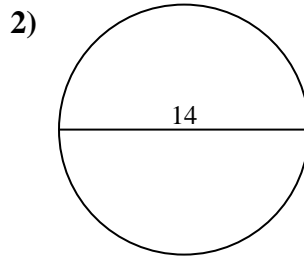
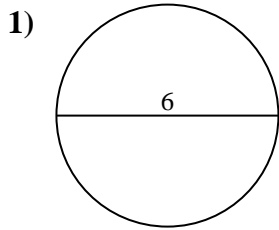


Respuestas

- 1. _____
- 2. _____
- 3. _____
- 4. _____
- 5. _____
- 6. _____
- 7. _____
- 8. _____
- 9. _____
- 10. _____



Encuentra la circunferencia de cada círculo. Los círculos no están a escala.

**Respuestas**

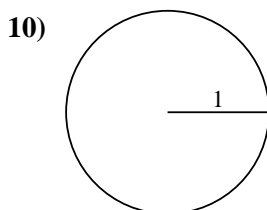
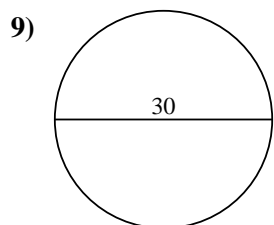
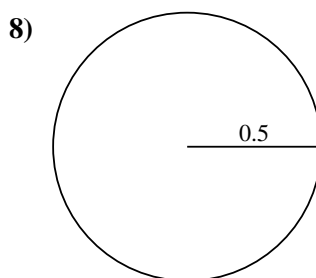
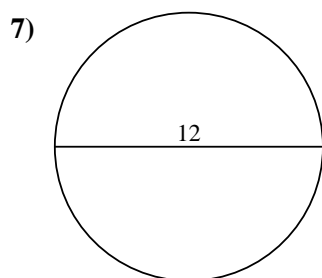
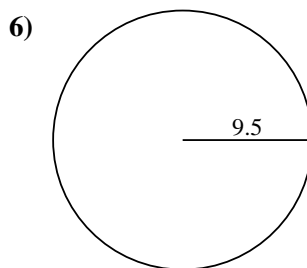
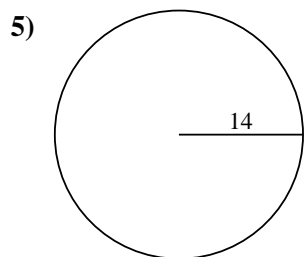
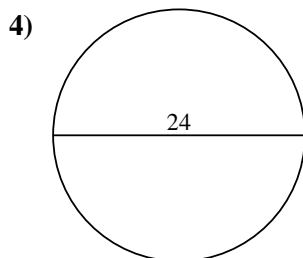
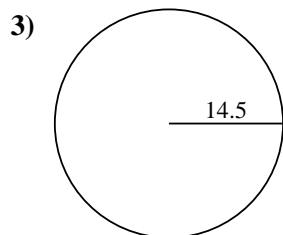
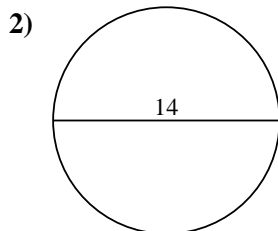
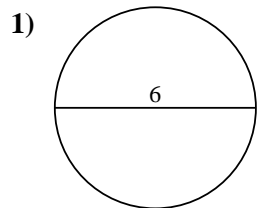
1. 18.85 cm
2. 43.98 cm
3. 91.11 cm
4. 75.4 cm
5. 87.96 cm
6. 59.69 cm
7. 37.7 cm
8. 3.14 cm
9. 94.25 cm
10. 6.28 cm



Encuentra la circunferencia de cada círculo. Los círculos no están a escala.

3.14 cm	18.85 cm	91.11 cm	37.7 cm	94.25 cm
59.69 cm	6.28 cm	43.98 cm	87.96 cm	75.4 cm

Respuestas



1. _____
2. _____
3. _____
4. _____
5. _____
6. _____
7. _____
8. _____
9. _____
10. _____