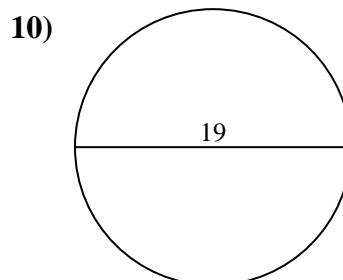
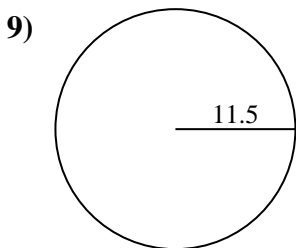
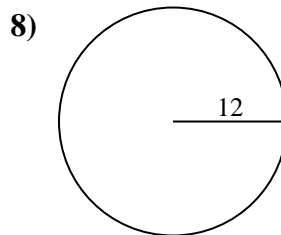
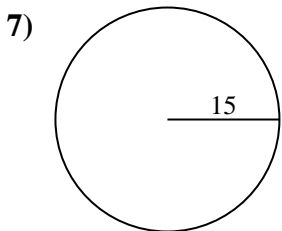
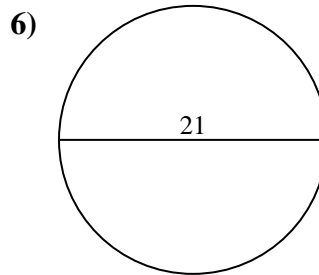
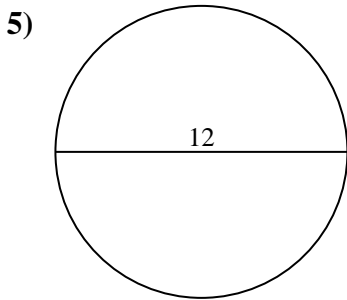
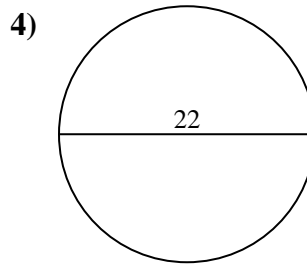
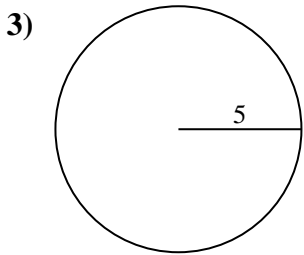
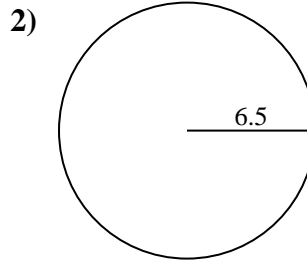
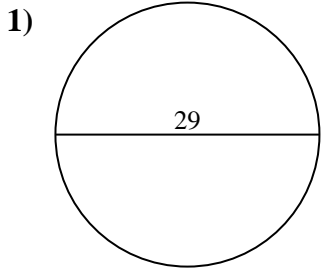




Encuentra la circunferencia de cada círculo. Los círculos no están a escala.

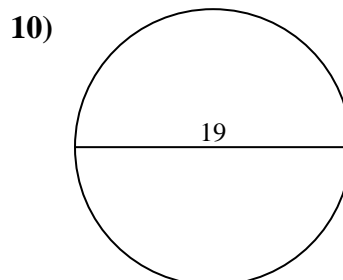
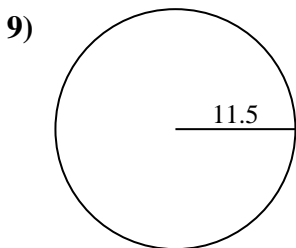
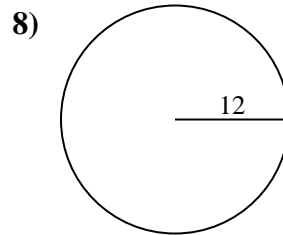
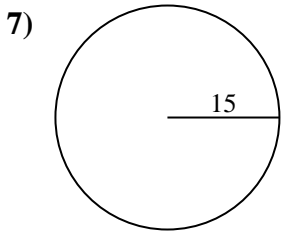
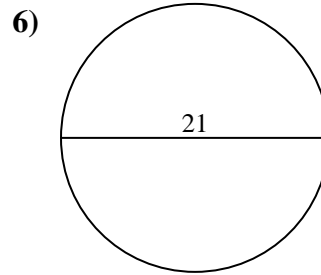
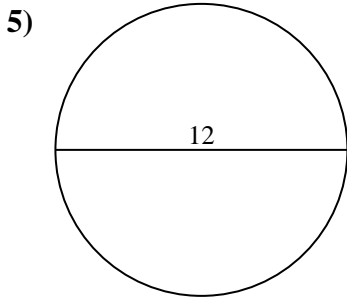
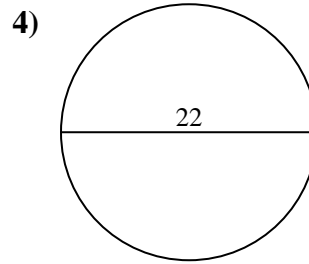
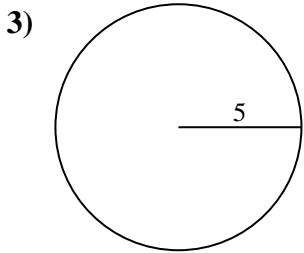
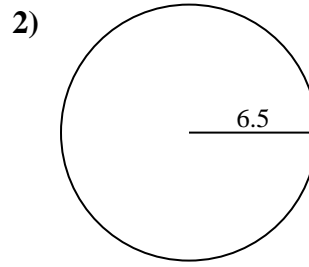
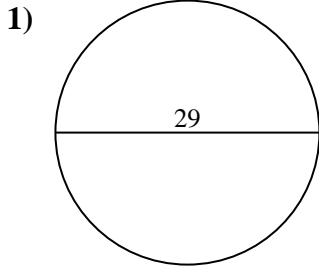


Respuestas

- 1. _____
- 2. _____
- 3. _____
- 4. _____
- 5. _____
- 6. _____
- 7. _____
- 8. _____
- 9. _____
- 10. _____



Encuentra la circunferencia de cada círculo. Los círculos no están a escala.

**Respuestas**1. 91.11 cm2. 40.84 cm3. 31.42 cm4. 69.12 cm5. 37.7 cm6. 65.97 cm7. 94.25 cm8. 75.4 cm9. 72.26 cm10. 59.69 cm



Encuentra la circunferencia de cada círculo. Los círculos no están a escala.

40.84 cm

37.7 cm

75.4 cm

69.12 cm

31.42 cm

65.97 cm

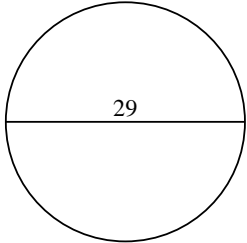
72.26 cm

94.25 cm

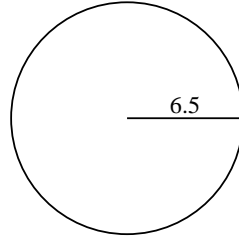
59.69 cm

91.11 cm

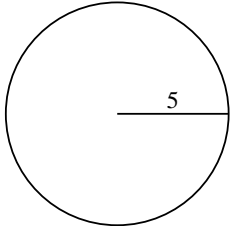
1)



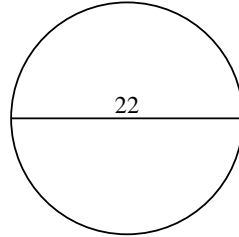
2)



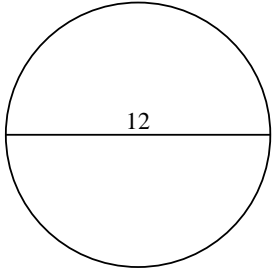
3)



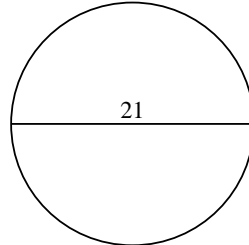
4)



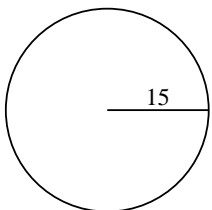
5)



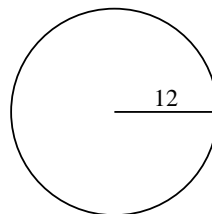
6)



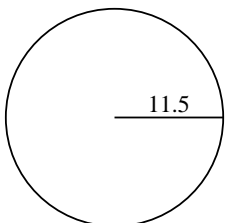
7)



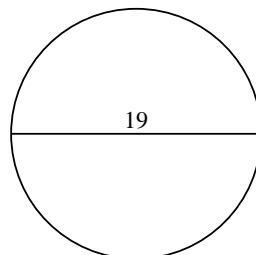
8)



9)



10)



Respuestas

1. _____

2. _____

3. _____

4. _____

5. _____

6. _____

7. _____

8. _____

9. _____

10. _____