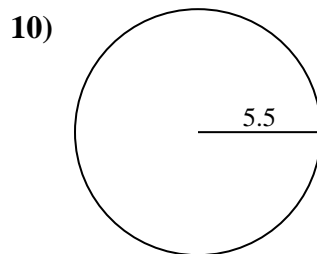
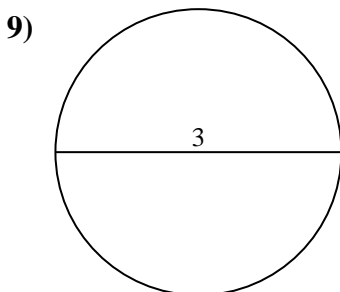
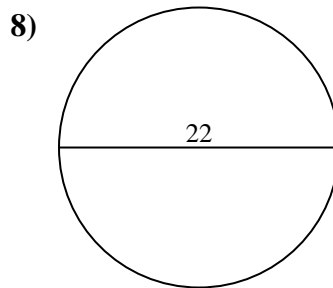
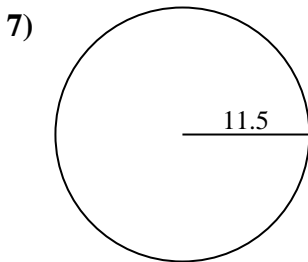
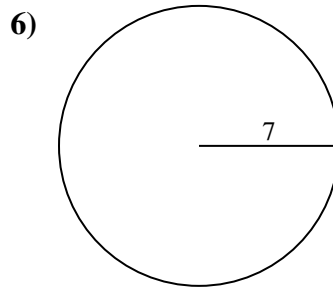
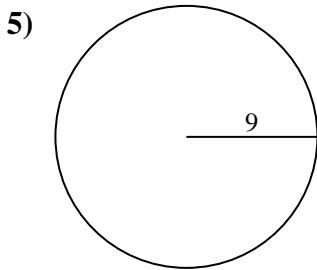
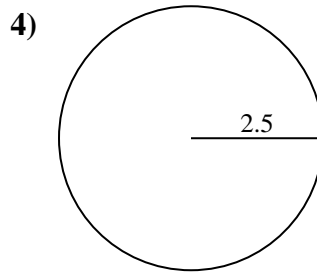
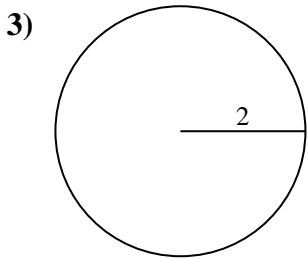
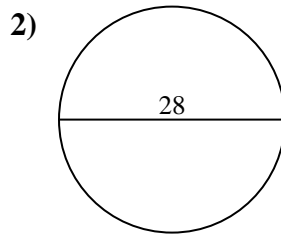
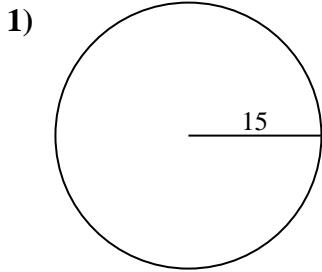




Encuentra la circunferencia de cada círculo. Los círculos no están a escala.

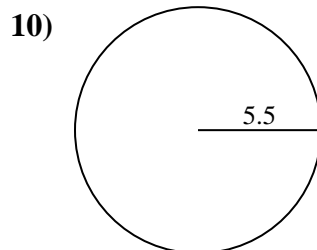
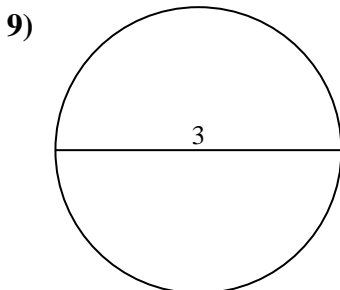
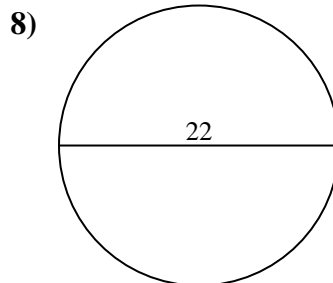
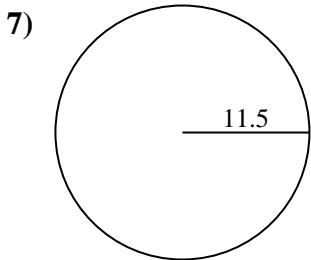
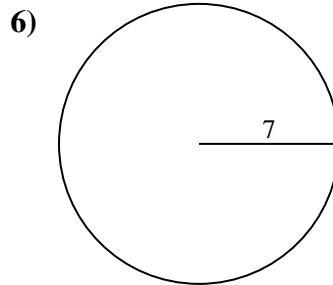
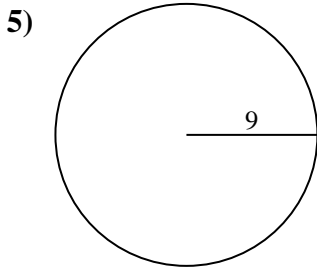
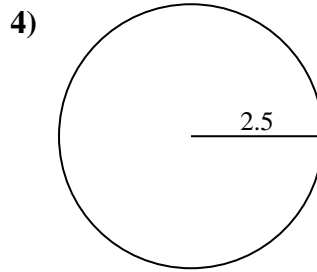
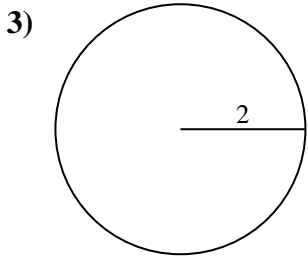
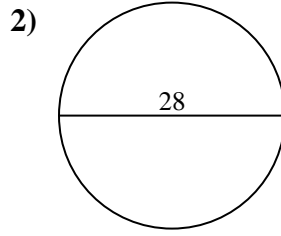
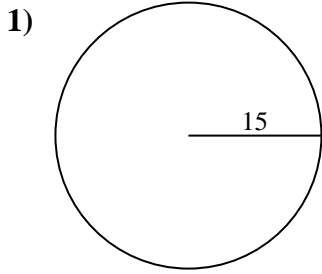


Respuestas

- 1. _____
- 2. _____
- 3. _____
- 4. _____
- 5. _____
- 6. _____
- 7. _____
- 8. _____
- 9. _____
- 10. _____



Encuentra la circunferencia de cada círculo. Los círculos no están a escala.



Respuestas

- 1. 94.25 cm
- 2. 87.96 cm
- 3. 12.57 cm
- 4. 15.71 cm
- 5. 56.55 cm
- 6. 43.98 cm
- 7. 72.26 cm
- 8. 69.12 cm
- 9. 9.42 cm
- 10. 34.56 cm



Encuentra la circunferencia de cada círculo. Los círculos no están a escala.

43.98 cm

15.71 cm

72.26 cm

34.56 cm

69.12 cm

87.96 cm

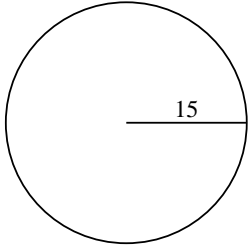
12.57 cm

9.42 cm

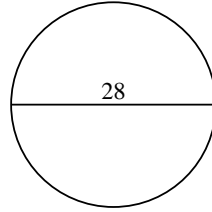
94.25 cm

56.55 cm

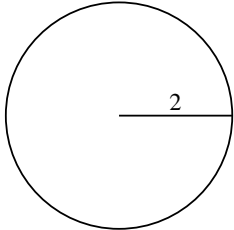
1)



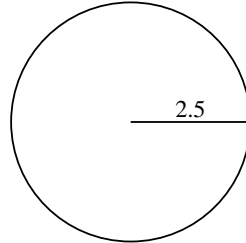
2)



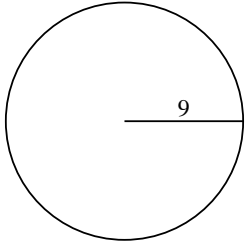
3)



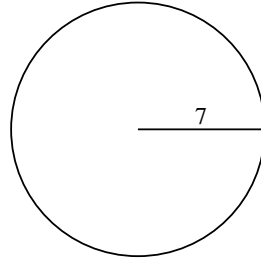
4)



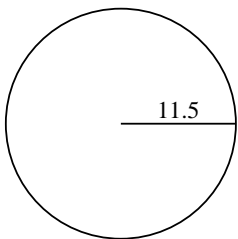
5)



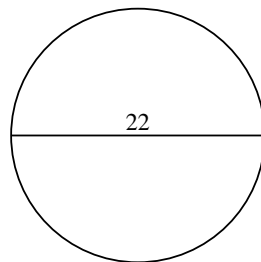
6)



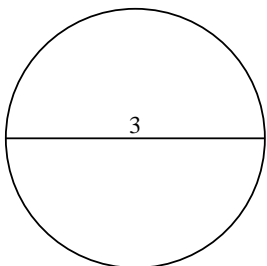
7)



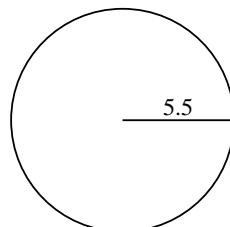
8)



9)



10)



Respuestas

1. _____

2. _____

3. _____

4. _____

5. _____

6. _____

7. _____

8. _____

9. _____

10. _____