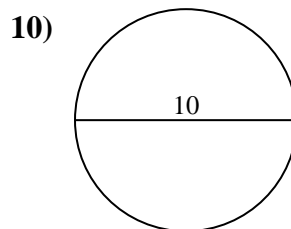
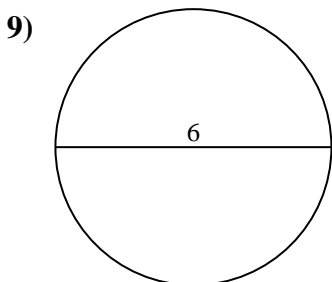
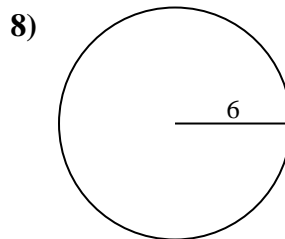
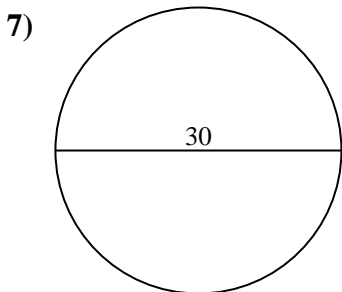
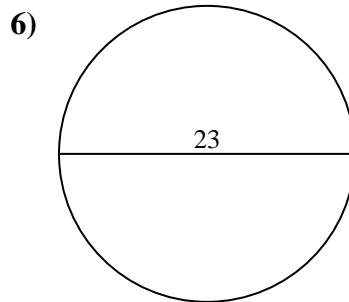
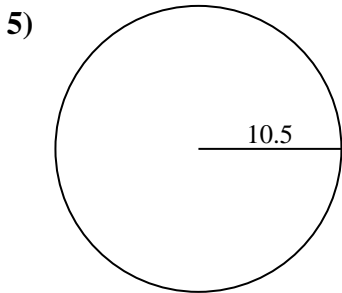
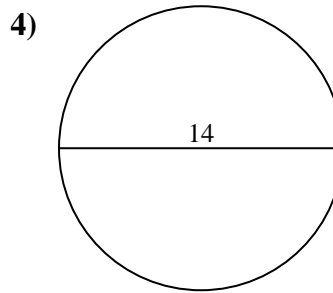
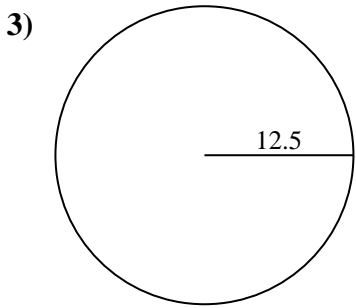
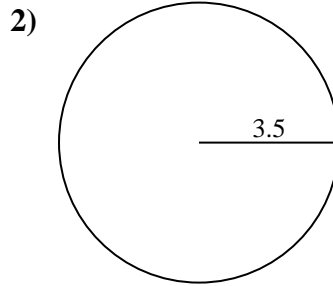
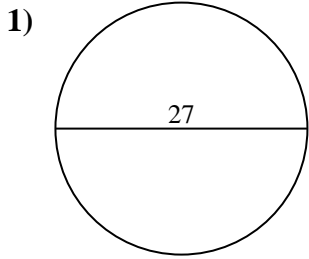




Encuentra la circunferencia de cada círculo. Los círculos no están a escala.

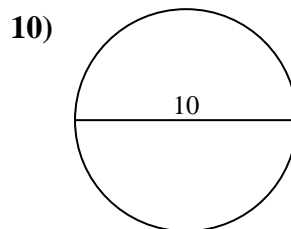
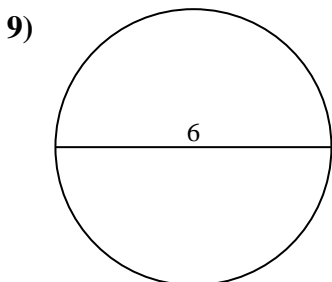
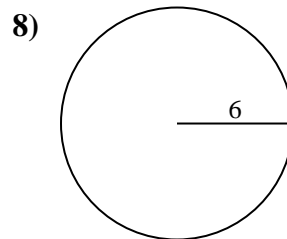
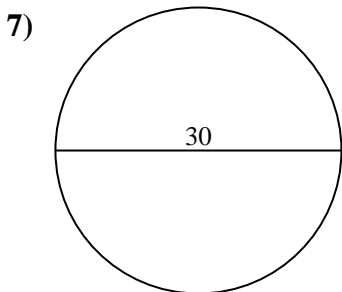
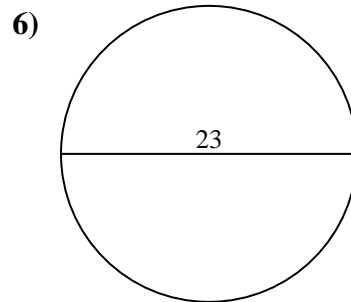
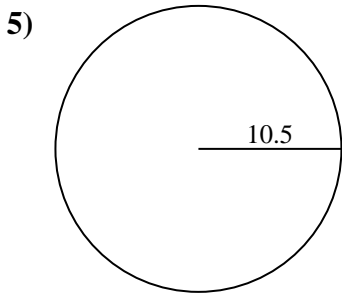
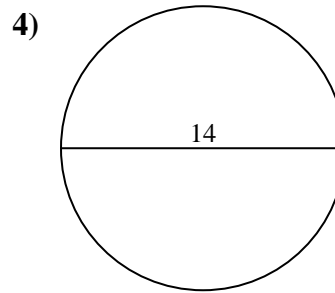
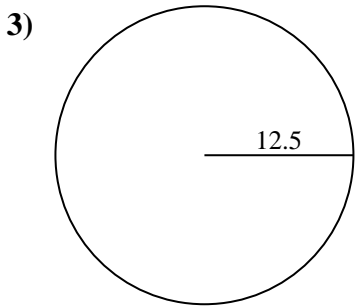
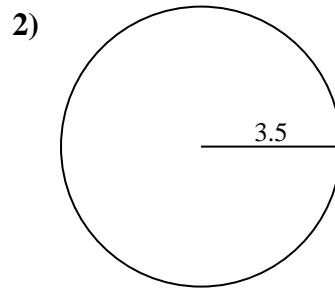
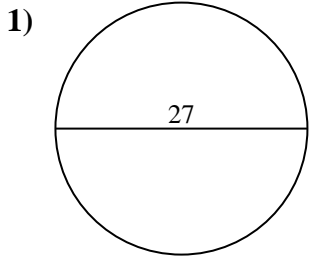


**Respuestas**

- 1. \_\_\_\_\_
- 2. \_\_\_\_\_
- 3. \_\_\_\_\_
- 4. \_\_\_\_\_
- 5. \_\_\_\_\_
- 6. \_\_\_\_\_
- 7. \_\_\_\_\_
- 8. \_\_\_\_\_
- 9. \_\_\_\_\_
- 10. \_\_\_\_\_



Encuentra la circunferencia de cada círculo. Los círculos no están a escala.



**Respuestas**

- 1. 84.82 cm
- 2. 21.99 cm
- 3. 78.54 cm
- 4. 43.98 cm
- 5. 65.97 cm
- 6. 72.26 cm
- 7. 94.25 cm
- 8. 37.7 cm
- 9. 18.85 cm
- 10. 31.42 cm



Encuentra la circunferencia de cada círculo. Los círculos no están a escala.

84.82 cm

94.25 cm

31.42 cm

18.85 cm

43.98 cm

72.26 cm

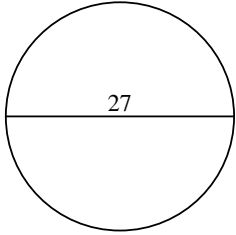
37.7 cm

78.54 cm

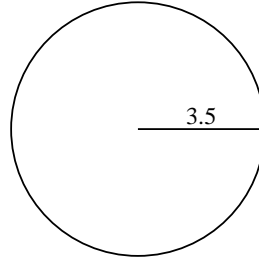
21.99 cm

65.97 cm

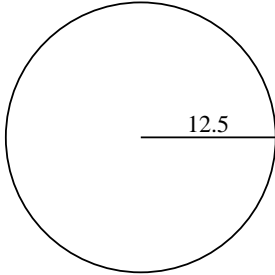
1)



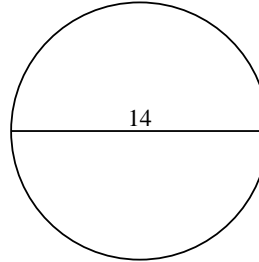
2)



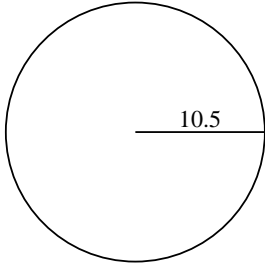
3)



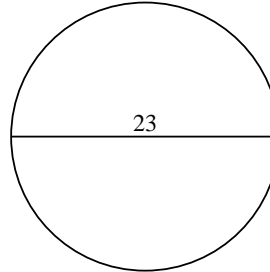
4)



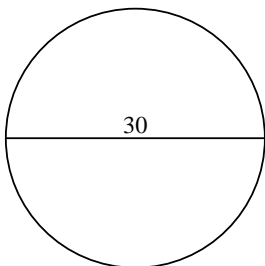
5)



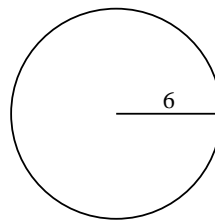
6)



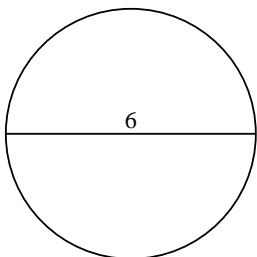
7)



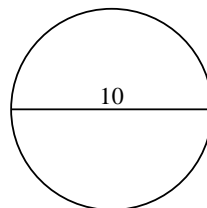
8)



9)



10)



**Respuestas**

1. \_\_\_\_\_

2. \_\_\_\_\_

3. \_\_\_\_\_

4. \_\_\_\_\_

5. \_\_\_\_\_

6. \_\_\_\_\_

7. \_\_\_\_\_

8. \_\_\_\_\_

9. \_\_\_\_\_

10. \_\_\_\_\_