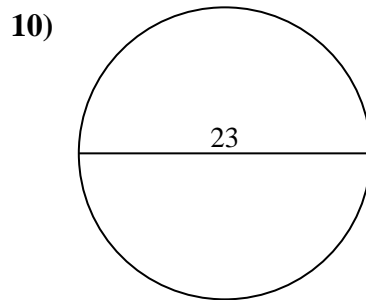
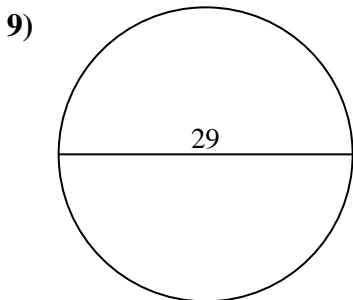
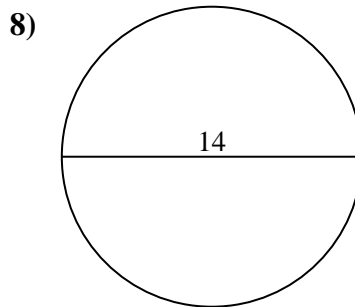
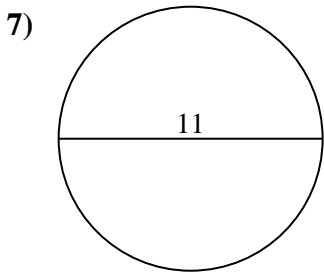
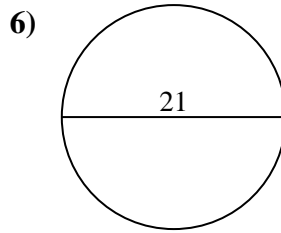
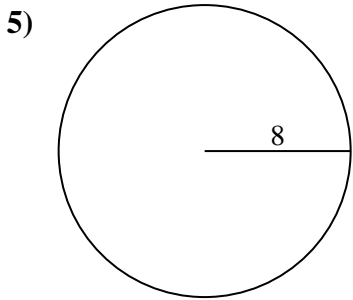
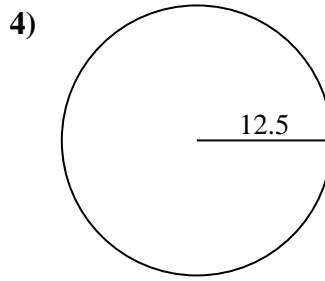
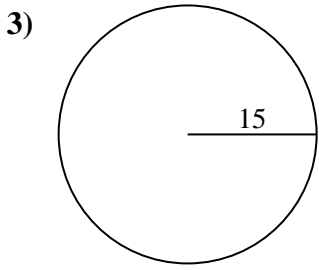
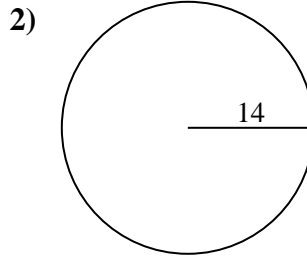
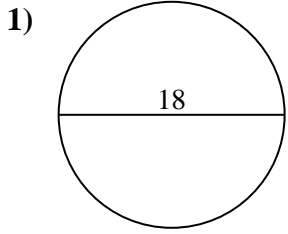




Encuentra la circunferencia de cada círculo. Los círculos no están a escala.

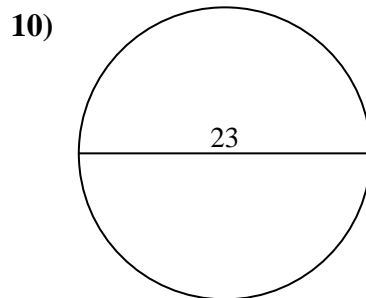
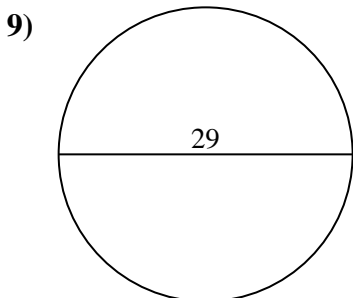
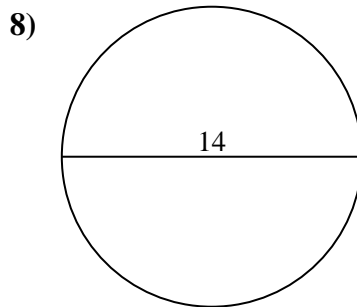
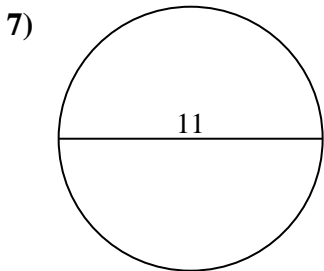
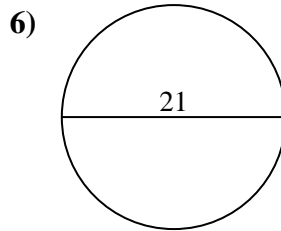
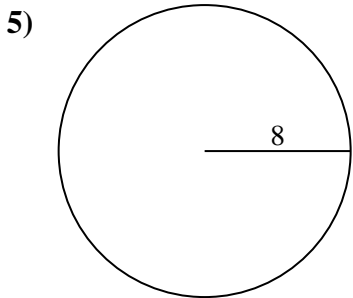
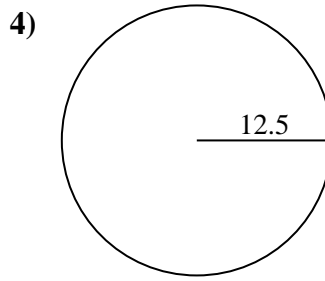
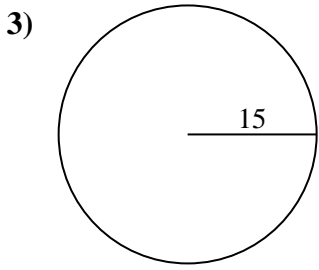
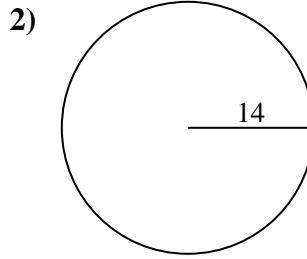
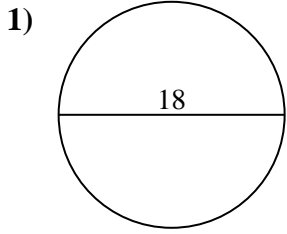


Respuestas

- 1. _____
- 2. _____
- 3. _____
- 4. _____
- 5. _____
- 6. _____
- 7. _____
- 8. _____
- 9. _____
- 10. _____



Encuentra la circunferencia de cada círculo. Los círculos no están a escala.

**Respuestas**1. **56.55 cm**2. **87.96 cm**3. **94.25 cm**4. **78.54 cm**5. **50.27 cm**6. **65.97 cm**7. **34.56 cm**8. **43.98 cm**9. **91.11 cm**10. **72.26 cm**



Encuentra la circunferencia de cada círculo. Los círculos no están a escala.

56.55 cm	78.54 cm	43.98 cm	72.26 cm	91.11 cm
65.97 cm	94.25 cm	34.56 cm	87.96 cm	50.27 cm

Respuestas

1. _____
2. _____
3. _____
4. _____
5. _____
6. _____
7. _____
8. _____
9. _____
10. _____

