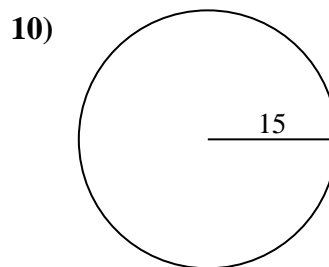
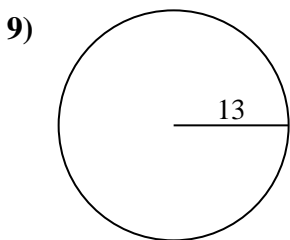
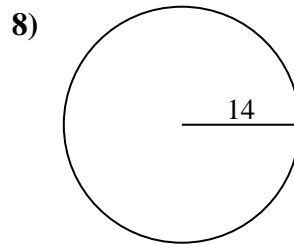
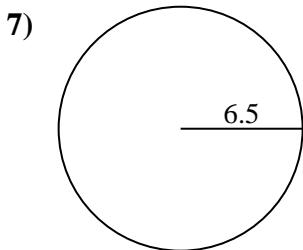
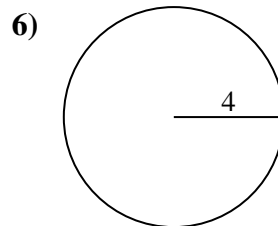
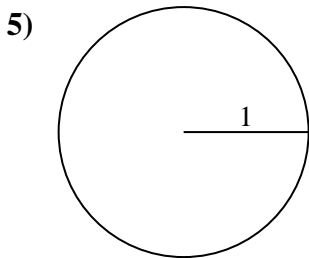
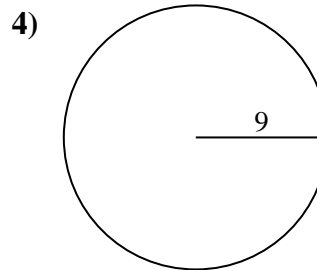
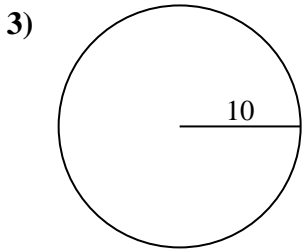
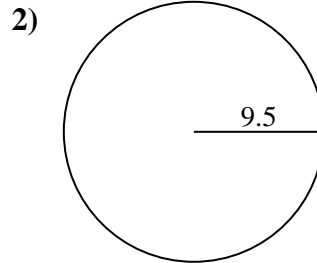
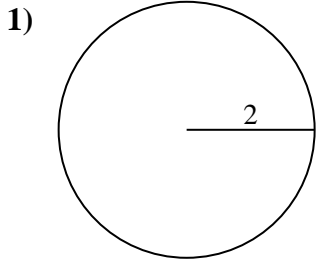




Encuentra la circunferencia de cada círculo. Los círculos no están a escala.

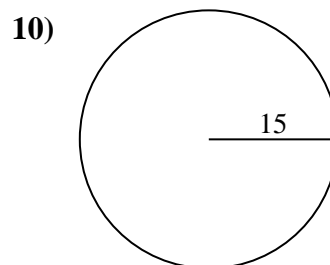
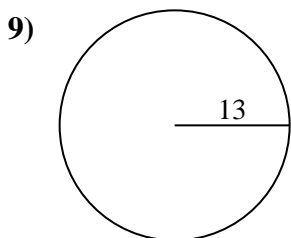
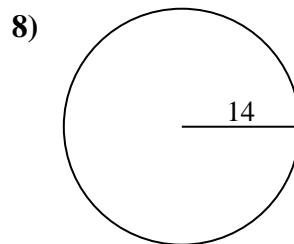
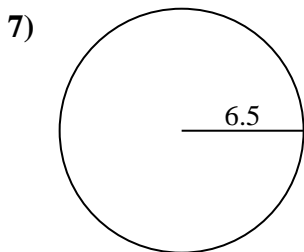
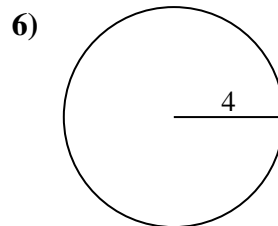
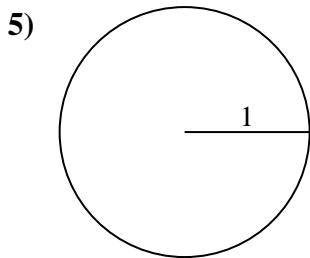
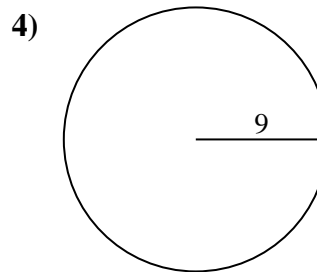
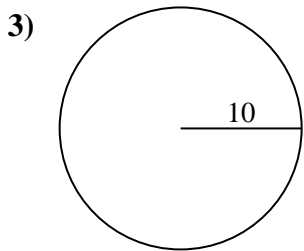
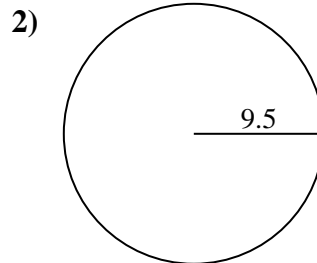
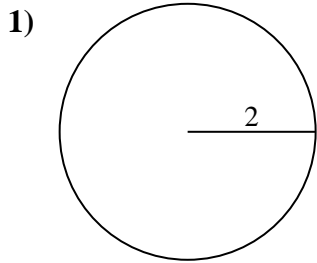


Respuestas

- 1. _____
- 2. _____
- 3. _____
- 4. _____
- 5. _____
- 6. _____
- 7. _____
- 8. _____
- 9. _____
- 10. _____



Encuentra la circunferencia de cada círculo. Los círculos no están a escala.

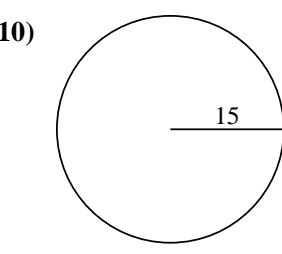
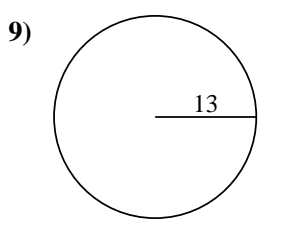
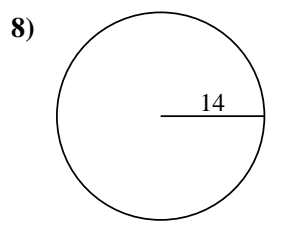
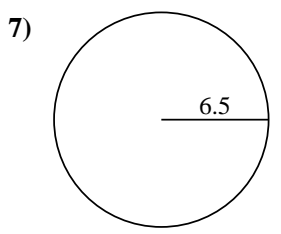
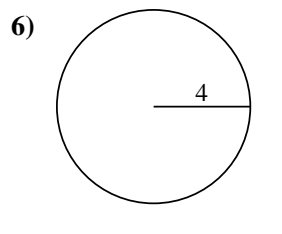
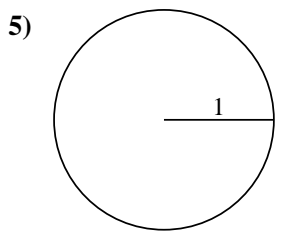
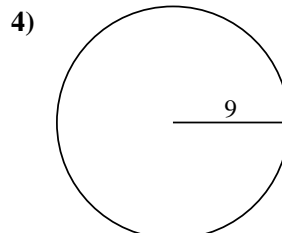
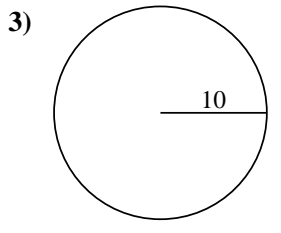
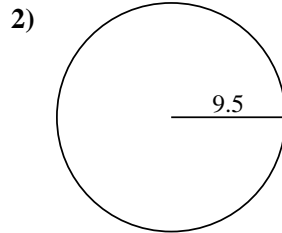
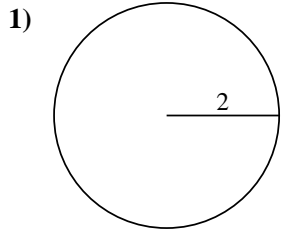
**Respuestas**1. 12.57 cm2. 59.69 cm3. 62.83 cm4. 56.55 cm5. 6.28 cm6. 25.13 cm7. 40.84 cm8. 87.96 cm9. 81.68 cm10. 94.25 cm



Encuentra la circunferencia de cada círculo. Los círculos no están a escala.

56.55 cm	81.68 cm	87.96 cm	40.84 cm	25.13 cm
6.28 cm	62.83 cm	59.69 cm	12.57 cm	94.25 cm

Respuestas



1. _____
2. _____
3. _____
4. _____
5. _____
6. _____
7. _____
8. _____
9. _____
10. _____