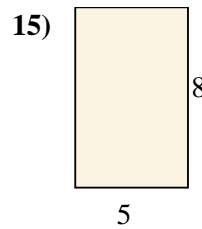
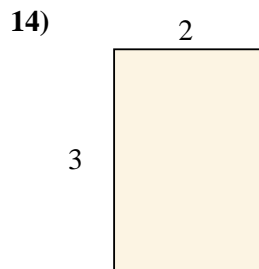
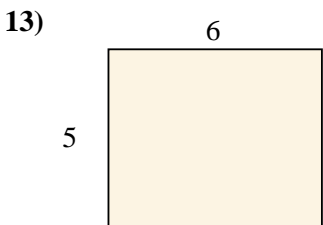
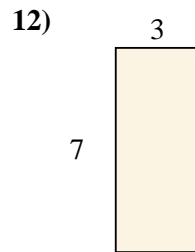
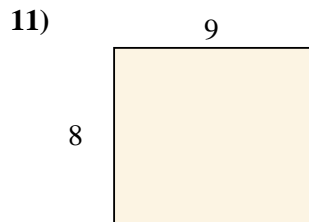
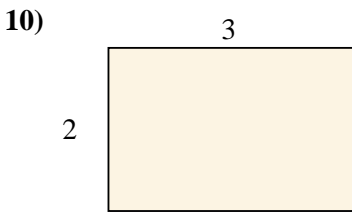
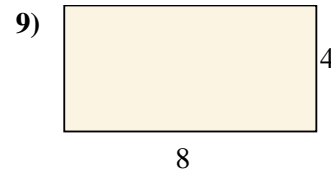
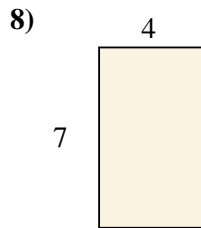
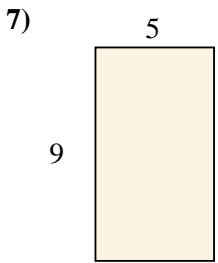
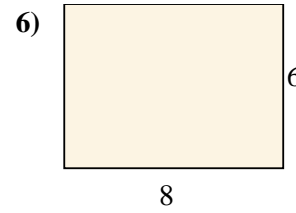
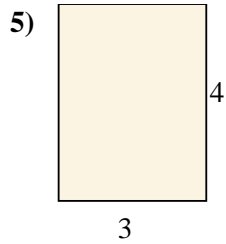
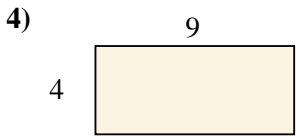
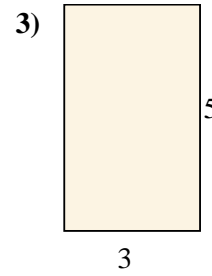
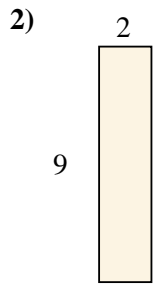
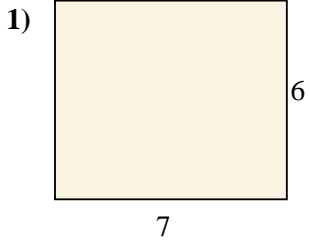




Encuentra el área de los rectángulos mostrados.



**Respuestas**

1. \_\_\_\_\_

2. \_\_\_\_\_

3. \_\_\_\_\_

4. \_\_\_\_\_

5. \_\_\_\_\_

6. \_\_\_\_\_

7. \_\_\_\_\_

8. \_\_\_\_\_

9. \_\_\_\_\_

10. \_\_\_\_\_

11. \_\_\_\_\_

12. \_\_\_\_\_

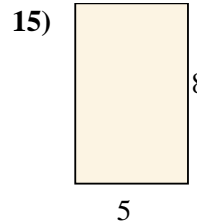
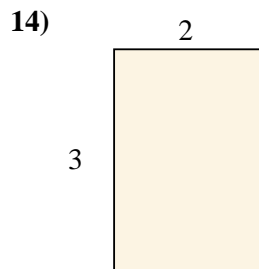
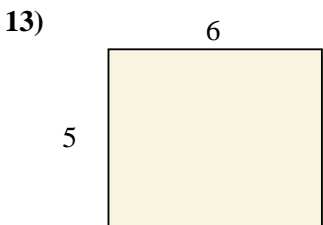
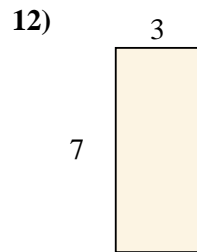
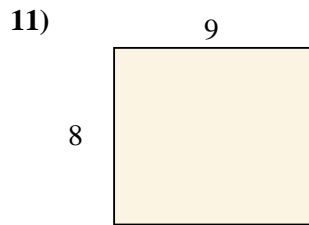
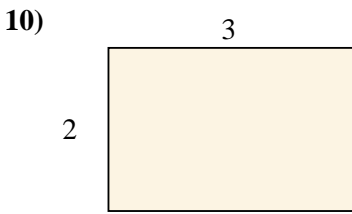
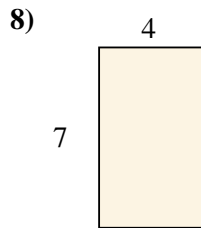
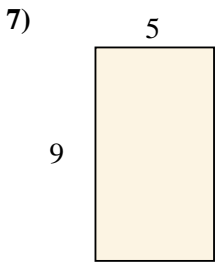
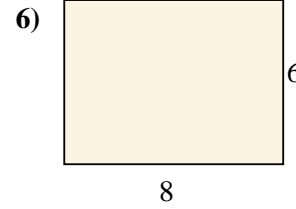
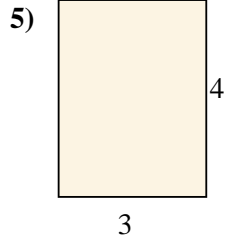
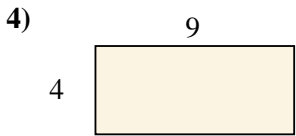
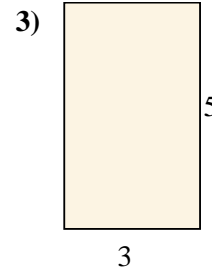
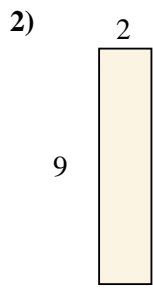
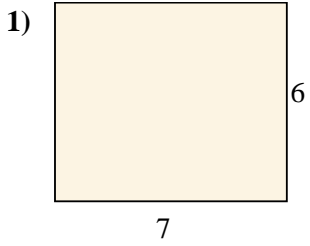
13. \_\_\_\_\_

14. \_\_\_\_\_

15. \_\_\_\_\_



Encuentra el área de los rectángulos mostrados.



**Respuestas**

1. 42 cm<sup>2</sup>

2. 18 cm<sup>2</sup>

3. 15 cm<sup>2</sup>

4. 36 cm<sup>2</sup>

5. 12 cm<sup>2</sup>

6. 48 cm<sup>2</sup>

7. 45 cm<sup>2</sup>

8. 28 cm<sup>2</sup>

9. 32 cm<sup>2</sup>

10. 6 cm<sup>2</sup>

11. 72 cm<sup>2</sup>

12. 21 cm<sup>2</sup>

13. 30 cm<sup>2</sup>

14. 6 cm<sup>2</sup>

15. 40 cm<sup>2</sup>