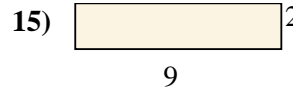
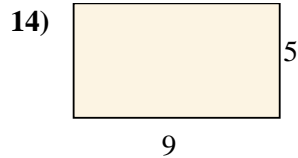
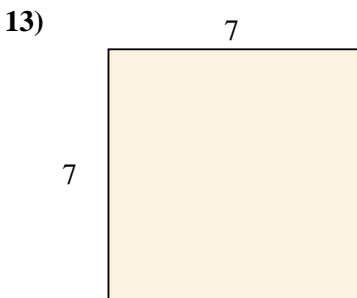
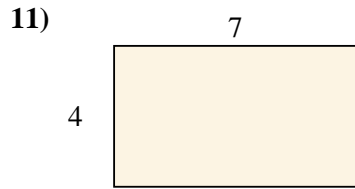
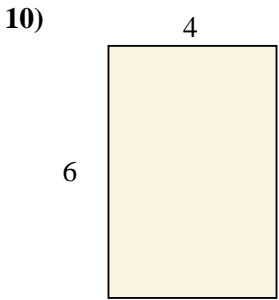

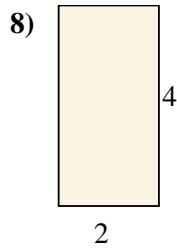
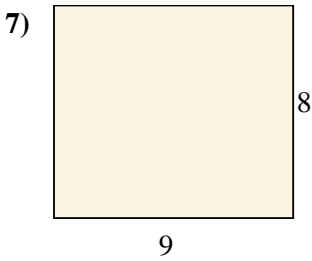
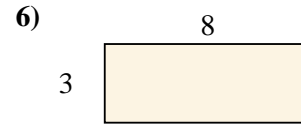
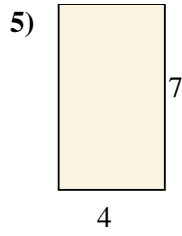
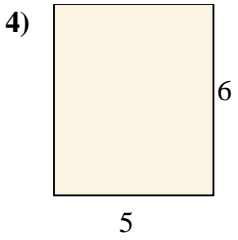
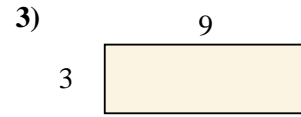
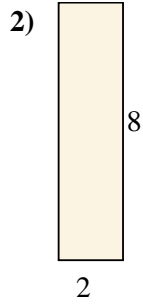
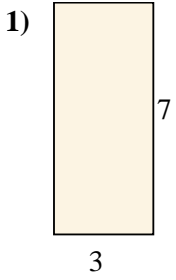




Encuentra el área de los rectángulos mostrados.

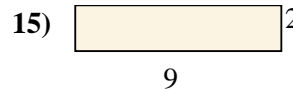
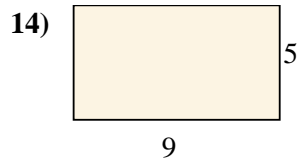
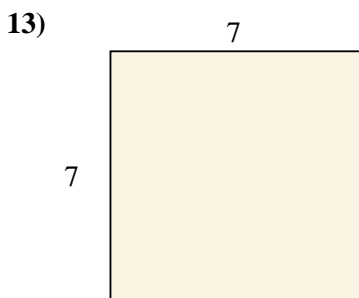
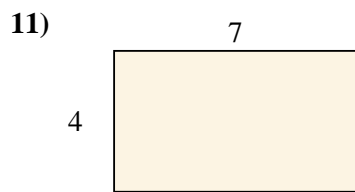
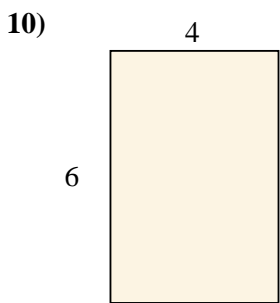

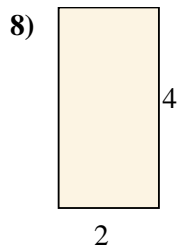
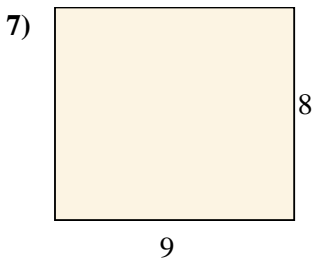
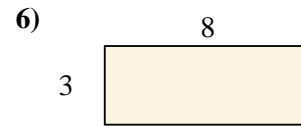
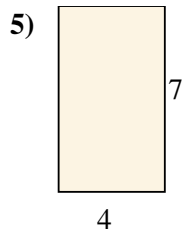
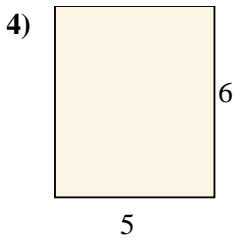
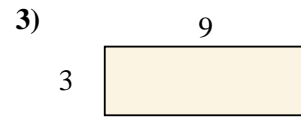
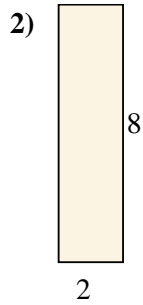
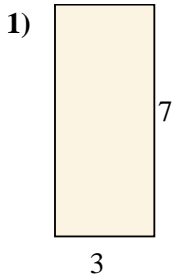


Respuestas

1. _____
2. _____
3. _____
4. _____
5. _____
6. _____
7. _____
8. _____
9. _____
10. _____
11. _____
12. _____
13. _____
14. _____
15. _____



Encuentra el área de los rectángulos mostrados.



Respuestas

1. 21 cm²

2. 16 cm²

3. 27 cm²

4. 30 cm²

5. 28 cm²

6. 24 cm²

7. 72 cm²

8. 8 cm²

9. 24 cm²

10. 24 cm²

11. 28 cm²

12. 14 cm²

13. 49 cm²

14. 45 cm²

15. 18 cm²