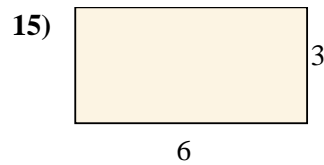
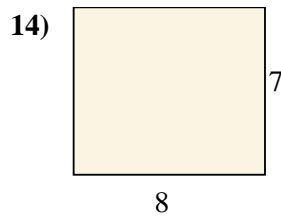
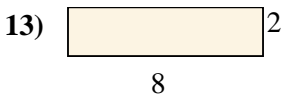
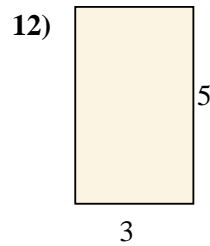
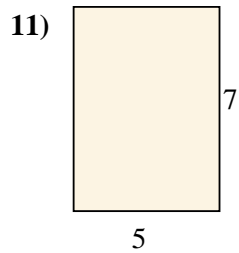
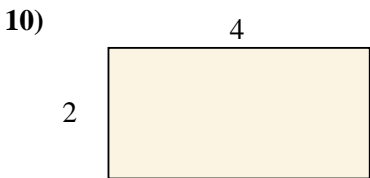
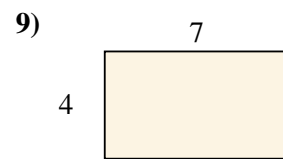
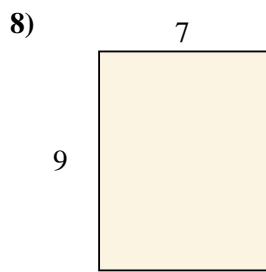
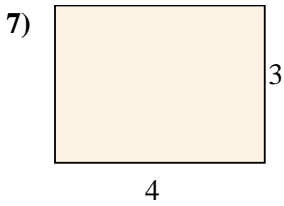
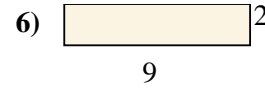
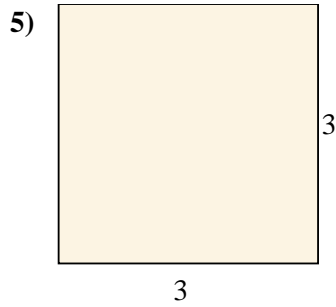
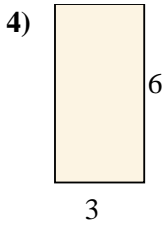
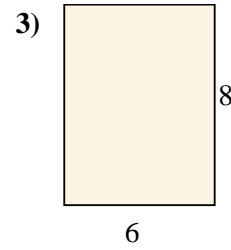
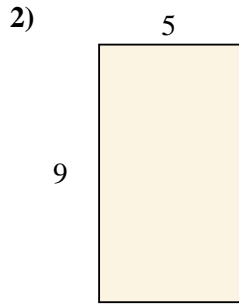
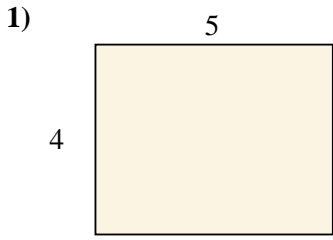




Encuentra el área de los rectángulos mostrados.

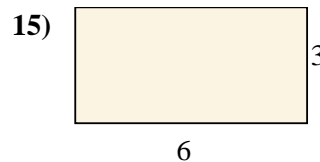
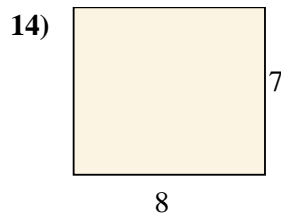
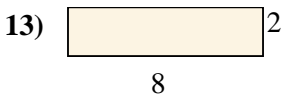
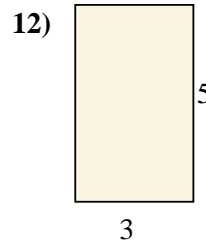
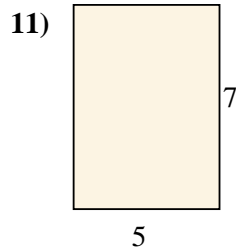
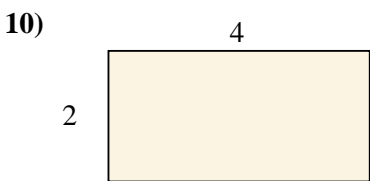
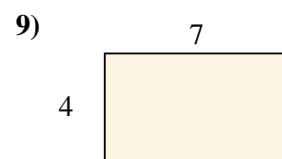
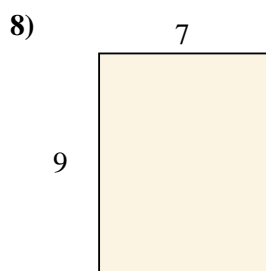
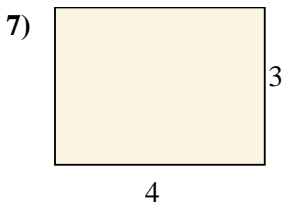
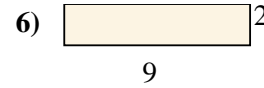
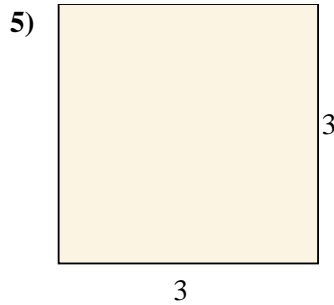
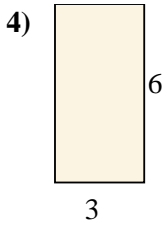
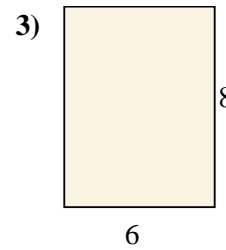
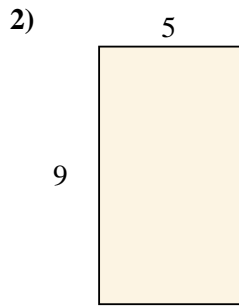
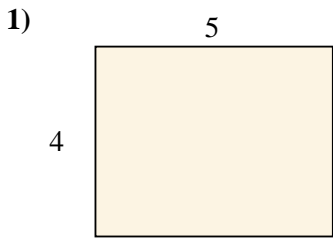


**Respuestas**

1. \_\_\_\_\_
2. \_\_\_\_\_
3. \_\_\_\_\_
4. \_\_\_\_\_
5. \_\_\_\_\_
6. \_\_\_\_\_
7. \_\_\_\_\_
8. \_\_\_\_\_
9. \_\_\_\_\_
10. \_\_\_\_\_
11. \_\_\_\_\_
12. \_\_\_\_\_
13. \_\_\_\_\_
14. \_\_\_\_\_
15. \_\_\_\_\_



Encuentra el área de los rectángulos mostrados.



**Respuestas**

1. 20 cm<sup>2</sup>

2. 45 cm<sup>2</sup>

3. 48 cm<sup>2</sup>

4. 18 cm<sup>2</sup>

5. 9 cm<sup>2</sup>

6. 18 cm<sup>2</sup>

7. 12 cm<sup>2</sup>

8. 63 cm<sup>2</sup>

9. 28 cm<sup>2</sup>

10. 8 cm<sup>2</sup>

11. 35 cm<sup>2</sup>

12. 15 cm<sup>2</sup>

13. 16 cm<sup>2</sup>

14. 56 cm<sup>2</sup>

15. 18 cm<sup>2</sup>