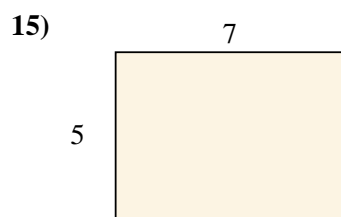
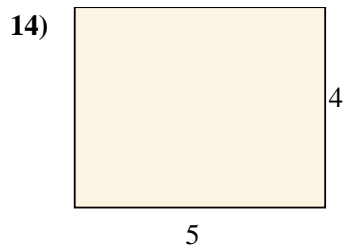
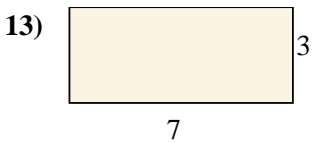
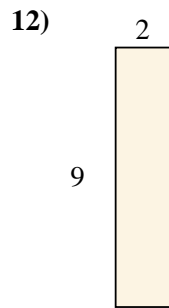
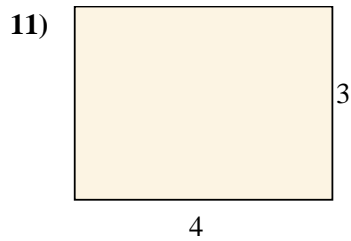
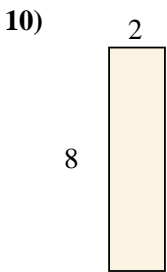
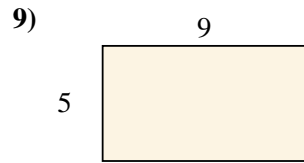
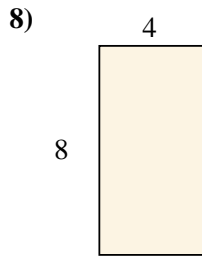
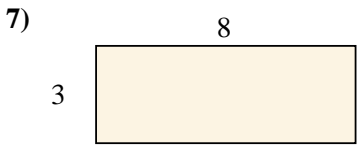

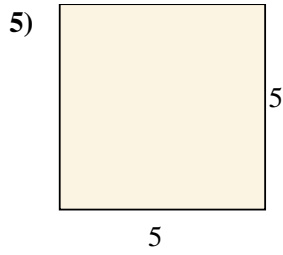
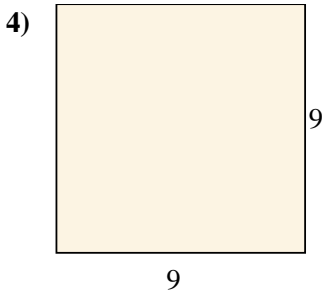
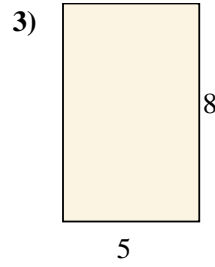
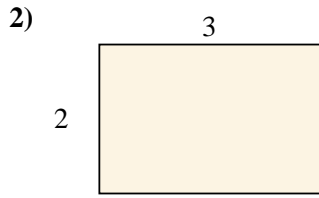
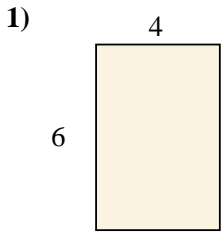




Encuentra el área de los rectángulos mostrados.

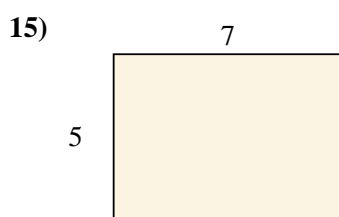
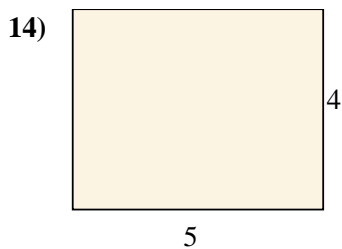
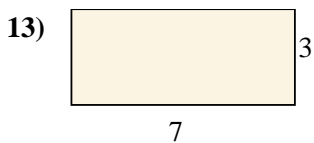
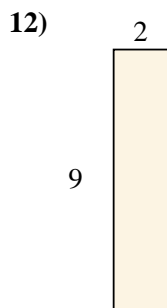
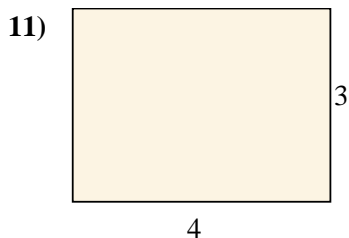
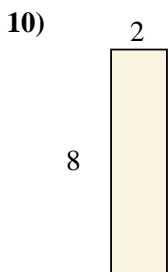
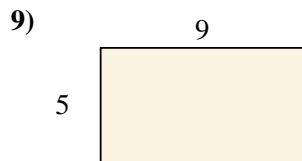
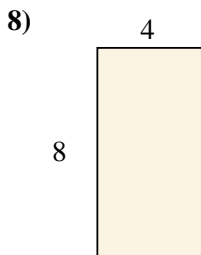
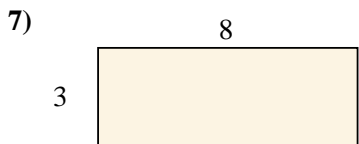

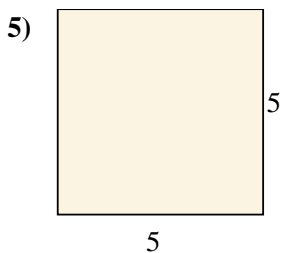
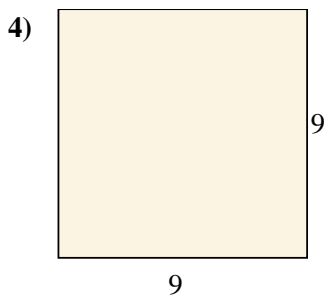
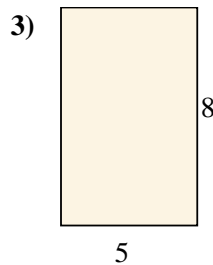
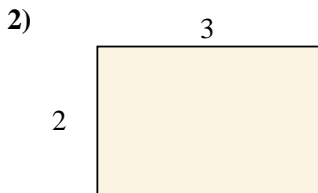
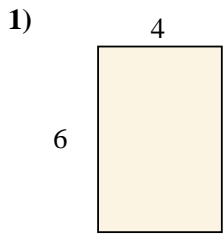
**Respuestas**



1. \_\_\_\_\_
2. \_\_\_\_\_
3. \_\_\_\_\_
4. \_\_\_\_\_
5. \_\_\_\_\_
6. \_\_\_\_\_
7. \_\_\_\_\_
8. \_\_\_\_\_
9. \_\_\_\_\_
10. \_\_\_\_\_
11. \_\_\_\_\_
12. \_\_\_\_\_
13. \_\_\_\_\_
14. \_\_\_\_\_
15. \_\_\_\_\_



Encuentra el área de los rectángulos mostrados.



**Respuestas**

1. 24 cm<sup>2</sup>

2. 6 cm<sup>2</sup>

3. 40 cm<sup>2</sup>

4. 81 cm<sup>2</sup>

5. 25 cm<sup>2</sup>

6. 24 cm<sup>2</sup>

7. 24 cm<sup>2</sup>

8. 32 cm<sup>2</sup>

9. 45 cm<sup>2</sup>

10. 16 cm<sup>2</sup>

11. 12 cm<sup>2</sup>

12. 18 cm<sup>2</sup>

13. 21 cm<sup>2</sup>

14. 20 cm<sup>2</sup>

15. 35 cm<sup>2</sup>