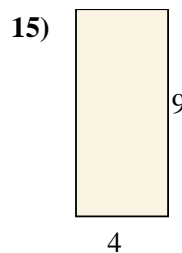
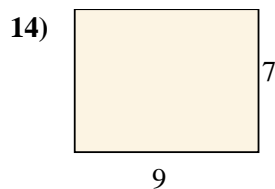
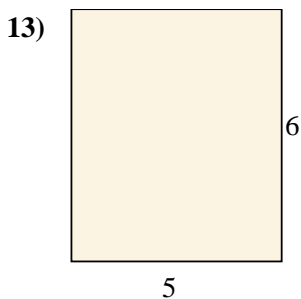
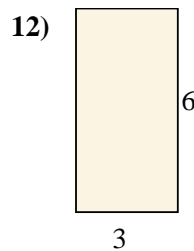
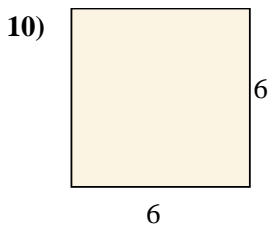
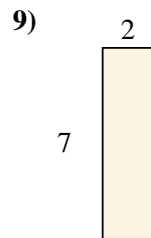

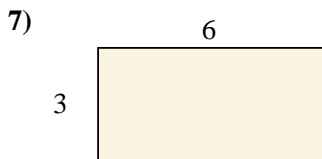
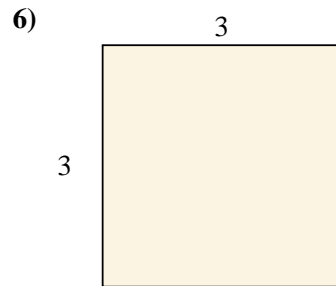
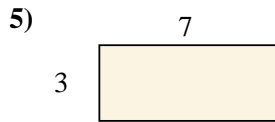
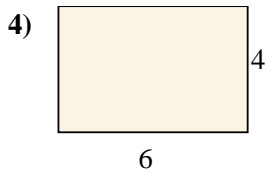
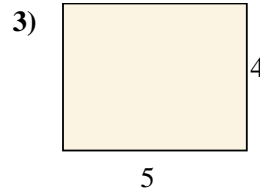
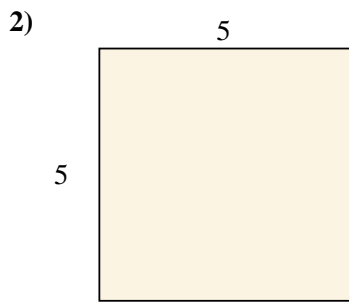
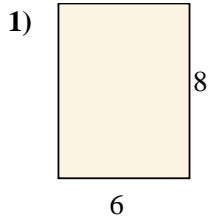




Encuentra el área de los rectángulos mostrados.

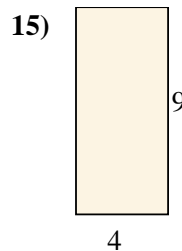
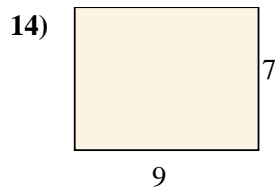
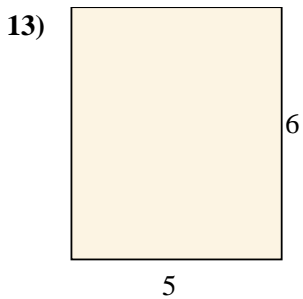
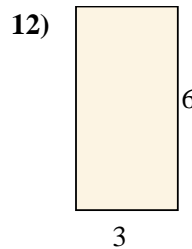
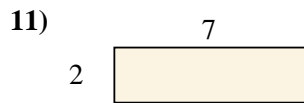
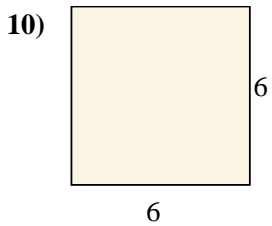
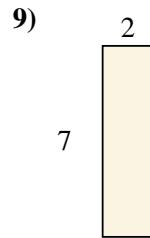
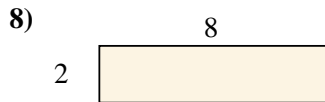
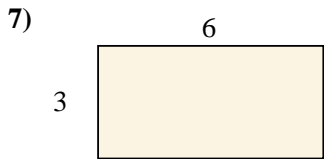
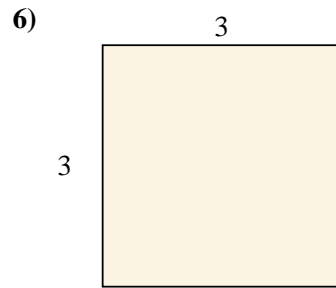
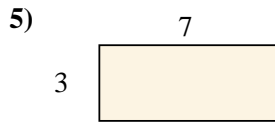
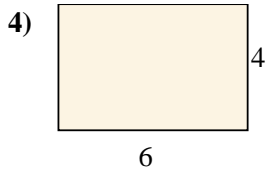
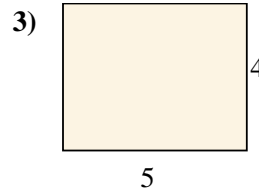
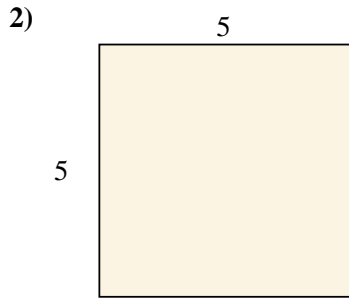
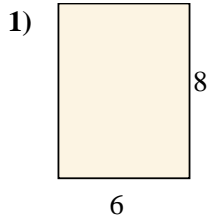


**Respuestas**

1. \_\_\_\_\_
2. \_\_\_\_\_
3. \_\_\_\_\_
4. \_\_\_\_\_
5. \_\_\_\_\_
6. \_\_\_\_\_
7. \_\_\_\_\_
8. \_\_\_\_\_
9. \_\_\_\_\_
10. \_\_\_\_\_
11. \_\_\_\_\_
12. \_\_\_\_\_
13. \_\_\_\_\_
14. \_\_\_\_\_
15. \_\_\_\_\_



Encuentra el área de los rectángulos mostrados.



**Respuestas**

1. 48 cm<sup>2</sup>

2. 25 cm<sup>2</sup>

3. 20 cm<sup>2</sup>

4. 24 cm<sup>2</sup>

5. 21 cm<sup>2</sup>

6. 9 cm<sup>2</sup>

7. 18 cm<sup>2</sup>

8. 16 cm<sup>2</sup>

9. 14 cm<sup>2</sup>

10. 36 cm<sup>2</sup>

11. 14 cm<sup>2</sup>

12. 18 cm<sup>2</sup>

13. 30 cm<sup>2</sup>

14. 63 cm<sup>2</sup>

15. 36 cm<sup>2</sup>