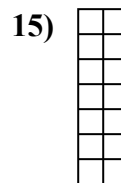

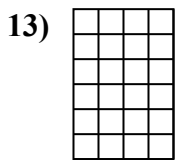
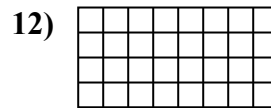
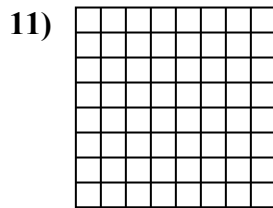
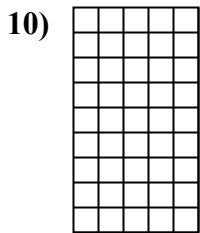
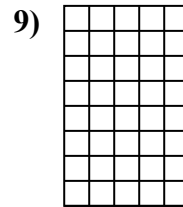
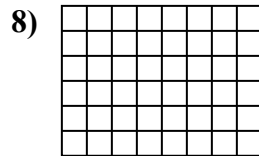
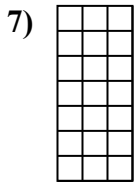
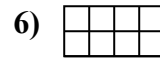
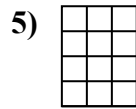
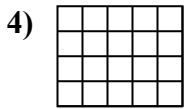
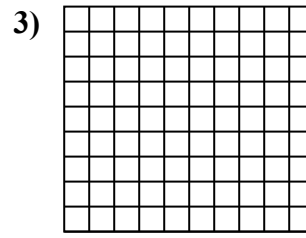
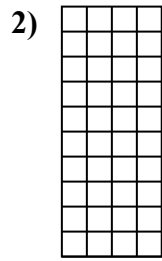
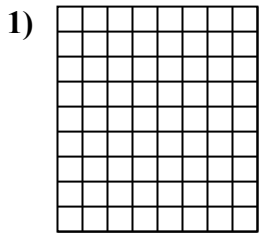




Determina el área. Cada $\square = 1$ unidad (u^2)

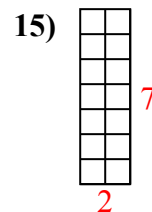
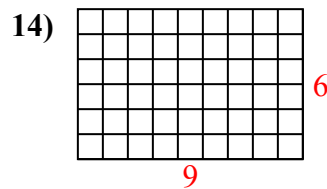
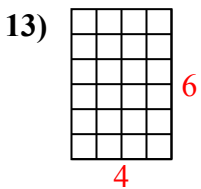
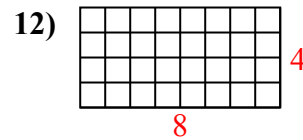
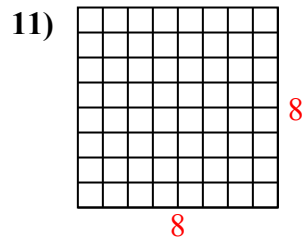
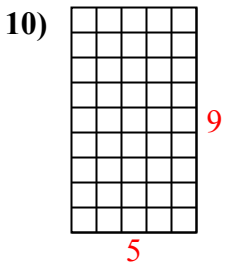
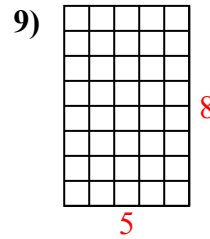
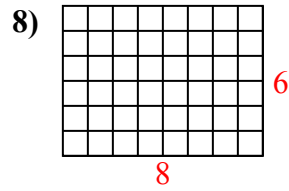
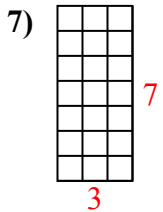
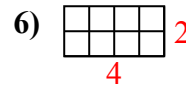
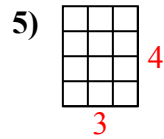
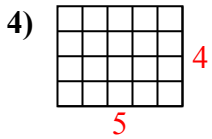
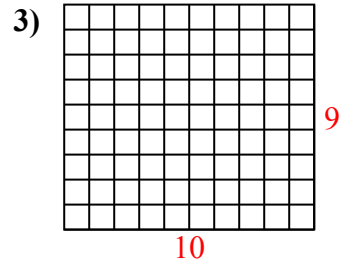
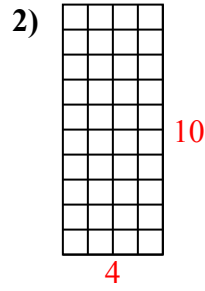
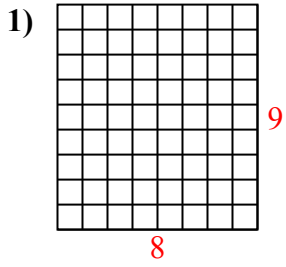


Respuestas

1. _____
2. _____
3. _____
4. _____
5. _____
6. _____
7. _____
8. _____
9. _____
10. _____
11. _____
12. _____
13. _____
14. _____
15. _____



Determina el área. Cada $\square = 1$ unidad (u^2)



Respuestas

1. 72 u^2

2. 40 u^2

3. 90 u^2

4. 20 u^2

5. 12 u^2

6. 8 u^2

7. 21 u^2

8. 48 u^2

9. 40 u^2

10. 45 u^2

11. 64 u^2

12. 32 u^2

13. 24 u^2

14. 54 u^2

15. 14 u^2